



Messe die Länge und Höhe jedes Blocks in Inch und Zentimeter.

Bsp)



**Antworte**

**n**

Bsp. 2 1/2 **1** **6,4** **2,5**


1. \_\_\_\_\_

2. \_\_\_\_\_


3. \_\_\_\_\_

4. \_\_\_\_\_


1)



2)



3)



4)






Messe die Länge und Höhe jedes Blocks in Inch und Zentimeter.


Bsp)




1)



2)



3)



4)



**Antworte**

n

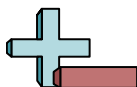
Bsp.  $2\frac{1}{2}$  **1** **6,4** **2,5**

1.  $4\frac{1}{2}$   $1\frac{1}{2}$  **11,4** **3,8**

2. **3** **1** **7,6** **2,5**

3. **5**  $1\frac{1}{2}$  **12,7** **3,8**

4. **2**  $0\frac{1}{2}$  **5,1** **1,3**




Messe die Länge und Höhe jedes Blocks in Inch und Zentimeter.

Bsp)



1)



2)



3)



4)



**Antworte**

**n**

Bsp. 1 1 1/2 2,5 3,8

1. \_\_\_\_\_

2. \_\_\_\_\_


3. \_\_\_\_\_

4. \_\_\_\_\_



Messe die Länge und Höhe jedes Blocks in Inch und Zentimeter.

Bsp)



**Antworte**

n

Bsp. 1 1 1/2 2,5 3,8


1. 1 1/2 1 1/2 3,8 3,8

2. 5 1 12,7 2,5


3. 5 1/2 0 1/2 14 1,3

4. 0 1/2 1 1/2 1,3 3,8

1)




2)



3)



4)






Messe die Länge und Höhe jedes Blocks in Inch und Zentimeter.

Bsp)



1)



2)



3)



4)



**Antworte**

**n**

Bsp. 4 1/2 **1** 11,4 **2,5**

1. \_\_\_\_\_

2. \_\_\_\_\_

3. \_\_\_\_\_

4. \_\_\_\_\_



Messe die Länge und Höhe jedes Blocks in Inch und Zentimeter.

Bsp)



**Antworte**

n

Bsp.  $4\frac{1}{2}$  **1** 11,4 2,5


1.  $5\frac{1}{2}$   $1\frac{1}{2}$  **14** **3,8**

2. **1**  $0\frac{1}{3}$  2,5 **1,3**

3.  $1\frac{1}{2}$   $0\frac{1}{2}$  **3,8** **1,3**

4. **4**  $1\frac{1}{2}$  10,2 **3,8**

1)



2)



3)




4)





Messe die Länge und Höhe jedes Blocks in Inch und Zentimeter.

Bsp)



1)



2)



3)



4)



**Antworte**

**n**

Bsp. 3 1 7,6 2,5

1. \_\_\_\_\_

2. \_\_\_\_\_


3. \_\_\_\_\_

4. \_\_\_\_\_



Messe die Länge und Höhe jedes Blocks in Inch und Zentimeter.

Bsp)



**Antworte**

n

Bsp. 3 1 7,6 2,5

1. 5 0 1/2 12,7 1,3

2. 1 1/2 0 1/2 3,8 1,3

3. 0 1/2 1 1,3 2,5

4. 4 1/2 0 1/2 11,4 1,3


1)



2)



3)




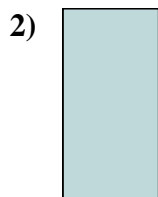
4)







Messe die Länge und Höhe jedes Blocks in Inch und Zentimeter.



**Antworte**

**n**

Bsp. 3 0 1/2 7,6 1,3

1. \_\_\_\_\_

2. \_\_\_\_\_

3. \_\_\_\_\_

4. \_\_\_\_\_



Messe die Länge und Höhe jedes Blocks in Inch und Zentimeter.

Bsp)



Antworte

n

Bsp. 3 0 1/2 7,6 1,3


1. 1 1/2 1 3,8 2,5

2. 0 1/2 1 1,3 2,5


3. 5 1/2 1 14 2,5

4. 1 1 1/2 2,5 3,8

1)




2)



3)



4)





Messe die Länge und Höhe jedes Blocks in Inch und Zentimeter.

Bsp)



**Antworte**

**n**

Bsp. 5 1/2 0 1/2 **14** **1,3**


1. \_\_\_\_\_

2. \_\_\_\_\_


3. \_\_\_\_\_

4. \_\_\_\_\_


1)




2)



3)



4)





Messe die Länge und Höhe jedes Blocks in Inch und Zentimeter.

Bsp)



**Antworte**

n

Bsp. 5 1/2 0 1/2 **14** **1,3**


1. 3 1/2 1 1/2 **8,9** **3,8**

2. **4** 0 1/2 **10,2** **1,3**

3. **5** **1** 12,7 2,5

4. **1** **1** 2,5 2,5


1)




2)



3)


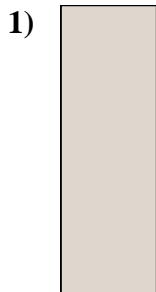


4)





Messe die Länge und Höhe jedes Blocks in Inch und Zentimeter.



**Antworte**

**n**

Bsp. 4 0 1/2 10,2 1,3

1. \_\_\_\_\_

2. \_\_\_\_\_

3. \_\_\_\_\_

4. \_\_\_\_\_



Messe die Länge und Höhe jedes Blocks in Inch und Zentimeter.

Bsp)



Antworte

n

Bsp. 4 0 1/2 10,2 1,3


1. 0 1/2 1 1/2 1,3 3,8

2. 1 1/2 0 1/2 3,8 1,3

3. 5 1/2 0 1/2 14 1,3

4. 3 1 1/2 7,6 3,8

1)




2)



3)



4)





Messe die Länge und Höhe jedes Blocks in Inch und Zentimeter.

Bsp)



**Antworte**

**n**

Bsp. 3 1/2 0 1/2 **8,9** **1,3**


1. \_\_\_\_\_

2. \_\_\_\_\_

3. \_\_\_\_\_

4. \_\_\_\_\_

1)




2)



3)



4)





Messe die Länge und Höhe jedes Blocks in Inch und Zentimeter.



**Antworte**

**n**


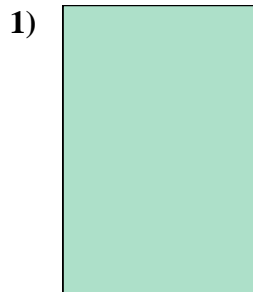
Bsp. 3 1/2 0 1/2 8,9 1,3

1. 1 1 1/2 2,5 3,8

2. 1 1/2 1 3,8 2,5

3. 5 1/2 1 1/2 14 3,8

4. 5 1 12,7 2,5







Messe die Länge und Höhe jedes Blocks in Inch und Zentimeter.

Bsp)



1)



2)



3)



4)



**Antworte**

**n**

Bsp. 4 1 1/2 10,2 3,8

1. \_\_\_\_\_

2. \_\_\_\_\_

3. \_\_\_\_\_

4. \_\_\_\_\_



Messe die Länge und Höhe jedes Blocks in Inch und Zentimeter.


Bsp)




1)



2)



3)



4)



**Antworte**

**n**

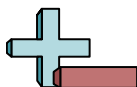
Bsp. **4** **1 1/2** **10,2** **3,8**

1. **2** **1 1/2** **5,1** **3,8**

2. **3** **0 1/2** **7,6** **1,3**

3. **3 1/2** **1 1/2** **8,9** **3,8**

4. **0 1/2** **0 1/2** **1,3** **1,3**



Messe die Länge und Höhe jedes Blocks in Inch und Zentimeter.



**Antworte**

**n**

Bsp. 1 0 1/2 2,5 1,3

1. \_\_\_\_\_




2. \_\_\_\_\_

3. \_\_\_\_\_

4. \_\_\_\_\_



Messe die Länge und Höhe jedes Blocks in Inch und Zentimeter.



**Antworte**

n

Bsp. 1 0 1/2 2,5 1,3

1. 3 1/2 0 1/2 8,9 1,3

2. 5 1/2 1 14 2,5

3. 5 1 12,7 2,5

4. 4 1/2 1 11,4 2,5