
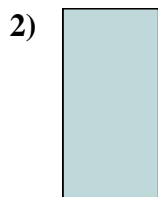




Messe die Länge und Höhe jedes Blocks in Inch und Zentimeter.



**Antworte**

**n**

Bsp. 3 0 1/2 7,6 1,3

1. \_\_\_\_\_

2. \_\_\_\_\_

3. \_\_\_\_\_

4. \_\_\_\_\_



Messe die Länge und Höhe jedes Blocks in Inch und Zentimeter.

Bsp)



Antworte

n

Bsp. 3 0 1/2 7,6 1,3


1. 1 1/2 1 3,8 2,5

2. 0 1/2 1 1,3 2,5


3. 5 1/2 1 14 2,5

4. 1 1 1/2 2,5 3,8

1)



2)



3)



4)

