




Messe die Länge jedes Streifens in Inch und Zentimeter.

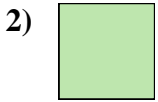


Antworten

Bsp. 1 2-3



1. _____



2. _____



3. _____



4. _____



5. _____



6. _____



7. _____




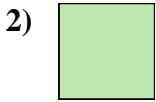

8. _____



9. _____



Messe die Länge jedes Streifens in Inch und Zentimeter.



Antworten

Bsp.	<u>1</u>	<u>2 - 3</u>
1.	<u>2 1/2</u>	<u>6 - 7</u>
2.	<u>0 1/2</u>	<u>1 - 2</u>
3.	<u>2</u>	<u>5 - 6</u>
4.	<u>4</u>	<u>10 - 11</u>
5.	<u>3 1/2</u>	<u>8 - 9</u>
6.	<u>4 1/2</u>	<u>11 - 12</u>
7.	<u>1 1/2</u>	<u>3 - 4</u>
8.	<u>5 1/2</u>	<u>13 - 14</u>
9.	<u>3</u>	<u>7 - 8</u>