



Messe die Länge jedes Streifens in Inch und Zentimeter.

Bsp)



Antworten

Bsp. 5 1/2 13 - 14

1)



1. _____

2)



2. _____

3)



3. _____

4)




4. _____

5)



5. _____

6)



6. _____

7)



7. _____

8)



8. _____

9)



9. _____



Messe die Länge jedes Streifens in Inch und Zentimeter.

Bsp)



Antworten


Bsp. 5 1/2 13 - 14

1)



1. 3 1/2 8 - 9

2)



2. 4 10 - 11

3)



3. 5 12 - 13

4)




4. 1 2 - 3

5)



5. 3 7 - 8

6)



6. 0 1/2 1 - 2

7)



7. 1 1/2 3 - 4

8)



8. 2 5 - 6

9)



9. 4 1/2 11 - 12