

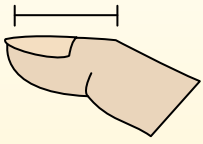


Stelle fest, welcher Buchstabe am besten die Länge / Höhe darstellt.

Antworten

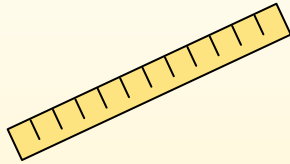
Polegadas (in)

Una pulgada es aproximadamente la distancia de la última articulación de su dedo.



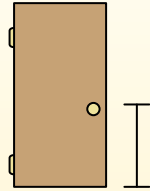
Pie (pies)

Um pé mede 12 polegadas. O comprimento de uma régua.



Jarda (jd)

1 jarda é o mesmo que 3 pés. Do chão até a maçaneta da porta são cerca de 1 jarda.




Milla (mi)

Uma milha equivale a 5.280 pés. A maioria das estradas principais tem pelo menos uma milha de comprimento.



1. _____
2. _____
3. _____
4. _____
5. _____
6. _____
7. _____
8. _____
9. _____


1)



Popcorn

- A. 1 inch
- B. 3 feet
- C. 1 mile
- D. 7 inches

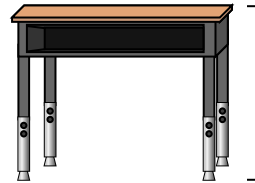
2)



Lutscher

- A. 1 mile
- B. 1 foot
- C. 5 inches
- D. 3 inches

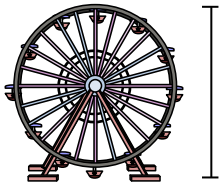
3)



Schreibtisch

- A. 2 yards
- B. 2 feet
- C. 11 inches
- D. 6 inches

4)



Riesenrad

- A. 6 yards
- B. 1 mile
- C. 75 feet
- D. 100 inches


5)



Zahnbürste

- A. 10 feet
- B. 1 yard
- C. 7 inches
- D. 4 inches

6)



Dose Soda

- A. 1 yard
- B. 4 inches
- C. 1 foot
- D. 1 inch

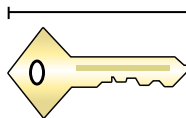
7)



Frosch

- A. 2 feet
- B. 1 foot
- C. 3 inches
- D. 9 inches

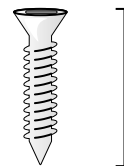
8)



Taste

- A. 5 feet
- B. 2 inches
- C. 6 inches
- D. 2 yards

9)



Schrauben

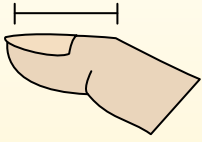
- A. 1 yard
- B. 10 inches
- C. 8 inches
- D. 1 inch



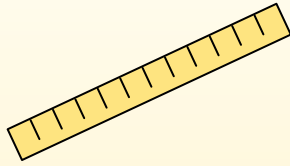
Stelle fest, welcher Buchstabe am besten die Länge / Höhe darstellt.

Antworten**Polegadas (in)**

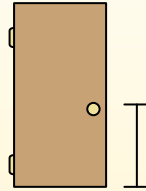
Una pulgada es aproximadamente la distancia de la última articulación de su dedo.

**Pie (pies)**

Um pé mede 12 polegadas. O comprimento de uma régua.

**Jarda (jd)**


1 jarda é o mesmo que 3 pés. Do chão até a maçaneta da porta são cerca de 1 jarda.

**Milla (mi)**

Uma milha equivale a 5.280 pés. A maioria das estradas principais tem pelo menos uma milha de comprimento.




1)



Popcorn

- A. 1 inch
- B. 3 feet
- C. 1 mile
- D. 7 inches

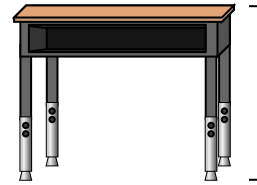
2)



Lutscher

- A. 1 mile
- B. 1 foot
- C. 5 inches
- D. 3 inches


3)



Schreibtisch

- A. 2 yards
- B. 2 feet
- C. 11 inches
- D. 6 inches

4)



Riesenrad

- A. 6 yards
- B. 1 mile
- C. 75 feet
- D. 100 inches


5)



Zahnbürste

- A. 10 feet
- B. 1 yard
- C. 7 inches
- D. 4 inches

6)



Dose Soda

- A. 1 yard
- B. 4 inches
- C. 1 foot
- D. 1 inch

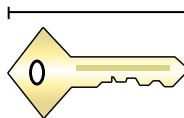
7)



Frosch

- A. 2 feet
- B. 1 foot
- C. 3 inches
- D. 9 inches

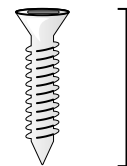
8)



Taste

- A. 5 feet
- B. 2 inches
- C. 6 inches
- D. 2 yards

9)



Schrauben

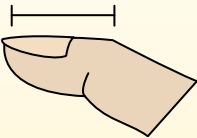

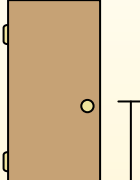

- A. 1 yard
- B. 10 inches
- C. 8 inches
- D. 1 inch

1. **A**2. **C**3. **B**4. **C**5. **C**6. **B**7. **C**8. **B**9. **D**



Stelle fest, welcher Buchstabe am besten die Länge / Höhe darstellt.

Antworten

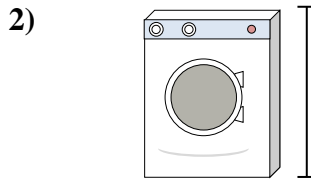
Polegadas (in)	Pie (pies)	Jarda (jd)	Milla (mi)
Una pulgada es aproximadamente la distancia de la última articulación de su dedo.	Um pé mede 12 polegadas. O comprimento de uma régua.	1 jarda é o mesmo que 3 pés. Do chão até a maçaneta da porta são cerca de 1 jarda.	Uma milha equivale a 5.280 pés. A maioria das estradas principais tem pelo menos uma milha de comprimento.
			

1. _____
2. _____
3. _____
4. _____
5. _____
6. _____
7. _____
8. _____
9. _____



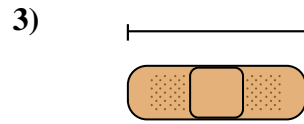
Dose Bohnen

- A. 1 mile
- B. 2 yards
- C. 4 inches
- D. 4 feet




Waschmaschine

- A. 1 foot
- B. 4 inches
- C. 2 yards
- D. 3 feet




Binde

- A. 2 feet
- B. 2 miles
- C. 3 inches
- D. 1 yard




Berg

- A. 10 yards
- B. 20 feet
- C. 2 miles
- D. 300 inches




Brotscheibe

- A. 4 inches
- B. 4 feet
- C. 2 yards
- D. 10 inches




Elefant

- A. 5 feet
- B. 4 yards
- C. 1 mile
- D. 18 inches



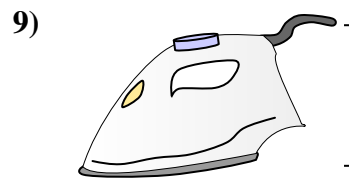
Hund

- A. 4 yards
- B. 2 feet
- C. 2 yards
- D. 4 inches



Notizbuch Papier

- A. 11 inches
- B. 2 feet
- C. 6 inches
- D. 1 yard



Bügeleisen

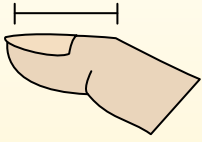
- A. 8 feet
- B. 2 feet
- C. 15 inches
- D. 6 inches



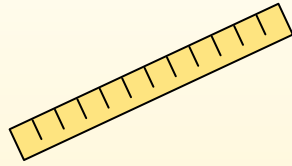
Stelle fest, welcher Buchstabe am besten die Länge / Höhe darstellt.

Antworten**Polegadas (in)**

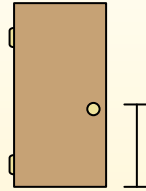
Una pulgada es aproximadamente la distancia de la última articulación de su dedo.

**Pie (pies)**

Um pé mede 12 polegadas. O comprimento de uma régua.

**Jarda (jd)**

1 jarda é o mesmo que 3 pés. Do chão até a maçaneta da porta são cerca de 1 jarda.

**Milla (mi)**

Uma milha equivale a 5.280 pés. A maioria das estradas principais tem pelo menos uma milha de comprimento.

1. **C**2. **D**3. **C**4. **C**5. **A**6. **B**7. **B**8. **A**9. **D**

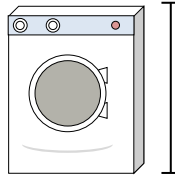
1)



Dose Bohnen

- A. 1 mile
- B. 2 yards
- C. 4 inches
- D. 4 feet

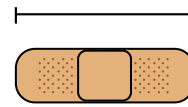
2)



Waschmaschine

- A. 1 foot
- B. 4 inches
- C. 2 yards
- D. 3 feet

3)



Binde

- A. 2 feet
- B. 2 miles
- C. 3 inches
- D. 1 yard


4)



Berg

- A. 10 yards
- B. 20 feet
- C. 2 miles
- D. 300 inches


5)



Brotscheibe

- A. 4 inches
- B. 4 feet
- C. 2 yards
- D. 10 inches

6)



Elefant


- A. 5 feet
- B. 4 yards
- C. 1 mile
- D. 18 inches

7)

Hund

- A. 4 yards
- B. 2 feet
- C. 2 yards
- D. 4 inches


8)



Notizbuch Papier

- A. 11 inches
- B. 2 feet
- C. 6 inches
- D. 1 yard

9)



Bügeleisen

- A. 8 feet
- B. 2 feet
- C. 15 inches
- D. 6 inches

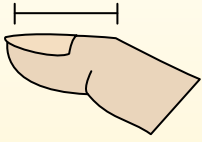


Stelle fest, welcher Buchstabe am besten die Länge / Höhe darstellt.

Antworten

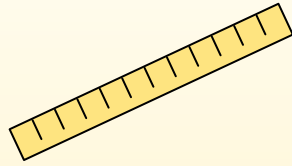
Polegadas (in)

Una pulgada es aproximadamente la distancia de la última articulación de su dedo.



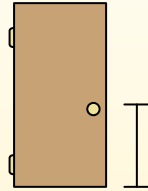
Pie (pies)

Um pé mede 12 polegadas. O comprimento de uma régua.



Jarda (jd)

1 jarda é o mesmo que 3 pés. Do chão até a maçaneta da porta são cerca de 1 jarda.



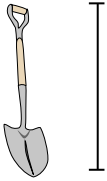
Milla (mi)

Uma milha equivale a 5.280 pés. A maioria das estradas principais tem pelo menos uma milha de comprimento.



1. _____
2. _____
3. _____
4. _____
5. _____
6. _____
7. _____
8. _____
9. _____

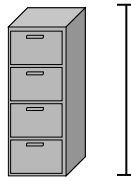
1)



Schaufel

- A. 4 feet
- B. 2 feet
- C. 3 yards
- D. 11 inches


2)



Aktenschrank

- A. 11 inches
- B. 2 feet
- C. 5 feet
- D. 1 foot


3)



Berg

- A. 10 yards
- B. 2 miles
- C. 20 feet
- D. 300 inches

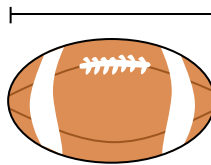
4)



Notizbuch Papier

- A. 2 feet
- B. 11 inches
- C. 6 inches
- D. 1 yard

5)



Fußball

- A. 11 inches
- B. 1 inch
- C. 2 feet
- D. 1 yard


6)



Stift

- A. 5 inches
- B. 1 foot
- C. 12 inches
- D. 5 yards

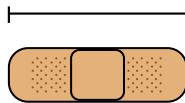
7)



Hammer

- A. 16 inches
- B. 1 inch
- C. 4 inches
- D. 1 yard

8)



Binde

- A. 3 inches
- B. 1 yard
- C. 2 feet
- D. 2 miles

9)



Popcorn

- A. 1 inch
- B. 1 mile
- C. 7 inches
- D. 3 feet

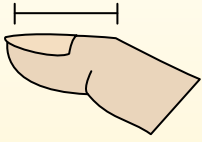


Stelle fest, welcher Buchstabe am besten die Länge / Höhe darstellt.

Antworten

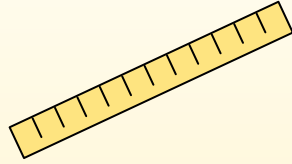
Polegadas (in)

Una pulgada es aproximadamente la distancia de la última articulación de su dedo.



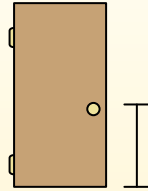
Pie (pies)

Um pé mede 12 polegadas. O comprimento de uma régua.



Jarda (jd)

1 jarda é o mesmo que 3 pés. Do chão até a maçaneta da porta são cerca de 1 jarda.



Milla (mi)

Uma milha equivale a 5.280 pés. A maioria das estradas principais tem pelo menos uma milha de comprimento.



1. **A**

2. **C**

3. **B**

4. **B**

5. **A**

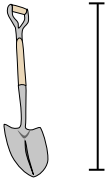
6. **A**

7. **A**

8. **A**

9. **A**

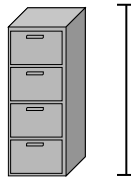
1)



Schaufel

- A. 4 feet
- B. 2 feet
- C. 3 yards
- D. 11 inches


2)



Aktenschrank

- A. 11 inches
- B. 2 feet
- C. 5 feet
- D. 1 foot


3)



Berg

- A. 10 yards
- B. 2 miles
- C. 20 feet
- D. 300 inches

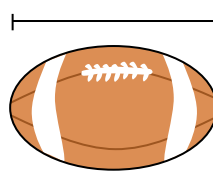
4)



Notizbuch Papier

- A. 2 feet
- B. 11 inches
- C. 6 inches
- D. 1 yard

5)



Fußball

- A. 11 inches
- B. 1 inch
- C. 2 feet
- D. 1 yard


6)



Stift

- A. 5 inches
- B. 1 foot
- C. 12 inches
- D. 5 yards

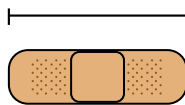
7)



Hammer

- A. 16 inches
- B. 1 inch
- C. 4 inches
- D. 1 yard

8)



Binde

- A. 3 inches
- B. 1 yard
- C. 2 feet
- D. 2 miles

9)



Popcorn

- A. 1 inch
- B. 1 mile
- C. 7 inches
- D. 3 feet

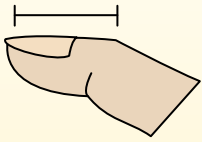


Stelle fest, welcher Buchstabe am besten die Länge / Höhe darstellt.

Antworten

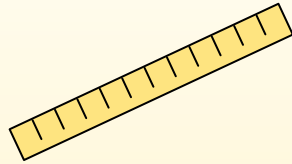
Polegadas (in)

Una pulgada es aproximadamente la distancia de la última articulación de su dedo.



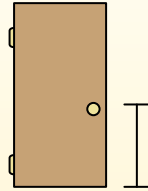
Pie (pies)

Um pé mede 12 polegadas. O comprimento de uma régua.



Jarda (jd)

1 jarda é o mesmo que 3 pés. Do chão até a maçaneta da porta são cerca de 1 jarda.




Milla (mi)

Uma milha equivale a 5.280 pés. A maioria das estradas principais tem pelo menos uma milha de comprimento.



1. _____
2. _____
3. _____
4. _____
5. _____
6. _____
7. _____
8. _____
9. _____

1)



Notizbuch Papier

- A. 1 yard
- B. 6 inches
- C. 2 feet
- D. 11 inches

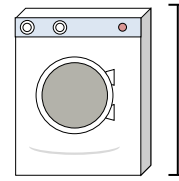
2)



Gallone Milch

- A. 11 feet
- B. 9 inches
- C. 6 inches
- D. 3 inches

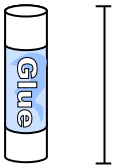
3)



Waschmaschine

- A. 4 inches
- B. 1 foot
- C. 3 feet
- D. 2 yards


4)



Klebestift

- A. 1 foot
- B. 3 inches
- C. 4 miles
- D. 10 inches

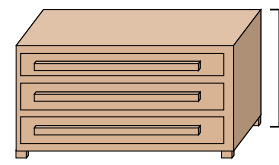
5)



Elefant

- A. 18 inches
- B. 4 yards
- C. 5 feet
- D. 1 mile

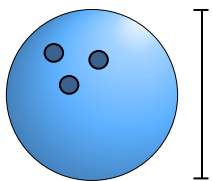
6)



Kommode

- A. 18 inches
- B. 12 inches
- C. 3 feet
- D. 3 yards

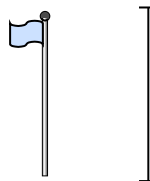
7)



Bowlingkugelhöhe

- A. 4 inches
- B. 1 yard
- C. 10 inches
- D. 10 feet

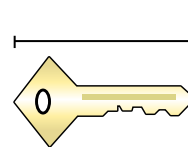
8)



Fahnenmast

- A. 1 mile
- B. 10 yards
- C. 12 inches
- D. 5 feet

9)



Taste

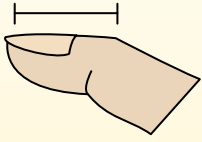
- A. 5 feet
- B. 2 inches
- C. 6 inches
- D. 2 yards



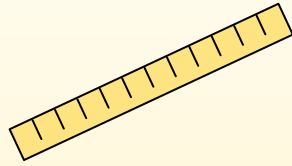
Stelle fest, welcher Buchstabe am besten die Länge / Höhe darstellt.

Antworten**Polegadas (in)**

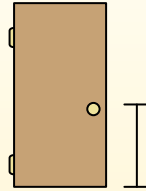
Una pulgada es aproximadamente la distancia de la última articulación de su dedo.

**Pie (pies)**

Um pé mede 12 polegadas. O comprimento de uma régua.

**Jarda (jd)**

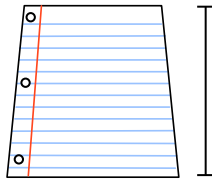
1 jarda é o mesmo que 3 pés. Do chão até a maçaneta da porta são cerca de 1 jarda.

**Milla (mi)**

Uma milha equivale a 5.280 pés. A maioria das estradas principais tem pelo menos uma milha de comprimento.

1. **D**2. **B**3. **C**4. **B**5. **B**6. **C**7. **C**8. **B**9. **B**


1)



Notizbuch Papier

- A. 1 yard
- B. 6 inches
- C. 2 feet
- D. 11 inches

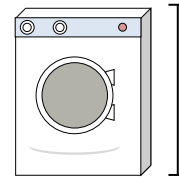
2)



Gallone Milch

- A. 11 feet
- B. 9 inches
- C. 6 inches
- D. 3 inches

3)



Waschmaschine

- A. 4 inches
- B. 1 foot
- C. 3 feet
- D. 2 yards


4)



Klebestift

- A. 1 foot
- B. 3 inches
- C. 4 miles
- D. 10 inches

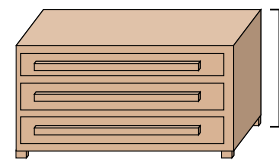
5)



Elefant

- A. 18 inches
- B. 4 yards
- C. 5 feet
- D. 1 mile

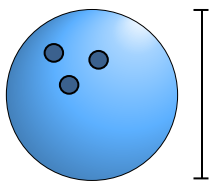
6)



Kommode

- A. 18 inches
- B. 12 inches
- C. 3 feet
- D. 3 yards

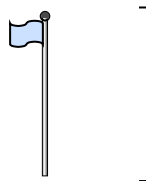
7)



Bowlingkugelhöhe

- A. 4 inches
- B. 1 yard
- C. 10 inches
- D. 10 feet

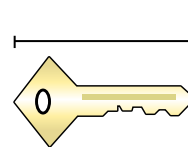
8)



Fahnenmast

- A. 1 mile
- B. 10 yards
- C. 12 inches
- D. 5 feet

9)



Taste

- A. 5 feet
- B. 2 inches
- C. 6 inches
- D. 2 yards

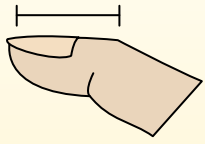


Stelle fest, welcher Buchstabe am besten die Länge / Höhe darstellt.

Antworten

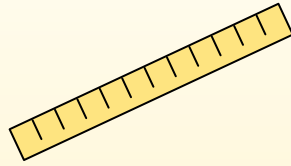
Polegadas (in)

Una pulgada es aproximadamente la distancia de la última articulación de su dedo.



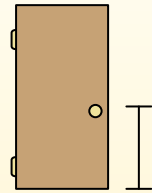
Pie (pies)

Um pé mede 12 polegadas. O comprimento de uma régua.



Jarda (jd)

1 jarda é o mesmo que 3 pés. Do chão até a maçaneta da porta são cerca de 1 jarda.




Milla (mi)

Uma milha equivale a 5.280 pés. A maioria das estradas principais tem pelo menos uma milha de comprimento.



1. _____
2. _____
3. _____
4. _____
5. _____
6. _____
7. _____
8. _____
9. _____


1)



Notizbuch Papier

- A. 6 inches
- B. 11 inches
- C. 1 yard
- D. 2 feet


2)



Berg

- A. 20 feet
- B. 2 miles
- C. 300 inches
- D. 10 yards

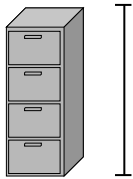
3)



Stift

- A. 5 yards
- B. 12 inches
- C. 5 inches
- D. 1 foot

4)



Aktenschrank

- A. 1 foot
- B. 2 feet
- C. 5 feet
- D. 11 inches

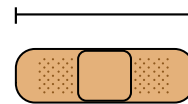
5)



Frosch

- A. 1 foot
- B. 2 feet
- C. 3 inches
- D. 9 inches


6)



Binde

- A. 3 inches
- B. 2 miles
- C. 2 feet
- D. 1 yard

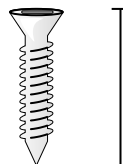
7)



Insekt

- A. 3 yards
- B. 1 inch
- C. 1 foot
- D. 3 inches


8)



Schrauben

- A. 1 inch
- B. 10 inches
- C. 8 inches
- D. 1 yard

9)



Bügeleisen

- A. 15 inches
- B. 6 inches
- C. 2 feet
- D. 8 feet



Stelle fest, welcher Buchstabe am besten die Länge / Höhe darstellt.

Antworten

Polegadas (in)	Pie (pies)	Jarda (jd)	Milla (mi)
Una pulgada es aproximadamente la distancia de la última articulación de su dedo.	Um pé mede 12 polegadas. O comprimento de uma régua.	1 jarda é o mesmo que 3 pés. Do chão até a maçaneta da porta são cerca de 1 jarda.	Uma milha equivale a 5.280 pés. A maioria das estradas principais tem pelo menos uma milha de comprimento.


1. **B**

2. **B**

3. **C**


4. **C**

5. **C**



Notizbuch Papier

- A. 6 inches
- B. 11 inches
- C. 1 yard
- D. 2 feet



Berg

- A. 20 feet
- B. 2 miles
- C. 300 inches
- D. 10 yards



Stift

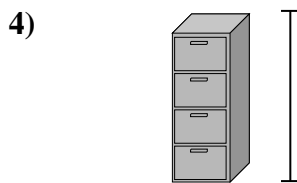
- A. 5 yards
- B. 12 inches
- C. 5 inches
- D. 1 foot

6. **A**

7. **B**


8. **A**

9. **B**



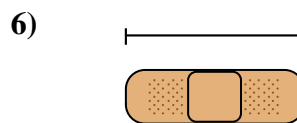
Aktenschrank

- A. 1 foot
- B. 2 feet
- C. 5 feet
- D. 11 inches



Frosch

- A. 1 foot
- B. 2 feet
- C. 3 inches
- D. 9 inches



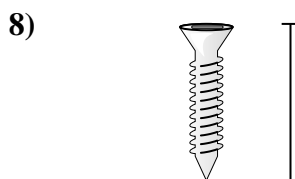
Binde

- A. 3 inches
- B. 2 miles
- C. 2 feet
- D. 1 yard



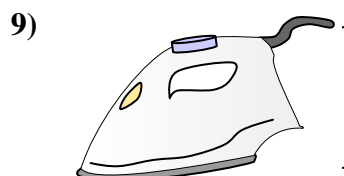
Insekt

- A. 3 yards
- B. 1 inch
- C. 1 foot
- D. 3 inches



Schrauben

- A. 1 inch
- B. 10 inches
- C. 8 inches
- D. 1 yard



Bügeleisen

- A. 15 inches
- B. 6 inches
- C. 2 feet
- D. 8 feet

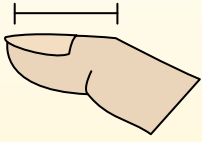


Stelle fest, welcher Buchstabe am besten die Länge / Höhe darstellt.

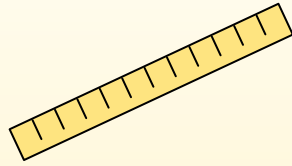
Antworten

Polegadas (in)

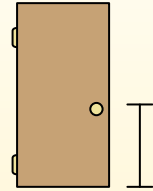
Una pulgada es aproximadamente la distancia de la última articulación de su dedo.

**Pie (pies)**

Um pé mede 12 polegadas. O comprimento de uma régua.

**Jarda (jd)**


1 jarda é o mesmo que 3 pés. Do chão até a maçaneta da porta são cerca de 1 jarda.

**Milla (mi)**

Uma milha equivale a 5.280 pés. A maioria das estradas principais tem pelo menos uma milha de comprimento.




1)



Kochtopf

- A. 4 inches
- B. 1 inch
- C. 2 feet
- D. 10 inches

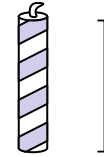
2)



Hammer

- A. 1 yard
- B. 16 inches
- C. 4 inches
- D. 1 inch

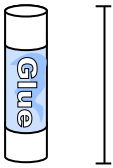
3)



Kerze

- A. 8 inches
- B. 1 foot
- C. 3 inches
- D. 1 mile

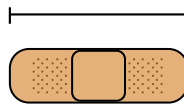
4)



Klebestift

- A. 1 foot
- B. 4 miles
- C. 10 inches
- D. 3 inches

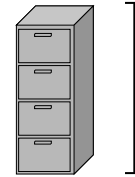
5)



Binde

- A. 2 feet
- B. 2 miles
- C. 3 inches
- D. 1 yard

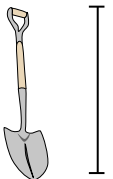
6)



Aktenschrank

- A. 5 feet
- B. 1 foot
- C. 2 feet
- D. 11 inches

7)



Schaufel

- A. 2 feet
- B. 4 feet
- C. 11 inches
- D. 3 yards

8)



Baumhöhe

- A. 1 mile
- B. 4 feet
- C. 6 yards
- D. 18 inches

9)

Flash Drive

- A. 6 inches
- B. 11 inches
- C. 2 feet
- D. 2 inches

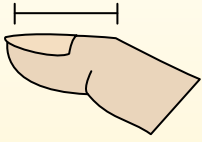
1. _____
2. _____
3. _____
4. _____
5. _____
6. _____
7. _____
8. _____
9. _____



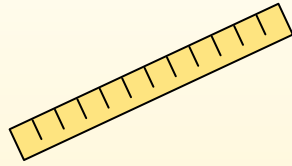
Stelle fest, welcher Buchstabe am besten die Länge / Höhe darstellt.

Antworten**Polegadas (in)**

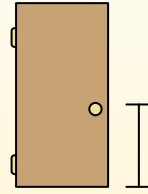
Una pulgada es aproximadamente la distancia de la última articulación de su dedo.

**Pie (pies)**

Um pé mede 12 polegadas. O comprimento de uma régua.

**Jarda (jd)**


1 jarda é o mesmo que 3 pés. Do chão até a maçaneta da porta são cerca de 1 jarda.

**Milla (mi)**

Uma milha equivale a 5.280 pés. A maioria das estradas principais tem pelo menos uma milha de comprimento.




1)



Kochtopf

- A. 4 inches
- B. 1 inch
- C. 2 feet
- D. 10 inches

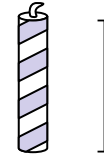
2)



Hammer

- A. 1 yard
- B. 16 inches
- C. 4 inches
- D. 1 inch

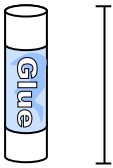
3)



Kerze

- A. 8 inches
- B. 1 foot
- C. 3 inches
- D. 1 mile

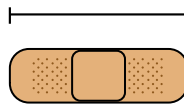
4)



Klebestift

- A. 1 foot
- B. 4 miles
- C. 10 inches
- D. 3 inches

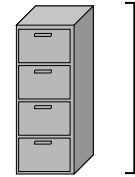
5)



Binde

- A. 2 feet
- B. 2 miles
- C. 3 inches
- D. 1 yard

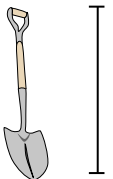
6)



Aktenschrank

- A. 5 feet
- B. 1 foot
- C. 2 feet
- D. 11 inches

7)



Schaufel

- A. 2 feet
- B. 4 feet
- C. 11 inches
- D. 3 yards

8)



Baumhöhe

- A. 1 mile
- B. 4 feet
- C. 6 yards
- D. 18 inches

9)

Flash Drive

- A. 6 inches
- B. 11 inches
- C. 2 feet
- D. 2 inches

1. **D**2. **B**3. **C**4. **D**5. **C**6. **A**7. **B**8. **C**9. **D**

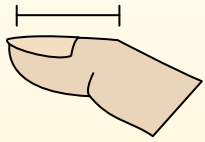


Stelle fest, welcher Buchstabe am besten die Länge / Höhe darstellt.

Antworten

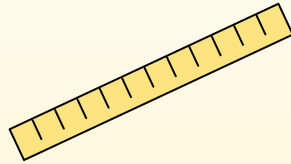
Polegadas (in)

Una pulgada es aproximadamente la distancia de la última articulación de su dedo.



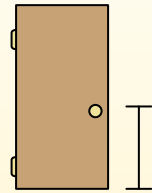
Pie (pies)

Um pé mede 12 polegadas. O comprimento de uma régua.



Jarda (jd)

1 jarda é o mesmo que 3 pés. Do chão até a maçaneta da porta são cerca de 1 jarda.



Milla (mi)

Uma milha equivale a 5.280 pés. A maioria das estradas principais tem pelo menos uma milha de comprimento.



1. _____
2. _____
3. _____
4. _____
5. _____
6. _____
7. _____
8. _____
9. _____

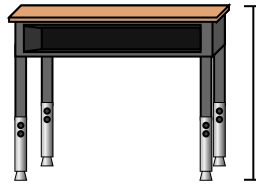
1)



Stift

- A. 5 inches
- B. 12 inches
- C. 1 foot
- D. 5 yards

2)



Schreibtisch

- A. 6 inches
- B. 2 yards
- C. 2 feet
- D. 11 inches

3)



Frosch

- A. 9 inches
- B. 3 inches
- C. 1 foot
- D. 2 feet

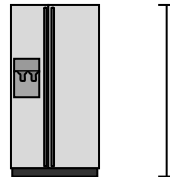
4)



Fahrrad

- A. 3 inches
- B. 1 yard
- C. 3 yards
- D. 10 inches

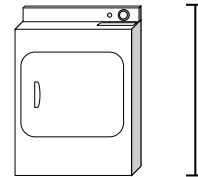
5)



Kühlschrank

- A. 6 feet
- B. 1 foot
- C. 12 inches
- D. 4 yards

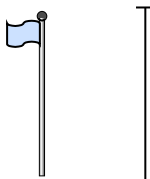
6)



Wäschetrockner

- A. 2 feet
- B. 1 yard
- C. 11 inches
- D. 6 inches


7)



Fahnenmast

- A. 5 feet
- B. 10 yards
- C. 1 mile
- D. 12 inches

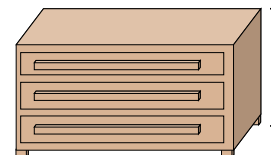
8)



Tennis Ball

- A. 1 foot
- B. 7 inches
- C. 3 inches
- D. 2 feet

9)



Kommode

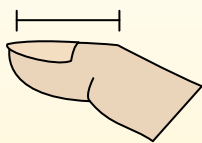
- A. 18 inches
- B. 3 feet
- C. 3 yards
- D. 12 inches



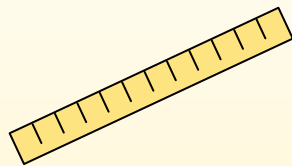
Stelle fest, welcher Buchstabe am besten die Länge / Höhe darstellt.

Antworten**Polegadas (in)**

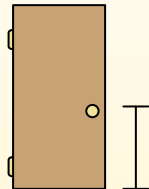
Una pulgada es aproximadamente la distancia de la última articulación de su dedo.

**Pie (pies)**

Um pé mede 12 polegadas. O comprimento de uma régua.

**Jarda (jd)**

1 jarda é o mesmo que 3 pés. Do chão até a maçaneta da porta são cerca de 1 jarda.

**Milla (mi)**

Uma milha equivale a 5.280 pés. A maioria das estradas principais tem pelo menos uma milha de comprimento.



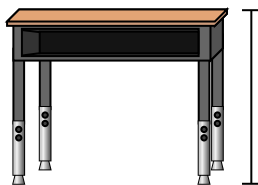
1)



Stift

- A. 5 inches
- B. 12 inches
- C. 1 foot
- D. 5 yards

2)



Schreibtisch

- A. 6 inches
- B. 2 yards
- C. 2 feet
- D. 11 inches

3)



Frosch

- A. 9 inches
- B. 3 inches
- C. 1 foot
- D. 2 feet

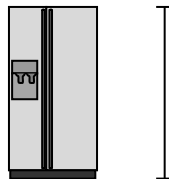
4)



Fahrrad

- A. 3 inches
- B. 1 yard
- C. 3 yards
- D. 10 inches


5)



Kühlschrank

- A. 6 feet
- B. 1 foot
- C. 12 inches
- D. 4 yards

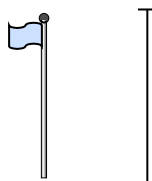
6)



Wäschetrockner

- A. 2 feet
- B. 1 yard
- C. 11 inches
- D. 6 inches


7)



Fahnenmast

- A. 5 feet
- B. 10 yards
- C. 1 mile
- D. 12 inches

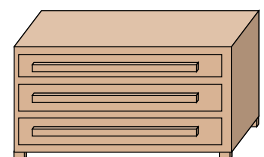
8)



Tennis Ball

- A. 1 foot
- B. 7 inches
- C. 3 inches
- D. 2 feet

9)



Kommode

- A. 18 inches
- B. 3 feet
- C. 3 yards
- D. 12 inches

1. **A**2. **C**3. **B**4. **B**5. **A**6. **B**7. **B**8. **C**9. **B**



Stelle fest, welcher Buchstabe am besten die Länge / Höhe darstellt.

Antworten

Polegadas (in)	Pie (pies)	Jarda (jd)	Milla (mi)
Una pulgada es aproximadamente la distancia de la última articulación de su dedo.	Um pé mede 12 polegadas. O comprimento de uma régua.	1 jarda é o mesmo que 3 pés. Do chão até a maçaneta da porta são cerca de 1 jarda.	Uma milha equivale a 5.280 pés. A maioria das estradas principais tem pelo menos uma milha de comprimento.

1. _____
2. _____
3. _____
4. _____
5. _____
6. _____
7. _____
8. _____
9. _____



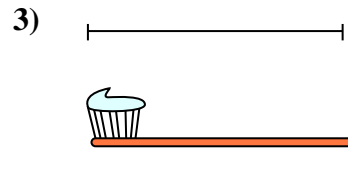
Fahrrad

- A. 3 inches
- B. 10 inches
- C. 1 yard
- D. 3 yards




Vakuum

- A. 11 inches
- B. 4 feet
- C. 3 yards
- D. 1 foot




Zahnbürste

- A. 1 yard
- B. 10 feet
- C. 7 inches
- D. 4 inches



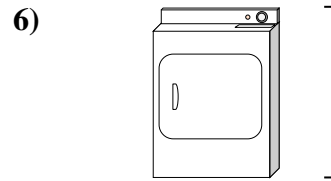
Höhe der Getreidekiste

- A. 4 inches
- B. 2 feet
- C. 1 inch
- D. 1 foot



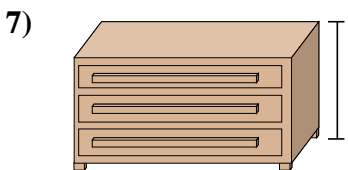
Elefant

- A. 1 mile
- B. 5 feet
- C. 18 inches
- D. 4 yards



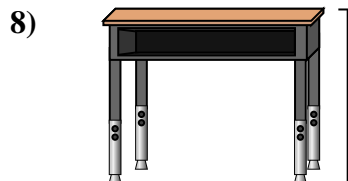
Wäschetrockner

- A. 6 inches
- B. 2 feet
- C. 11 inches
- D. 1 yard




Kommode

- A. 12 inches
- B. 3 yards
- C. 3 feet
- D. 18 inches



Schreibtisch

- A. 6 inches
- B. 11 inches
- C. 2 feet
- D. 2 yards



Insekt

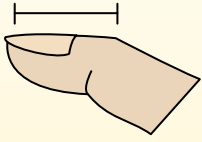
- A. 3 yards
- B. 3 inches
- C. 1 foot
- D. 1 inch



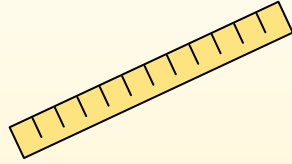
Stelle fest, welcher Buchstabe am besten die Länge / Höhe darstellt.

Antworten**Polegadas (in)**

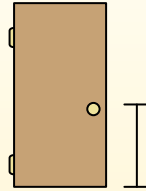
Una pulgada es aproximadamente la distancia de la última articulación de su dedo.

**Pie (pies)**

Um pé mede 12 polegadas. O comprimento de uma régua.

**Jarda (jd)**

1 jarda é o mesmo que 3 pés. Do chão até a maçaneta da porta são cerca de 1 jarda.

**Milla (mi)**

Uma milha equivale a 5.280 pés. A maioria das estradas principais tem pelo menos uma milha de comprimento.



1)



Fahrrad

- A. 3 inches
- B. 10 inches
- C. 1 yard
- D. 3 yards

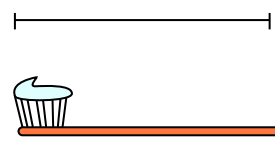
2)



Vakuum

- A. 11 inches
- B. 4 feet
- C. 3 yards
- D. 1 foot


3)



Zahnbürste

- A. 1 yard
- B. 10 feet
- C. 7 inches
- D. 4 inches


4)



Höhe der Getreidekiste

- A. 4 inches
- B. 2 feet
- C. 1 inch
- D. 1 foot

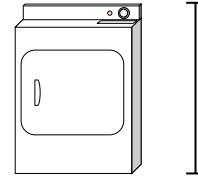
5)



Elefant

- A. 1 mile
- B. 5 feet
- C. 18 inches
- D. 4 yards

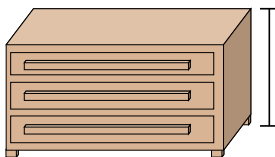
6)



Wäschetrockner

- A. 6 inches
- B. 2 feet
- C. 11 inches
- D. 1 yard

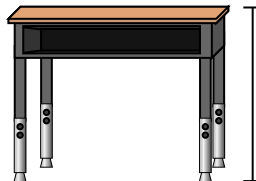
7)



Kommode

- A. 12 inches
- B. 3 yards
- C. 3 feet
- D. 18 inches

8)



Schreibtisch

- A. 6 inches
- B. 11 inches
- C. 2 feet
- D. 2 yards

9)



Insekt

- A. 3 yards
- B. 3 inches
- C. 1 foot
- D. 1 inch

1. **C**2. **B**3. **C**4. **D**5. **D**6. **D**7. **C**8. **C**9. **D**

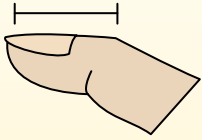


Stelle fest, welcher Buchstabe am besten die Länge / Höhe darstellt.

Antworten

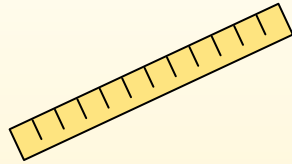
Polegadas (in)

Una pulgada es aproximadamente la distancia de la última articulación de su dedo.



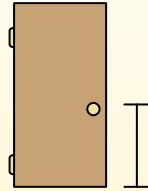
Pie (pies)

Um pé mede 12 polegadas. O comprimento de uma régua.



Jarda (jd)

1 jarda é o mesmo que 3 pés. Do chão até a maçaneta da porta são cerca de 1 jarda.




Milla (mi)

Uma milha equivale a 5.280 pés. A maioria das estradas principais tem pelo menos uma milha de comprimento.



1. _____
2. _____
3. _____
4. _____
5. _____
6. _____
7. _____
8. _____
9. _____

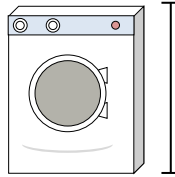
1)



Dose Soda

- A. 1 foot
- B. 1 inch
- C. 1 yard
- D. 4 inches


2)



Waschmaschine

- A. 3 feet
- B. 1 foot
- C. 2 yards
- D. 4 inches

3)



Lutscher

- A. 1 foot
- B. 3 inches
- C. 1 mile
- D. 5 inches

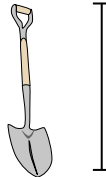
4)



Fahrrad

- A. 10 inches
- B. 3 inches
- C. 1 yard
- D. 3 yards

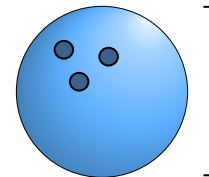
5)



Schaufel

- A. 11 inches
- B. 2 feet
- C. 4 feet
- D. 3 yards

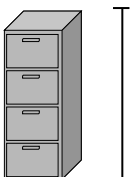
6)



Bowlingkugelhöhe

- A. 10 inches
- B. 10 feet
- C. 1 yard
- D. 4 inches

7)



Aktenschrank

- A. 11 inches
- B. 5 feet
- C. 1 foot
- D. 2 feet

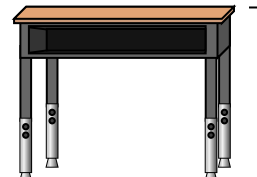
8)



Bleistift

- A. 1 yard
- B. 7 inches
- C. 1 foot
- D. 1 inch

9)



Schreibtisch

- A. 2 yards
- B. 6 inches
- C. 11 inches
- D. 2 feet

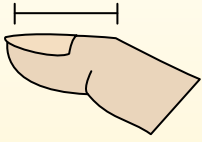


Stelle fest, welcher Buchstabe am besten die Länge / Höhe darstellt.

Antworten

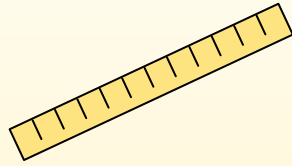
Polegadas (in)

Una pulgada es aproximadamente la distancia de la última articulación de su dedo.



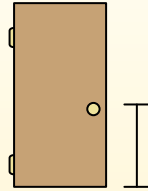
Pie (pies)

Um pé mede 12 polegadas. O comprimento de uma régua.



Jarda (jd)

1 jarda é o mesmo que 3 pés. Do chão até a maçaneta da porta são cerca de 1 jarda.



Milla (mi)

Uma milha equivale a 5.280 pés. A maioria das estradas principais tem pelo menos uma milha de comprimento.



1. **D**

2. **A**

3. **D**

4. **C**

5. **C**


6. **A**

7. **B**

8. **B**

9. **D**

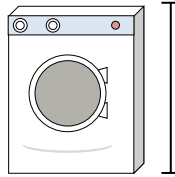
1)



Dose Soda

- A. 1 foot
- B. 1 inch
- C. 1 yard
- D. 4 inches


2)



Waschmaschine

- A. 3 feet
- B. 1 foot
- C. 2 yards
- D. 4 inches

3)



Lutscher

- A. 1 foot
- B. 3 inches
- C. 1 mile
- D. 5 inches

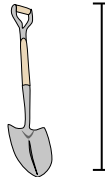
4)



Fahrrad

- A. 10 inches
- B. 3 inches
- C. 1 yard
- D. 3 yards

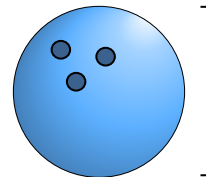
5)



Schaufel

- A. 11 inches
- B. 2 feet
- C. 4 feet
- D. 3 yards

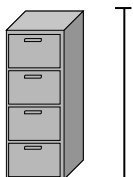
6)



Bowlingkugelhöhe

- A. 10 inches
- B. 10 feet
- C. 1 yard
- D. 4 inches

7)



Aktenschrank

- A. 11 inches
- B. 5 feet
- C. 1 foot
- D. 2 feet

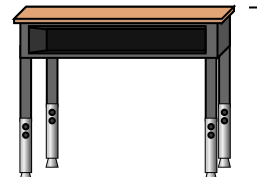
8)



Bleistift

- A. 1 yard
- B. 7 inches
- C. 1 foot
- D. 1 inch

9)



Schreibtisch

- A. 2 yards
- B. 6 inches
- C. 11 inches
- D. 2 feet

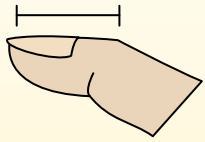


Stelle fest, welcher Buchstabe am besten die Länge / Höhe darstellt.

Antworten

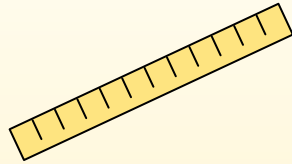
Polegadas (in)

Una pulgada es aproximadamente la distancia de la última articulación de su dedo.



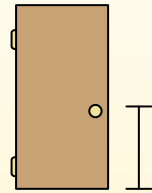
Pie (pies)

Um pé mede 12 polegadas. O comprimento de uma régua.



Jarda (jd)

1 jarda é o mesmo que 3 pés. Do chão até a maçaneta da porta são cerca de 1 jarda.



Milla (mi)

Uma milha equivale a 5.280 pés. A maioria das estradas principais tem pelo menos uma milha de comprimento.



1. _____
2. _____
3. _____
4. _____
5. _____
6. _____
7. _____
8. _____
9. _____

1)

DVD

- A. 4 inches
- B. 1 yard
- C. 12 inches
- D. 1 foot


2)



Berg

- A. 10 yards
- B. 2 miles
- C. 300 inches
- D. 20 feet

3)



Brotscheibe

- A. 4 feet
- B. 2 yards
- C. 4 inches
- D. 10 inches

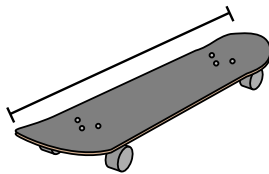
4)



Fahrrad

- A. 3 yards
- B. 10 inches
- C. 3 inches
- D. 1 yard

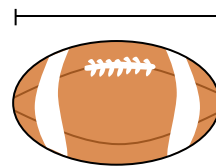
5)



Skateboard

- A. 30 inches
- B. 1 inch
- C. 2 yards
- D. 12 inches

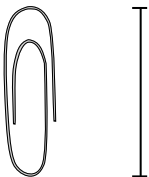
6)



Fußball

- A. 1 yard
- B. 11 inches
- C. 1 inch
- D. 2 feet

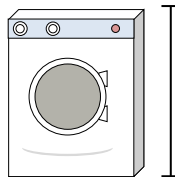
7)



Büroklammer

- A. 1 inch
- B. 2 feet
- C. 1 foot
- D. 4 inches

8)



Waschmaschine

- A. 1 foot
- B. 3 feet
- C. 2 yards
- D. 4 inches

9)



Klebestift

- A. 3 inches
- B. 1 foot
- C. 10 inches
- D. 4 miles

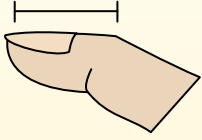


Stelle fest, welcher Buchstabe am besten die Länge / Höhe darstellt.

Antworten

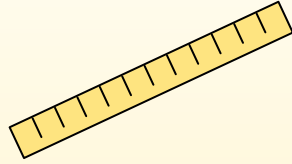
Polegadas (in)

Una pulgada es aproximadamente la distancia de la última articulación de su dedo.



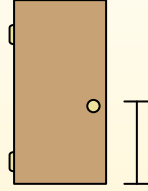
Pie (pies)

Um pé mede 12 polegadas. O comprimento de uma régua.



Jarda (jd)

1 jarda é o mesmo que 3 pés. Do chão até a maçaneta da porta são cerca de 1 jarda.



Milla (mi)

Uma milha equivale a 5.280 pés. A maioria das estradas principais tem pelo menos uma milha de comprimento.



1. **A**

2. **B**

3. **C**

4. **D**


5. **A**

1)

DVD

- A. 4 inches
- B. 1 yard
- C. 12 inches
- D. 1 foot


2)



Berg

- A. 10 yards
- B. 2 miles
- C. 300 inches
- D. 20 feet

3)



Brotscheibe

- A. 4 feet
- B. 2 yards
- C. 4 inches
- D. 10 inches

6. **B**

7. **A**

8. **B**

9. **A**

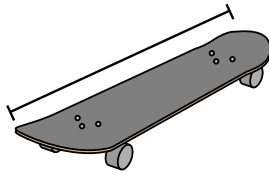
4)



Fahrrad

- A. 3 yards
- B. 10 inches
- C. 3 inches
- D. 1 yard

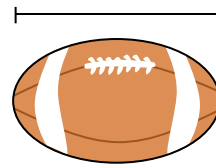
5)



Skateboard

- A. 30 inches
- B. 1 inch
- C. 2 yards
- D. 12 inches

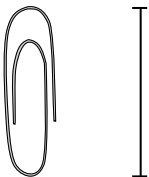
6)



Fußball

- A. 1 yard
- B. 11 inches
- C. 1 inch
- D. 2 feet

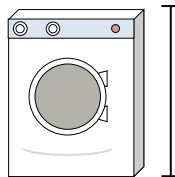
7)



Büroklammer

- A. 1 inch
- B. 2 feet
- C. 1 foot
- D. 4 inches

8)



Waschmaschine

- A. 1 foot
- B. 3 feet
- C. 2 yards
- D. 4 inches

9)



Klebestift

- A. 3 inches
- B. 1 foot
- C. 10 inches
- D. 4 miles