



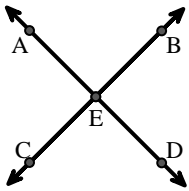
Ordne die Beschreibung oben dem visuellen Bild unten zu.

Antworten

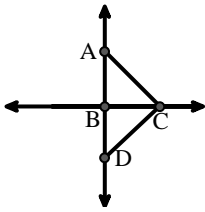
- 1)  $\angle BAC$  creating an obtuse angle
- 2)  $\overleftrightarrow{AB}$  intersecting  $\overleftrightarrow{AD}$
- 3) Right  $\angle ADE$
- 4)  $\overleftrightarrow{BA}$  intersecting  $\overleftrightarrow{AD}$
- 5)  $\overleftrightarrow{AD}$  intersecting  $\overleftrightarrow{BC}$  at point E
- 6)  $\overleftrightarrow{BD}$  intersecting  $\overleftrightarrow{CE}$
- 7)  $\overleftrightarrow{AC}$  parallel to  $\overleftrightarrow{EB}$
- 8)  $\overleftrightarrow{AB}$  parallel to  $\overleftrightarrow{CD}$
- 9)  $\overleftrightarrow{BC}$  intersecting  $\angle ACD$
- 10)  $\overleftrightarrow{AC}$  perpendicular to  $\overleftrightarrow{AD}$
- 11) Acute  $\angle BDE$
- 12)  $\overleftrightarrow{AC}$  intersected by  $\overleftrightarrow{BD}$

1. \_\_\_\_\_
2. \_\_\_\_\_
3. \_\_\_\_\_
4. \_\_\_\_\_
5. \_\_\_\_\_
6. \_\_\_\_\_
7. \_\_\_\_\_
8. \_\_\_\_\_
9. \_\_\_\_\_
10. \_\_\_\_\_
11. \_\_\_\_\_
12. \_\_\_\_\_

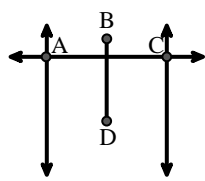
A.



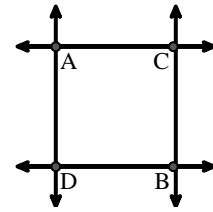
B.



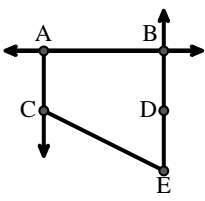
C.



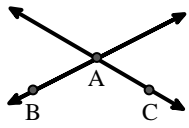
D.



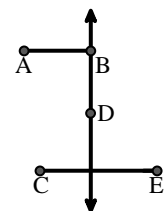
E.



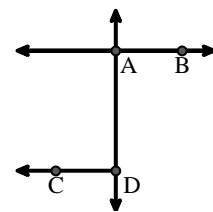
F.



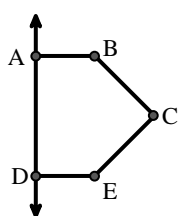
G.



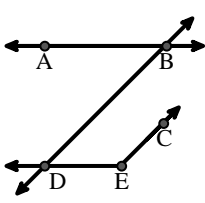
H.



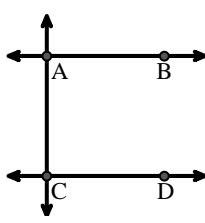
I.



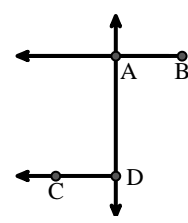
J.



K.



L.





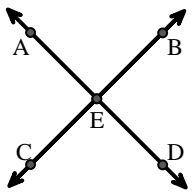
Ordne die Beschreibung oben dem visuellen Bild unten zu.

**Antworten**

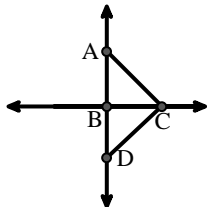
- 1)  $\angle BAC$  creating an obtuse angle
- 2)  $\overleftrightarrow{AB}$  intersecting  $\overleftrightarrow{AD}$
- 3) Right  $\angle ADE$
- 4)  $\overleftrightarrow{BA}$  intersecting  $\overleftrightarrow{AD}$
- 5)  $\overleftrightarrow{AD}$  intersecting  $\overleftrightarrow{BC}$  at point E
- 6)  $\overleftrightarrow{BD}$  intersecting  $\overleftrightarrow{CE}$
- 7)  $\overleftrightarrow{AC}$  parallel to  $\overleftrightarrow{EB}$
- 8)  $\overleftrightarrow{AB}$  parallel to  $\overleftrightarrow{CD}$
- 9)  $\overleftrightarrow{BC}$  intersecting  $\angle ACD$
- 10)  $\overleftrightarrow{AC}$  perpendicular to  $\overleftrightarrow{AD}$
- 11) Acute  $\angle BDE$
- 12)  $\overleftrightarrow{AC}$  intersected by  $\overleftrightarrow{BD}$

1. **F**
2. **H**
3. **I**
4. **L**
5. **A**
6. **G**
7. **E**
8. **K**
9. **B**
10. **D**
11. **J**
12. **C**

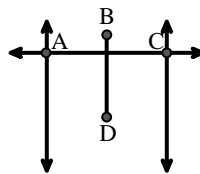
A.



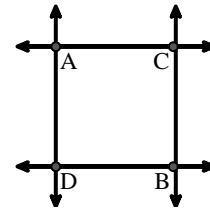
B.



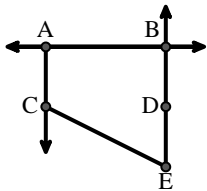
C.



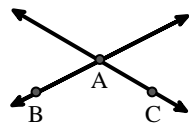
D.



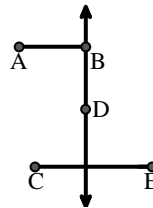
E.



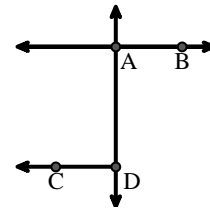
F.



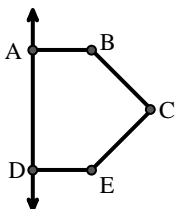
G.



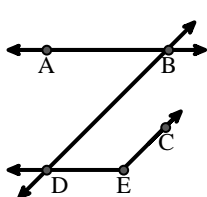
H.



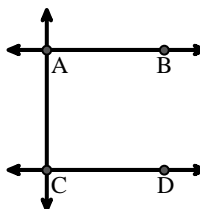
I.



J.



K.



L.

