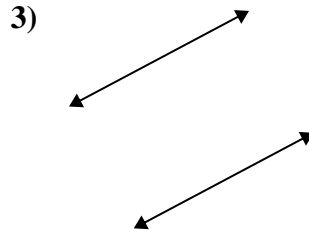
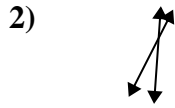
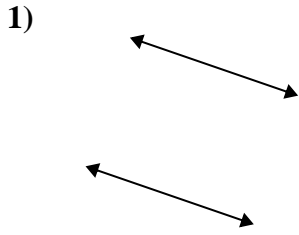




Benutze 'parallel', 'rechtwinklig'(rech) oder 'sich überschneidend'(über) um die Linien zu beschreiben.

Antworten

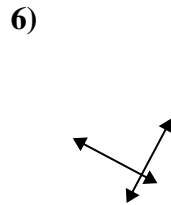
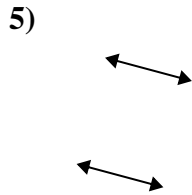
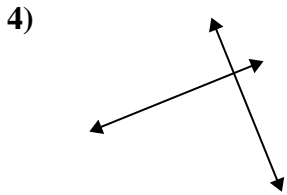


1. _____

2. _____

3. _____

4. _____

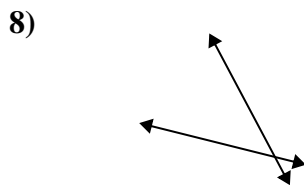
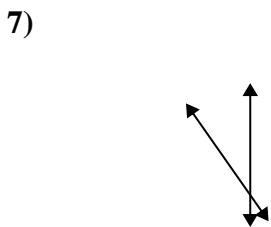


5. _____

6. _____

7. _____

8. _____

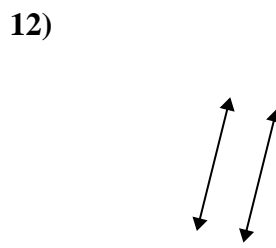
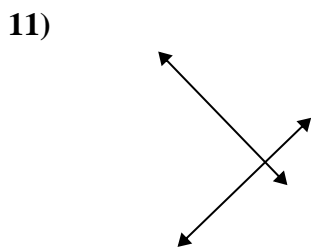
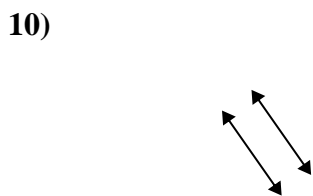


9. _____

10. _____

11. _____

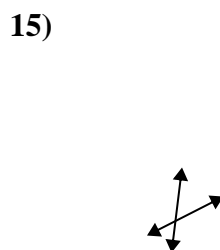
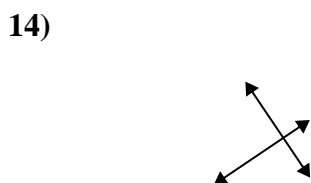
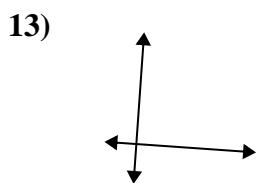
12. _____



13. _____

14. _____

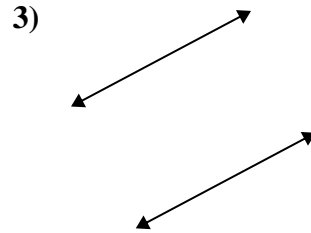
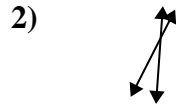
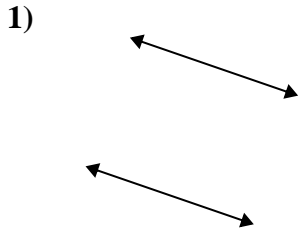
15. _____





Benutze 'parallel', 'rechtwinklig'(rech) oder 'sich überschneidend'(über) um die Linien zu beschreiben.

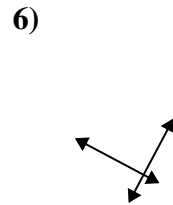
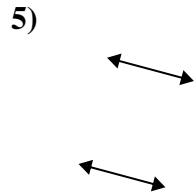
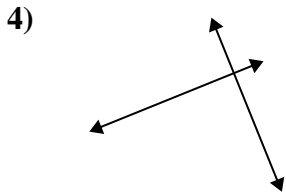
Antworten



1. parallel

2. über

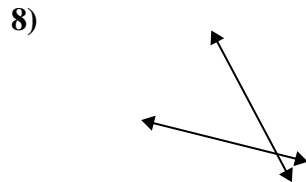
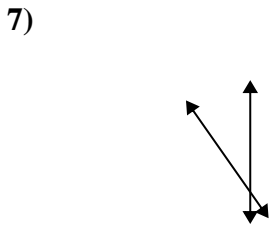
3. parallel



4. rech & über

5. parallel

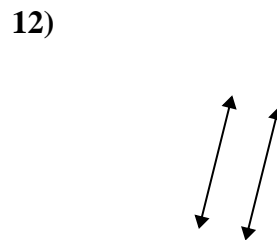
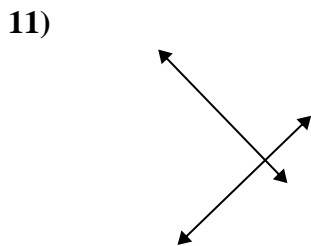
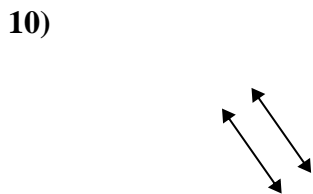
6. rech & über



7. über

8. über

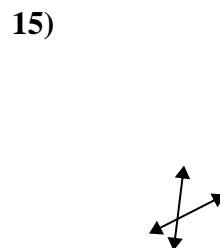

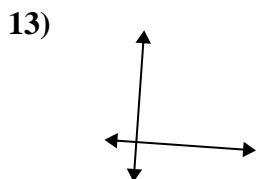
9. über



10. parallel

11. rech & über

12. parallel



13. rech & über

14. rech & über

15. über