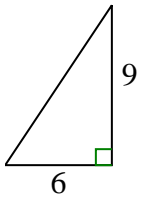




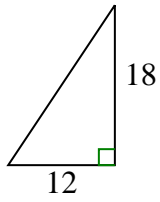
Bestimmen Sie, welche Wahl die gleiche Steigung wie die gezeigte hat.

**Antworten**

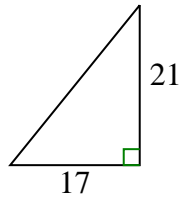
1)



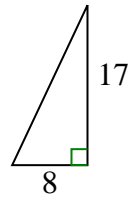
A.



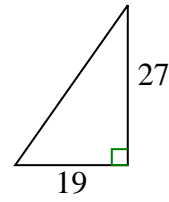
B.



C.



D.



1. \_\_\_\_\_

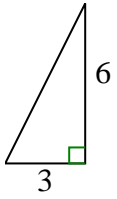
2. \_\_\_\_\_

3. \_\_\_\_\_

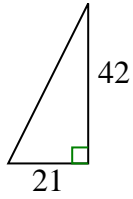
4. \_\_\_\_\_

5. \_\_\_\_\_

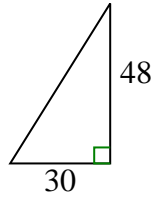
2)



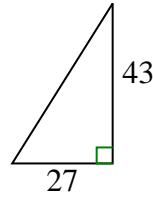
A.



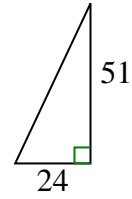
B.



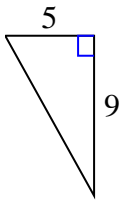
C.



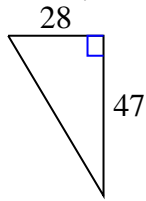
D.



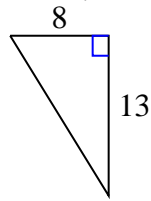
3)



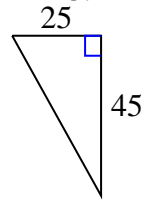
A.



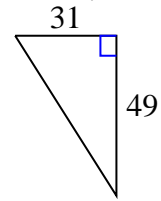
B.



C.



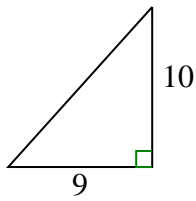
D.



4)



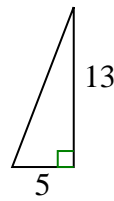
A.



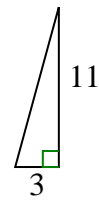
B.



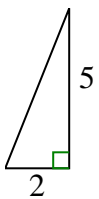
C.



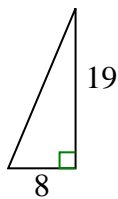
D.



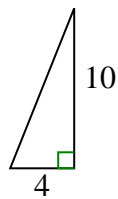
5)



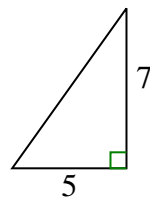
A.



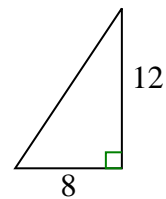
B.



C.



D.

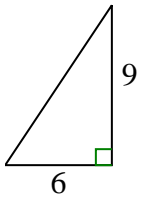




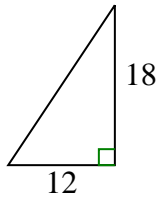
Bestimmen Sie, welche Wahl die gleiche Steigung wie die gezeigte hat.

**Antworten**

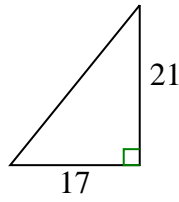
1)



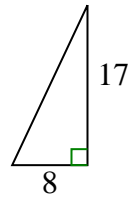
A.



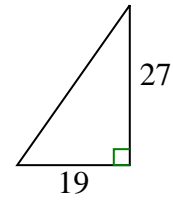
B.



C.

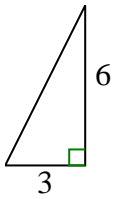


D.

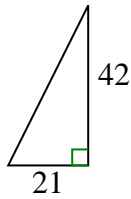


1.   **A**  

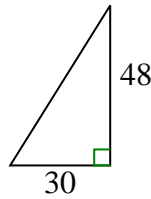
2)



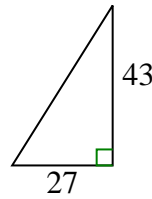
A.



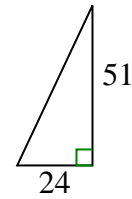
B.



C.

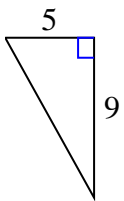


D.

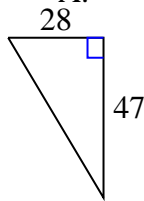


2.   **A**  

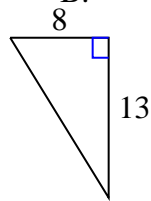
3)



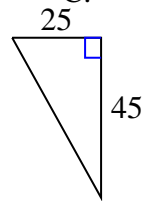
A.



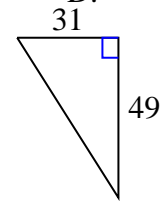
B.



C.



D.

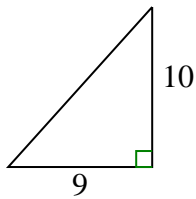


3.   **C**  

4)



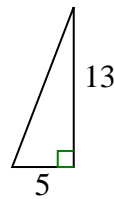
A.



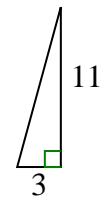
B.



C.

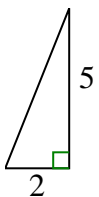


D.

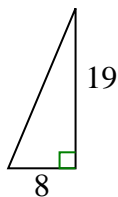


4.   **B**  

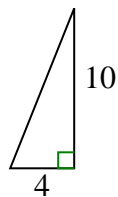
5)



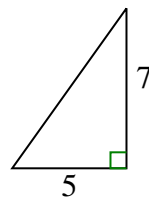
A.



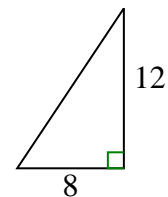
B.



C.



D.



5.   **B**