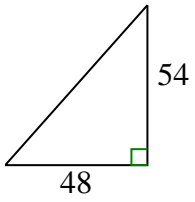




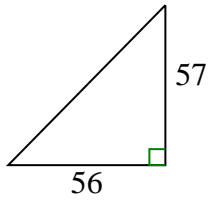
Bestimmen Sie, welche Wahl die gleiche Steigung wie die gezeigte hat.

Antworten

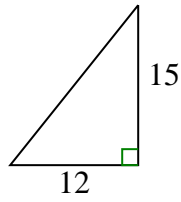
1)



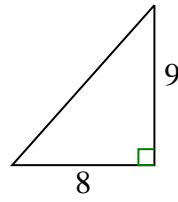
A.



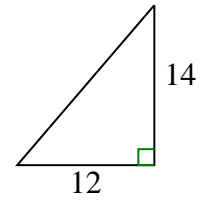
B.



C.

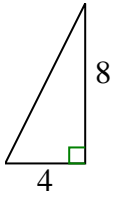


D.

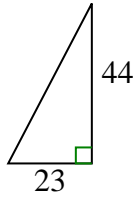


1. _____

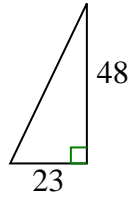
2)



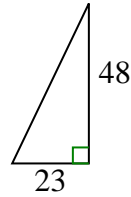
A.



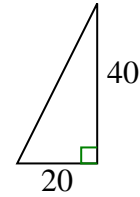
B.



C.



D.



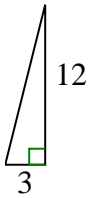
2. _____

3. _____

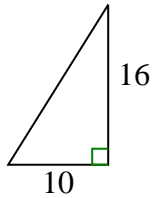
4. _____

5. _____

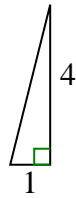
3)



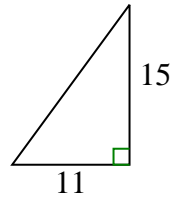
A.



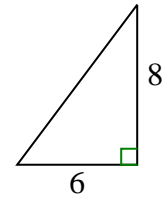
B.



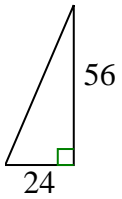
C.



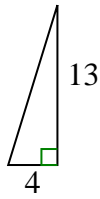
D.



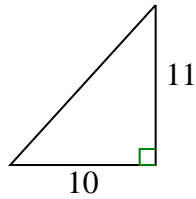
4)



A.



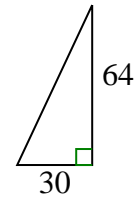
B.



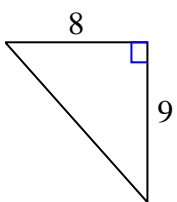
C.



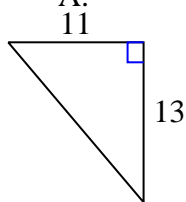
D.



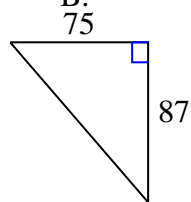
5)



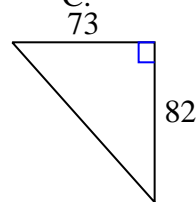
A.



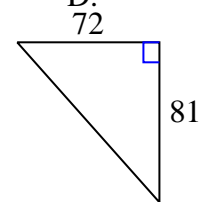
B.



C.



D.

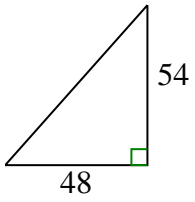




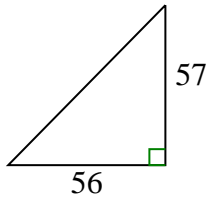
Bestimmen Sie, welche Wahl die gleiche Steigung wie die gezeigte hat.

Antworten

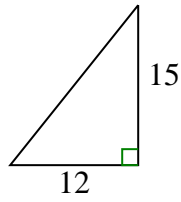
1)



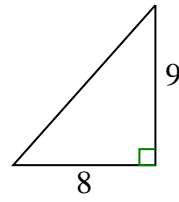
A.



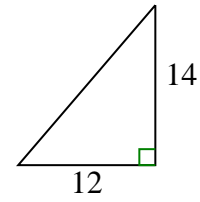
B.



C.

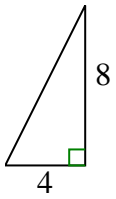


D.

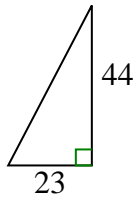


1. **C**

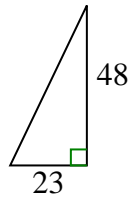
2)



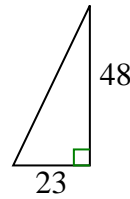
A.



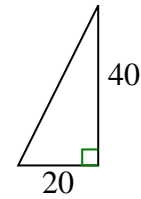
B.



C.

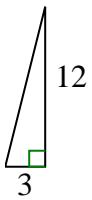


D.

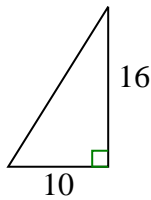


2. **D**

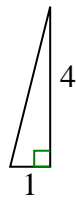
3)



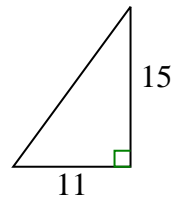
A.



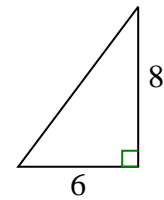
B.



C.

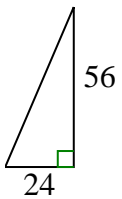


D.

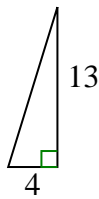


3. **B**

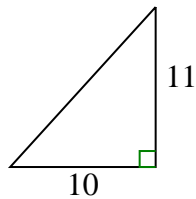
4)



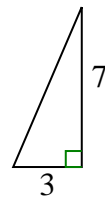
A.



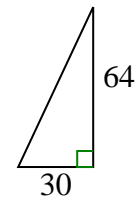
B.



C.

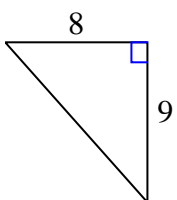


D.

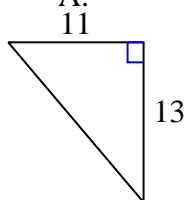


4. **C**

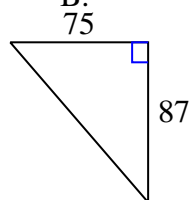
5)



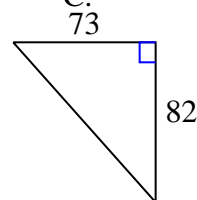
A.



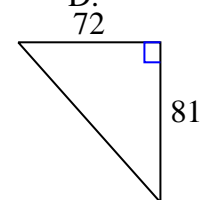
B.



C.



D.



5. **D**