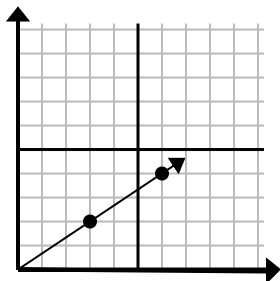




Bestimmen Sie, welche Auswahl einen Punkt auf der Linie darstellt, wenn diese fortgesetzt werden soll.

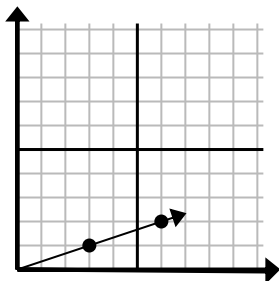
**Antworten**

1)



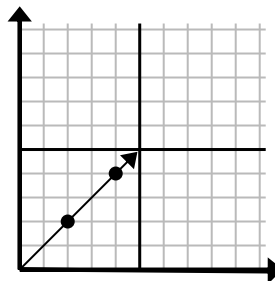
- A. (21 . 14)
- B. (12 . 8)
- C. (9 . 6)
- D. (15 . 10)

2)



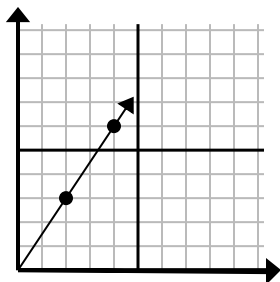
- A. (18 . 6)
- B. (12 . 4)
- C. (9 . 3)
- D. (10 . 3)

3)



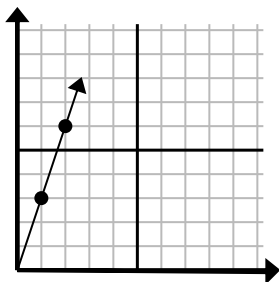
- A. (6 . 6)
- B. (12 . 12)
- C. (7 . 7)
- D. (8 . 4)

4)



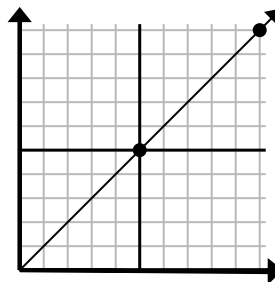
- A. (6 . 9)
- B. (14 . 21)
- C. (7 . 5)
- D. (8 . 7)

5)



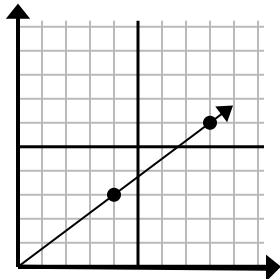
- A. (5 . 4)
- B. (4 . 8)
- C. (7 . 21)
- D. (3 . 9)

6)



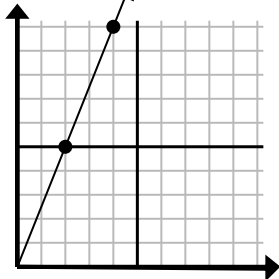
- A. (15 . 6)
- B. (30 . 30)
- C. (15 . 15)
- D. (35 . 35)

7)



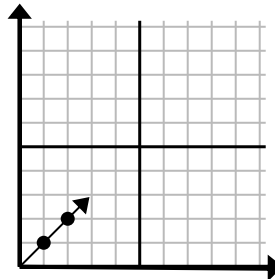
- A. (10 . 5)
- B. (10 . 6)
- C. (12 . 9)
- D. (28 . 21)

8)



- A. (12 . 30)
- B. (8 . 20)
- C. (6 . 15)
- D. (8 . 6)

9)

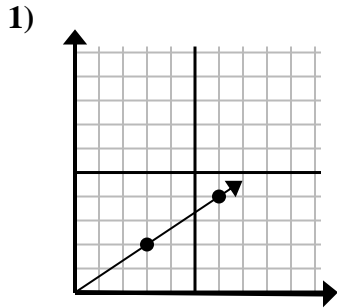


- A. (3 . 3)
- B. (3 . 2)
- C. (6 . 6)
- D. (6 . 3)

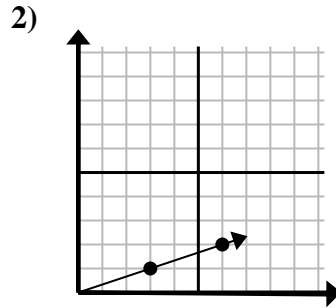
1. \_\_\_\_\_
2. \_\_\_\_\_
3. \_\_\_\_\_
4. \_\_\_\_\_
5. \_\_\_\_\_
6. \_\_\_\_\_
7. \_\_\_\_\_
8. \_\_\_\_\_
9. \_\_\_\_\_



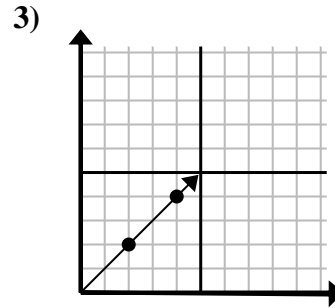
Bestimmen Sie, welche Auswahl einen Punkt auf der Linie darstellt, wenn diese fortgesetzt werden soll.

**Antworten**

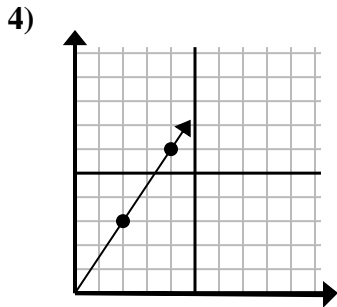
- A. (21 . 14)  
B. (12 . 8)  
C. (9 . 6)  
D. (15 . 10)



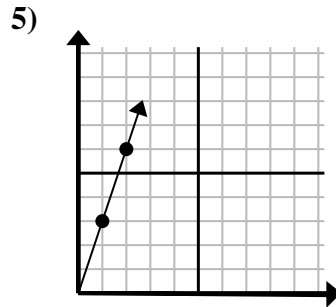
- A. (18 . 6)  
B. (12 . 4)  
C. (9 . 3)  
D. (10 . 3)



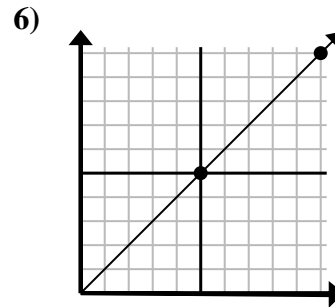
- A. (6 . 6)  
B. (12 . 12)  
C. (7 . 7)  
D. (8 . 4)



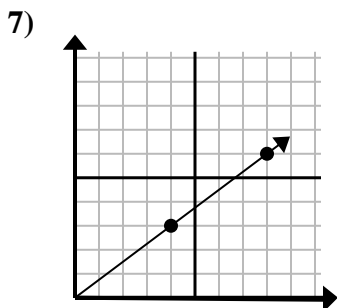
- A. (6 . 9)  
B. (14 . 21)  
C. (7 . 5)  
D. (8 . 7)



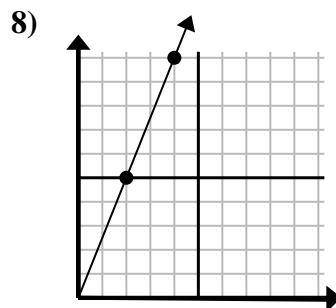
- A. (5 . 4)  
B. (4 . 8)  
C. (7 . 21)  
D. (3 . 9)



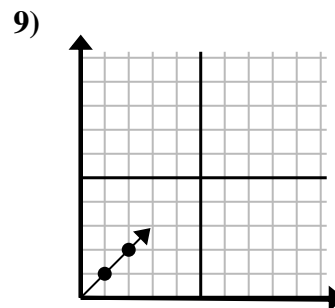
- A. (15 . 6)  
B. (30 . 30)  
C. (15 . 15)  
D. (35 . 35)



- A. (10 . 5)  
B. (10 . 6)  
C. (12 . 9)  
D. (28 . 21)



- A. (12 . 30)  
B. (8 . 20)  
C. (6 . 15)  
D. (8 . 6)



- A. (3 . 3)  
B. (3 . 2)  
C. (6 . 6)  
D. (6 . 3)

1.           **C**            
2.           **C**            
3.           **A**            
4.           **A**            
5.           **D**            
6.           **C**            
7.           **C**            
8.           **C**            
9.           **A**