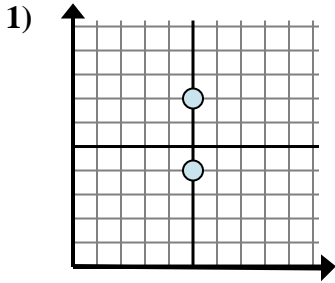


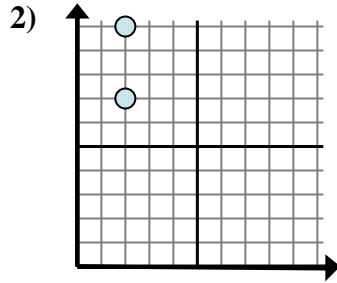


Bestimmen Sie, welcher Ausdruck den Abstand zwischen den beiden Punkten am besten zeigt.

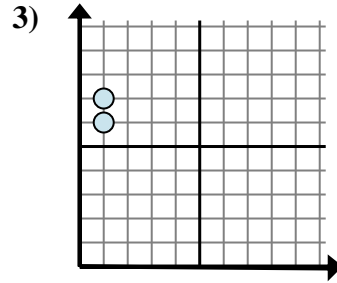
Antworten



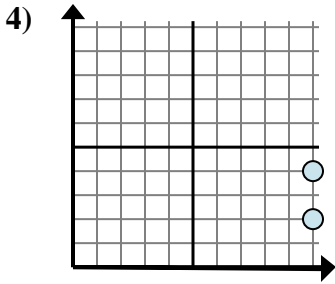
- A. $5 - 5$
- B. $7 - 4$
- C. $7 - 5$
- D. $5 - 4$



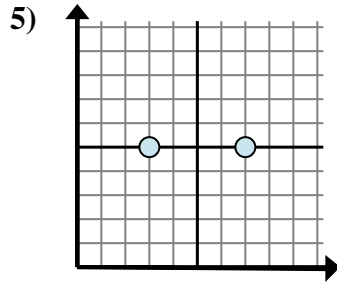
- A. $10 - 2$
- B. $2 - 10$
- C. $2 - 2$
- D. $10 - 7$



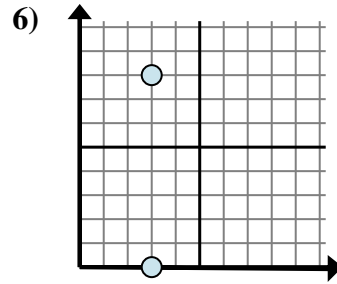
- A. $7 - 6$
- B. $1 - 6$
- C. $6 - 1$
- D. $1 - 1$



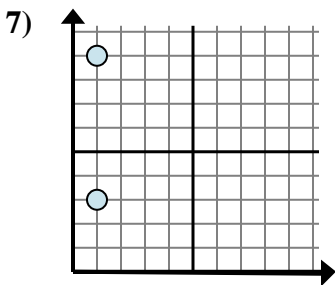
- A. $10 - 4$
- B. $10 - 4$
- C. $2 - 10$
- D. $4 - 2$



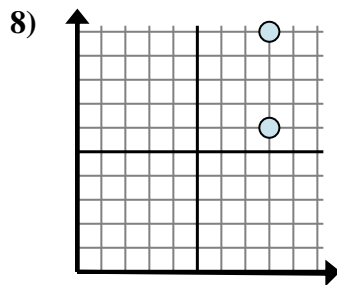
- A. $7 - 5$
- B. $7 - 3$
- C. $5 - 7$
- D. $3 - 7$



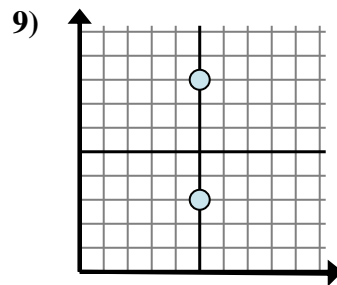
- A. $3 - 3$
- B. $8 - 0$
- C. $3 - 0$
- D. $0 - 8$



- A. $9 - 1$
- B. $9 - 3$
- C. $1 - 1$
- D. $1 - 1$



- A. $8 - 6$
- B. $8 - 6$
- C. $10 - 8$
- D. $10 - 6$

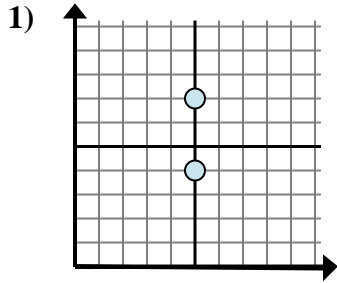


- A. $8 - 3$
- B. $5 - 5$
- C. $8 - 5$
- D. $5 - 8$

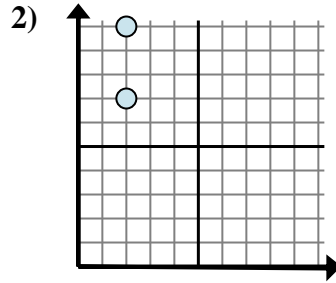
- 1. _____
- 2. _____
- 3. _____
- 4. _____
- 5. _____
- 6. _____
- 7. _____
- 8. _____
- 9. _____



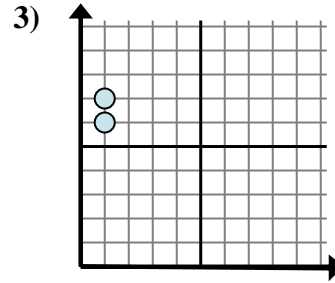
Bestimmen Sie, welcher Ausdruck den Abstand zwischen den beiden Punkten am besten zeigt.



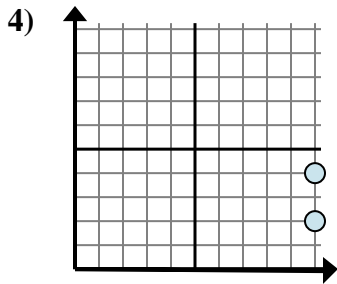
- A. $5 - 5$
 B. $7 - 4$
 C. $7 - 5$
 D. $5 - 4$



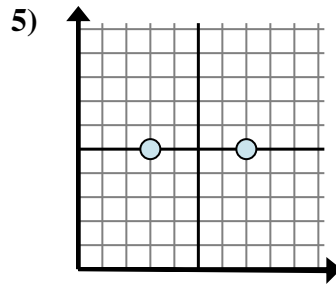
- A. $10 - 2$
 B. $2 - 10$
 C. $2 - 2$
 D. $10 - 7$



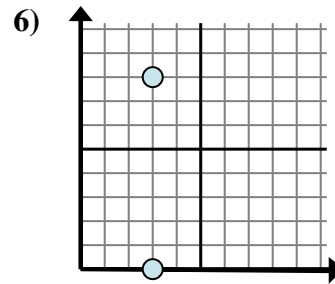
- A. $7 - 6$
 B. $1 - 6$
 C. $6 - 1$
 D. $1 - 1$



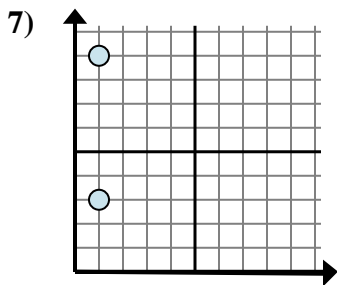
- A. $10 - 4$
 B. $10 - 4$
 C. $2 - 10$
 D. $4 - 2$



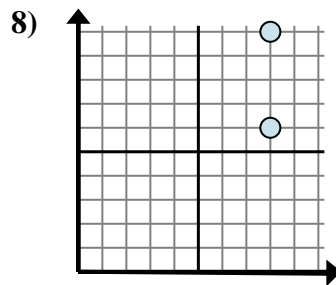
- A. $7 - 5$
 B. $7 - 3$
 C. $5 - 7$
 D. $3 - 7$



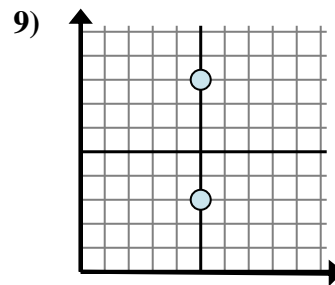
- A. $3 - 3$
 B. $8 - 0$
 C. $3 - 0$
 D. $0 - 8$



- A. $9 - 1$
 B. $9 - 3$
 C. $1 - 1$
 D. $1 - 1$



- A. $8 - 6$
 B. $8 - 6$
 C. $10 - 8$
 D. $10 - 6$



- A. $8 - 3$
 B. $5 - 5$
 C. $8 - 5$
 D. $5 - 8$

Antworten

1. **B**
 2. **D**
 3. **A**
 4. **D**
 5. **B**
 6. **B**
 7. **B**
 8. **D**
 9. **A**