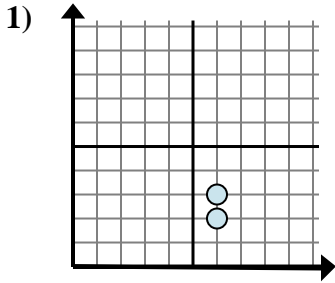


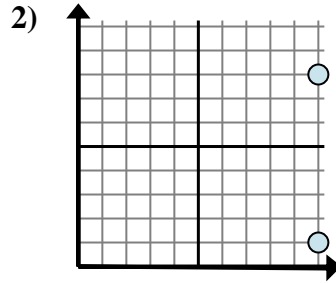


Bestimmen Sie, welcher Ausdruck den Abstand zwischen den beiden Punkten am besten zeigt.

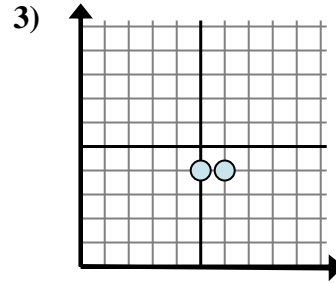
**Antworten**



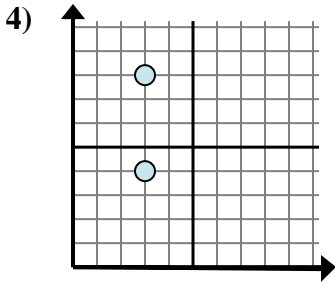
- A.  $3 - 2$
- B.  $6 - 6$
- C.  $3 - 6$
- D.  $2 - 3$



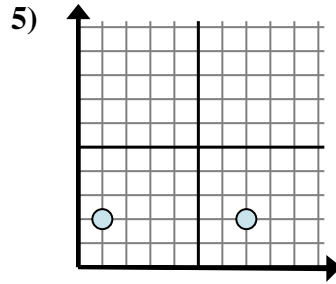
- A.  $10 - 10$
- B.  $10 - 8$
- C.  $8 - 10$
- D.  $8 - 1$



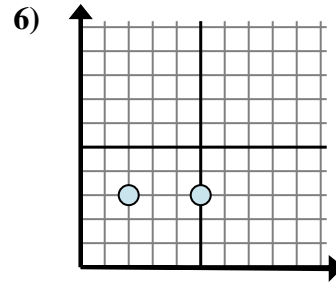
- A.  $6 - 5$
- B.  $4 - 4$
- C.  $5 - 4$
- D.  $6 - 4$



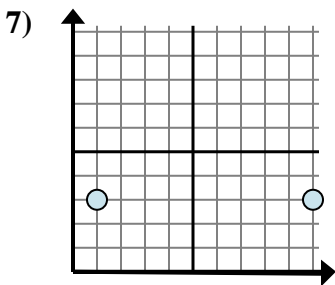
- A.  $3 - 3$
- B.  $3 - 4$
- C.  $8 - 4$
- D.  $4 - 8$



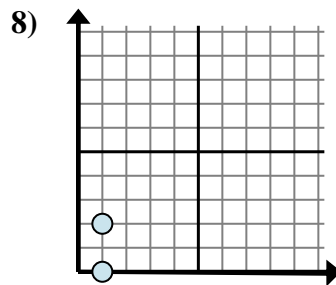
- A.  $1 - 2$
- B.  $2 - 2$
- C.  $7 - 1$
- D.  $2 - 2$



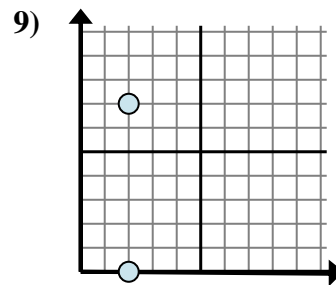
- A.  $3 - 5$
- B.  $2 - 5$
- C.  $5 - 2$
- D.  $3 - 5$



- A.  $10 - 1$
- B.  $3 - 3$
- C.  $1 - 3$
- D.  $3 - 10$



- A.  $2 - 0$
- B.  $1 - 0$
- C.  $1 - 1$
- D.  $2 - 1$



- A.  $2 - 2$
- B.  $0 - 2$
- C.  $7 - 0$
- D.  $2 - 7$

1. \_\_\_\_\_

2. \_\_\_\_\_

3. \_\_\_\_\_

4. \_\_\_\_\_

5. \_\_\_\_\_

6. \_\_\_\_\_

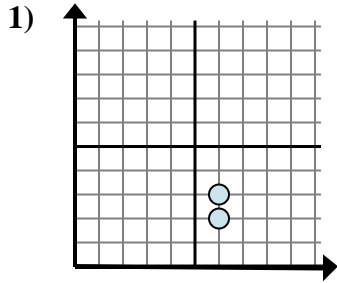
7. \_\_\_\_\_

8. \_\_\_\_\_

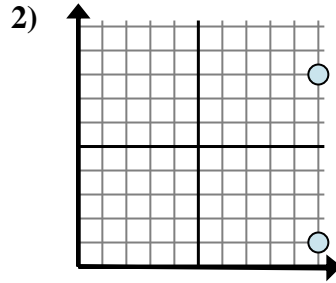
9. \_\_\_\_\_



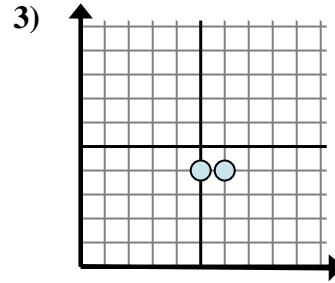
Bestimmen Sie, welcher Ausdruck den Abstand zwischen den beiden Punkten am besten zeigt.



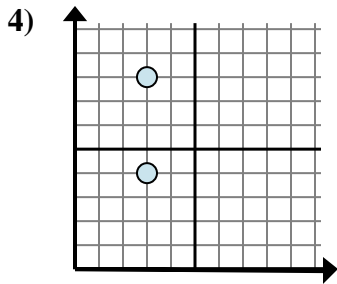
- A.  $3 - 2$   
 B.  $6 - 6$   
 C.  $3 - 6$   
 D.  $2 - 3$



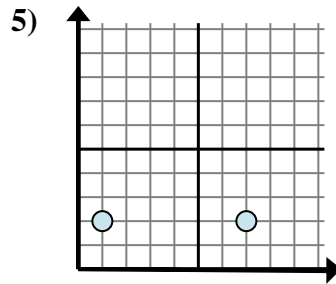
- A.  $10 - 10$   
 B.  $10 - 8$   
 C.  $8 - 10$   
 D.  $8 - 1$



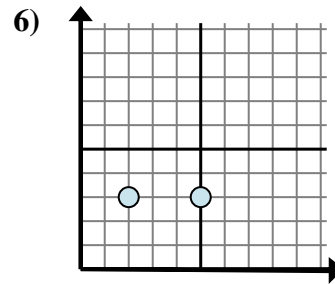
- A.  $6 - 5$   
 B.  $4 - 4$   
 C.  $5 - 4$   
 D.  $6 - 4$



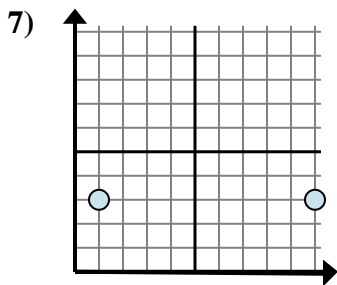
- A.  $3 - 3$   
 B.  $3 - 4$   
 C.  $8 - 4$   
 D.  $4 - 8$



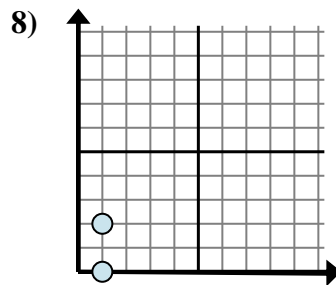
- A.  $1 - 2$   
 B.  $2 - 2$   
 C.  $7 - 1$   
 D.  $2 - 2$



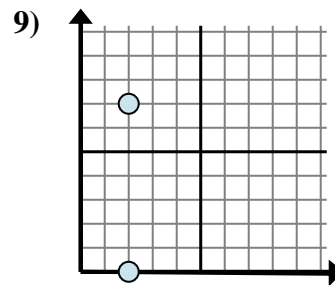
- A.  $3 - 5$   
 B.  $2 - 5$   
 C.  $5 - 2$   
 D.  $3 - 5$



- A.  $10 - 1$   
 B.  $3 - 3$   
 C.  $1 - 3$   
 D.  $3 - 10$



- A.  $2 - 0$   
 B.  $1 - 0$   
 C.  $1 - 1$   
 D.  $2 - 1$



- A.  $2 - 2$   
 B.  $0 - 2$   
 C.  $7 - 0$   
 D.  $2 - 7$

**Antworten**

1.     **A**      
 2.     **D**      
 3.     **A**      
 4.     **C**      
 5.     **C**      
 6.     **C**      
 7.     **A**      
 8.     **A**      
 9.     **C**