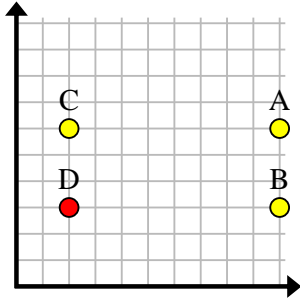




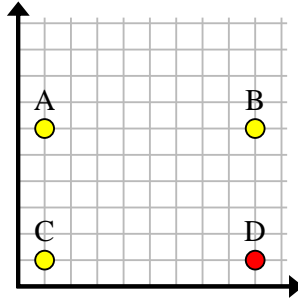
Finden Sie die Koordinaten von Punkt D, um ein Rechteck zu erstellen.

Antworten

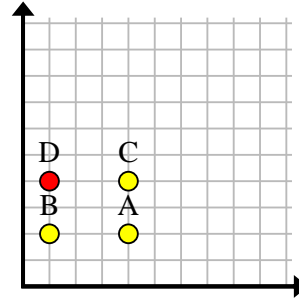
Bsp)



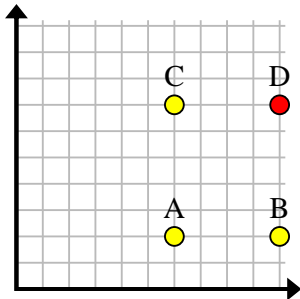
1)



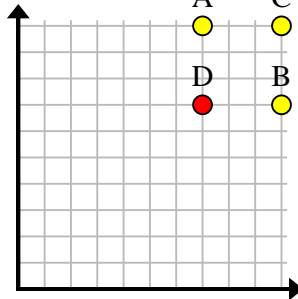
2)

Bsp. (2,3)1. (9,1)2. (1,4)3. (10,7)4. (7,7)5. (9,5)6. (3,2)7. (2,8)8. (7,1)9. (7,7)10. (1,2)11. (2,7)

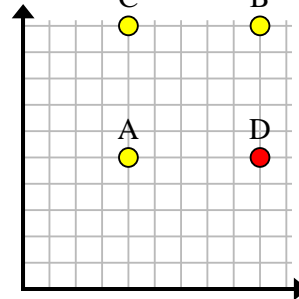
3)



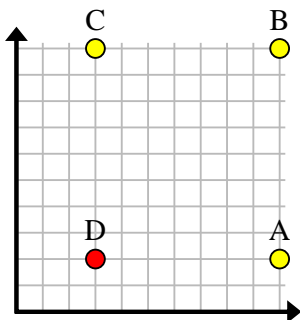
4)



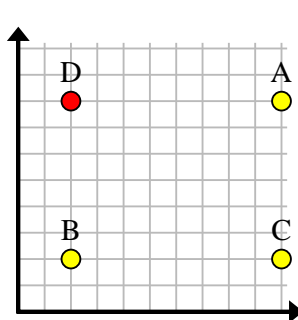
5)



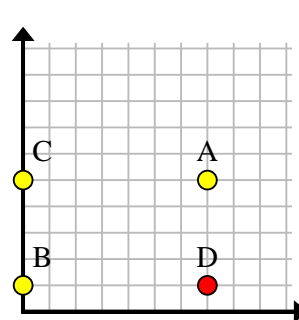
6)



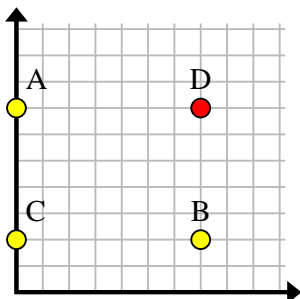
7)



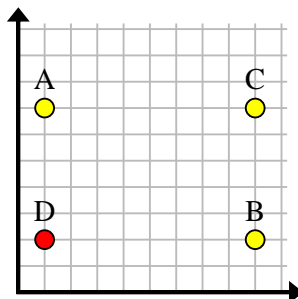
8)



9)



10)



11)

