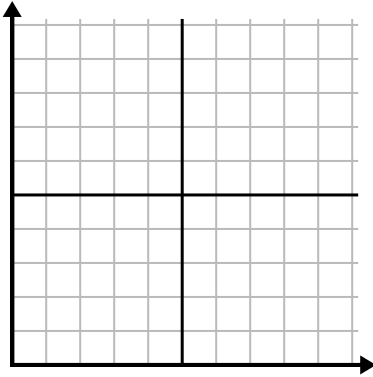




Füllen Sie das Raster mithilfe des Diagramms aus.

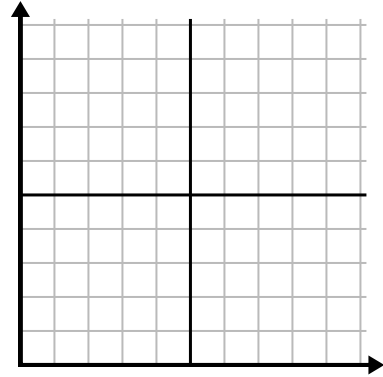
1)

Tag	1	2	3	4	5	6	7
Gesendete Texte	5	30	25	50	35	15	10



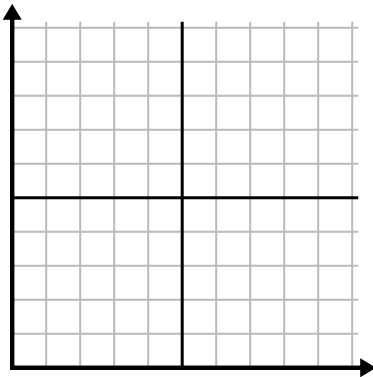
2)

Tag	1	2	3	4	5	6	7
Geld ausgegeben	1	5	4	6	10	2	3



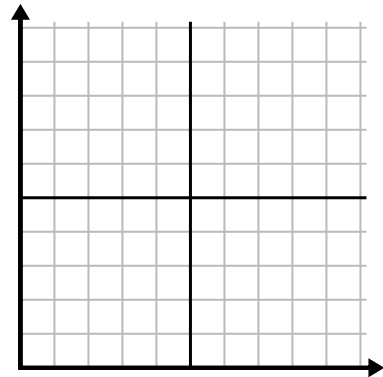
3)

Woche	1	2	3	4	5
Verwendetes Wasser (Gallonen)	20	60	100	90	70



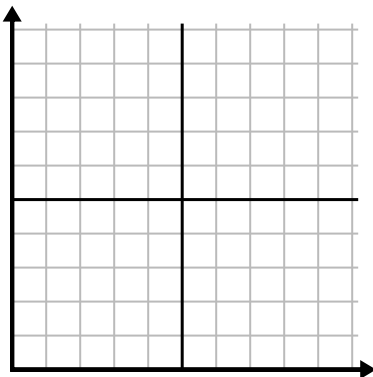
4)

Tag	1	2	3	4	5	6
Kalorien verbrannt	80	180	40	20	100	200



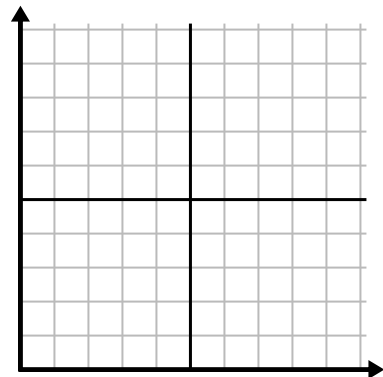
5)

Monat	1	2	3	4	5
Stromrechnungspreis	150	175	125	200	25



6)

Stunde	1	2	3	4	5	6
Verkaufte Menge	4	9	7	10	3	6

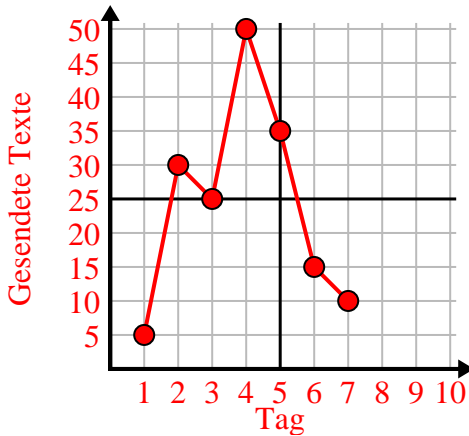




Füllen Sie das Raster mithilfe des Diagramms aus.

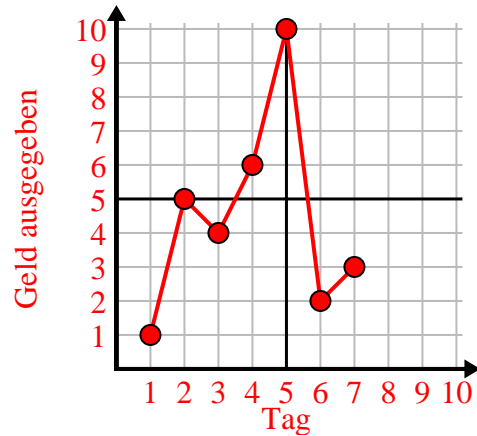
1)

Tag	1	2	3	4	5	6	7
Gesendete Texte	5	30	25	50	35	15	10



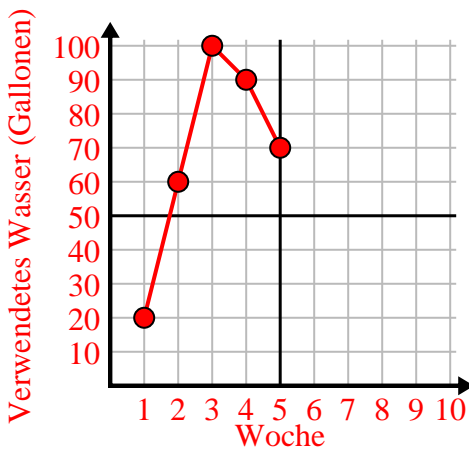
2)

Tag	1	2	3	4	5	6	7
Geld ausgegeben	1	5	4	6	10	2	3



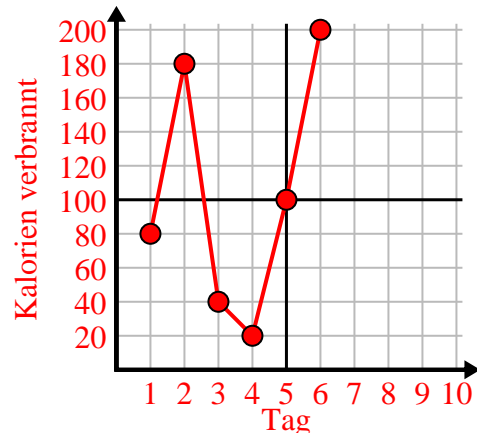
3)

Woche	1	2	3	4	5
Verwendetes Wasser (Gallonen)	20	60	100	90	70



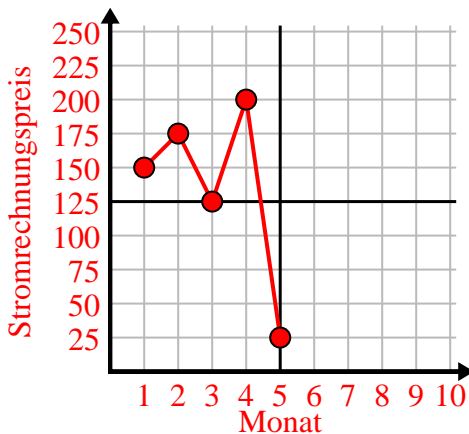
4)

Tag	1	2	3	4	5	6
Kalorien verbrannt	80	180	40	20	100	200



5)

Monat	1	2	3	4	5
Stromrechnungspreis	150	175	125	200	25



6)

Stunde	1	2	3	4	5	6
Verkaufte Menge	4	9	7	10	3	6

