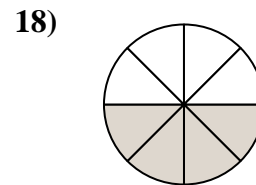
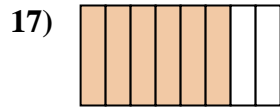
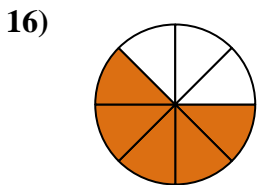
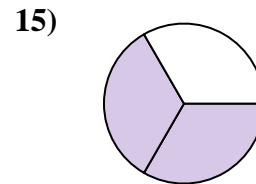
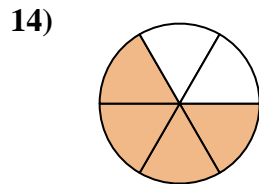
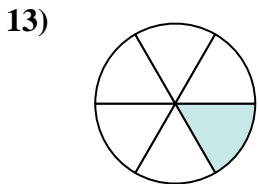
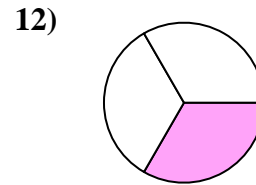
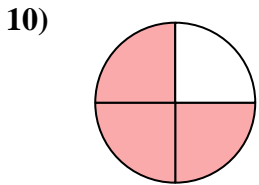
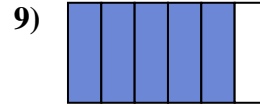
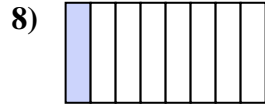
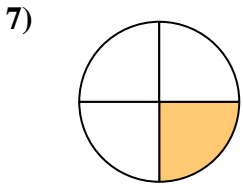
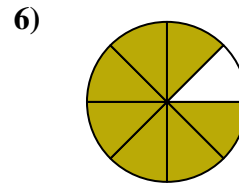
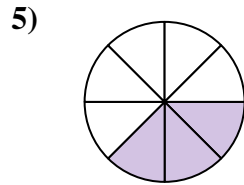
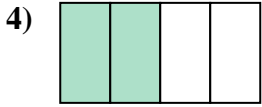
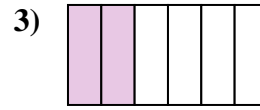
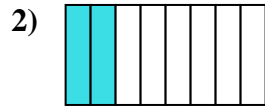
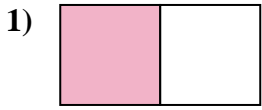




Schreibe die schraffierte Fläche als einen Bruch des Ganzen.

**Antworten**

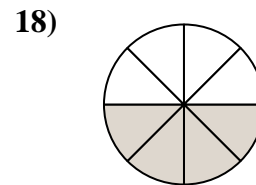
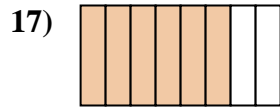
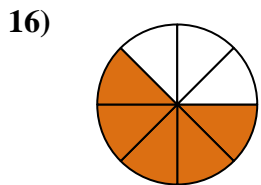
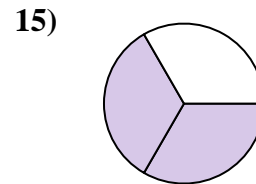
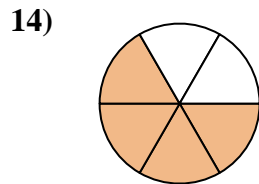
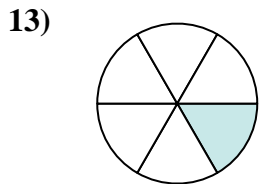
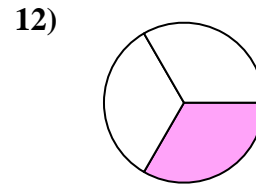
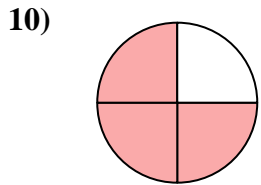
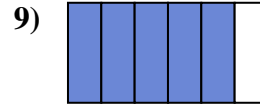
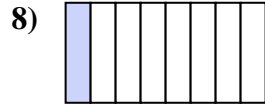
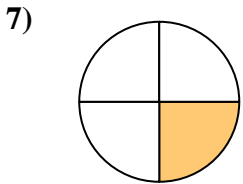
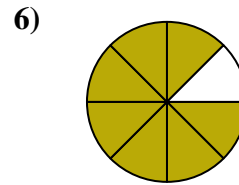
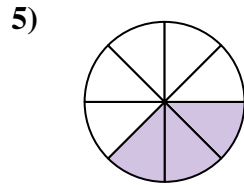
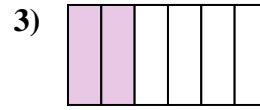
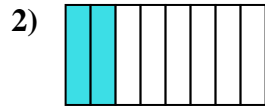


1. \_\_\_\_\_
2. \_\_\_\_\_
3. \_\_\_\_\_
4. \_\_\_\_\_
5. \_\_\_\_\_
6. \_\_\_\_\_
7. \_\_\_\_\_
8. \_\_\_\_\_
9. \_\_\_\_\_
10. \_\_\_\_\_
11. \_\_\_\_\_
12. \_\_\_\_\_
13. \_\_\_\_\_
14. \_\_\_\_\_
15. \_\_\_\_\_
16. \_\_\_\_\_
17. \_\_\_\_\_
18. \_\_\_\_\_



Schreibe die schraffierte Fläche als einen Bruch des Ganzen.

**Antworten**



1. 1/2

2. 2/8

3. 2/6

4. 2/4

5. 3/8

6. 7/8

7. 1/4

8. 1/8

9. 5/6

10. 3/4

11. 3/6

12. 1/3

13. 1/6

14. 4/6

15. 2/3

16. 5/8

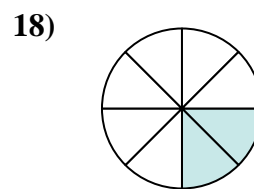
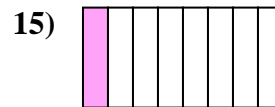
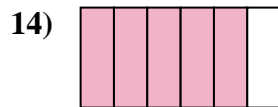
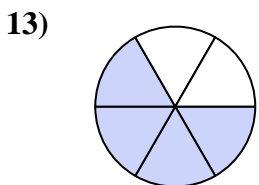
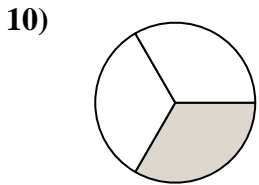
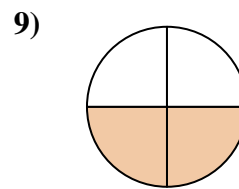
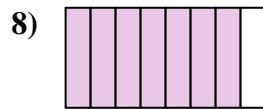
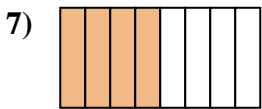
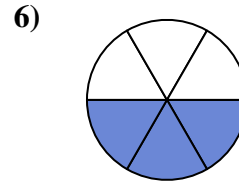
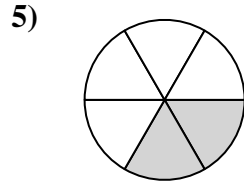
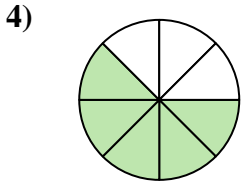
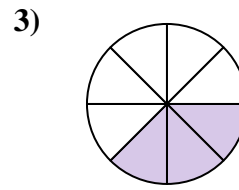
17. 6/8

18. 4/8



Schreibe die schraffierte Fläche als einen Bruch des Ganzen.

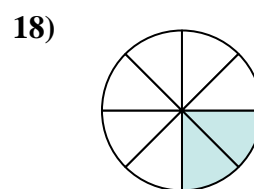
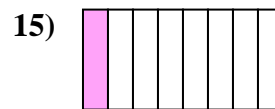
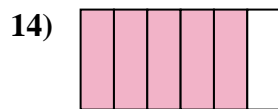
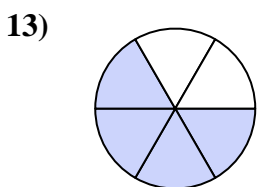
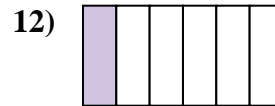
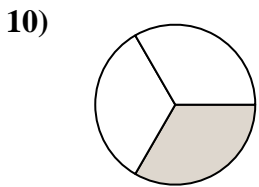
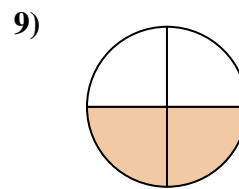
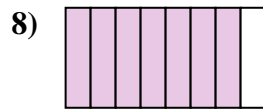
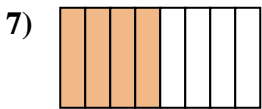
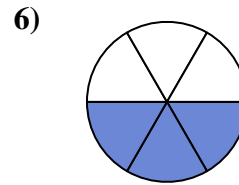
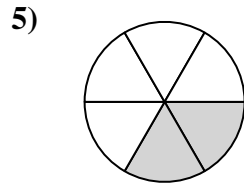
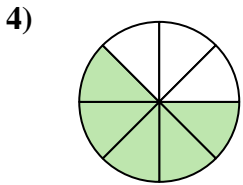
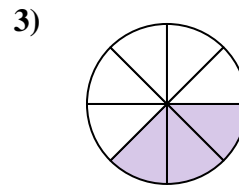
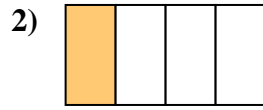
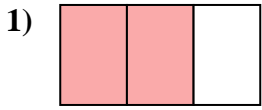
**Antworten**



1. \_\_\_\_\_
2. \_\_\_\_\_
3. \_\_\_\_\_
4. \_\_\_\_\_
5. \_\_\_\_\_
6. \_\_\_\_\_
7. \_\_\_\_\_
8. \_\_\_\_\_
9. \_\_\_\_\_
10. \_\_\_\_\_
11. \_\_\_\_\_
12. \_\_\_\_\_
13. \_\_\_\_\_
14. \_\_\_\_\_
15. \_\_\_\_\_
16. \_\_\_\_\_
17. \_\_\_\_\_
18. \_\_\_\_\_



Schreibe die schraffierte Fläche als einen Bruch des Ganzen.

**Antworten**

1.  $\frac{2}{3}$

2.  $\frac{1}{4}$

3.  $\frac{3}{8}$

4.  $\frac{5}{8}$

5.  $\frac{2}{6}$

6.  $\frac{3}{6}$

7.  $\frac{4}{8}$

8.  $\frac{7}{8}$

9.  $\frac{2}{4}$

10.  $\frac{1}{3}$

11.  $\frac{1}{2}$

12.  $\frac{1}{6}$

13.  $\frac{4}{6}$

14.  $\frac{5}{6}$

15.  $\frac{1}{8}$

16.  $\frac{3}{4}$

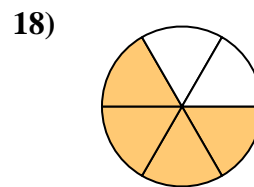
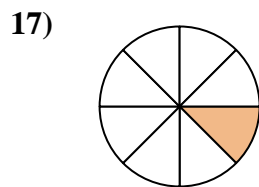
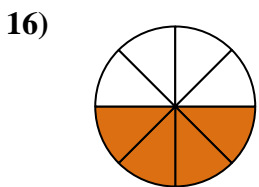
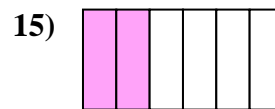
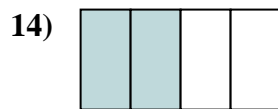
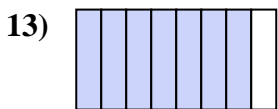
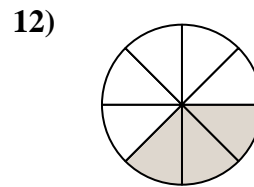

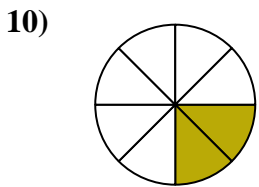
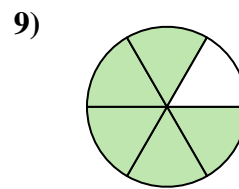
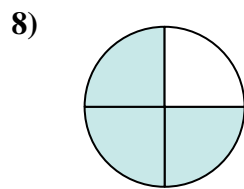
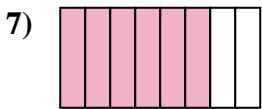
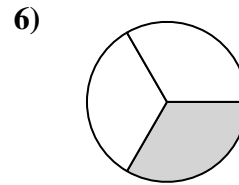
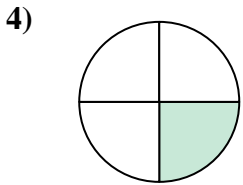
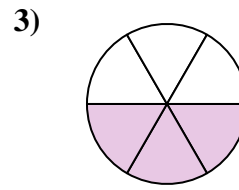
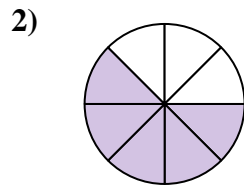
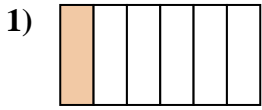
17.  $\frac{6}{8}$

18.  $\frac{2}{8}$



Schreibe die schraffierte Fläche als einen Bruch des Ganzen.

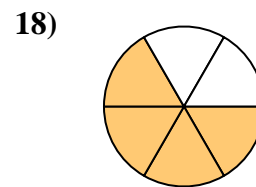
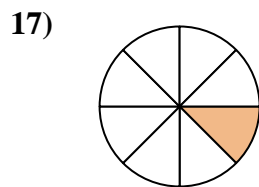
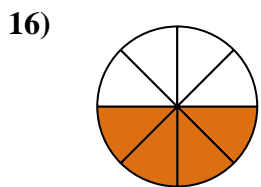
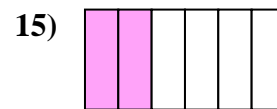
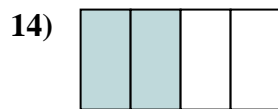
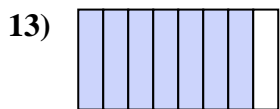
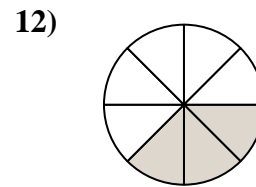

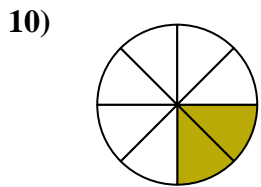
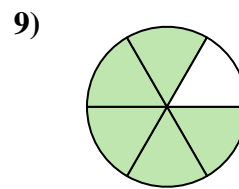
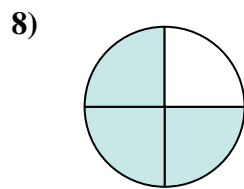
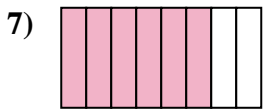
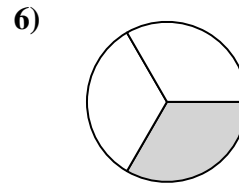
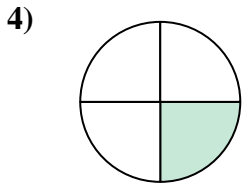
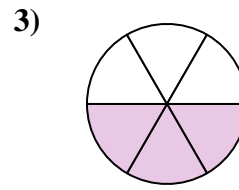
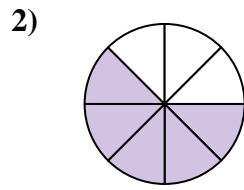
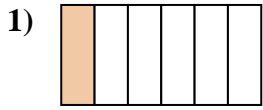
**Antworten**



1. \_\_\_\_\_
2. \_\_\_\_\_
3. \_\_\_\_\_
4. \_\_\_\_\_
5. \_\_\_\_\_
6. \_\_\_\_\_
7. \_\_\_\_\_
8. \_\_\_\_\_
9. \_\_\_\_\_
10. \_\_\_\_\_
11. \_\_\_\_\_
12. \_\_\_\_\_
13. \_\_\_\_\_
14. \_\_\_\_\_
15. \_\_\_\_\_
16. \_\_\_\_\_
17. \_\_\_\_\_
18. \_\_\_\_\_



Schreibe die schraffierte Fläche als einen Bruch des Ganzen.

**Antworten**

1.  $\frac{1}{6}$

2.  $\frac{5}{8}$

3.  $\frac{3}{6}$

4.  $\frac{1}{4}$

5.  $\frac{1}{2}$

6.  $\frac{1}{3}$

7.  $\frac{6}{8}$

8.  $\frac{3}{4}$

9.  $\frac{5}{6}$

10.  $\frac{2}{8}$

11.  $\frac{2}{3}$

12.  $\frac{3}{8}$

13.  $\frac{7}{8}$

14.  $\frac{2}{4}$

15.  $\frac{2}{6}$

16.  $\frac{4}{8}$

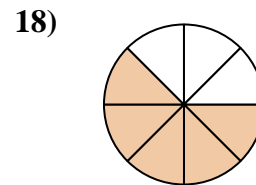
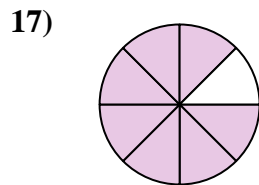
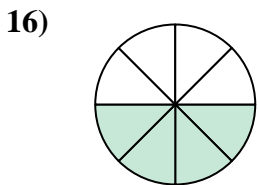
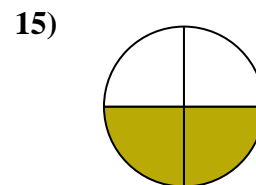
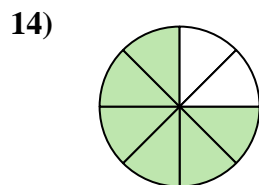
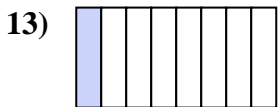
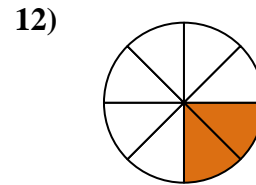
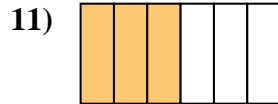
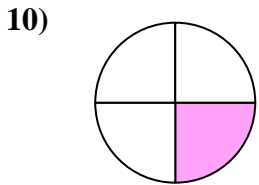
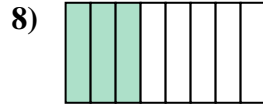
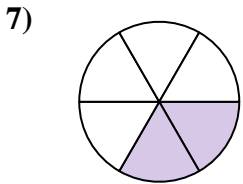
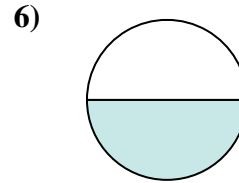
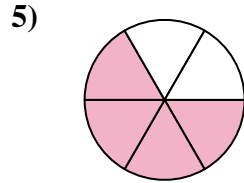
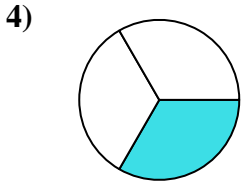
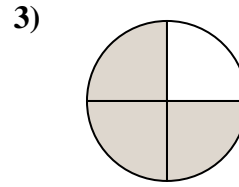
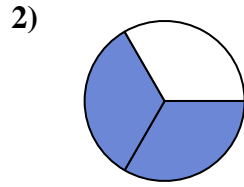
17.  $\frac{1}{8}$

18.  $\frac{4}{6}$



Schreibe die schraffierte Fläche als einen Bruch des Ganzen.

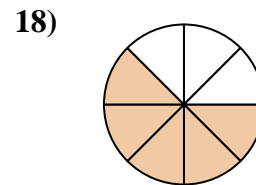
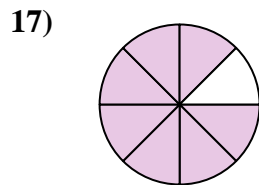
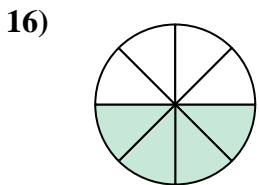
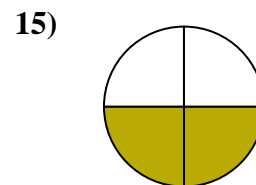
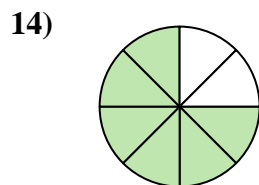
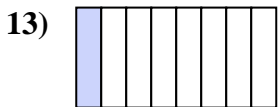
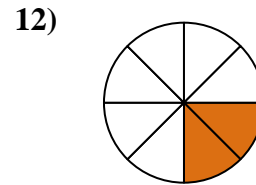
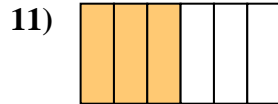
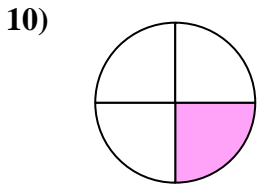
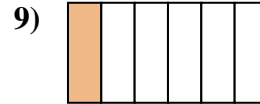
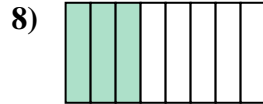
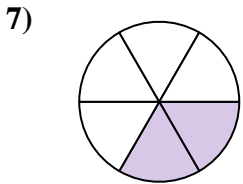
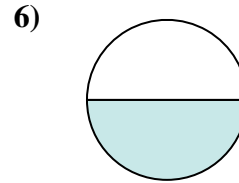
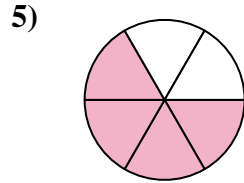
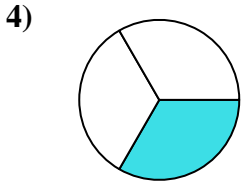
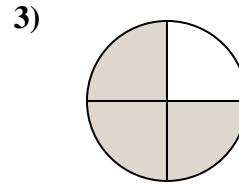
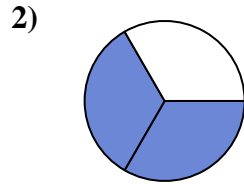
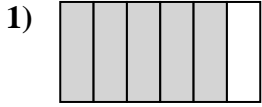
**Antworten**



1. \_\_\_\_\_
2. \_\_\_\_\_
3. \_\_\_\_\_
4. \_\_\_\_\_
5. \_\_\_\_\_
6. \_\_\_\_\_
7. \_\_\_\_\_
8. \_\_\_\_\_
9. \_\_\_\_\_
10. \_\_\_\_\_
11. \_\_\_\_\_
12. \_\_\_\_\_
13. \_\_\_\_\_
14. \_\_\_\_\_
15. \_\_\_\_\_
16. \_\_\_\_\_
17. \_\_\_\_\_
18. \_\_\_\_\_



Schreibe die schraffierte Fläche als einen Bruch des Ganzen.

**Antworten**

1.  $\frac{5}{6}$

2.  $\frac{2}{3}$

3.  $\frac{3}{4}$

4.  $\frac{1}{3}$

5.  $\frac{4}{6}$

6.  $\frac{1}{2}$

7.  $\frac{2}{6}$

8.  $\frac{3}{8}$

9.  $\frac{1}{6}$

10.  $\frac{1}{4}$

11.  $\frac{3}{6}$

12.  $\frac{2}{8}$

13.  $\frac{1}{8}$

14.  $\frac{6}{8}$

15.  $\frac{2}{4}$

16.  $\frac{4}{8}$

17.  $\frac{7}{8}$

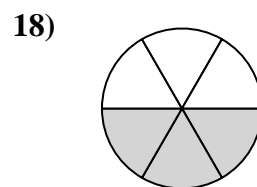
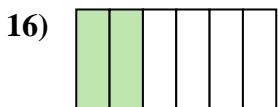
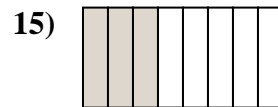
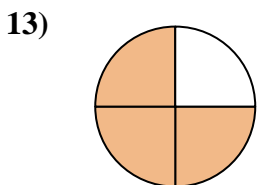
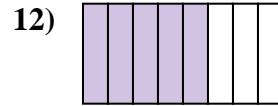
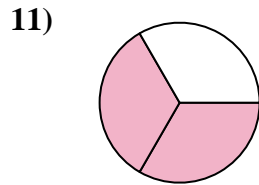
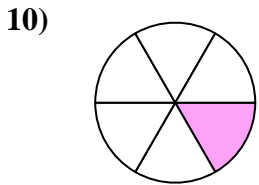
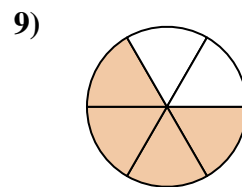
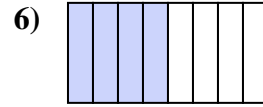
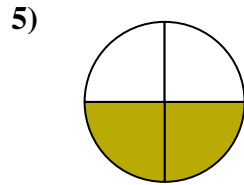
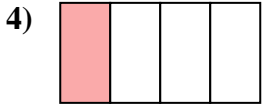
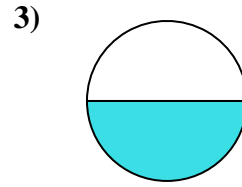
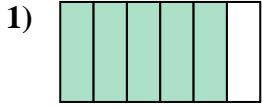
18.  $\frac{5}{8}$





Schreibe die schraffierte Fläche als einen Bruch des Ganzen.

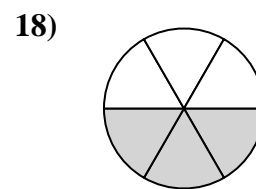
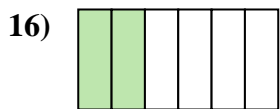
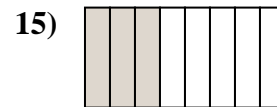
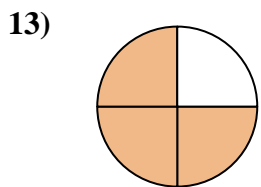
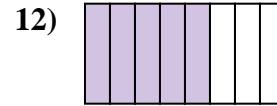
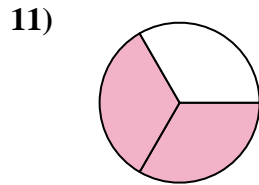
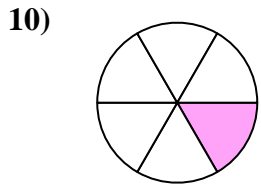
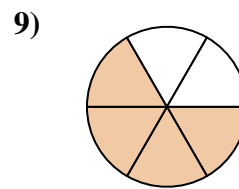
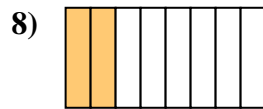
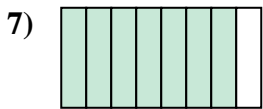
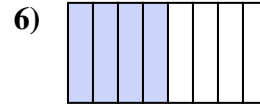
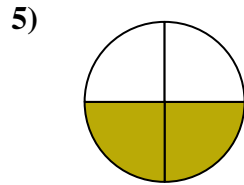
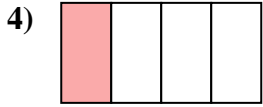
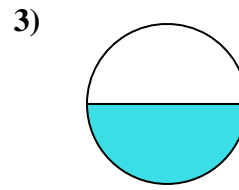
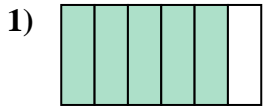
**Antworten**



1. \_\_\_\_\_
2. \_\_\_\_\_
3. \_\_\_\_\_
4. \_\_\_\_\_
5. \_\_\_\_\_
6. \_\_\_\_\_
7. \_\_\_\_\_
8. \_\_\_\_\_
9. \_\_\_\_\_
10. \_\_\_\_\_
11. \_\_\_\_\_
12. \_\_\_\_\_
13. \_\_\_\_\_
14. \_\_\_\_\_
15. \_\_\_\_\_
16. \_\_\_\_\_
17. \_\_\_\_\_
18. \_\_\_\_\_



Schreibe die schraffierte Fläche als einen Bruch des Ganzen.

**Antworten**

1.  $\frac{5}{6}$

2.  $\frac{1}{3}$

3.  $\frac{1}{2}$

4.  $\frac{1}{4}$

5.  $\frac{2}{4}$

6.  $\frac{4}{8}$

7.  $\frac{7}{8}$

8.  $\frac{2}{8}$

9.  $\frac{4}{6}$

10.  $\frac{1}{6}$

11.  $\frac{2}{3}$

12.  $\frac{5}{8}$

13.  $\frac{3}{4}$

14.  $\frac{1}{8}$

15.  $\frac{3}{8}$

16.  $\frac{2}{6}$

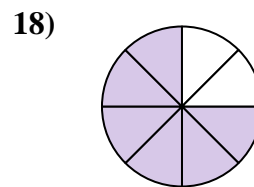
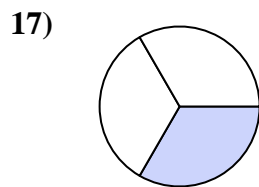
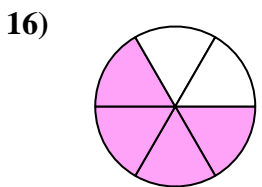
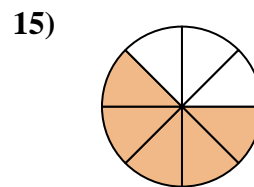
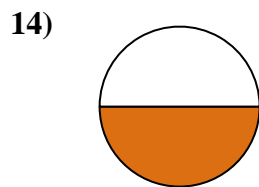
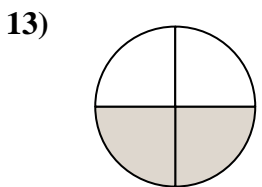
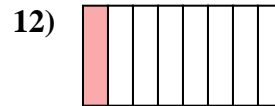

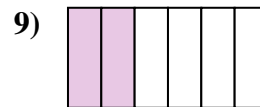
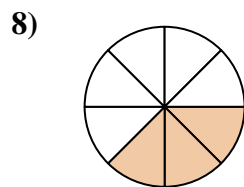

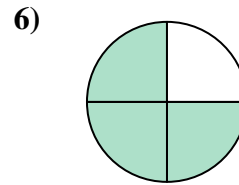
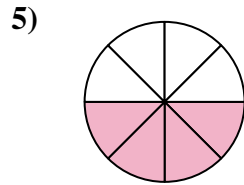
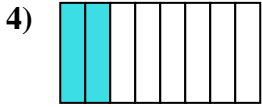
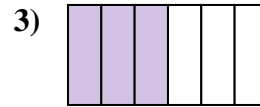
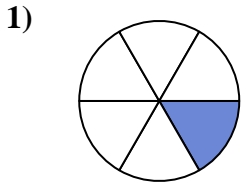
17.  $\frac{6}{8}$

18.  $\frac{3}{6}$



Schreibe die schraffierte Fläche als einen Bruch des Ganzen.

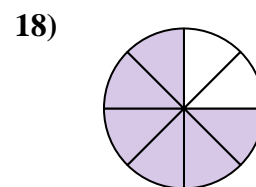
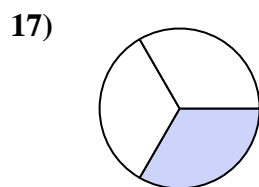
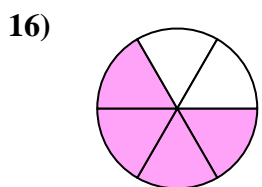
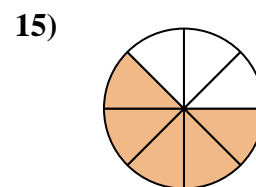
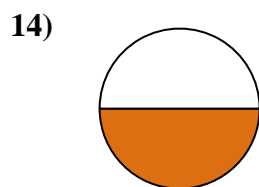
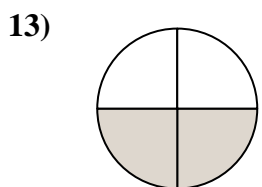
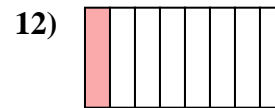

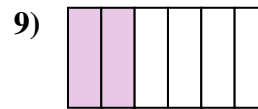
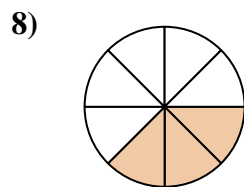
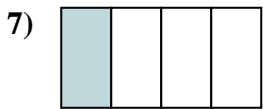
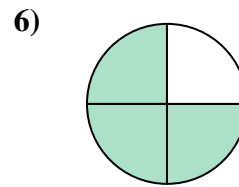
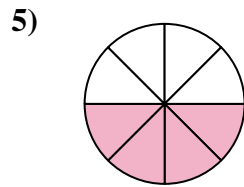
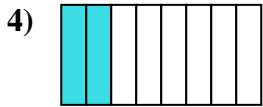
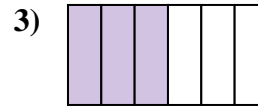
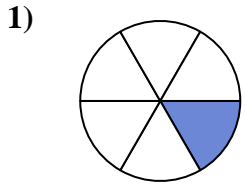
**Antworten**



1. \_\_\_\_\_
2. \_\_\_\_\_
3. \_\_\_\_\_
4. \_\_\_\_\_
5. \_\_\_\_\_
6. \_\_\_\_\_
7. \_\_\_\_\_
8. \_\_\_\_\_
9. \_\_\_\_\_
10. \_\_\_\_\_
11. \_\_\_\_\_
12. \_\_\_\_\_
13. \_\_\_\_\_
14. \_\_\_\_\_
15. \_\_\_\_\_
16. \_\_\_\_\_
17. \_\_\_\_\_
18. \_\_\_\_\_



Schreibe die schraffierte Fläche als einen Bruch des Ganzen.

**Antworten**

1.  $\frac{1}{6}$

2.  $\frac{5}{6}$

3.  $\frac{3}{6}$

4.  $\frac{2}{8}$

5.  $\frac{4}{8}$

6.  $\frac{3}{4}$

7.  $\frac{1}{4}$

8.  $\frac{3}{8}$

9.  $\frac{2}{6}$

10.  $\frac{2}{3}$

11.  $\frac{7}{8}$

12.  $\frac{1}{8}$

13.  $\frac{2}{4}$

14.  $\frac{1}{2}$

15.  $\frac{5}{8}$

16.  $\frac{4}{6}$

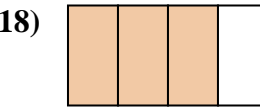
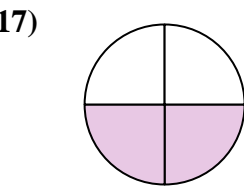

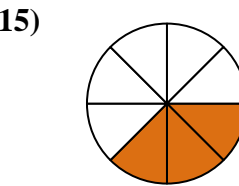
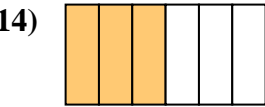
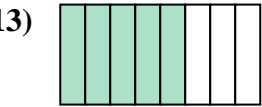
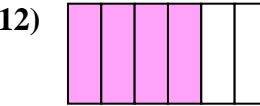
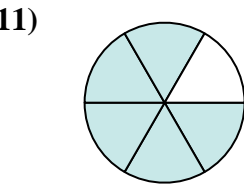
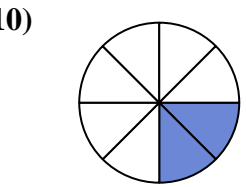
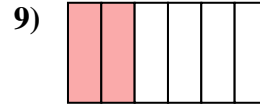
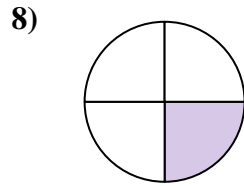
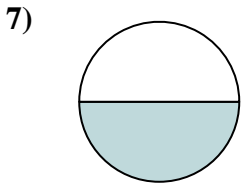
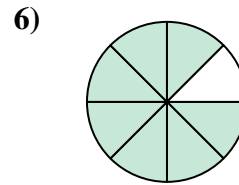
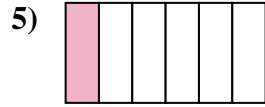
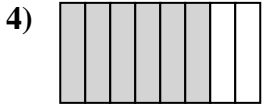
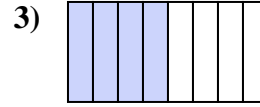
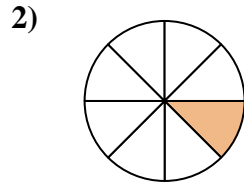
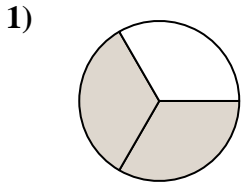
17.  $\frac{1}{3}$

18.  $\frac{6}{8}$



Schreibe die schraffierte Fläche als einen Bruch des Ganzen.

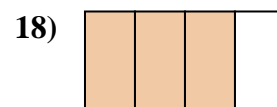
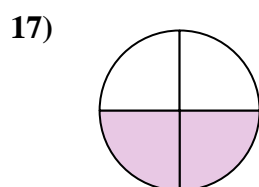

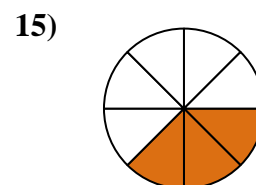
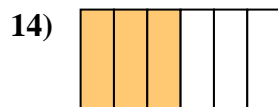

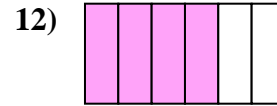
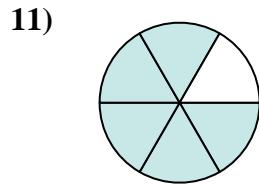
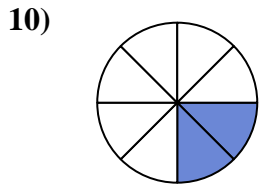
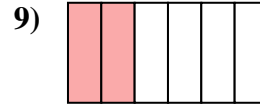
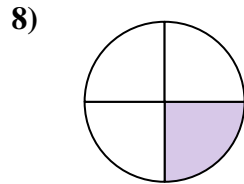
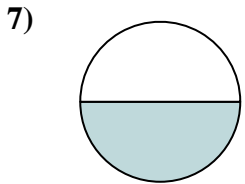
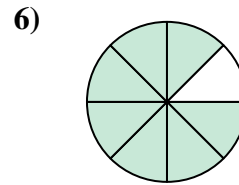
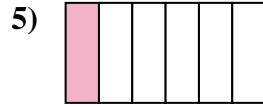
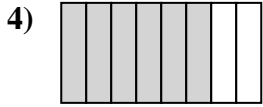
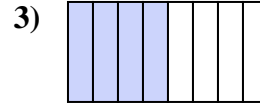
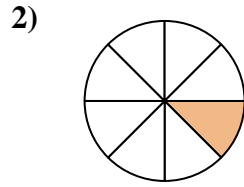
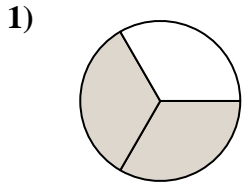
**Antworten**



1. \_\_\_\_\_
2. \_\_\_\_\_
3. \_\_\_\_\_
4. \_\_\_\_\_
5. \_\_\_\_\_
6. \_\_\_\_\_
7. \_\_\_\_\_
8. \_\_\_\_\_
9. \_\_\_\_\_
10. \_\_\_\_\_
11. \_\_\_\_\_
12. \_\_\_\_\_
13. \_\_\_\_\_
14. \_\_\_\_\_
15. \_\_\_\_\_
16. \_\_\_\_\_
17. \_\_\_\_\_
18. \_\_\_\_\_



Schreibe die schraffierte Fläche als einen Bruch des Ganzen.

**Antworten**

1.  $\frac{2}{3}$

2.  $\frac{1}{8}$

3.  $\frac{4}{8}$

4.  $\frac{6}{8}$

5.  $\frac{1}{6}$

6.  $\frac{7}{8}$

7.  $\frac{1}{2}$

8.  $\frac{1}{4}$

9.  $\frac{2}{6}$

10.  $\frac{2}{8}$

11.  $\frac{5}{6}$

12.  $\frac{4}{6}$

13.  $\frac{5}{8}$

14.  $\frac{3}{6}$

15.  $\frac{3}{8}$

16.  $\frac{1}{3}$

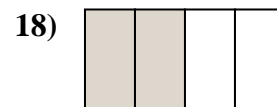
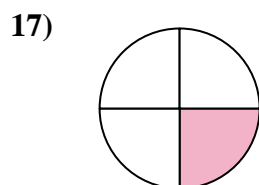

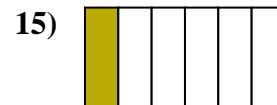
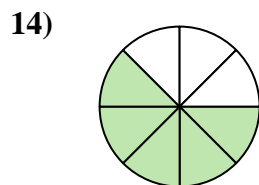
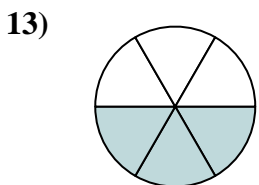
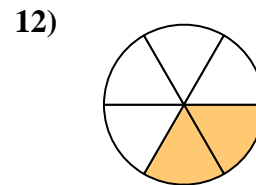
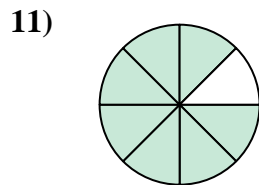

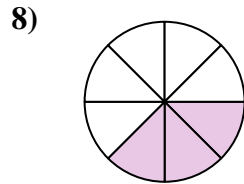
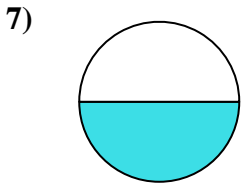
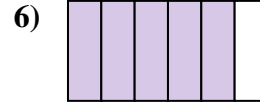
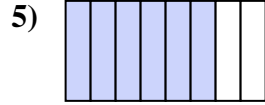
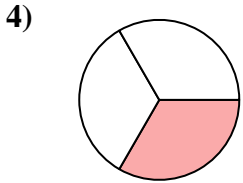
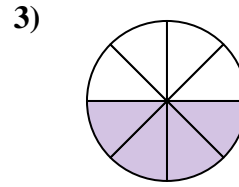
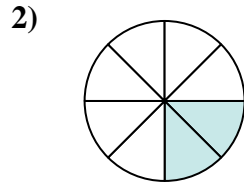
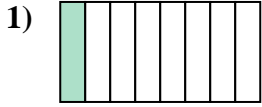
17.  $\frac{2}{4}$

18.  $\frac{3}{4}$



Schreibe die schraffierte Fläche als einen Bruch des Ganzen.

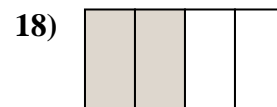
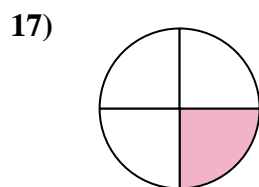

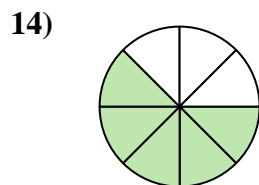
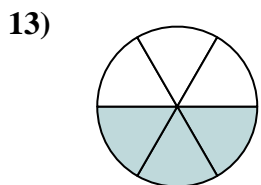
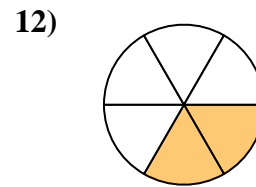
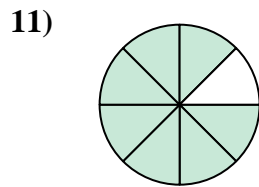

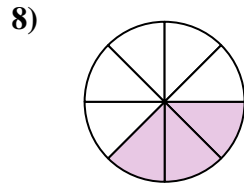
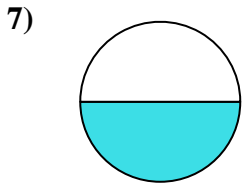
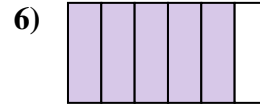
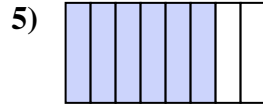
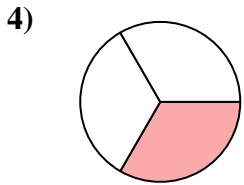
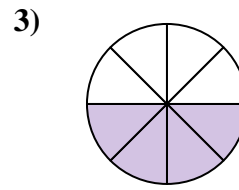
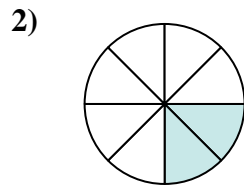
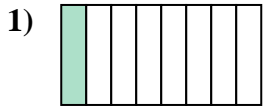
**Antworten**



1. \_\_\_\_\_
2. \_\_\_\_\_
3. \_\_\_\_\_
4. \_\_\_\_\_
5. \_\_\_\_\_
6. \_\_\_\_\_
7. \_\_\_\_\_
8. \_\_\_\_\_
9. \_\_\_\_\_
10. \_\_\_\_\_
11. \_\_\_\_\_
12. \_\_\_\_\_
13. \_\_\_\_\_
14. \_\_\_\_\_
15. \_\_\_\_\_
16. \_\_\_\_\_
17. \_\_\_\_\_
18. \_\_\_\_\_



Schreibe die schraffierte Fläche als einen Bruch des Ganzen.

**Antworten**

1.  $\frac{1}{8}$

2.  $\frac{2}{8}$

3.  $\frac{4}{8}$

4.  $\frac{1}{3}$

5.  $\frac{6}{8}$

6.  $\frac{5}{6}$

7.  $\frac{1}{2}$

8.  $\frac{3}{8}$

9.  $\frac{2}{3}$

10.  $\frac{4}{6}$

11.  $\frac{7}{8}$

12.  $\frac{2}{6}$

13.  $\frac{3}{6}$

14.  $\frac{5}{8}$

15.  $\frac{1}{6}$

16.  $\frac{3}{4}$

17.  $\frac{1}{4}$

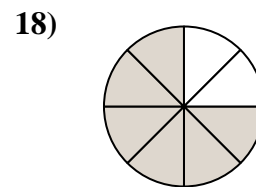
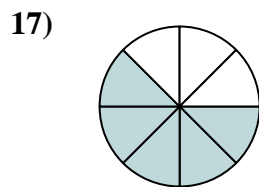
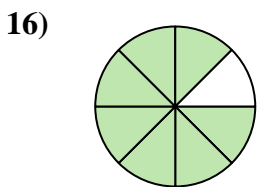
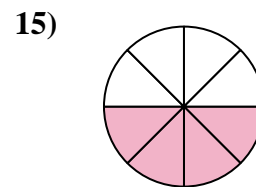
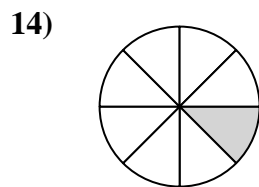
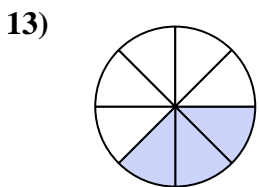
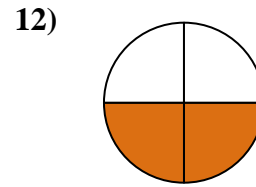
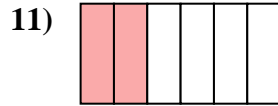
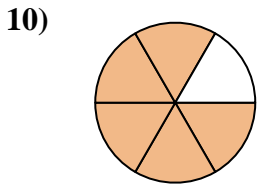
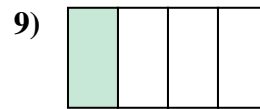
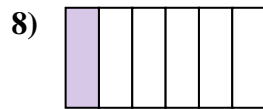
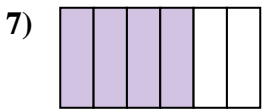
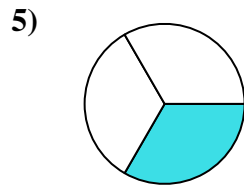

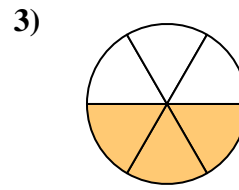
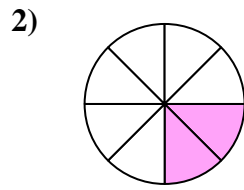
18.  $\frac{2}{4}$





Schreibe die schraffierte Fläche als einen Bruch des Ganzen.

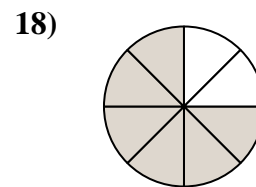
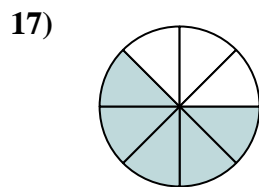
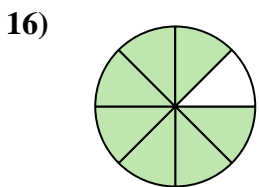
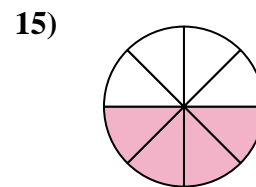
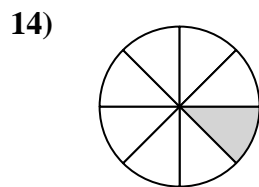
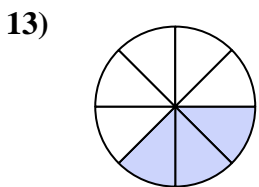
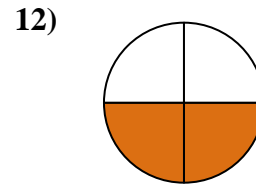
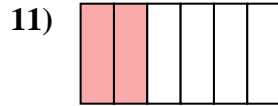
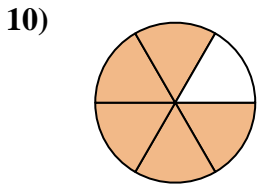
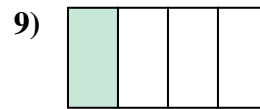
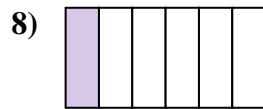
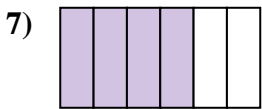
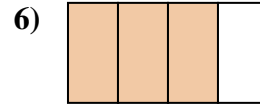
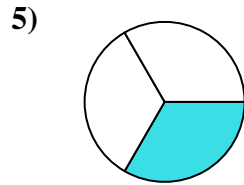

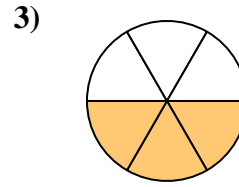
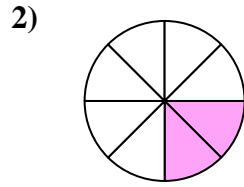
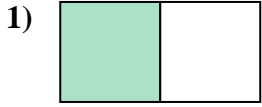
**Antworten**



1. \_\_\_\_\_
2. \_\_\_\_\_
3. \_\_\_\_\_
4. \_\_\_\_\_
5. \_\_\_\_\_
6. \_\_\_\_\_
7. \_\_\_\_\_
8. \_\_\_\_\_
9. \_\_\_\_\_
10. \_\_\_\_\_
11. \_\_\_\_\_
12. \_\_\_\_\_
13. \_\_\_\_\_
14. \_\_\_\_\_
15. \_\_\_\_\_
16. \_\_\_\_\_
17. \_\_\_\_\_
18. \_\_\_\_\_



Schreibe die schraffierte Fläche als einen Bruch des Ganzen.

**Antworten**

1.  $\frac{1}{2}$

2.  $\frac{2}{8}$

3.  $\frac{3}{6}$

4.  $\frac{2}{3}$

5.  $\frac{1}{3}$

6.  $\frac{3}{4}$

7.  $\frac{4}{6}$

8.  $\frac{1}{6}$

9.  $\frac{1}{4}$

10.  $\frac{5}{6}$

11.  $\frac{2}{6}$

12.  $\frac{2}{4}$

13.  $\frac{3}{8}$

14.  $\frac{1}{8}$

15.  $\frac{4}{8}$

16.  $\frac{7}{8}$

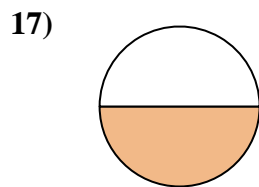
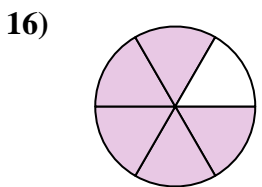
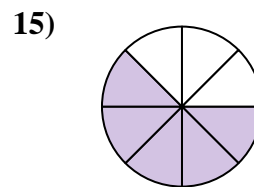
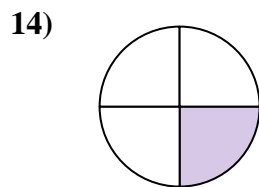
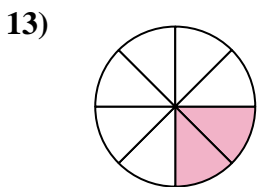
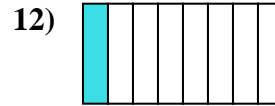
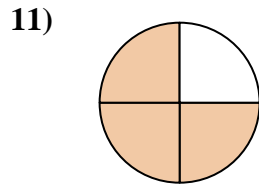
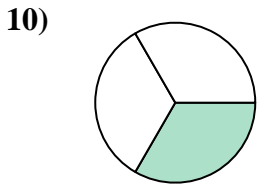
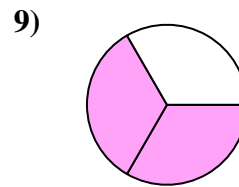
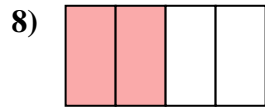
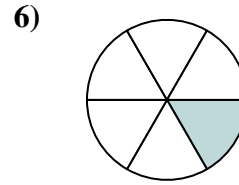
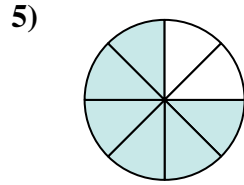
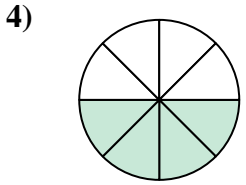
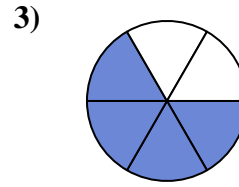
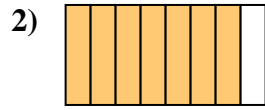
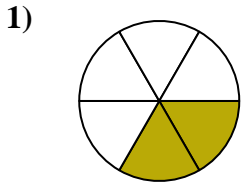
17.  $\frac{5}{8}$

18.  $\frac{6}{8}$



Schreibe die schraffierte Fläche als einen Bruch des Ganzen.

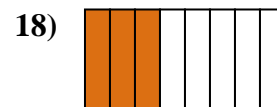
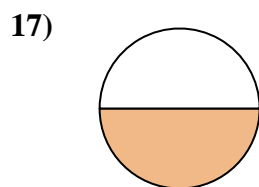
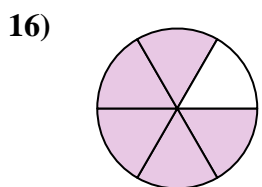
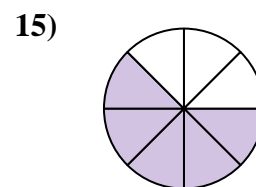
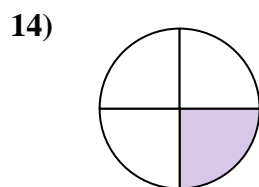
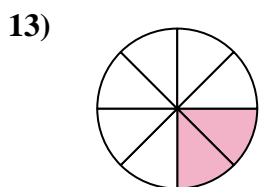
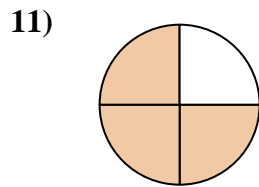
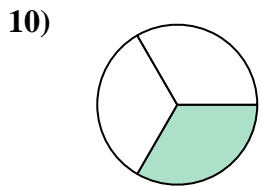
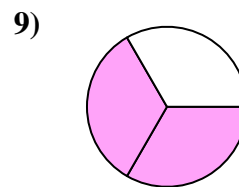
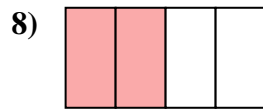
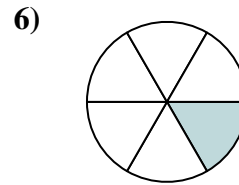
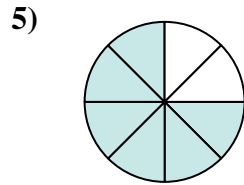
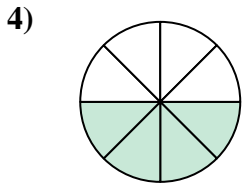
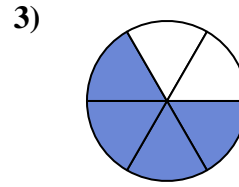
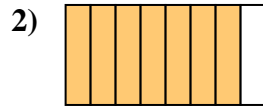
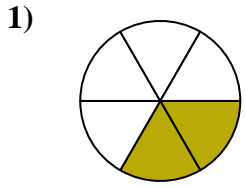
**Antworten**



1. \_\_\_\_\_
2. \_\_\_\_\_
3. \_\_\_\_\_
4. \_\_\_\_\_
5. \_\_\_\_\_
6. \_\_\_\_\_
7. \_\_\_\_\_
8. \_\_\_\_\_
9. \_\_\_\_\_
10. \_\_\_\_\_
11. \_\_\_\_\_
12. \_\_\_\_\_
13. \_\_\_\_\_
14. \_\_\_\_\_
15. \_\_\_\_\_
16. \_\_\_\_\_
17. \_\_\_\_\_
18. \_\_\_\_\_



Schreibe die schraffierte Fläche als einen Bruch des Ganzen.

**Antworten**

1.  $\frac{2}{6}$

2.  $\frac{7}{8}$

3.  $\frac{4}{6}$

4.  $\frac{4}{8}$

5.  $\frac{6}{8}$

6.  $\frac{1}{6}$

7.  $\frac{3}{8}$

8.  $\frac{2}{4}$

9.  $\frac{2}{3}$

10.  $\frac{1}{3}$

11.  $\frac{3}{4}$

12.  $\frac{1}{8}$

13.  $\frac{2}{8}$

14.  $\frac{1}{4}$

15.  $\frac{5}{8}$

16.  $\frac{5}{6}$

17.  $\frac{1}{2}$

18.  $\frac{3}{8}$