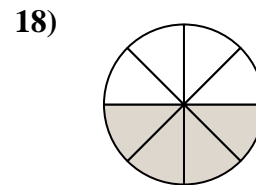
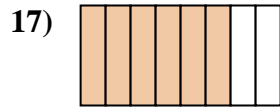
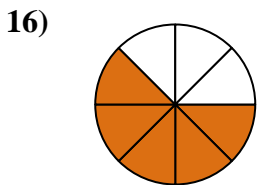
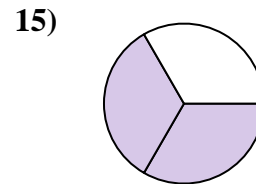
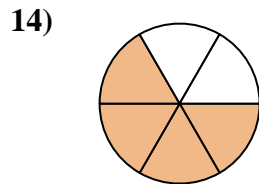
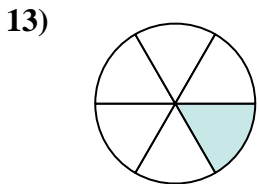
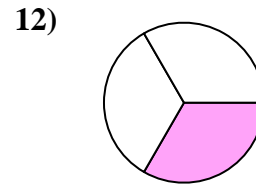
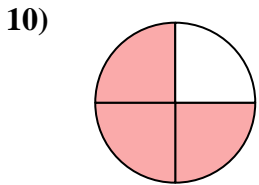
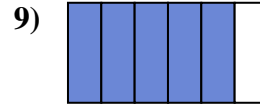
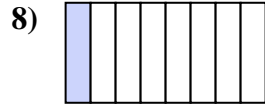
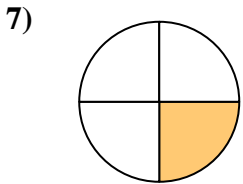
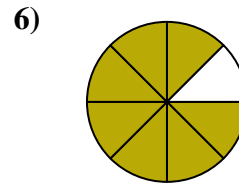
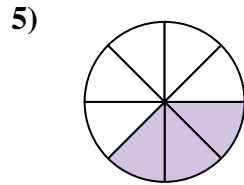
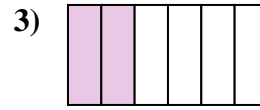
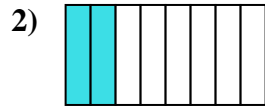




Schreibe die schraffierte Fläche als einen Bruch des Ganzen.



**Antworten**

1. \_\_\_\_\_

2. \_\_\_\_\_

3. \_\_\_\_\_

4. \_\_\_\_\_

5. \_\_\_\_\_

6. \_\_\_\_\_

7. \_\_\_\_\_

8. \_\_\_\_\_

9. \_\_\_\_\_

10. \_\_\_\_\_

11. \_\_\_\_\_

12. \_\_\_\_\_

13. \_\_\_\_\_

14. \_\_\_\_\_

15. \_\_\_\_\_

16. \_\_\_\_\_

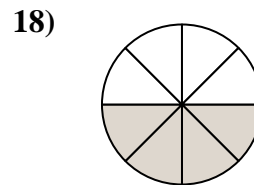
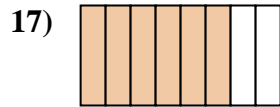
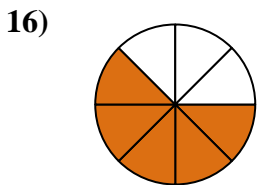
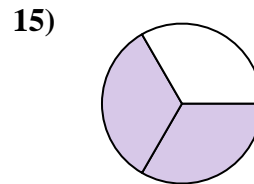
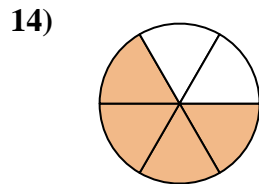
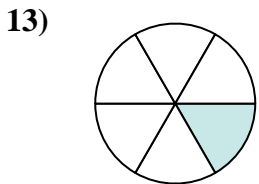
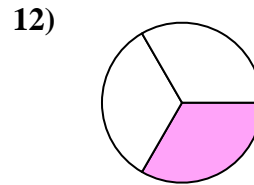
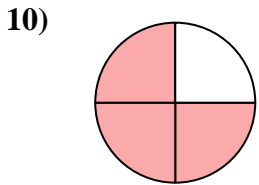
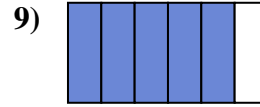
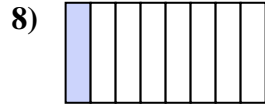
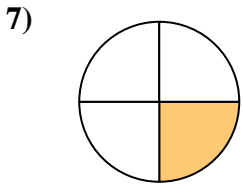
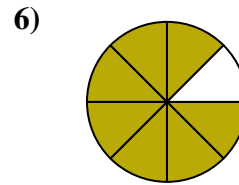
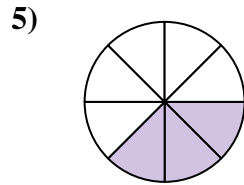
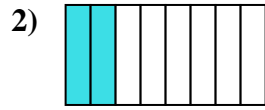
17. \_\_\_\_\_

18. \_\_\_\_\_



Schreibe die schraffierte Fläche als einen Bruch des Ganzen.

**Antworten**



1. 1/2

2. 2/8

3. 2/6

4. 2/4

5. 3/8

6. 7/8

7. 1/4

8. 1/8

9. 5/6

10. 3/4

11. 3/6

12. 1/3

13. 1/6

14. 4/6

15. 2/3

16. 5/8

17. 6/8

18. 4/8