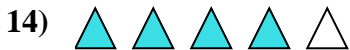
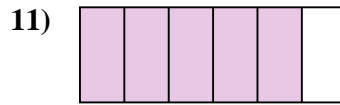
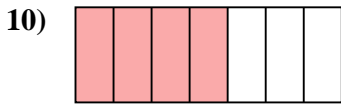
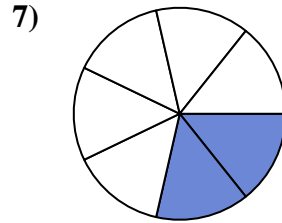
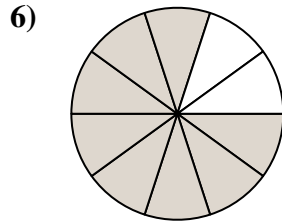
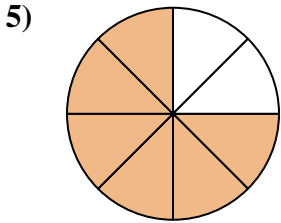


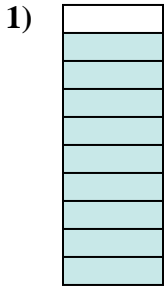




Stelle fest, ob die schraffierte Fläche 'mehr', 'weniger' oder 'gleich' zur Hälfte ist.

**Antworten**



1. \_\_\_\_\_

2. \_\_\_\_\_

3. \_\_\_\_\_

4. \_\_\_\_\_

5. \_\_\_\_\_

6. \_\_\_\_\_

7. \_\_\_\_\_

8. \_\_\_\_\_

9. \_\_\_\_\_

10. \_\_\_\_\_

11. \_\_\_\_\_

12. \_\_\_\_\_

13. \_\_\_\_\_

14. \_\_\_\_\_

15. \_\_\_\_\_

16. \_\_\_\_\_

17. \_\_\_\_\_

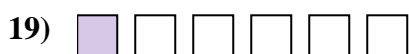
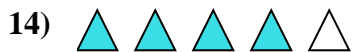
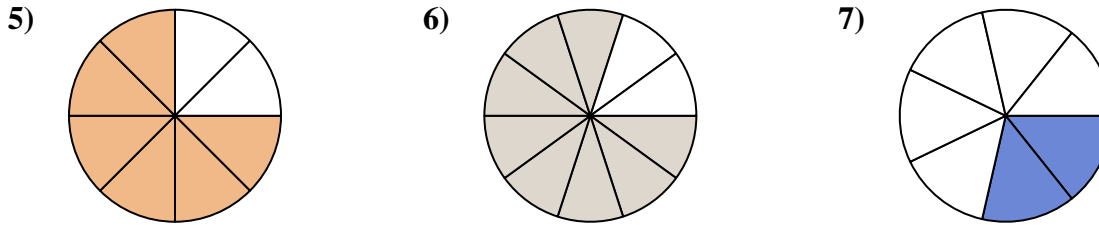
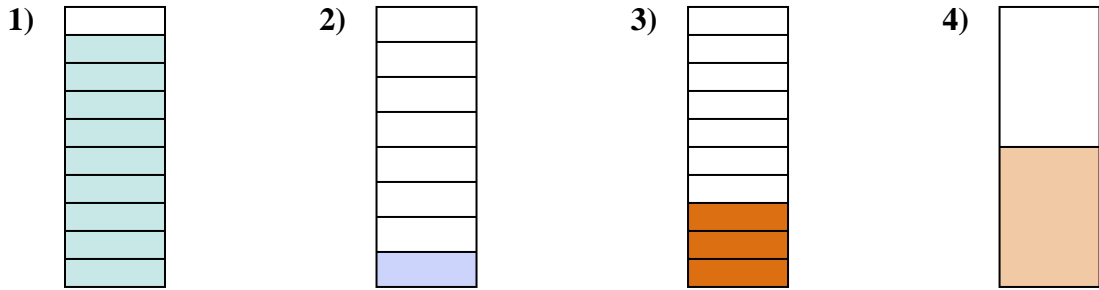
18. \_\_\_\_\_

19. \_\_\_\_\_

20. \_\_\_\_\_



Stelle fest, ob die schraffierte Fläche 'mehr', 'weniger' oder 'gleich' zur Hälfte ist.

Antworten1. mehr2. weniger3. weniger4. gleich5. mehr6. mehr7. weniger8. mehr9. mehr10. mehr11. mehr12. weniger13. mehr14. mehr15. weniger16. weniger17. weniger18. gleich19. weniger20. gleich