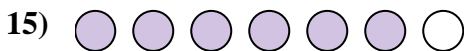
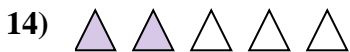


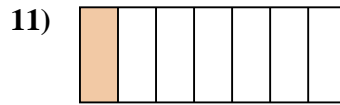
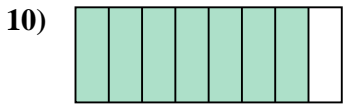
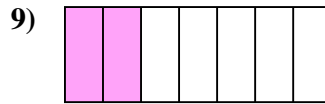
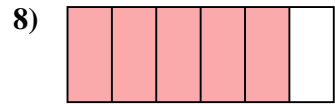
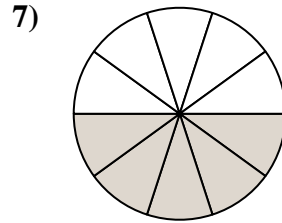
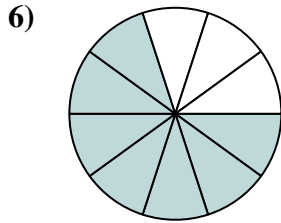
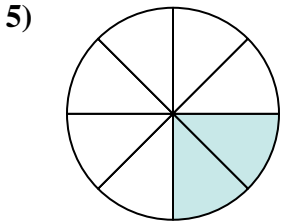







Stelle fest, ob die schraffierte Fläche 'mehr', 'weniger' oder 'gleich' zur Hälfte ist.

Antworten



1. _____

2. _____

3. _____

4. _____

5. _____

6. _____

7. _____

8. _____

9. _____

10. _____

11. _____

12. _____

13. _____

14. _____

15. _____

16. _____

17. _____

18. _____

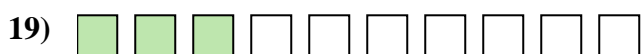
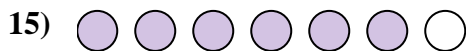
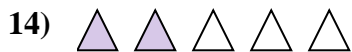

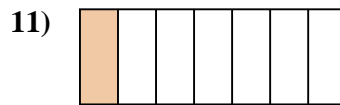
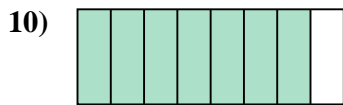
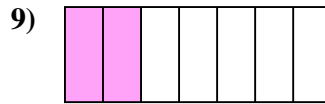
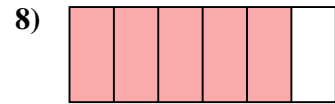
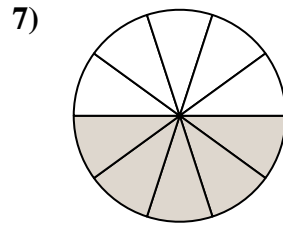
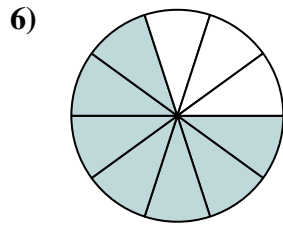
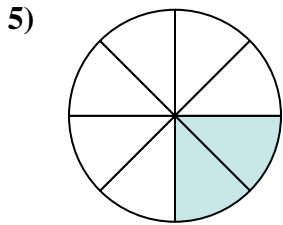




19. _____

20. _____



Stelle fest, ob die schraffierte Fläche 'mehr', 'weniger' oder 'gleich' zur Hälfte ist.

Antworten



1. weniger

2. weniger

3. mehr

4. mehr

5. weniger

6. mehr

7. gleich

8. mehr

9. weniger

10. mehr

11. weniger

12. mehr

13. weniger

14. weniger

15. mehr

16. gleich

17. weniger

18. weniger

19. weniger

20. weniger