





Benutze den Zahlenstrahl um jede Aufgabe zu lösen. Die erste Aufgabe ist bereits als Beispiel markiert.

Antworten




1. _____

2. _____



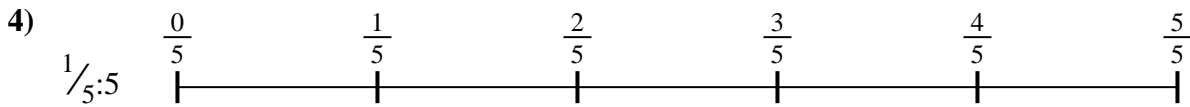
3. _____

4. _____



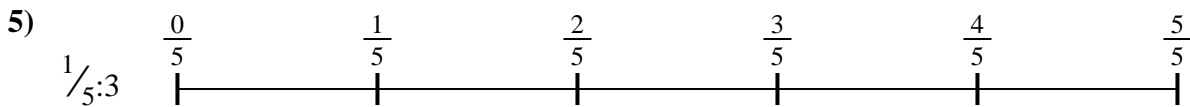
5. _____

6. _____

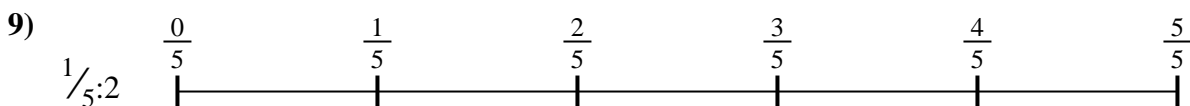
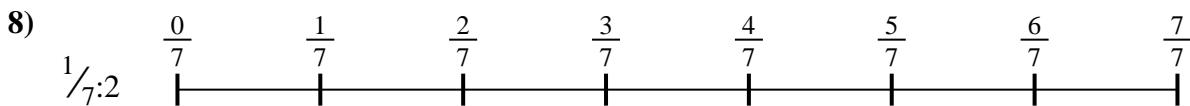



7. _____

8. _____



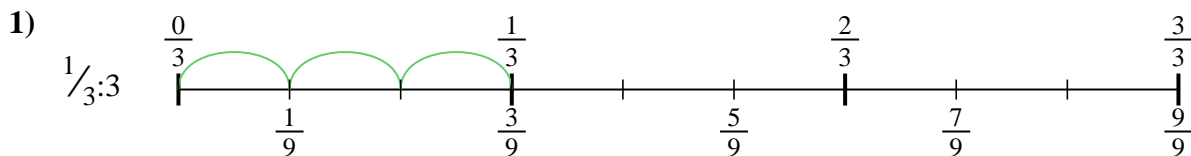
9. _____



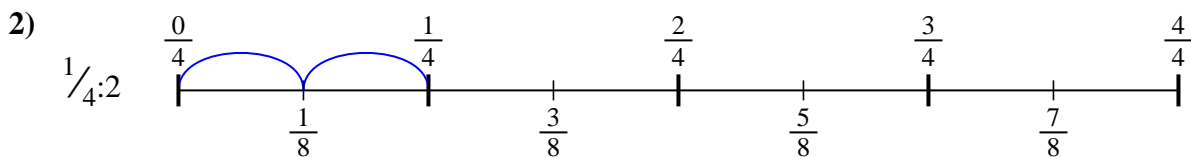


Benutze den Zahlenstrahl um jede Aufgabe zu lösen. Die erste Aufgabe ist bereits als Beispiel markiert.

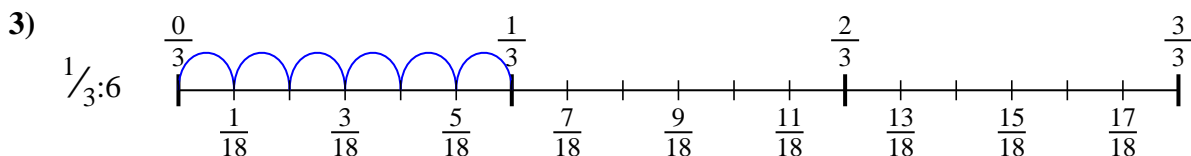
Antworten



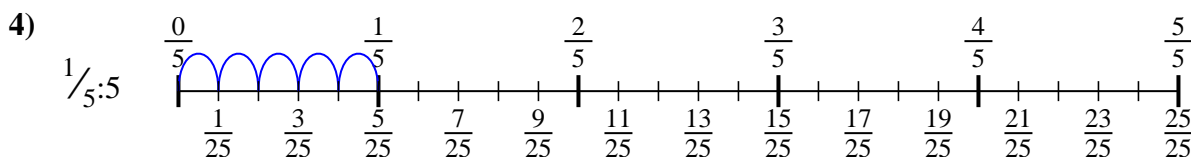
1. $\frac{1}{9}$



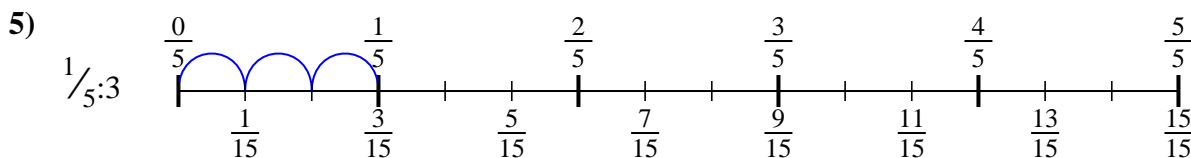
2. $\frac{1}{8}$



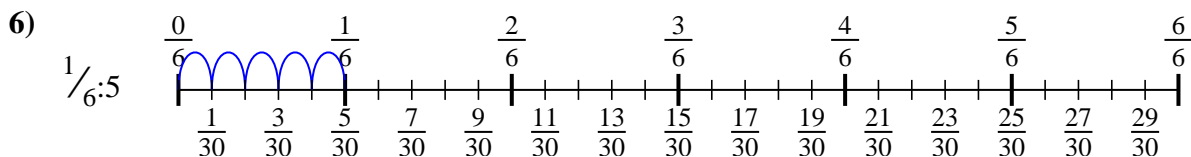
3. $\frac{1}{18}$



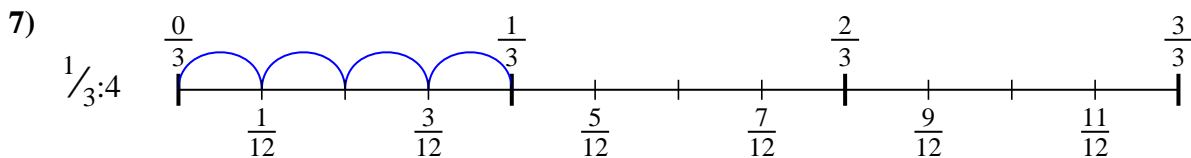
4. $\frac{1}{25}$



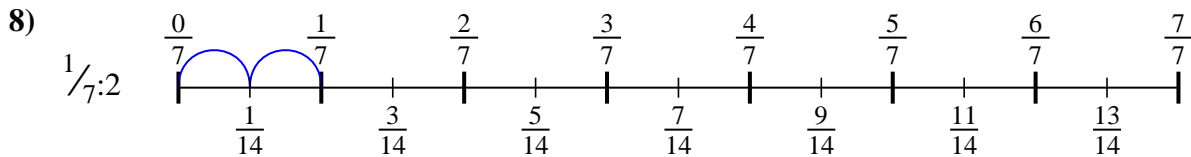
5. $\frac{1}{15}$



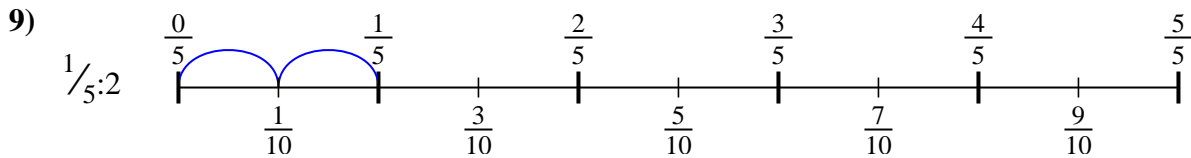
6. $\frac{1}{30}$



7. $\frac{1}{12}$



8. $\frac{1}{14}$



9. $\frac{1}{10}$



Benutze den Zahlenstrahl um jede Aufgabe zu lösen. Die erste Aufgabe ist bereits als Beispiel markiert.

Antworten

$\frac{1}{14}$

$\frac{1}{9}$

$\frac{1}{30}$

$\frac{1}{10}$

$\frac{1}{18}$

$\frac{1}{8}$

$\frac{1}{25}$

$\frac{1}{15}$

$\frac{1}{12}$

1. _____

2. _____

3. _____

4. _____

5. _____

6. _____

7. _____

8. _____

9. _____

