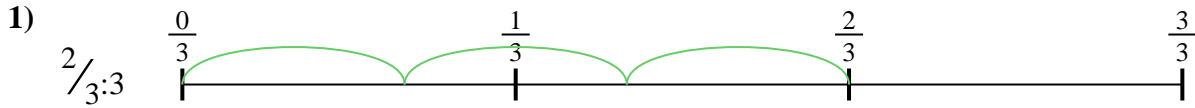





Benutze den Zahlenstrahl um jede Aufgabe zu lösen. Die erste Aufgabe ist bereits als Beispiel gelöst.

**Antworten**




1. \_\_\_\_\_

2. \_\_\_\_\_




3. \_\_\_\_\_

4. \_\_\_\_\_



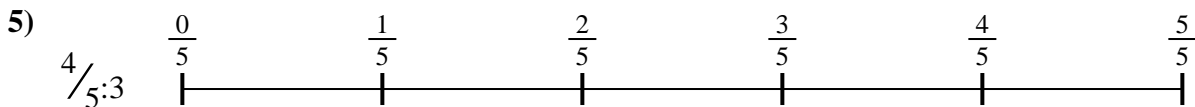
5. \_\_\_\_\_

6. \_\_\_\_\_

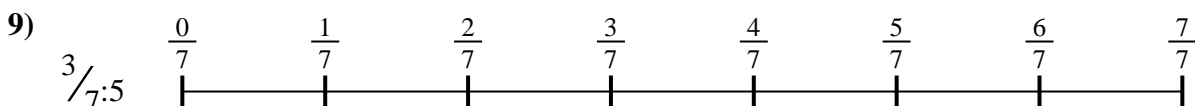
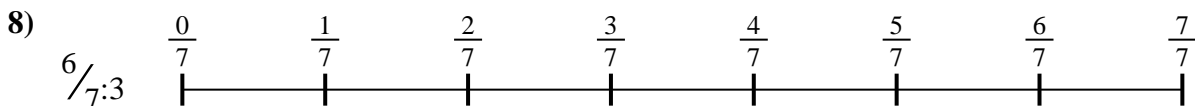
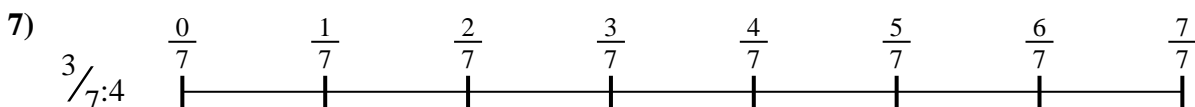



7. \_\_\_\_\_

8. \_\_\_\_\_



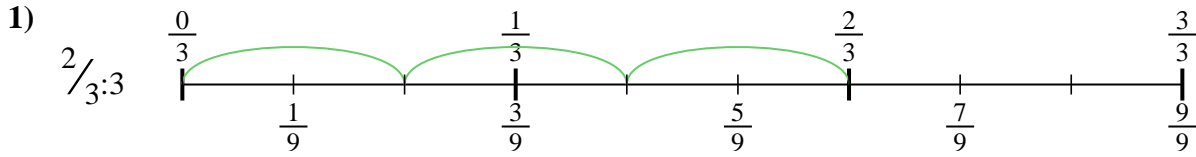
9. \_\_\_\_\_



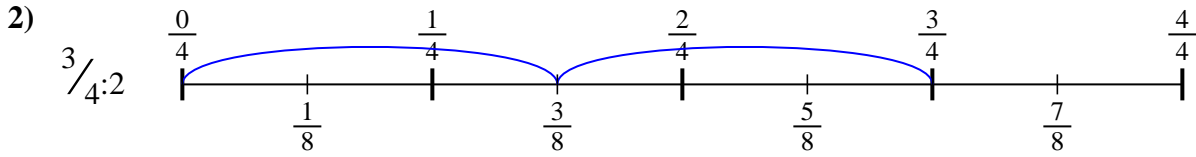


Benutze den Zahlenstrahl um jede Aufgabe zu lösen. Die erste Aufgabe ist bereits als Beispiel gelöst.

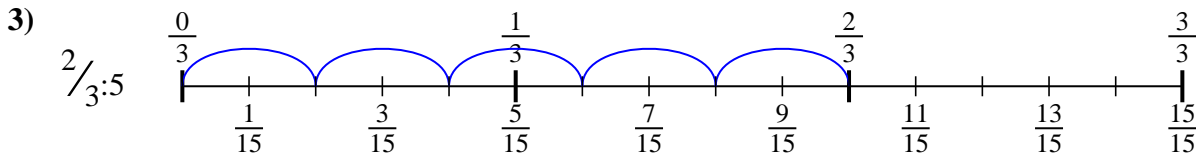
Antworten



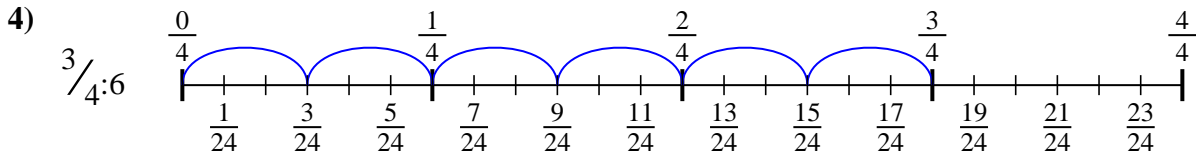
1.  $\frac{2}{9}$



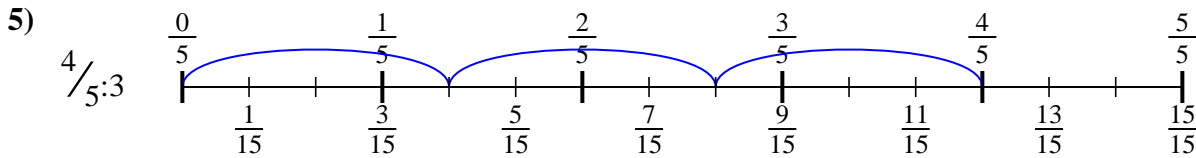
2.  $\frac{3}{8}$



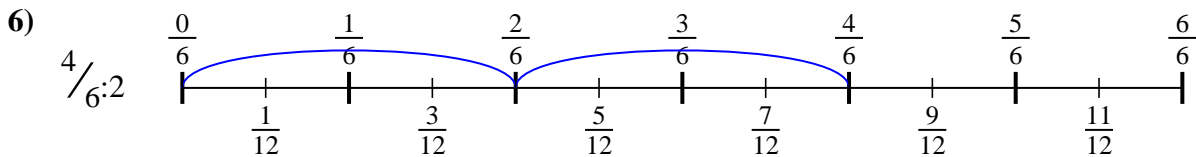
3.  $\frac{2}{15}$



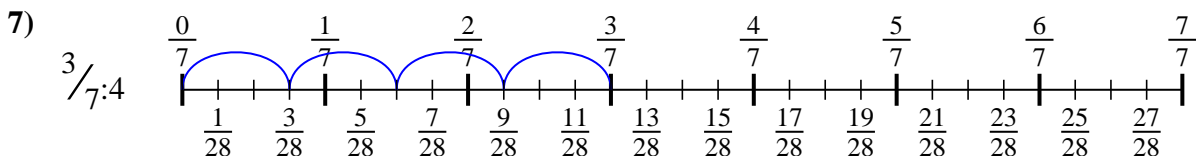
4.  $\frac{3}{24}$



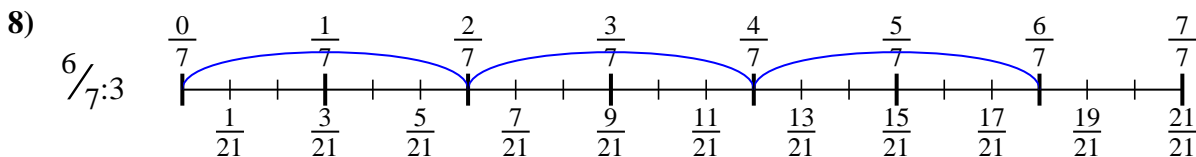
5.  $\frac{4}{15}$



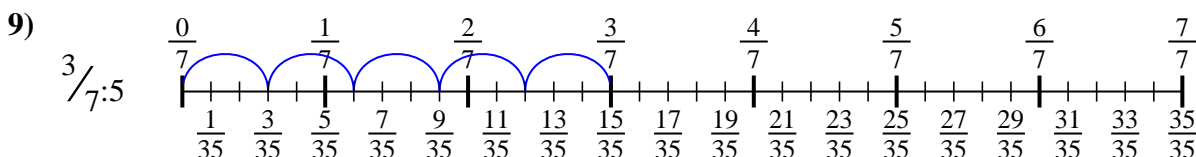
6.  $\frac{4}{12}$



7.  $\frac{3}{28}$



8.  $\frac{6}{21}$



9.  $\frac{3}{35}$



Benutze den Zahlenstrahl um jede Aufgabe zu lösen. Die erste Aufgabe ist bereits als Beispiel gelöst.

**Antworten**

$\frac{3}{24}$

$\frac{2}{15}$

$\frac{3}{28}$

$\frac{2}{9}$

$\frac{6}{21}$

$\frac{4}{12}$

$\frac{3}{8}$

$\frac{3}{35}$

$\frac{4}{15}$

1. \_\_\_\_\_

2. \_\_\_\_\_

3. \_\_\_\_\_

4. \_\_\_\_\_

5. \_\_\_\_\_

6. \_\_\_\_\_

7. \_\_\_\_\_

8. \_\_\_\_\_

9. \_\_\_\_\_

