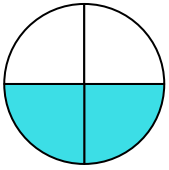




Stelle fest, welcher Buchstabe die schattierte Fläche darstellt.

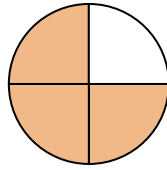
Antworten

1)



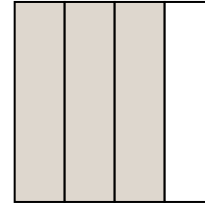
- A. three-quarters
B. one-quarter
C. two-fourths

2)



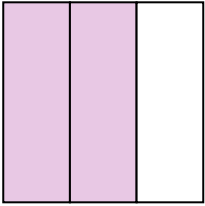
- A. one-fourth
B. three-quarters
C. two-halves

3)




- A. three-quarters
B. three-fourths
C. two-halves

4)



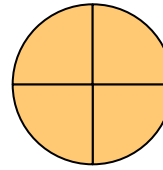
- A. one-fourth
B. two-thirds
C. three-quarters

5)




- A. three-thirds
B. one-quarter
C. two-halves

6)




- A. four-quarters
B. one-half
C. two-halves

7)



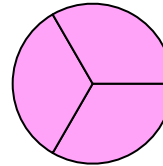
- A. three-quarters
B. two-halves
C. four-quarters

8)



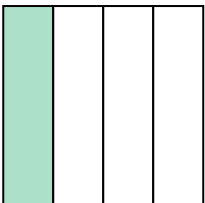
- A. two-fourths
B. three-fourths
C. one-half

9)




- A. three-thirds
B. two-halves
C. one-quarter

10)




- A. three-quarters
B. one-fourth
C. four-quarters

11)



- A. one-half
B. two-halves
C. two-fourths

12)



- A. three-fourths
B. three-fourths
C. two-halves

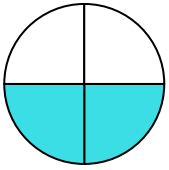
1. _____
2. _____
3. _____
4. _____
5. _____
6. _____
7. _____
8. _____
9. _____
10. _____
11. _____
12. _____



Stelle fest, welcher Buchstabe die schattierte Fläche darstellt.

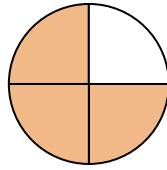
Antworten

1)



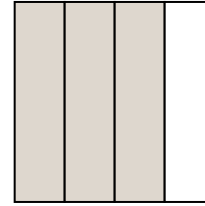
- A. three-quarters
B. one-quarter
C. two-fourths

2)



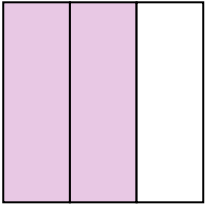
- A. one-fourth
B. three-quarters
C. two-halves

3)




- A. three-quarters
B. three-fourths
C. two-halves

4)



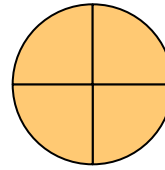
- A. one-fourth
B. two-thirds
C. three-quarters

5)




- A. three-thirds
B. one-quarter
C. two-halves

6)




- A. four-quarters
B. one-half
C. two-halves

7)



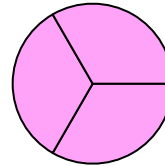
- A. three-quarters
B. two-halves
C. four-quarters

8)



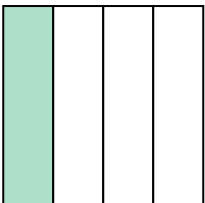
- A. two-fourths
B. three-fourths
C. one-half

9)




- A. three-thirds
B. two-halves
C. one-quarter

10)




- A. three-quarters
B. one-fourth
C. four-quarters

11)



- A. one-half
B. two-halves
C. two-fourths

12)



- A. three-fourths
B. three-fourths
C. two-halves

1. **C**2. **B**3. **A**4. **B**5. **A**6. **A**7. **B**8. **C**9. **A**10. **B**11. **A**12. **C**