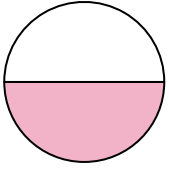




Stelle fest, welcher Buchstabe die schattierte Fläche darstellt.


Antworten

1)



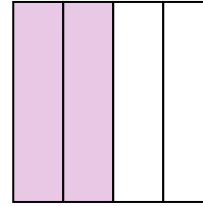
- A. one-half
B. two-halves
C. one-fourth

2)



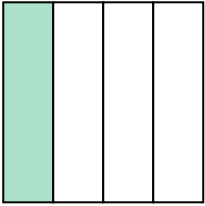
- A. three-fourths
B. one-quarter
C. two-halves

3)



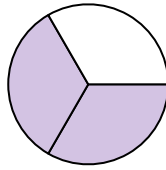
- A. two-quarters
B. one-half
C. three-fourths

4)



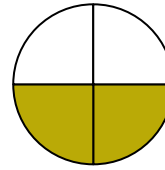
- A. three-fourths
B. one-fourth
C. two-halves

5)



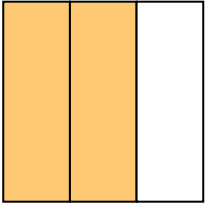
- A. three-fourths
B. two-thirds
C. two-quarters

6)



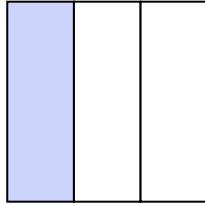
- A. three-fourths
B. two-fourths
C. three-fourths

7)



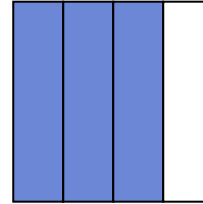
- A. one-quarter
B. four-quarters
C. two-thirds

8)




- A. three-fourths
B. one-third
C. two-halves

9)



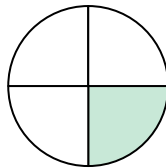
- A. three-fourths
B. three-fourths
C. two-quarters

10)



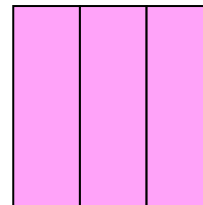
- A. two-halves
B. one-quarter
C. one-half

11)



- A. three-fourths
B. one-half
C. one-quarter

12)



- A. three-thirds
B. two-halves
C. one-quarter

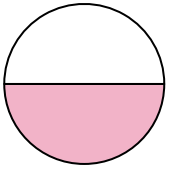
1. _____
2. _____
3. _____
4. _____
5. _____
6. _____
7. _____
8. _____
9. _____
10. _____
11. _____
12. _____



Stelle fest, welcher Buchstabe die schattierte Fläche darstellt.


Antworten

1)



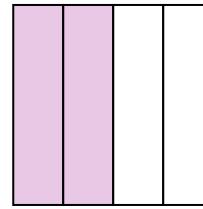
- A. one-half
B. two-halves
C. one-fourth

2)



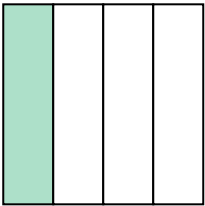
- A. three-fourths
B. one-quarter
C. two-halves

3)



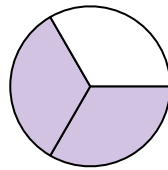
- A. two-quarters
B. one-half
C. three-fourths

4)



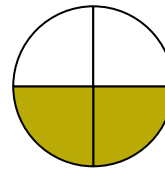
- A. three-fourths
B. one-fourth
C. two-halves

5)



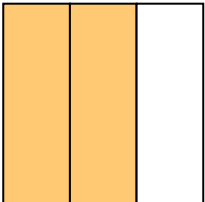
- A. three-fourths
B. two-thirds
C. two-quarters

6)



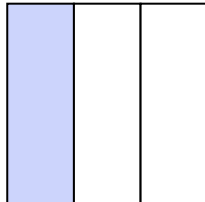
- A. three-fourths
B. two-fourths
C. three-fourths

7)



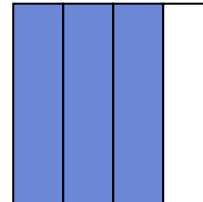
- A. one-quarter
B. four-quarters
C. two-thirds

8)




- A. three-fourths
B. one-third
C. two-halves

9)



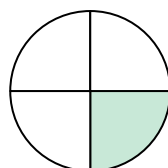
- A. three-fourths
B. three-fourths
C. two-quarters

10)



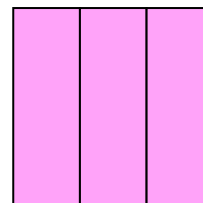
- A. two-halves
B. one-quarter
C. one-half

11)



- A. three-fourths
B. one-half
C. one-quarter

12)

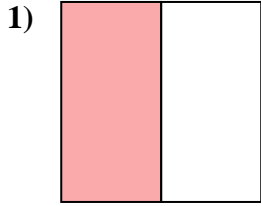


- A. three-thirds
B. two-halves
C. one-quarter

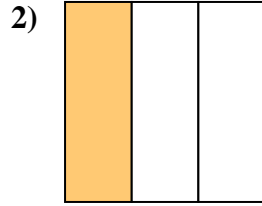
1. **A**2. **C**3. **A**4. **B**5. **B**6. **B**7. **C**8. **B**9. **B**10. **C**11. **C**12. **A**



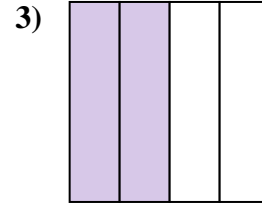
Stelle fest, welcher Buchstabe die schattierte Fläche darstellt.

Antworten

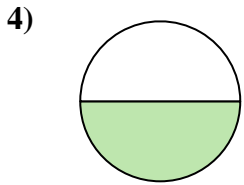
- A. one-half
B. one-quarter
C. two-quarters



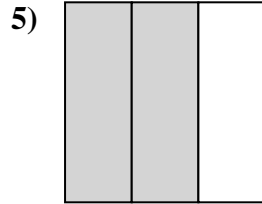
- A. one-fourth
B. one-third
C. two-halves



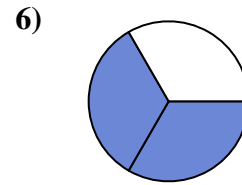
- A. two-halves
B. two-quarters
C. three-fourths



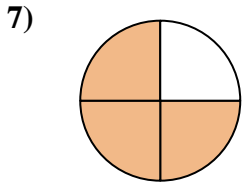
- A. one-half
B. four-quarters
C. three-fourths



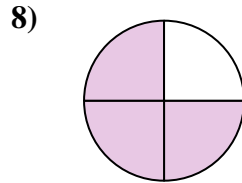
- A. two-thirds
B. two-quarters
C. four-quarters



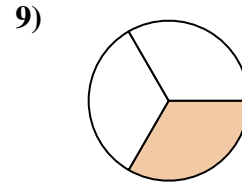
- A. two-thirds
B. two-halves
C. one-quarter



- A. three-fourths
B. one-quarter
C. three-fourths



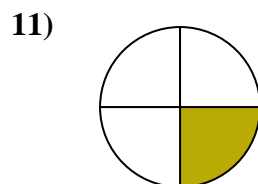
- A. three-quarters
B. two-halves
C. four-quarters



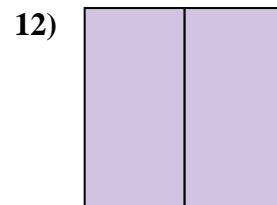
- A. one-third
B. two-fourths
C. three-fourths



- A. one-quarter
B. three-thirds
C. two-quarters



- A. one-fourth
B. three-fourths
C. two-halves

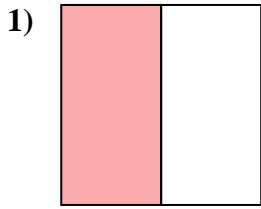


- A. three-quarters
B. two-fourths
C. two-halves

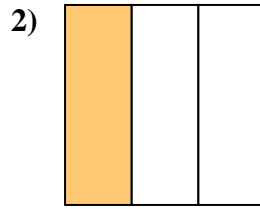
1. _____
2. _____
3. _____
4. _____
5. _____
6. _____
7. _____
8. _____
9. _____
10. _____
11. _____
12. _____



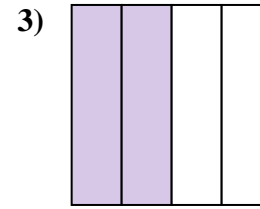
Stelle fest, welcher Buchstabe die schattierte Fläche darstellt.

Antworten

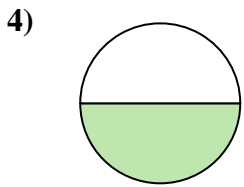
- A. one-half
B. one-quarter
C. two-quarters



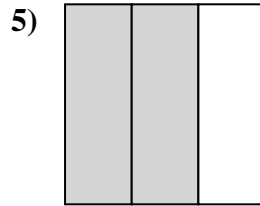
- A. one-fourth
B. one-third
C. two-halves



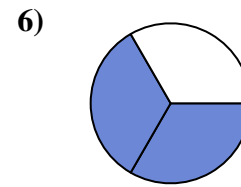
- A. two-halves
B. two-quarters
C. three-fourths



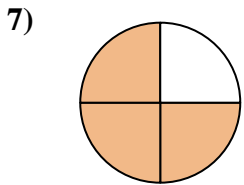
- A. one-half
B. four-quarters
C. three-fourths



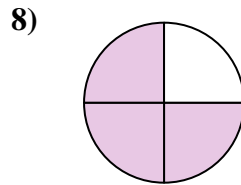
- A. two-thirds
B. two-quarters
C. four-quarters



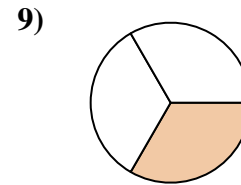
- A. two-thirds
B. two-halves
C. one-quarter



- A. three-fourths
B. one-quarter
C. three-fourths



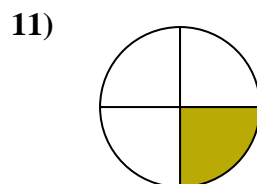
- A. three-quarters
B. two-halves
C. four-quarters



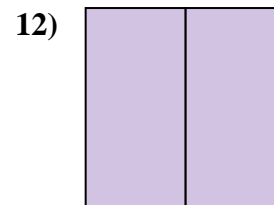
- A. one-third
B. two-fourths
C. three-fourths



- A. one-quarter
B. three-thirds
C. two-quarters



- A. one-fourth
B. three-fourths
C. two-halves



- A. three-quarters
B. two-fourths
C. two-halves

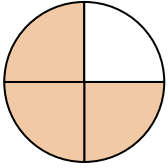
1. **A**
2. **B**
3. **B**
4. **A**
5. **A**
6. **A**
7. **C**
8. **A**
9. **A**
10. **B**
11. **A**
12. **C**



Stelle fest, welcher Buchstabe die schattierte Fläche darstellt.

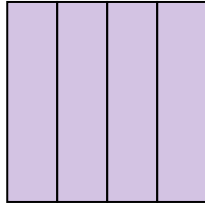
Antworten

1)



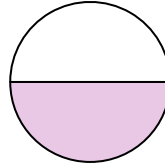
- A. three-fourths
B. two-halves
C. three-fourths

2)



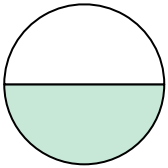
- A. one-half
B. three-fourths
C. one-quarter

3)



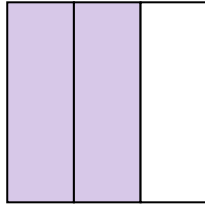
- A. one-half
B. two-halves
C. three-quarters

4)



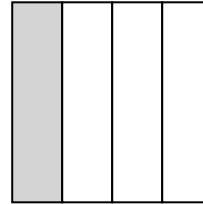
- A. one-half
B. two-fourths
C. two-halves

5)



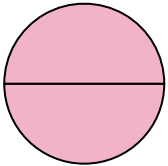
- A. two-quarters
B. one-fourth
C. two-thirds

6)



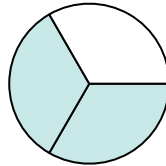
- A. four-quarters
B. two-halves
C. one-quarter

7)



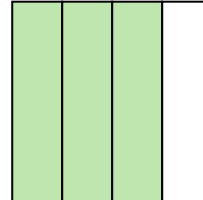
- A. one-fourth
B. two-halves
C. one-half

8)



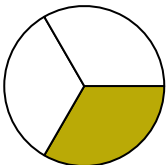
- A. one-half
B. two-halves
C. two-thirds

9)



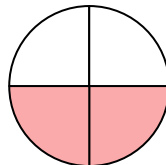
- A. three-fourths
B. two-halves
C. three-fourths

10)



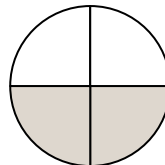
- A. one-fourth
B. one-half
C. one-third

11)



- A. three-fourths
B. one-quarter
C. two-quarters

12)



- A. two-fourths
B. two-halves
C. one-fourth

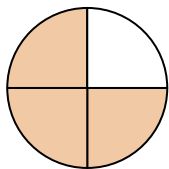
1. _____
2. _____
3. _____
4. _____
5. _____
6. _____
7. _____
8. _____
9. _____
10. _____
11. _____
12. _____



Stelle fest, welcher Buchstabe die schattierte Fläche darstellt.

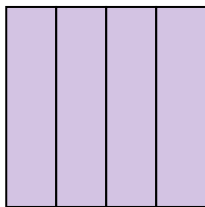
Antworten

1)



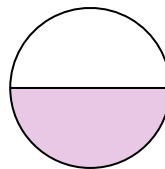
- A. three-fourths
B. two-halves
C. three-fourths

2)



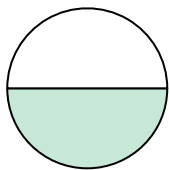
- A. one-half
B. three-fourths
C. one-quarter

3)



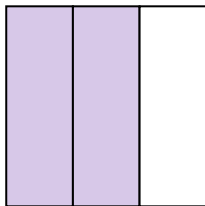
- A. one-half
B. two-halves
C. three-quarters

4)



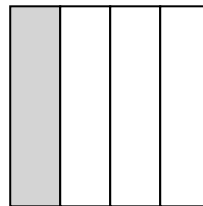
- A. one-half
B. two-fourths
C. two-halves

5)



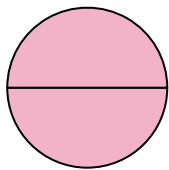
- A. two-quarters
B. one-fourth
C. two-thirds

6)



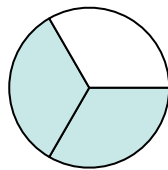
- A. four-quarters
B. two-halves
C. one-quarter

7)



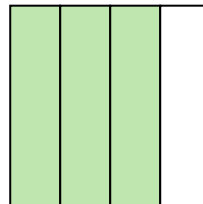
- A. one-fourth
B. two-halves
C. one-half

8)



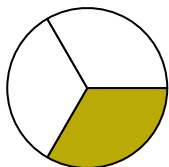
- A. one-half
B. two-halves
C. two-thirds

9)



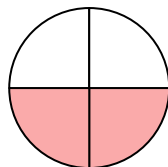
- A. three-fourths
B. two-halves
C. three-fourths

10)



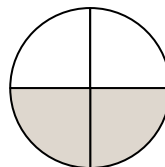
- A. one-fourth
B. one-half
C. one-third

11)



- A. three-fourths
B. one-quarter
C. two-quarters

12)



- A. two-fourths
B. two-halves
C. one-fourth

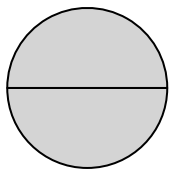
1. **C**2. **B**3. **A**4. **A**5. **C**6. **C**7. **B**8. **C**9. **C**10. **C**11. **C**12. **A**



Stelle fest, welcher Buchstabe die schattierte Fläche darstellt.

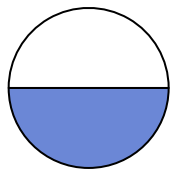
Antworten

1)



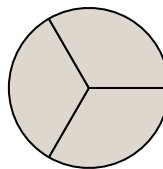
- A. two-halves
B. one-fourth
C. three-fourths

2)




- A. two-halves
B. one-half
C. two-fourths

3)



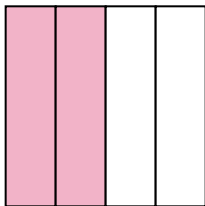
- A. two-fourths
B. three-thirds
C. one-half

4)



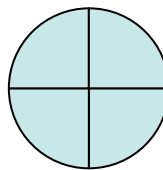
- A. three-thirds
B. four-quarters
C. one-half

5)



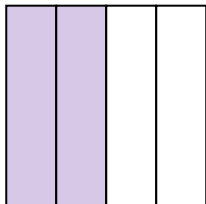
- A. two-fourths
B. one-quarter
C. four-quarters

6)




- A. one-fourth
B. two-halves
C. four-quarters

7)



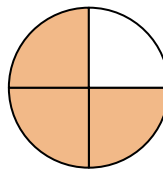
- A. three-fourths
B. two-halves
C. two-quarters

8)



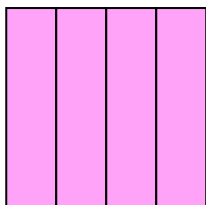
- A. three-quarters
B. two-fourths
C. two-thirds

9)




- A. three-fourths
B. two-halves
C. one-quarter

10)



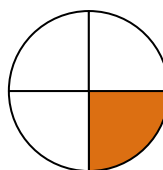
- A. three-fourths
B. two-fourths
C. one-fourth

11)



- A. two-halves
B. one-half
C. three-fourths

12)



- A. two-halves
B. one-half
C. one-fourth

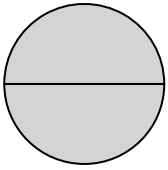
1. _____
2. _____
3. _____
4. _____
5. _____
6. _____
7. _____
8. _____
9. _____
10. _____
11. _____
12. _____



Stelle fest, welcher Buchstabe die schattierte Fläche darstellt.

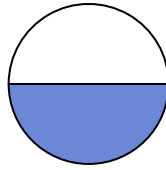
Antworten

1)



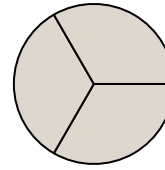
- A. two-halves
B. one-fourth
C. three-fourths

2)




- A. two-halves
B. one-half
C. two-fourths

3)



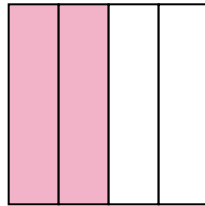
- A. two-fourths
B. three-thirds
C. one-half

4)



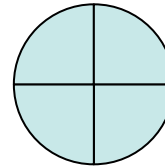
- A. three-thirds
B. four-quarters
C. one-half

5)



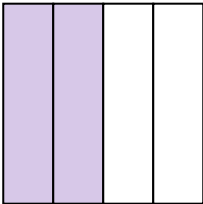
- A. two-fourths
B. one-quarter
C. four-quarters

6)



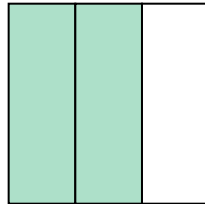
- A. one-fourth
B. two-halves
C. four-quarters

7)



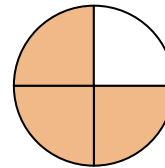
- A. three-fourths
B. two-halves
C. two-quarters

8)



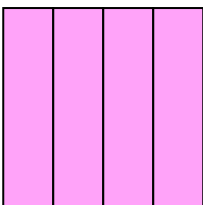
- A. three-quarters
B. two-fourths
C. two-thirds

9)




- A. three-fourths
B. two-halves
C. one-quarter

10)



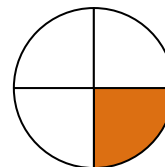
- A. three-fourths
B. two-fourths
C. one-fourth

11)



- A. two-halves
B. one-half
C. three-fourths

12)



- A. two-halves
B. one-half
C. one-fourth


1. **A**2. **B**3. **B**4. **A**5. **A**6. **C**7. **C**8. **C**9. **A**10. **A**11. **B**12. **C**



Stelle fest, welcher Buchstabe die schattierte Fläche darstellt.


Antworten

1)



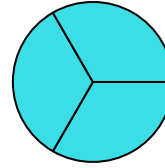
- A. three-quarters
B. three-thirds
C. two-halves

2)



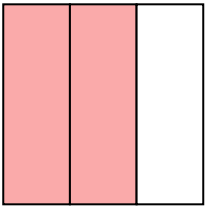
- A. three-fourths
B. two-halves
C. two-fourths

3)



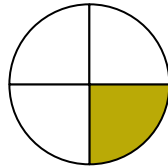
- A. three-fourths
B. two-quarters
C. three-thirds

4)



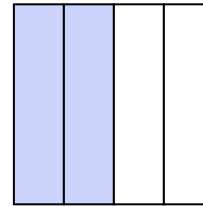
- A. two-thirds
B. four-quarters
C. one-fourth

5)




- A. two-fourths
B. one-quarter
C. two-halves

6)



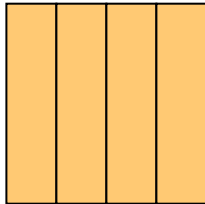
- A. one-quarter
B. one-half
C. two-fourths

7)



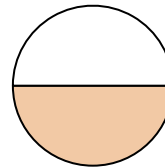
- A. four-quarters
B. one-third
C. one-quarter

8)



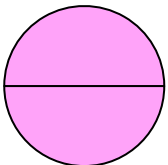
- A. four-quarters
B. one-half
C. two-halves

9)



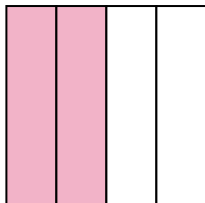
- A. one-fourth
B. two-halves
C. one-half

10)




- A. four-quarters
B. two-halves
C. three-fourths

11)



- A. two-quarters
B. one-quarter
C. three-fourths

12)

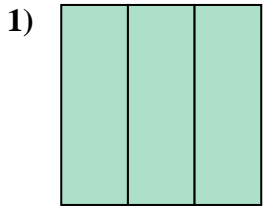


- A. three-fourths
B. one-half
C. three-quarters

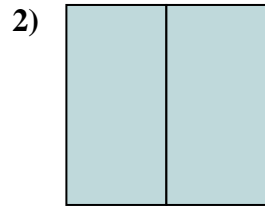
1. _____
2. _____
3. _____
4. _____
5. _____
6. _____
7. _____
8. _____
9. _____
10. _____
11. _____
12. _____



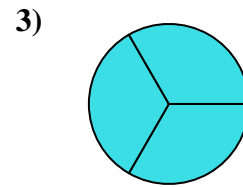
Stelle fest, welcher Buchstabe die schattierte Fläche darstellt.

Antworten

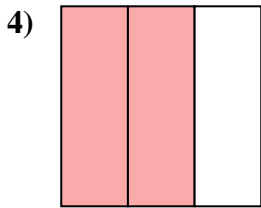
- A. three-quarters
B. three-thirds
C. two-halves



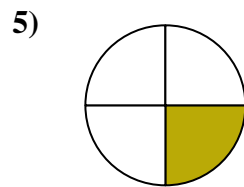
- A. three-fourths
B. two-halves
C. two-fourths



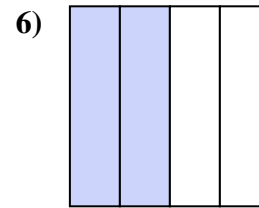
- A. three-fourths
B. two-quarters
C. three-thirds



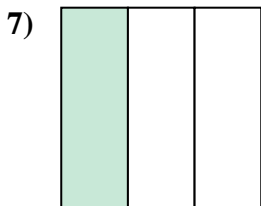
- A. two-thirds
B. four-quarters
C. one-fourth



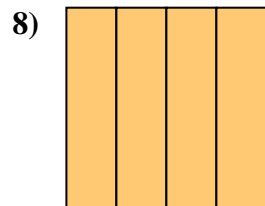
- A. two-fourths
B. one-quarter
C. two-halves



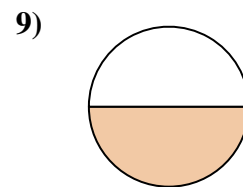
- A. one-quarter
B. one-half
C. two-fourths



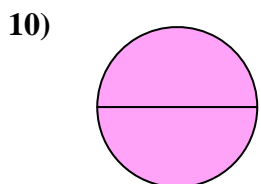
- A. four-quarters
B. one-third
C. one-quarter



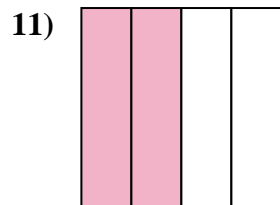
- A. four-quarters
B. one-half
C. two-halves



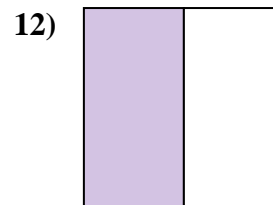
- A. one-fourth
B. two-halves
C. one-half



- A. four-quarters
B. two-halves
C. three-fourths



- A. two-quarters
B. one-quarter
C. three-fourths



- A. three-fourths
B. one-half
C. three-quarters

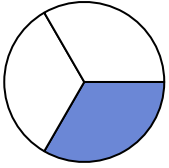
1. **B**
2. **B**
3. **C**
4. **A**
5. **B**
6. **C**
7. **B**
8. **A**
9. **C**
10. **B**
11. **A**
12. **B**



Stelle fest, welcher Buchstabe die schattierte Fläche darstellt.

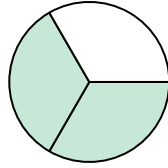
Antworten

1)



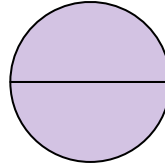
- A. four-quarters
B. one-quarter
C. one-third

2)



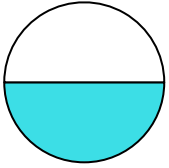
- A. two-thirds
B. one-half
C. one-quarter

3)



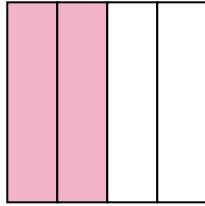
- A. one-fourth
B. two-quarters
C. two-halves

4)



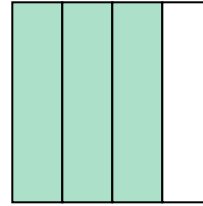
- A. one-half
B. four-quarters
C. three-fourths

5)




- A. four-quarters
B. two-halves
C. two-fourths

6)




- A. one-fourth
B. four-quarters
C. three-quarters

7)



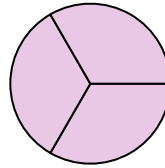
- A. two-fourths
B. two-halves
C. one-half

8)



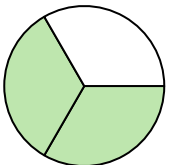
- A. two-fourths
B. one-third
C. three-fourths

9)



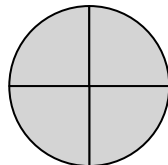
- A. three-thirds
B. one-half
C. three-quarters

10)



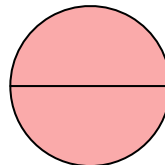
- A. three-fourths
B. two-thirds
C. three-fourths

11)



- A. one-fourth
B. four-quarters
C. one-half

12)

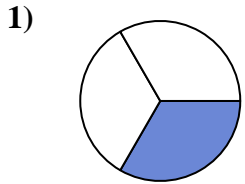


- A. two-halves
B. two-fourths
C. three-fourths

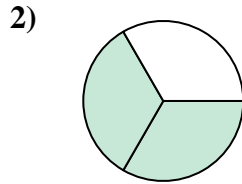
1. _____
2. _____
3. _____
4. _____
5. _____
6. _____
7. _____
8. _____
9. _____
10. _____
11. _____
12. _____



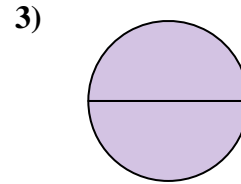
Stelle fest, welcher Buchstabe die schattierte Fläche darstellt.

Antworten

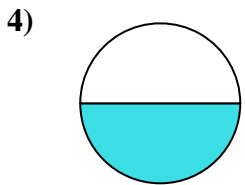
- A. four-quarters
B. one-quarter
C. one-third



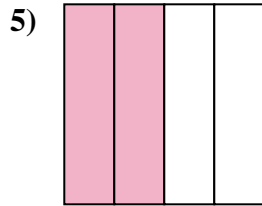
- A. two-thirds
B. one-half
C. one-quarter



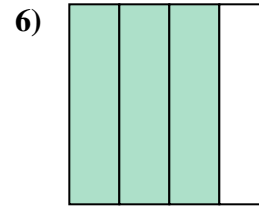
- A. one-fourth
B. two-quarters
C. two-halves



- A. one-half
B. four-quarters
C. three-fourths



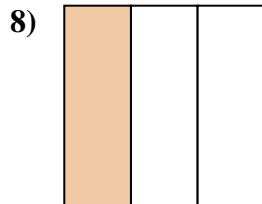
- A. four-quarters
B. two-halves
C. two-fourths



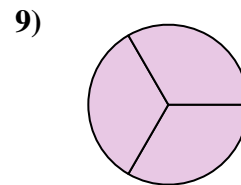
- A. one-fourth
B. four-quarters
C. three-quarters



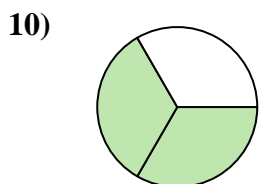
- A. two-fourths
B. two-halves
C. one-half



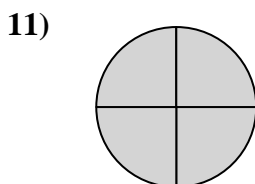
- A. two-fourths
B. one-third
C. three-fourths



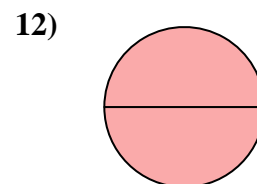
- A. three-thirds
B. one-half
C. three-quarters



- A. three-fourths
B. two-thirds
C. three-fourths



- A. one-fourth
B. four-quarters
C. one-half

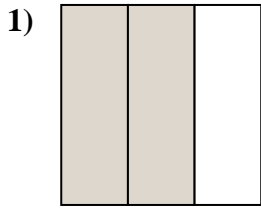


- A. two-halves
B. two-fourths
C. three-fourths

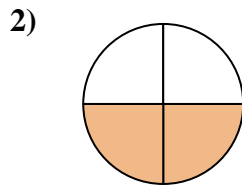
1. **C**
2. **A**
3. **C**
4. **A**
5. **C**
6. **C**
7. **C**
8. **B**
9. **A**
10. **B**
11. **B**
12. **A**



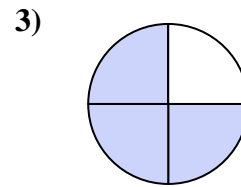
Stelle fest, welcher Buchstabe die schattierte Fläche darstellt.

Antworten

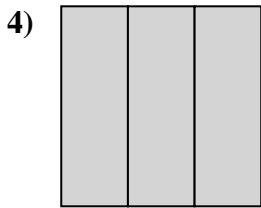
- A. two-thirds
B. two-fourths
C. two-halves



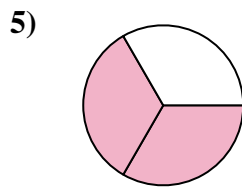
- A. three-fourths
B. two-fourths
C. one-half



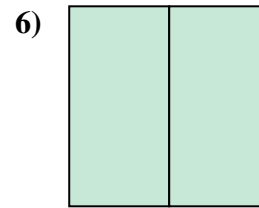
- A. three-fourths
B. four-quarters
C. two-halves



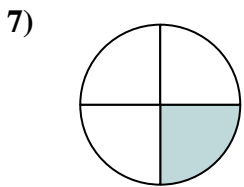
- A. three-thirds
B. one-fourth
C. two-halves



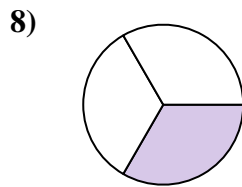
- A. two-halves
B. two-fourths
C. two-thirds



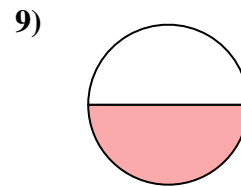
- A. one-fourth
B. two-fourths
C. two-halves



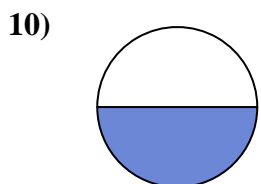
- A. two-halves
B. three-fourths
C. one-fourth



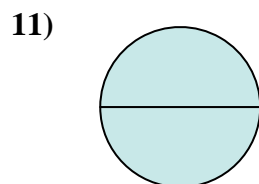
- A. two-halves
B. two-fourths
C. one-third



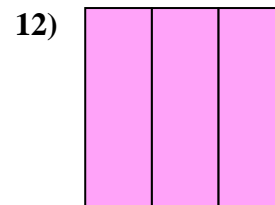
- A. two-halves
B. three-fourths
C. one-half



- A. two-fourths
B. one-fourth
C. one-half



- A. two-halves
B. three-fourths
C. four-quarters

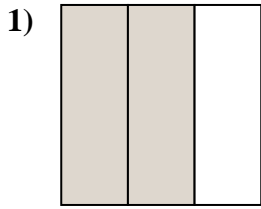


- A. three-thirds
B. one-fourth
C. three-quarters

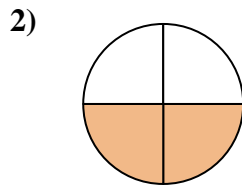
1. _____
2. _____
3. _____
4. _____
5. _____
6. _____
7. _____
8. _____
9. _____
10. _____
11. _____
12. _____



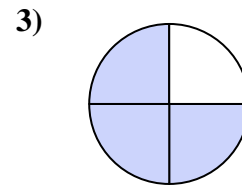
Stelle fest, welcher Buchstabe die schattierte Fläche darstellt.

Antworten

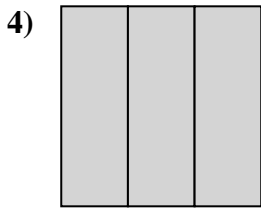
- A. two-thirds
B. two-fourths
C. two-halves



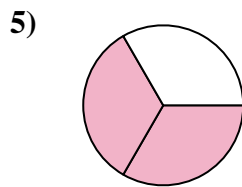
- A. three-fourths
B. two-fourths
C. one-half



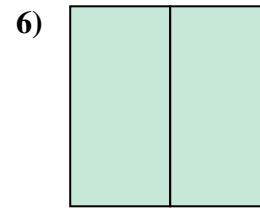
- A. three-fourths
B. four-quarters
C. two-halves



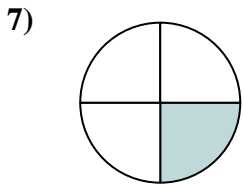
- A. three-thirds
B. one-fourth
C. two-halves



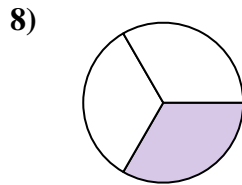
- A. two-halves
B. two-fourths
C. two-thirds



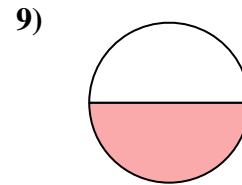
- A. one-fourth
B. two-fourths
C. two-halves



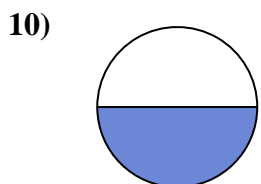
- A. two-halves
B. three-fourths
C. one-fourth



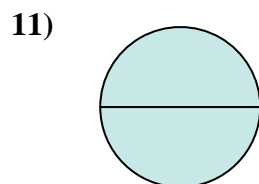
- A. two-halves
B. two-fourths
C. one-third



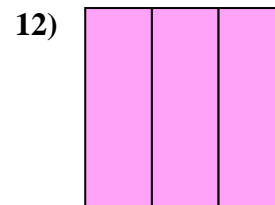
- A. two-halves
B. three-fourths
C. one-half



- A. two-fourths
B. one-fourth
C. one-half



- A. two-halves
B. three-fourths
C. four-quarters

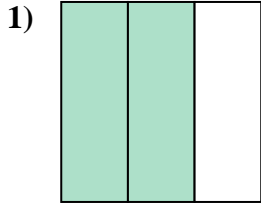


- A. three-thirds
B. one-fourth
C. three-quarters

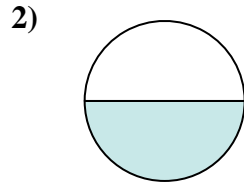
1. **A**
2. **B**
3. **A**
4. **A**
5. **C**
6. **C**
7. **C**
8. **C**
9. **C**
10. **C**
11. **A**
12. **A**



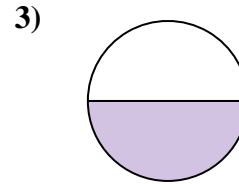
Stelle fest, welcher Buchstabe die schattierte Fläche darstellt.

Antworten

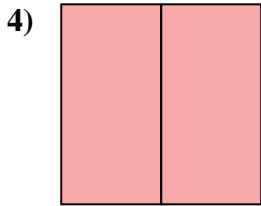
- A. two-halves
B. two-thirds
C. one-quarter



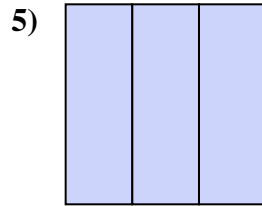
- A. one-fourth
B. two-quarters
C. one-half



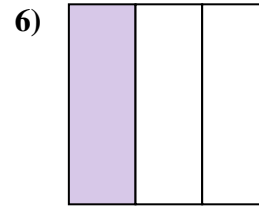
- A. two-fourths
B. one-half
C. two-halves



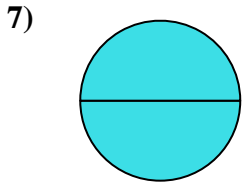
- A. two-halves
B. two-quarters
C. one-half



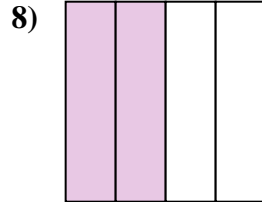
- A. three-fourths
B. three-thirds
C. one-fourth



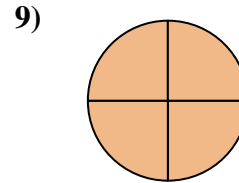
- A. two-halves
B. one-third
C. one-quarter



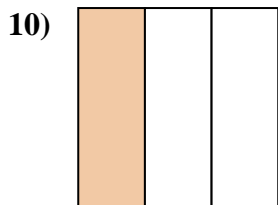
- A. three-fourths
B. one-half
C. two-halves



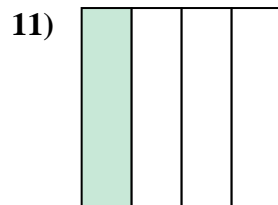
- A. three-quarters
B. two-quarters
C. two-halves



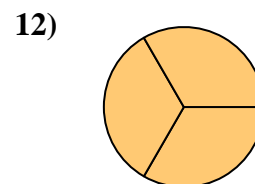
- A. one-half
B. three-fourths
C. two-fourths



- A. one-third
B. one-half
C. two-halves



- A. three-quarters
B. two-halves
C. one-quarter

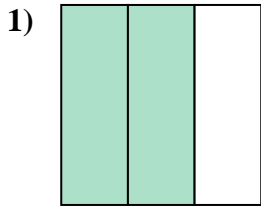


- A. three-thirds
B. two-halves
C. one-half

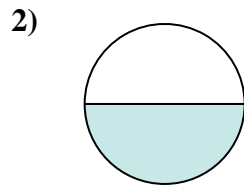
1. _____
2. _____
3. _____
4. _____
5. _____
6. _____
7. _____
8. _____
9. _____
10. _____
11. _____
12. _____



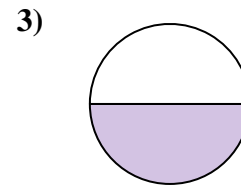
Stelle fest, welcher Buchstabe die schattierte Fläche darstellt.

Antworten

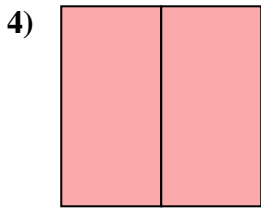
- A. two-halves
B. two-thirds
C. one-quarter



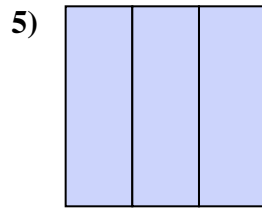
- A. one-fourth
B. two-quarters
C. one-half



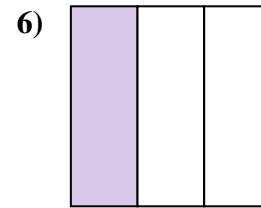
- A. two-fourths
B. one-half
C. two-halves



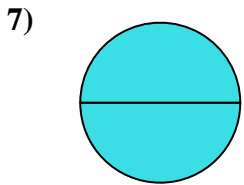
- A. two-halves
B. two-quarters
C. one-half



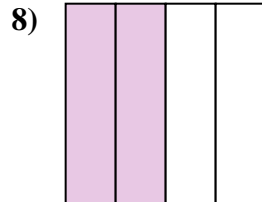
- A. three-fourths
B. three-thirds
C. one-fourth



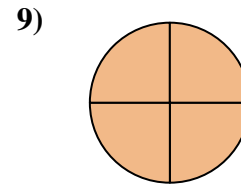
- A. two-halves
B. one-third
C. one-quarter



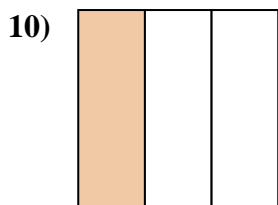
- A. three-fourths
B. one-half
C. two-halves



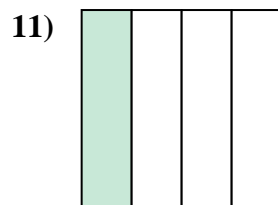
- A. three-quarters
B. two-quarters
C. two-halves



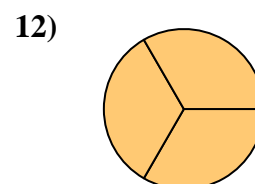
- A. one-half
B. three-fourths
C. two-fourths



- A. one-third
B. one-half
C. two-halves



- A. three-quarters
B. two-halves
C. one-quarter



- A. three-thirds
B. two-halves
C. one-half

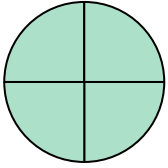
1. **B**
2. **C**
3. **B**
4. **A**
5. **B**
6. **B**
7. **C**
8. **B**
9. **B**
10. **A**
11. **C**
12. **A**



Stelle fest, welcher Buchstabe die schattierte Fläche darstellt.


Antworten

1)



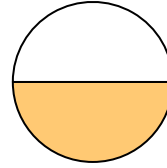
- A. one-fourth
B. three-fourths
C. three-fourths

2)




- A. three-quarters
B. one-quarter
C. one-half

3)



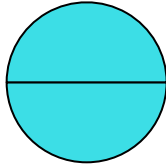
- A. two-quarters
B. three-quarters
C. one-half

4)



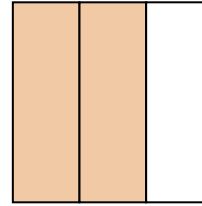
- A. two-halves
B. one-half
C. three-thirds

5)



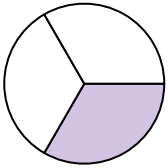
- A. two-halves
B. one-quarter
C. two-fourths

6)



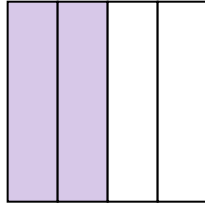
- A. two-thirds
B. two-halves
C. one-fourth

7)



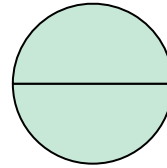
- A. three-fourths
B. two-halves
C. one-third

8)



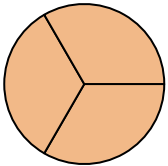
- A. one-half
B. two-quarters
C. three-quarters

9)



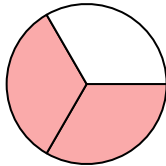
- A. two-quarters
B. three-fourths
C. two-halves

10)



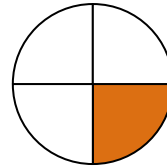
- A. three-thirds
B. one-fourth
C. two-halves

11)



- A. one-quarter
B. two-thirds
C. four-quarters

12)



- A. one-fourth
B. three-quarters
C. two-halves

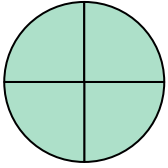
1. _____
2. _____
3. _____
4. _____
5. _____
6. _____
7. _____
8. _____
9. _____
10. _____
11. _____
12. _____



Stelle fest, welcher Buchstabe die schattierte Fläche darstellt.


Antworten

1)



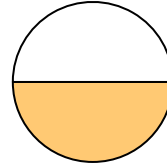
- A. one-fourth
B. three-fourths
C. three-fourths

2)




- A. three-quarters
B. one-quarter
C. one-half

3)



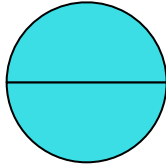
- A. two-quarters
B. three-quarters
C. one-half

4)



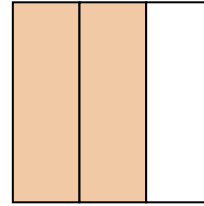
- A. two-halves
B. one-half
C. three-thirds

5)



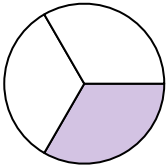
- A. two-halves
B. one-quarter
C. two-fourths

6)



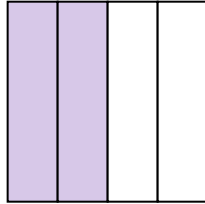
- A. two-thirds
B. two-halves
C. one-fourth

7)



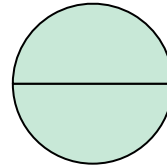
- A. three-fourths
B. two-halves
C. one-third

8)



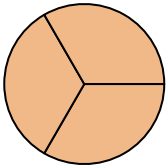
- A. one-half
B. two-quarters
C. three-quarters

9)



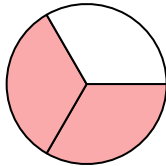
- A. two-quarters
B. three-fourths
C. two-halves

10)



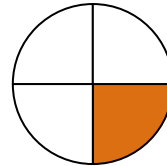
- A. three-thirds
B. one-fourth
C. two-halves

11)



- A. one-quarter
B. two-thirds
C. four-quarters

12)



- A. one-fourth
B. three-quarters
C. two-halves

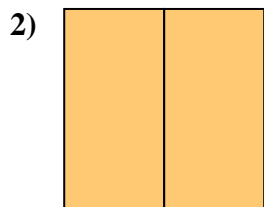
1. **C**2. **C**3. **C**4. **C**5. **A**6. **A**7. **C**8. **B**9. **C**10. **A**11. **B**12. **A**



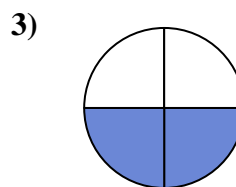
Stelle fest, welcher Buchstabe die schattierte Fläche darstellt.

Antworten

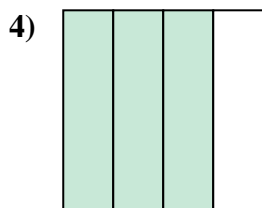
- A. two-fourths
B. one-half
C. two-halves



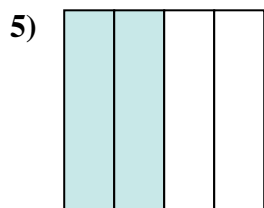
- A. two-halves
B. three-fourths
C. three-quarters



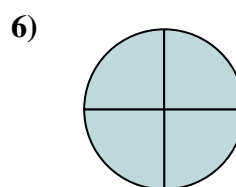
- A. one-quarter
B. three-fourths
C. two-quarters



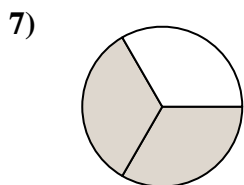
- A. one-fourth
B. three-quarters
C. two-fourths



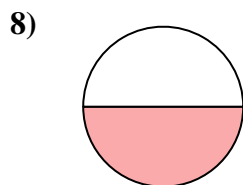
- A. two-quarters
B. three-fourths
C. two-halves



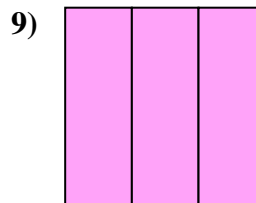
- A. four-quarters
B. two-halves
C. two-fourths



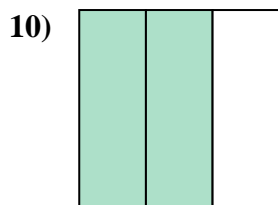
- A. one-quarter
B. two-halves
C. two-thirds



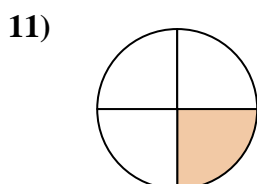
- A. three-fourths
B. two-halves
C. one-half



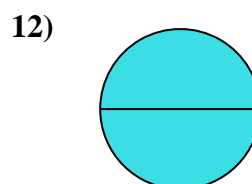
- A. one-half
B. three-thirds
C. four-quarters



- A. two-halves
B. two-thirds
C. three-fourths



- A. four-quarters
B. three-fourths
C. one-quarter

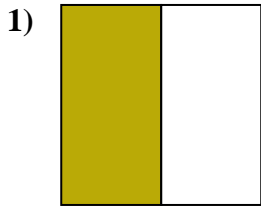


- A. two-halves
B. one-quarter
C. one-half

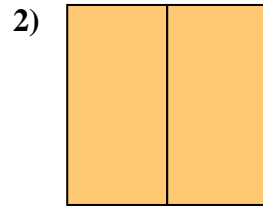
1. _____
2. _____
3. _____
4. _____
5. _____
6. _____
7. _____
8. _____
9. _____
10. _____
11. _____
12. _____



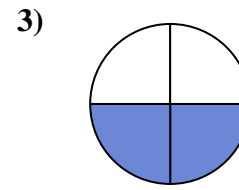
Stelle fest, welcher Buchstabe die schattierte Fläche darstellt.

Antworten

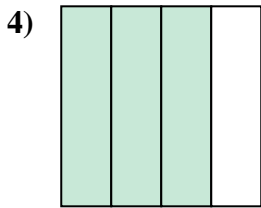
- A. two-fourths
B. one-half
C. two-halves



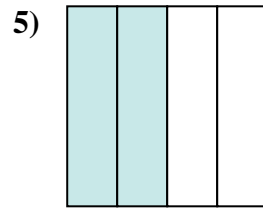
- A. two-halves
B. three-fourths
C. three-quarters



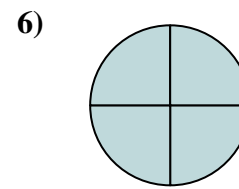
- A. one-quarter
B. three-fourths
C. two-quarters



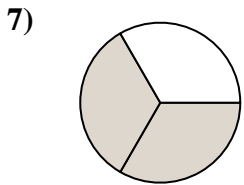
- A. one-fourth
B. three-quarters
C. two-fourths



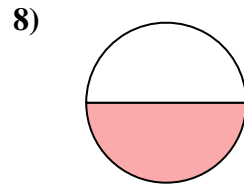
- A. two-quarters
B. three-fourths
C. two-halves



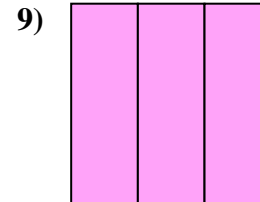
- A. four-quarters
B. two-halves
C. two-fourths



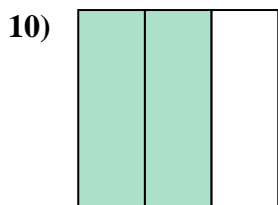
- A. one-quarter
B. two-halves
C. two-thirds



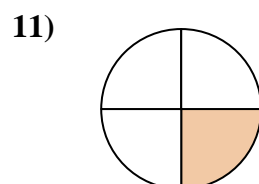
- A. three-fourths
B. two-halves
C. one-half



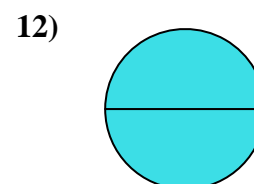
- A. one-half
B. three-thirds
C. four-quarters



- A. two-halves
B. two-thirds
C. three-fourths



- A. four-quarters
B. three-fourths
C. one-quarter



- A. two-halves
B. one-quarter
C. one-half

1. **B**
2. **A**
3. **C**
4. **B**
5. **A**
6. **A**
7. **C**
8. **C**
9. **B**
10. **B**
11. **C**
12. **A**