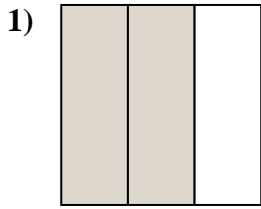
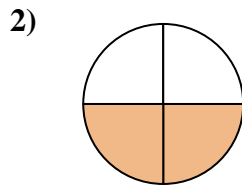




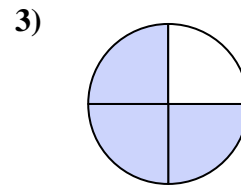
Stelle fest, welcher Buchstabe die schattierte Fläche darstellt.

Antworten

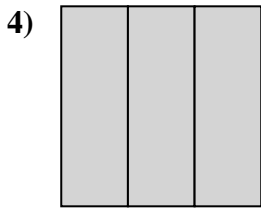
- A. two-thirds
B. two-fourths
C. two-halves



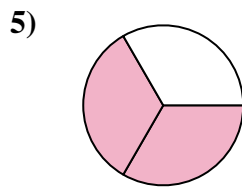
- A. three-fourths
B. two-fourths
C. one-half



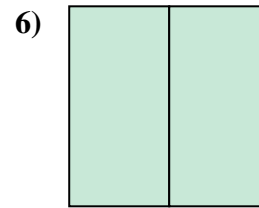
- A. three-fourths
B. four-quarters
C. two-halves



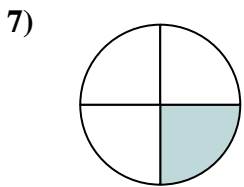
- A. three-thirds
B. one-fourth
C. two-halves



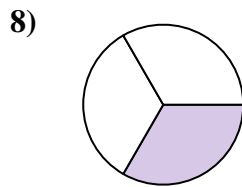
- A. two-halves
B. two-fourths
C. two-thirds



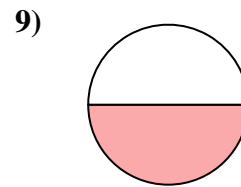
- A. one-fourth
B. two-fourths
C. two-halves



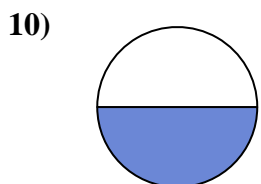
- A. two-halves
B. three-fourths
C. one-fourth



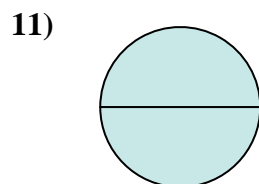
- A. two-halves
B. two-fourths
C. one-third



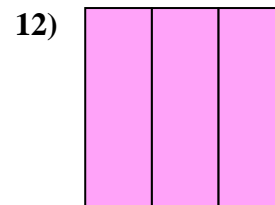
- A. two-halves
B. three-fourths
C. one-half



- A. two-fourths
B. one-fourth
C. one-half



- A. two-halves
B. three-fourths
C. four-quarters

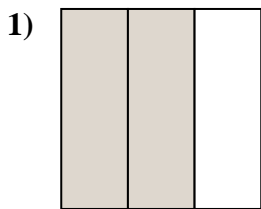


- A. three-thirds
B. one-fourth
C. three-quarters

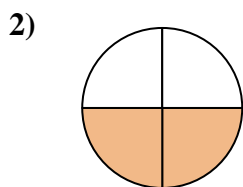
1. _____
2. _____
3. _____
4. _____
5. _____
6. _____
7. _____
8. _____
9. _____
10. _____
11. _____
12. _____



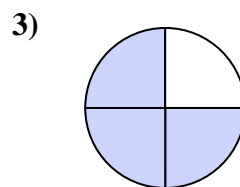
Stelle fest, welcher Buchstabe die schattierte Fläche darstellt.

Antworten

- A. two-thirds
B. two-fourths
C. two-halves



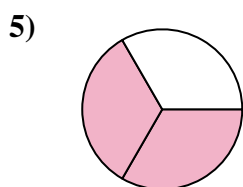
- A. three-fourths
B. two-fourths
C. one-half



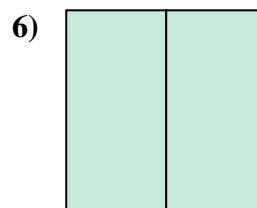
- A. three-fourths
B. four-quarters
C. two-halves



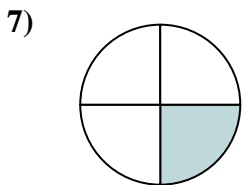
- A. three-thirds
B. one-fourth
C. two-halves



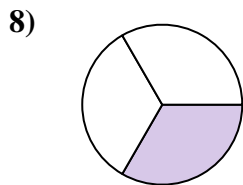
- A. two-halves
B. two-fourths
C. two-thirds



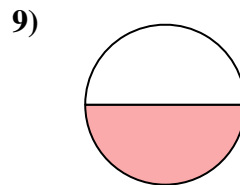
- A. one-fourth
B. two-fourths
C. two-halves



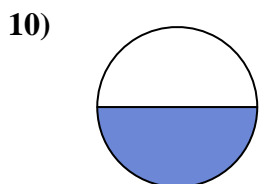
- A. two-halves
B. three-fourths
C. one-fourth



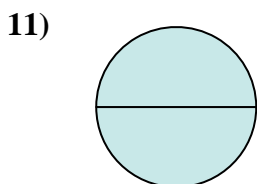
- A. two-halves
B. two-fourths
C. one-third



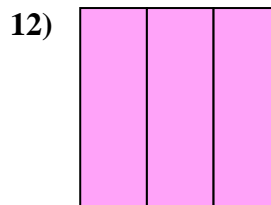
- A. two-halves
B. three-fourths
C. one-half



- A. two-fourths
B. one-fourth
C. one-half



- A. two-halves
B. three-fourths
C. four-quarters



- A. three-thirds
B. one-fourth
C. three-quarters

1. **A**
2. **B**
3. **A**
4. **A**
5. **C**
6. **C**
7. **C**
8. **C**
9. **C**
10. **C**
11. **A**
12. **A**