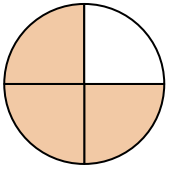




Stelle fest, welcher Buchstabe die schattierte Fläche darstellt.

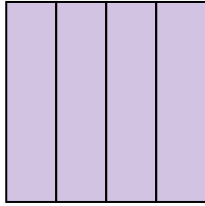
**Antworten**

1)



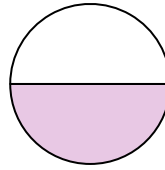
- A. three-fourths
- B. two-halves
- C. three-fourths

2)



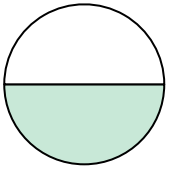
- A. one-half
- B. three-fourths
- C. one-quarter

3)



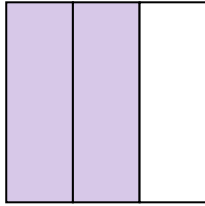
- A. one-half
- B. two-halves
- C. three-quarters

4)



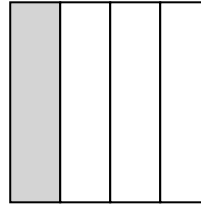
- A. one-half
- B. two-fourths
- C. two-halves

5)



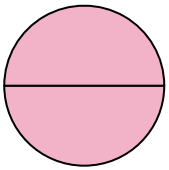
- A. two-quarters
- B. one-fourth
- C. two-thirds

6)



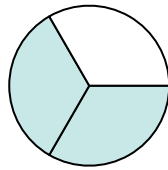
- A. four-quarters
- B. two-halves
- C. one-quarter

7)



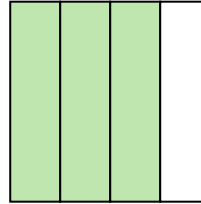
- A. one-fourth
- B. two-halves
- C. one-half

8)



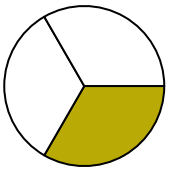
- A. one-half
- B. two-halves
- C. two-thirds

9)



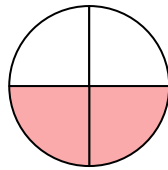
- A. three-fourths
- B. two-halves
- C. three-fourths

10)



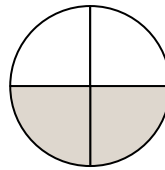
- A. one-fourth
- B. one-half
- C. one-third

11)



- A. three-fourths
- B. one-quarter
- C. two-quarters

12)



- A. two-fourths
- B. two-halves
- C. one-fourth

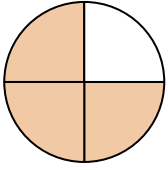
- 1. \_\_\_\_\_
- 2. \_\_\_\_\_
- 3. \_\_\_\_\_
- 4. \_\_\_\_\_
- 5. \_\_\_\_\_
- 6. \_\_\_\_\_
- 7. \_\_\_\_\_
- 8. \_\_\_\_\_
- 9. \_\_\_\_\_
- 10. \_\_\_\_\_
- 11. \_\_\_\_\_
- 12. \_\_\_\_\_



Stelle fest, welcher Buchstabe die schattierte Fläche darstellt.

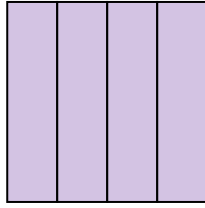
**Antworten**

1)



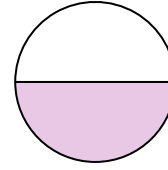
- A. three-fourths  
B. two-halves  
C. three-fourths

2)



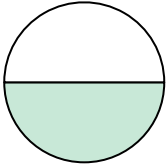
- A. one-half  
B. three-fourths  
C. one-quarter

3)



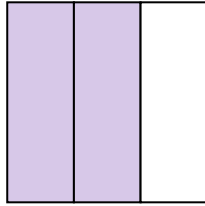
- A. one-half  
B. two-halves  
C. three-quarters

4)



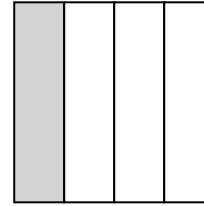
- A. one-half  
B. two-fourths  
C. two-halves

5)



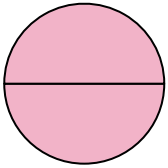
- A. two-quarters  
B. one-fourth  
C. two-thirds

6)



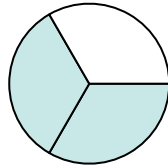
- A. four-quarters  
B. two-halves  
C. one-quarter

7)



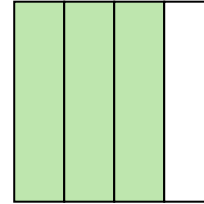
- A. one-fourth  
B. two-halves  
C. one-half

8)



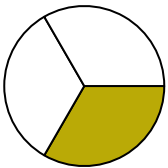
- A. one-half  
B. two-halves  
C. two-thirds

9)



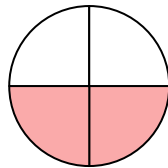
- A. three-fourths  
B. two-halves  
C. three-fourths

10)



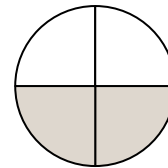
- A. one-fourth  
B. one-half  
C. one-third

11)



- A. three-fourths  
B. one-quarter  
C. two-quarters

12)



- A. two-fourths  
B. two-halves  
C. one-fourth

1.   **C**    
2.   **B**    
3.   **A**    
4.   **A**    
5.   **C**    
6.   **C**    
7.   **B**    
8.   **C**    
9.   **C**    
10.   **C**    
11.   **C**    
12.   **A**