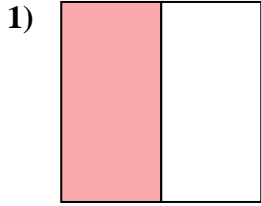
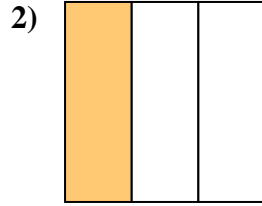




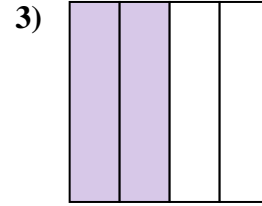
Stelle fest, welcher Buchstabe die schattierte Fläche darstellt.

Antworten

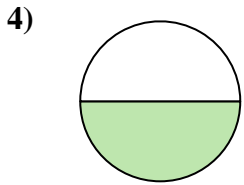
- A. one-half
B. one-quarter
C. two-quarters



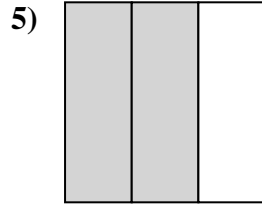
- A. one-fourth
B. one-third
C. two-halves



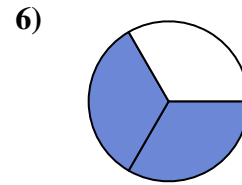
- A. two-halves
B. two-quarters
C. three-fourths



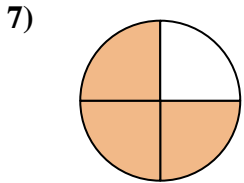
- A. one-half
B. four-quarters
C. three-fourths



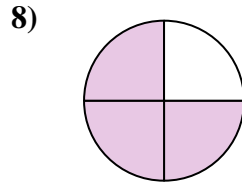
- A. two-thirds
B. two-quarters
C. four-quarters



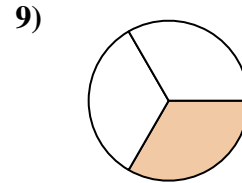
- A. two-thirds
B. two-halves
C. one-quarter



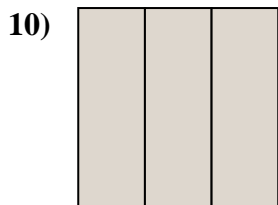
- A. three-fourths
B. one-quarter
C. three-fourths



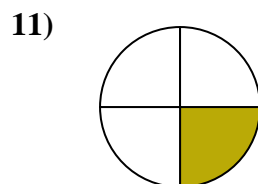
- A. three-quarters
B. two-halves
C. four-quarters



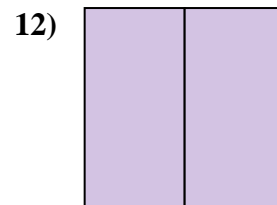
- A. one-third
B. two-fourths
C. three-fourths



- A. one-quarter
B. three-thirds
C. two-quarters



- A. one-fourth
B. three-fourths
C. two-halves

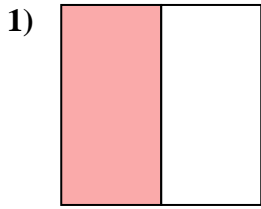


- A. three-quarters
B. two-fourths
C. two-halves

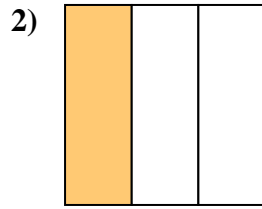
1. _____
2. _____
3. _____
4. _____
5. _____
6. _____
7. _____
8. _____
9. _____
10. _____
11. _____
12. _____



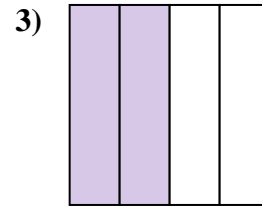
Stelle fest, welcher Buchstabe die schattierte Fläche darstellt.

Antworten

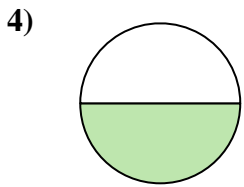
- A. one-half
B. one-quarter
C. two-quarters



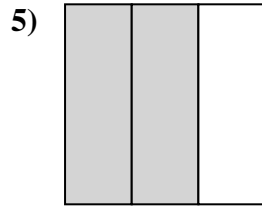
- A. one-fourth
B. one-third
C. two-halves



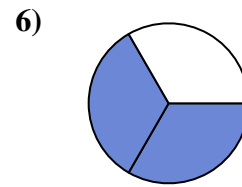
- A. two-halves
B. two-quarters
C. three-fourths



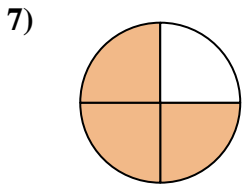
- A. one-half
B. four-quarters
C. three-fourths



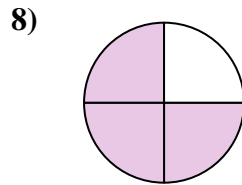
- A. two-thirds
B. two-quarters
C. four-quarters



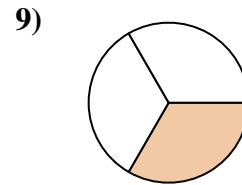
- A. two-thirds
B. two-halves
C. one-quarter



- A. three-fourths
B. one-quarter
C. three-fourths



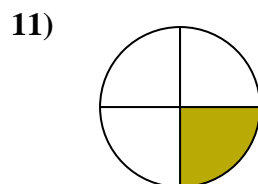
- A. three-quarters
B. two-halves
C. four-quarters



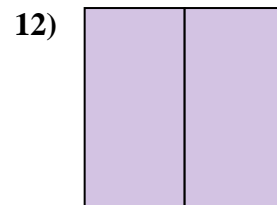
- A. one-third
B. two-fourths
C. three-fourths



- A. one-quarter
B. three-thirds
C. two-quarters



- A. one-fourth
B. three-fourths
C. two-halves



- A. three-quarters
B. two-fourths
C. two-halves

1. **A**2. **B**3. **B**4. **A**5. **A**6. **A**7. **C**8. **A**9. **A**10. **B**11. **A**12. **C**