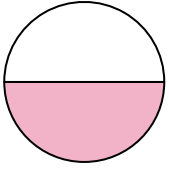




Stelle fest, welcher Buchstabe die schattierte Fläche darstellt.


**Antworten**

1)



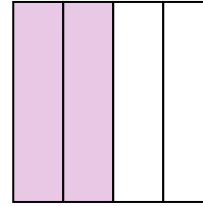
- A. one-half  
B. two-halves  
C. one-fourth

2)



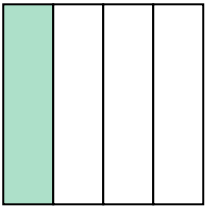
- A. three-fourths  
B. one-quarter  
C. two-halves

3)



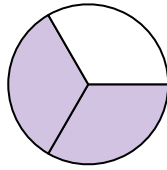
- A. two-quarters  
B. one-half  
C. three-fourths

4)



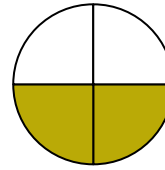
- A. three-fourths  
B. one-fourth  
C. two-halves

5)



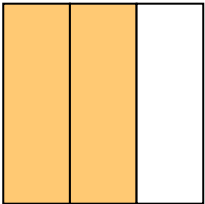
- A. three-fourths  
B. two-thirds  
C. two-quarters

6)



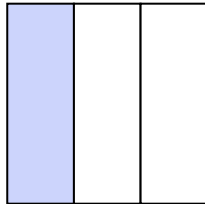
- A. three-fourths  
B. two-fourths  
C. three-fourths

7)



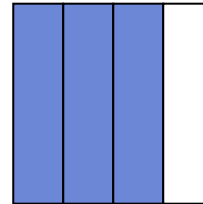
- A. one-quarter  
B. four-quarters  
C. two-thirds

8)




- A. three-fourths  
B. one-third  
C. two-halves

9)



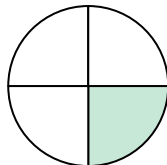
- A. three-fourths  
B. three-fourths  
C. two-quarters

10)



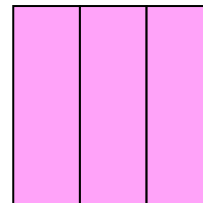
- A. two-halves  
B. one-quarter  
C. one-half

11)



- A. three-fourths  
B. one-half  
C. one-quarter

12)



- A. three-thirds  
B. two-halves  
C. one-quarter

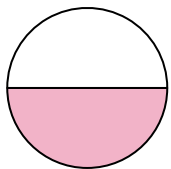
1. \_\_\_\_\_  
2. \_\_\_\_\_  
3. \_\_\_\_\_  
4. \_\_\_\_\_  
5. \_\_\_\_\_  
6. \_\_\_\_\_  
7. \_\_\_\_\_  
8. \_\_\_\_\_  
9. \_\_\_\_\_  
10. \_\_\_\_\_  
11. \_\_\_\_\_  
12. \_\_\_\_\_



Stelle fest, welcher Buchstabe die schattierte Fläche darstellt.


**Antworten**

1)



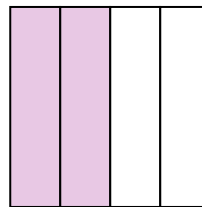
- A. one-half  
B. two-halves  
C. one-fourth

2)



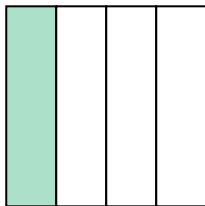
- A. three-fourths  
B. one-quarter  
C. two-halves

3)



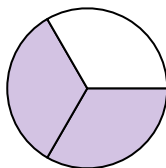
- A. two-quarters  
B. one-half  
C. three-fourths

4)



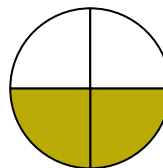
- A. three-fourths  
B. one-fourth  
C. two-halves

5)



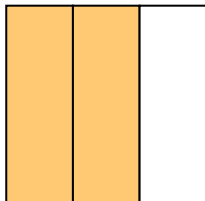
- A. three-fourths  
B. two-thirds  
C. two-quarters

6)



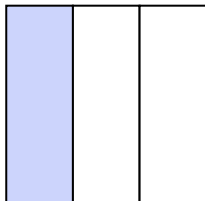
- A. three-fourths  
B. two-fourths  
C. three-fourths

7)



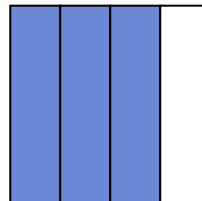
- A. one-quarter  
B. four-quarters  
C. two-thirds

8)




- A. three-fourths  
B. one-third  
C. two-halves

9)



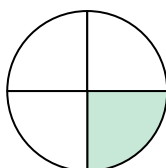
- A. three-fourths  
B. three-fourths  
C. two-quarters

10)




- A. two-halves  
B. one-quarter  
C. one-half

11)



- A. three-fourths  
B. one-half  
C. one-quarter

12)



- A. three-thirds  
B. two-halves  
C. one-quarter

1. **A**2. **C**3. **A**4. **B**5. **B**6. **B**7. **C**8. **B**9. **B**10. **C**11. **C**12. **A**