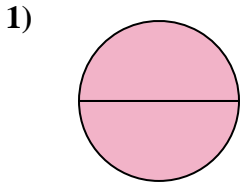


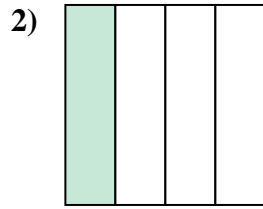


Stelle fest, welcher Buchstabe die schattierte Fläche darstellt.

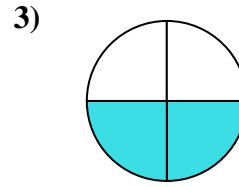
Antworten



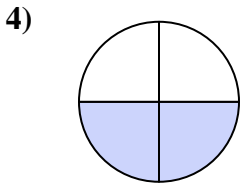
- A. one-half
- B. two-halves
- C. three-fourths



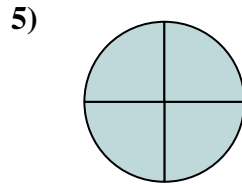
- A. three-fourths
- B. two-halves
- C. one-quarter



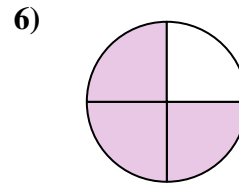
- A. three-fourths
- B. one-half
- C. two-quarters



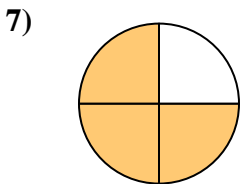
- A. two-halves
- B. one-fourth
- C. two-fourths



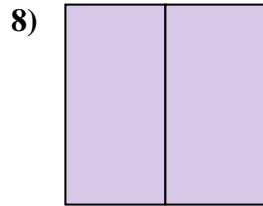
- A. four-quarters
- B. one-quarter
- C. three-fourths



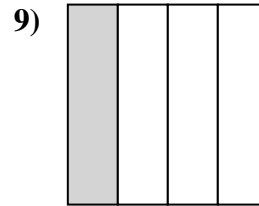
- A. three-fourths
- B. one-fourth
- C. two-halves



- A. two-fourths
- B. three-fourths
- C. one-quarter



- A. four-quarters
- B. three-quarters
- C. two-halves



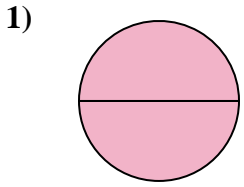
- A. three-quarters
- B. four-quarters
- C. one-quarter

1. _____
2. _____
3. _____
4. _____
5. _____
6. _____
7. _____
8. _____
9. _____

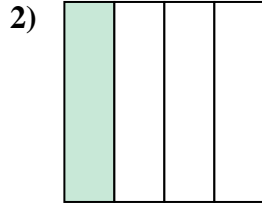


Stelle fest, welcher Buchstabe die schattierte Fläche darstellt.

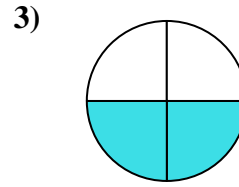
Antworten



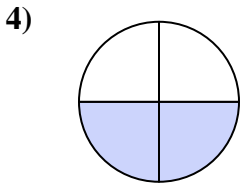
- A. one-half
- B. two-halves
- C. three-fourths



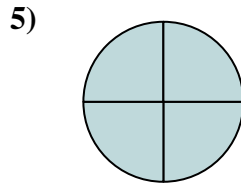
- A. three-fourths
- B. two-halves
- C. one-quarter



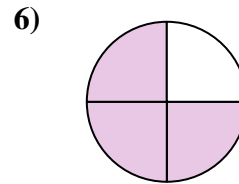
- A. three-fourths
- B. one-half
- C. two-quarters



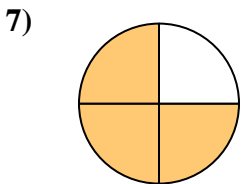
- A. two-halves
- B. one-fourth
- C. two-fourths



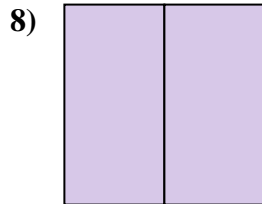
- A. four-quarters
- B. one-quarter
- C. three-fourths



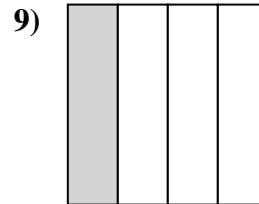
- A. three-fourths
- B. one-fourth
- C. two-halves



- A. two-fourths
- B. three-fourths
- C. one-quarter



- A. four-quarters
- B. three-quarters
- C. two-halves



- A. three-quarters
- B. four-quarters
- C. one-quarter

- 1. **B**
- 2. **C**
- 3. **C**
- 4. **C**
- 5. **A**
- 6. **A**
- 7. **B**
- 8. **C**
- 9. **C**