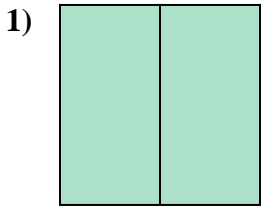


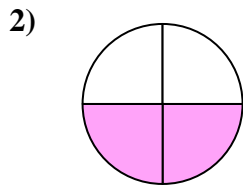


Stelle fest, welcher Buchstabe die schattierte Fläche darstellt.

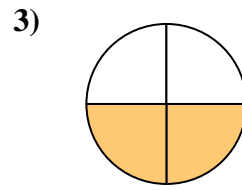
Antworten



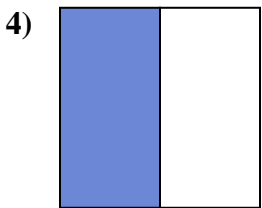
- A. two-halves
- B. one-fourth
- C. one-half



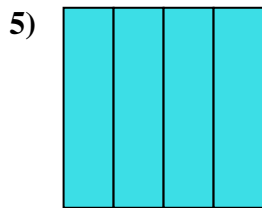
- A. two-fourths
- B. two-halves
- C. one-half



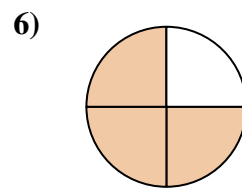
- A. two-quarters
- B. two-halves
- C. one-quarter



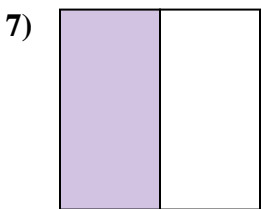
- A. three-quarters
- B. one-half
- C. three-fourths



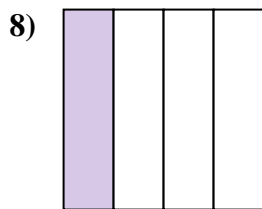
- A. two-quarters
- B. four-quarters
- C. two-halves



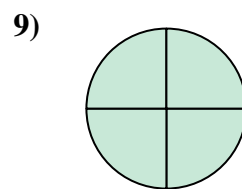
- A. three-quarters
- B. four-quarters
- C. one-quarter



- A. three-quarters
- B. three-fourths
- C. one-half



- A. two-fourths
- B. three-quarters
- C. one-fourth




- A. three-fourths
- B. two-halves
- C. three-fourths

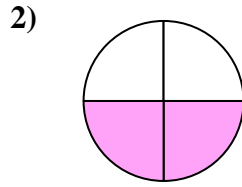
- 1. _____
- 2. _____
- 3. _____
- 4. _____
- 5. _____
- 6. _____
- 7. _____
- 8. _____
- 9. _____



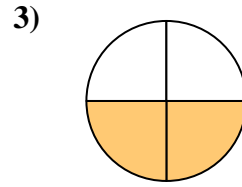
Stelle fest, welcher Buchstabe die schattierte Fläche darstellt.

Antworten

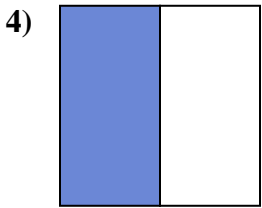
- A. two-halves
B. one-fourth
C. one-half



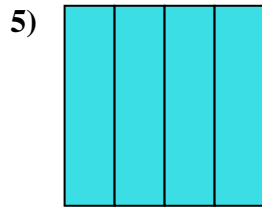
- A. two-fourths
B. two-halves
C. one-half



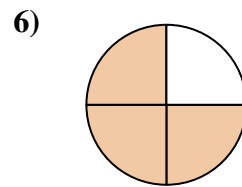
- A. two-quarters
B. two-halves
C. one-quarter



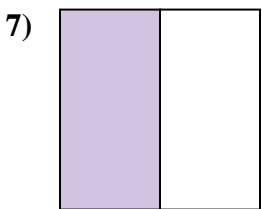
- A. three-quarters
B. one-half
C. three-fourths



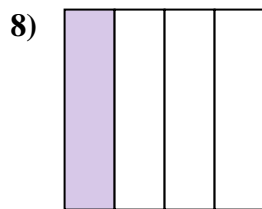
- A. two-quarters
B. four-quarters
C. two-halves



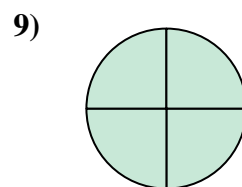
- A. three-quarters
B. four-quarters
C. one-quarter



- A. three-quarters
B. three-fourths
C. one-half



- A. two-fourths
B. three-quarters
C. one-fourth



- A. three-fourths
B. two-halves
C. three-fourths

1. **A**
2. **A**
3. **A**
4. **B**
5. **B**
6. **A**
7. **C**
8. **C**
9. **C**