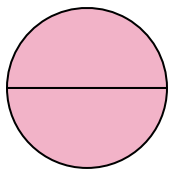




Stelle fest, welcher Buchstabe die schattierte Fläche darstellt.


Antworten

1)



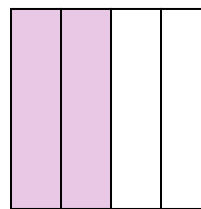
- A. two-halves
B. one-quarter
C. two-quarters

2)



- A. one-half
B. three-fourths
C. two-halves

3)



- A. two-fourths
B. one-fourth
C. three-fourths

1. _____

2. _____

3. _____

4. _____

5. _____

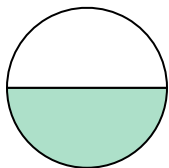
6. _____

7. _____

8. _____

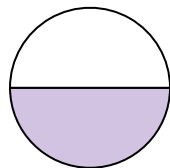
9. _____

4)



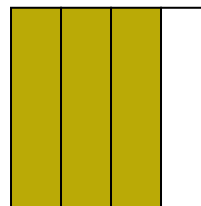
- A. two-fourths
B. three-fourths
C. one-half

5)



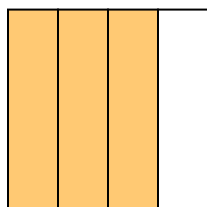
- A. three-fourths
B. one-half
C. two-quarters

6)



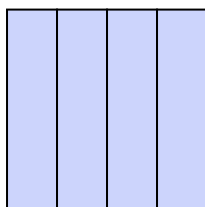
- A. one-fourth
B. two-fourths
C. three-fourths

7)



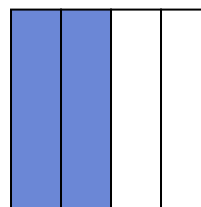
- A. two-fourths
B. four-quarters
C. three-quarters

8)



- A. two-quarters
B. one-half
C. four-quarters

9)



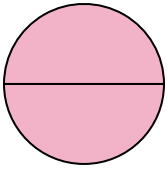
- A. two-halves
B. two-fourths
C. one-fourth



Stelle fest, welcher Buchstabe die schattierte Fläche darstellt.


Antworten

1)



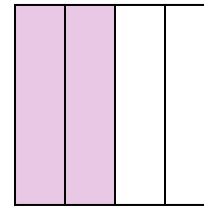
- A. two-halves
B. one-quarter
C. two-quarters

2)



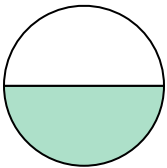
- A. one-half
B. three-fourths
C. two-halves

3)



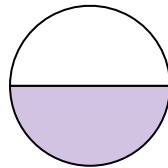
- A. two-fourths
B. one-fourth
C. three-fourths

4)



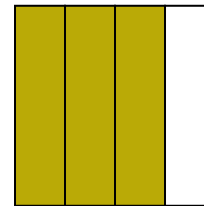
- A. two-fourths
B. three-fourths
C. one-half

5)



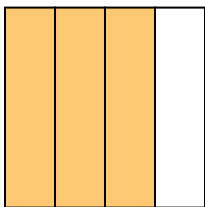
- A. three-fourths
B. one-half
C. two-quarters

6)



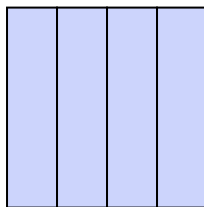
- A. one-fourth
B. two-fourths
C. three-fourths

7)



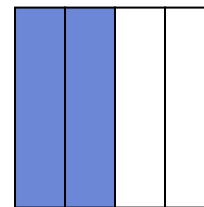
- A. two-fourths
B. four-quarters
C. three-quarters

8)



- A. two-quarters
B. one-half
C. four-quarters

9)



- A. two-halves
B. two-fourths
C. one-fourth

1. **A**2. **C**3. **A**4. **C**5. **B**6. **C**7. **C**8. **C**9. **B**