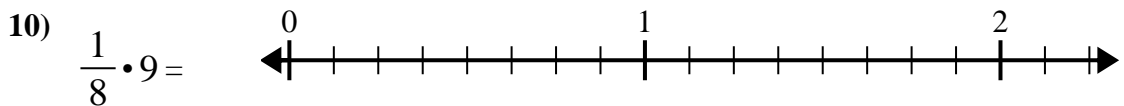
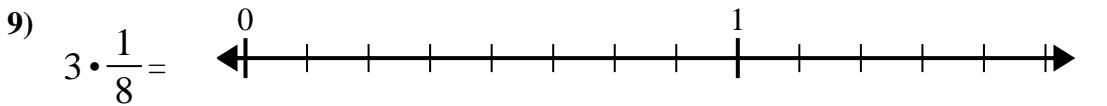
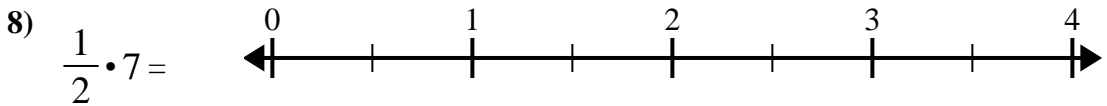
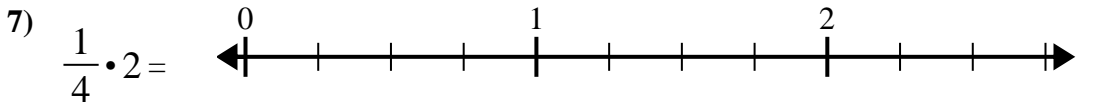
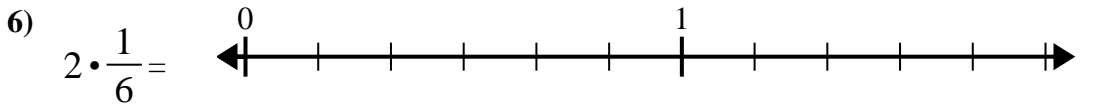
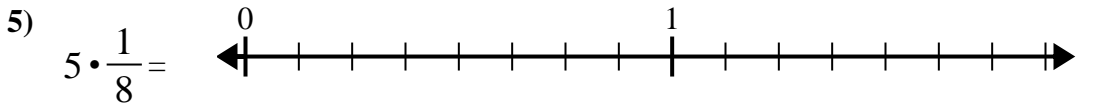
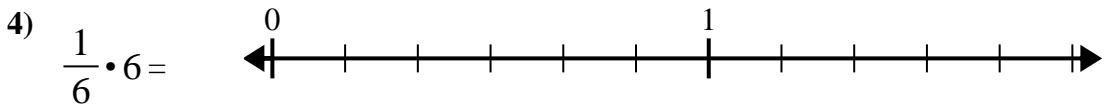
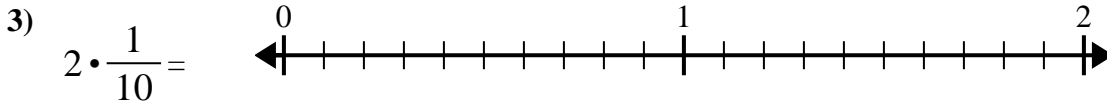
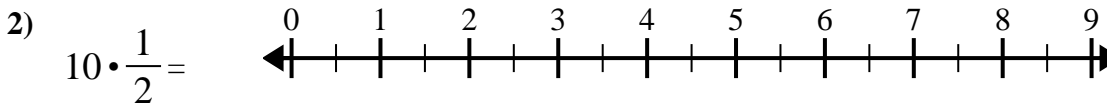
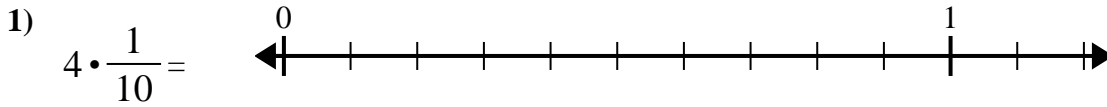




Verwenden Sie den Zahlenstrahl, um zu lösen.

Antworten

1. _____

2. _____

3. _____

4. _____

5. _____

6. _____

7. _____

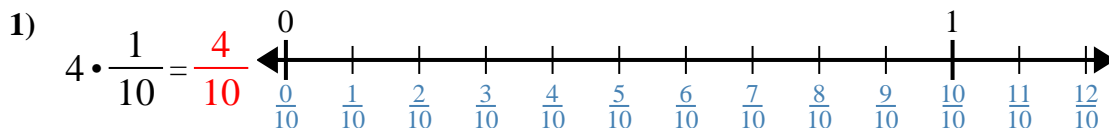
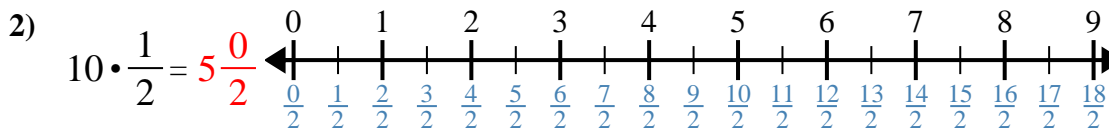
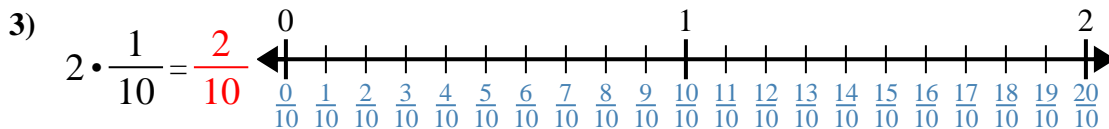
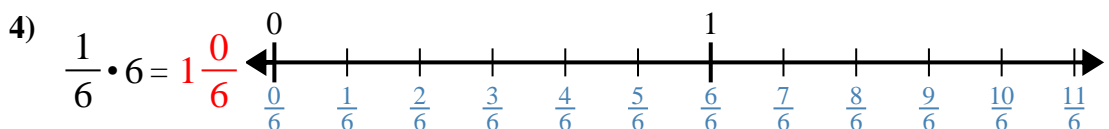
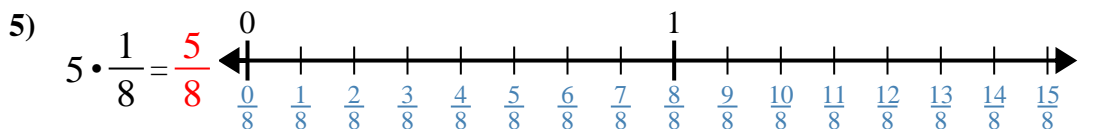
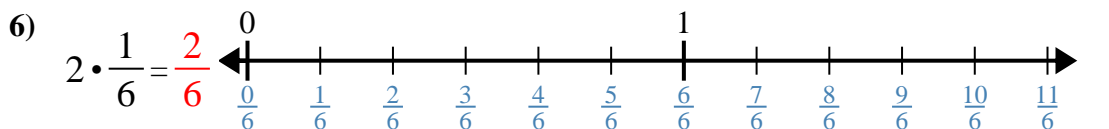
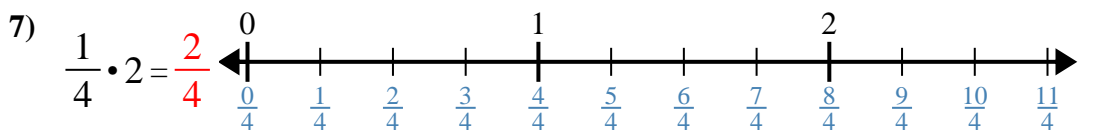
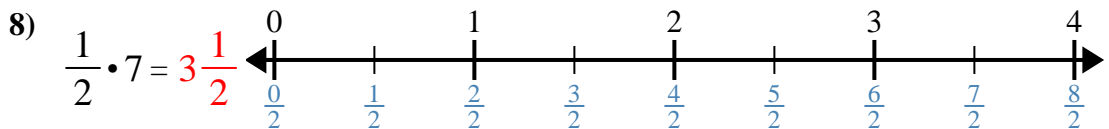
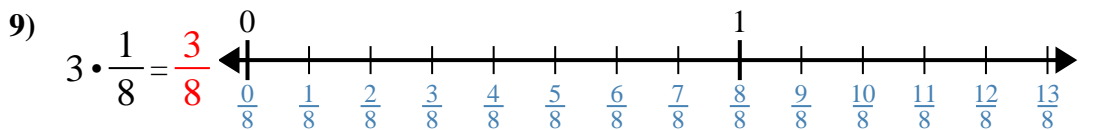
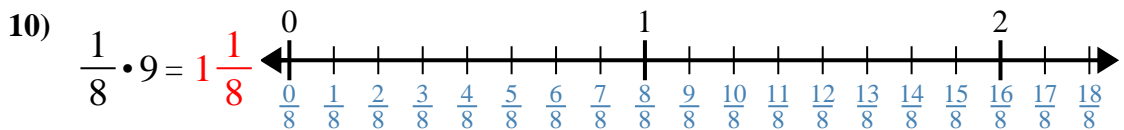
8. _____

9. _____

10. _____



Verwenden Sie den Zahlenstrahl, um zu lösen.

Antworten1. $\frac{4}{10}$ 2. $5 \frac{0}{2}$ 3. $\frac{2}{10}$ 4. $1 \frac{0}{6}$ 5. $\frac{5}{8}$ 6. $\frac{2}{6}$ 7. $\frac{2}{4}$ 8. $3 \frac{1}{2}$ 9. $\frac{3}{8}$ 10. $1 \frac{1}{8}$



Verwenden Sie den Zahlenstrahl, um zu lösen.

Antworten

$\frac{5}{8}$

$5\frac{0}{2}$

$\frac{4}{10}$

$\frac{3}{8}$

$\frac{2}{10}$

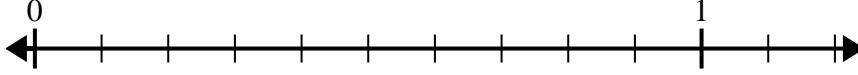
$\frac{2}{4}$

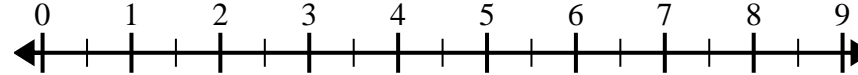
$3\frac{1}{2}$

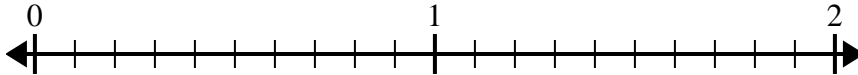
$1\frac{0}{6}$

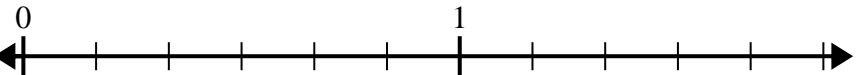
$\frac{2}{6}$

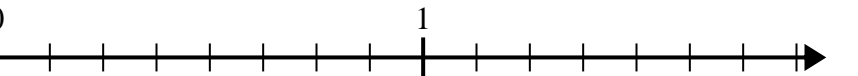
$1\frac{1}{8}$

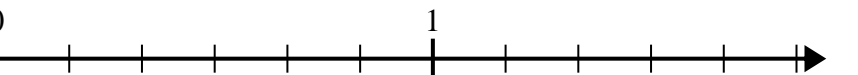
1) $4 \cdot \frac{1}{10} =$ 

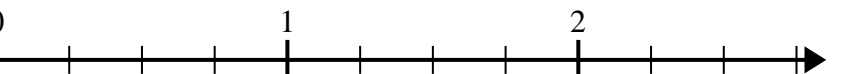
2) $10 \cdot \frac{1}{2} =$ 

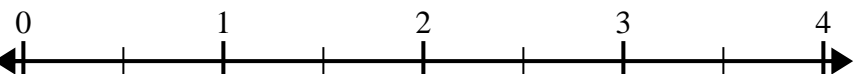
3) $2 \cdot \frac{1}{10} =$ 

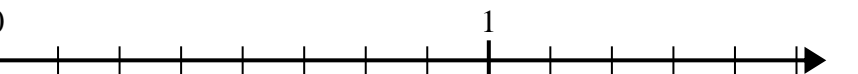
4) $\frac{1}{6} \cdot 6 =$ 

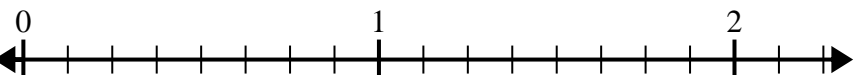
5) $5 \cdot \frac{1}{8} =$ 

6) $2 \cdot \frac{1}{6} =$ 

7) $\frac{1}{4} \cdot 2 =$ 

8) $\frac{1}{2} \cdot 7 =$ 

9) $3 \cdot \frac{1}{8} =$ 

10) $\frac{1}{8} \cdot 9 =$ 

1. _____

2. _____

3. _____

4. _____

5. _____

6. _____

7. _____

8. _____

9. _____

10. _____