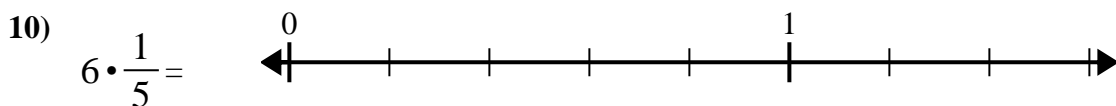
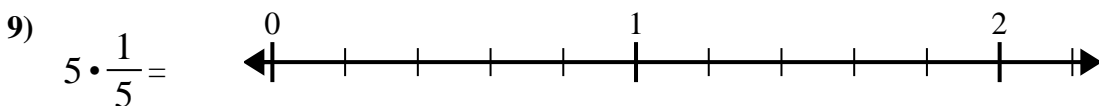
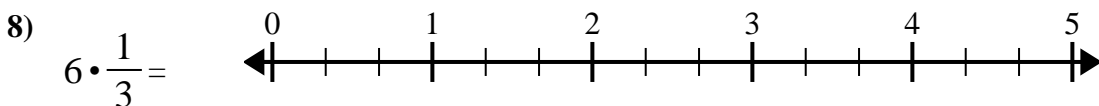
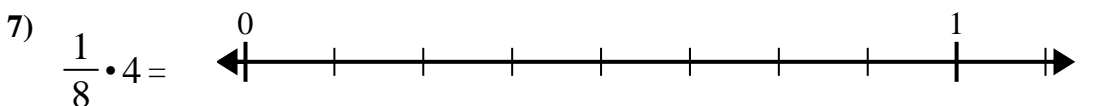
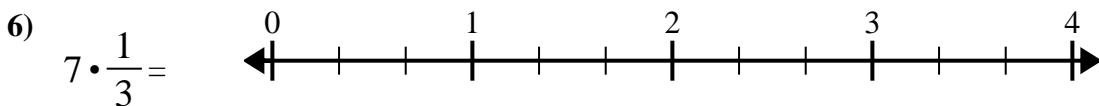
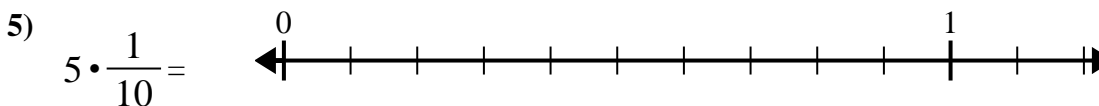
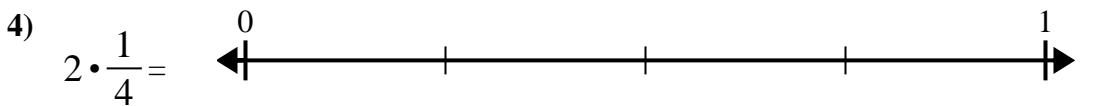
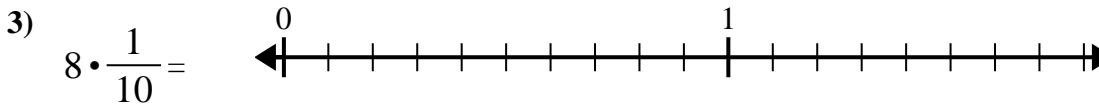
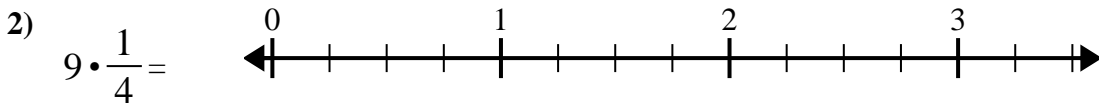
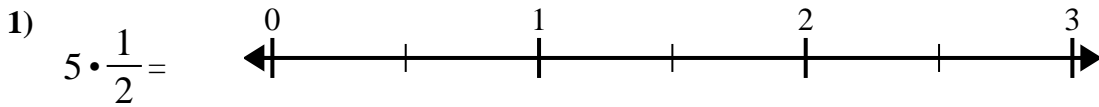




Verwenden Sie den Zahlenstrahl, um zu lösen.

Antworten

1. _____

2. _____

3. _____

4. _____

5. _____

6. _____

7. _____

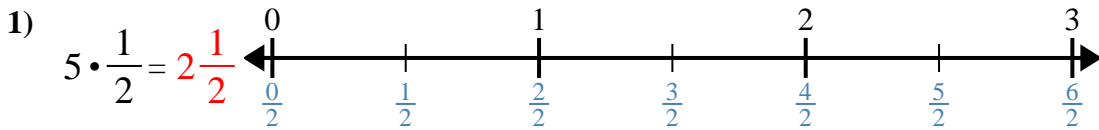
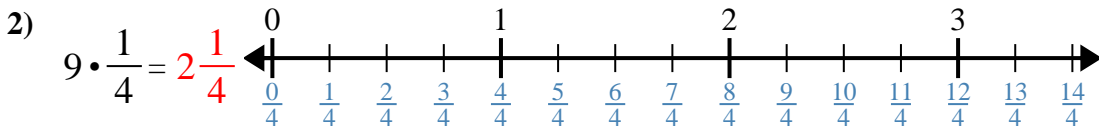
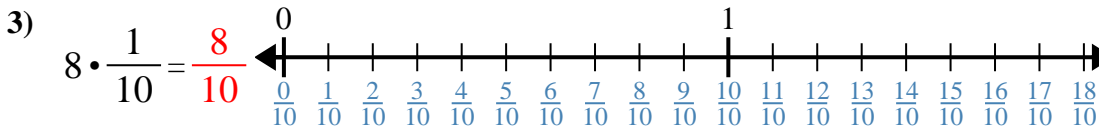
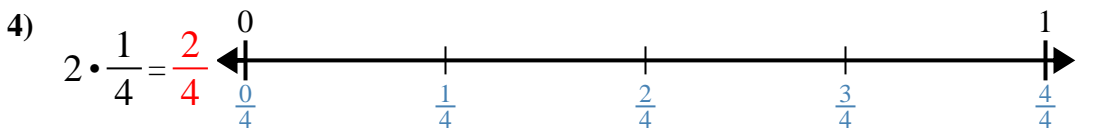
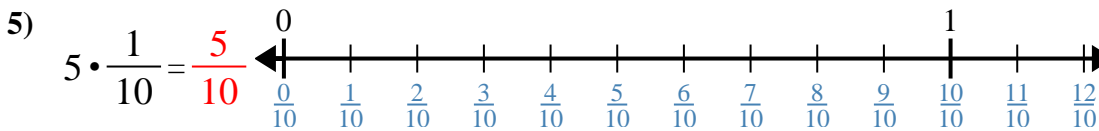
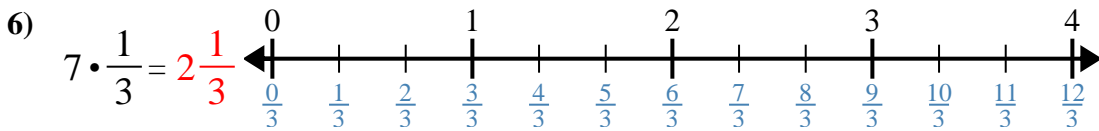
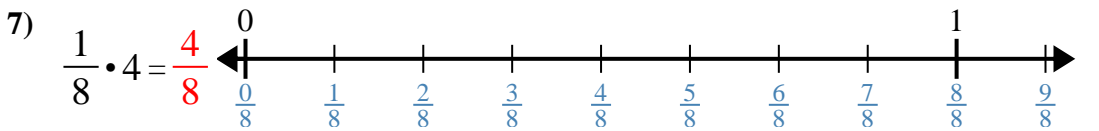
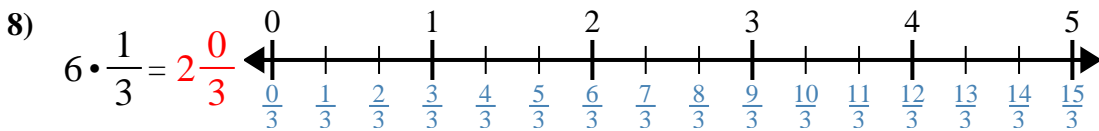
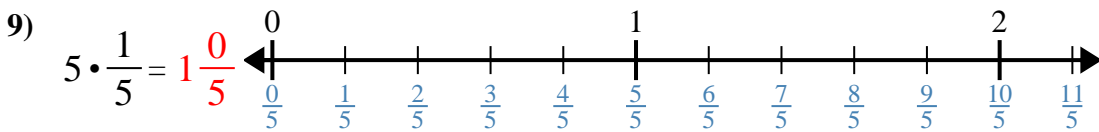
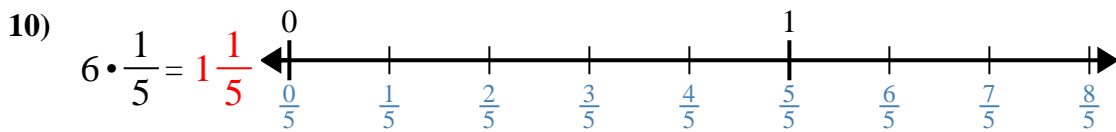
8. _____

9. _____

10. _____



Verwenden Sie den Zahlenstrahl, um zu lösen.

Antworten1. $2\frac{1}{2}$ 2. $2\frac{1}{4}$ 3. $\frac{8}{10}$ 4. $\frac{2}{4}$ 5. $\frac{5}{10}$ 6. $2\frac{1}{3}$ 7. $\frac{4}{8}$ 8. $2\frac{0}{3}$ 9. $1\frac{0}{5}$ 10. $1\frac{1}{5}$



Verwenden Sie den Zahlenstrahl, um zu lösen.

Antworten

$\frac{4}{8}$

$2\frac{1}{2}$

$1\frac{1}{5}$

$2\frac{1}{4}$

$2\frac{0}{3}$

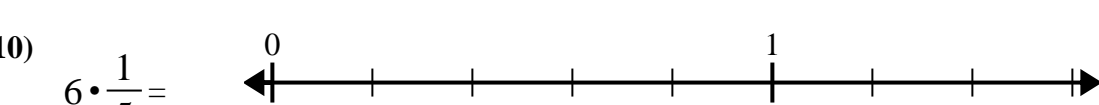
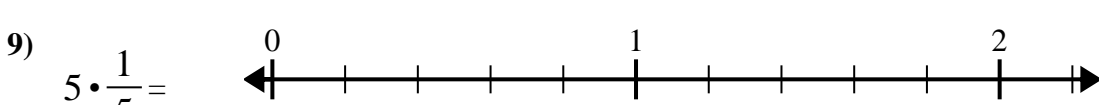
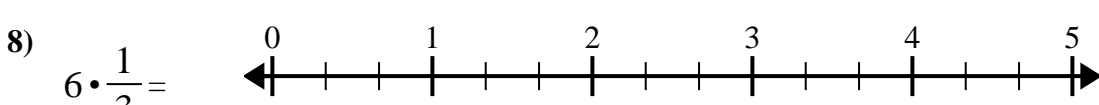
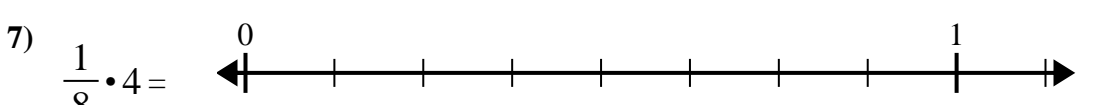
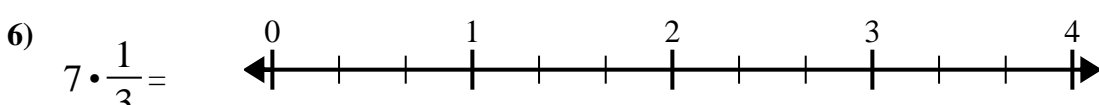
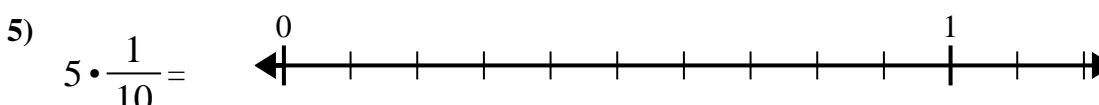

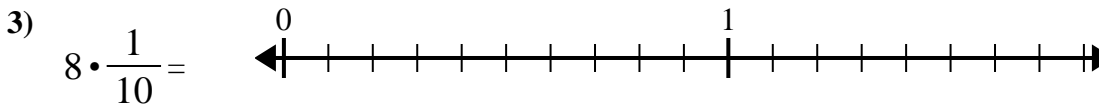
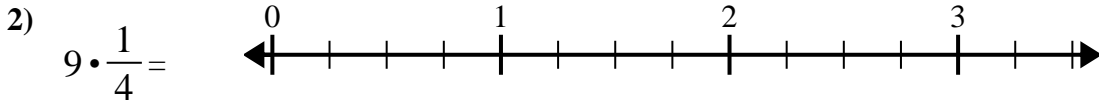
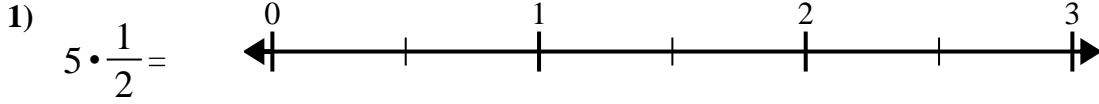
$\frac{8}{10}$

$1\frac{0}{5}$

$2\frac{1}{3}$

$\frac{5}{10}$

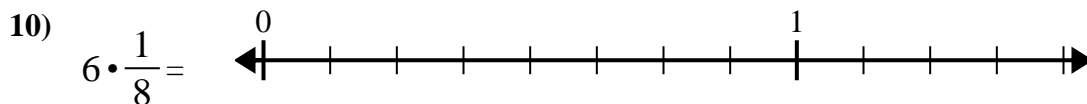
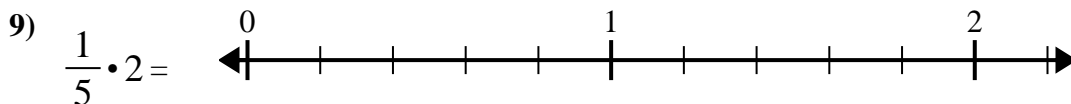
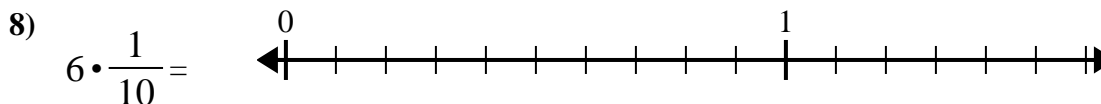
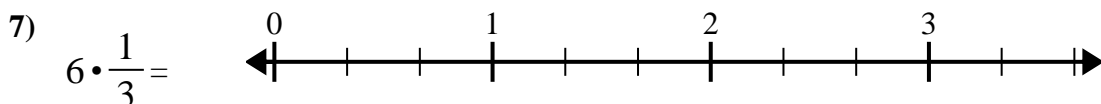
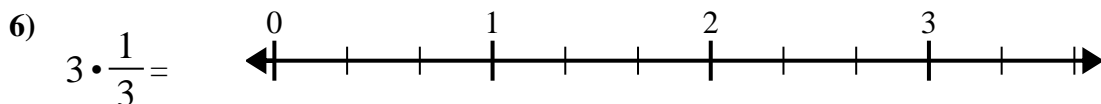
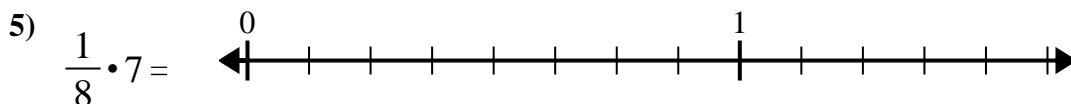
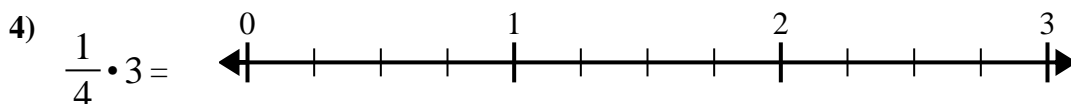
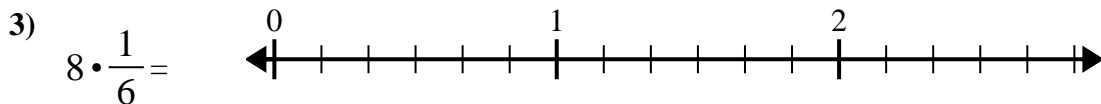
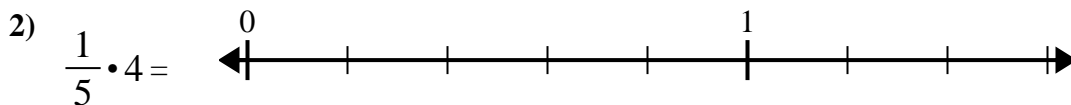
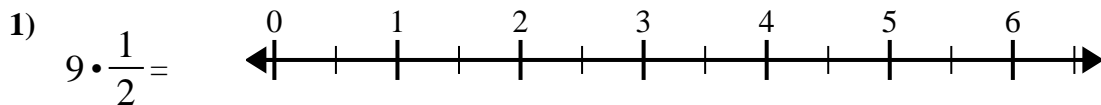
$\frac{2}{4}$



1. _____
2. _____
3. _____
4. _____
5. _____
6. _____
7. _____
8. _____
9. _____
10. _____



Verwenden Sie den Zahlenstrahl, um zu lösen.

**Antworten**

1. _____

2. _____

3. _____

4. _____

5. _____

6. _____

7. _____

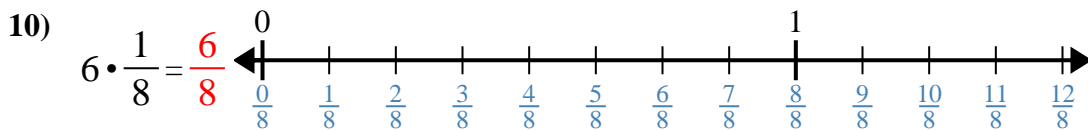
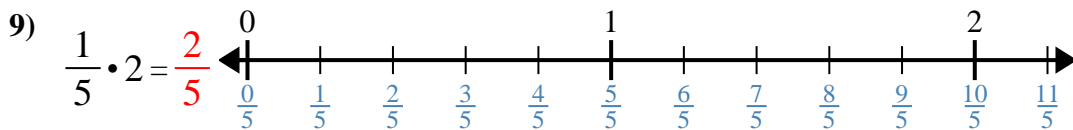
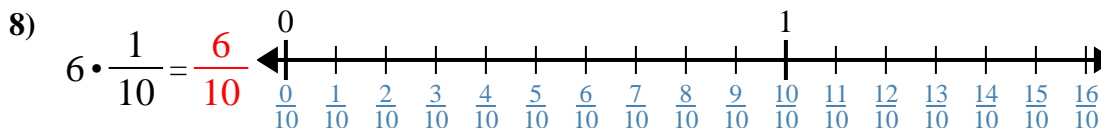
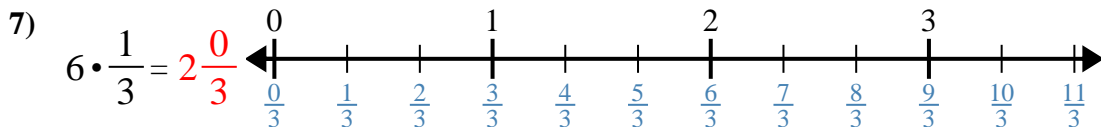
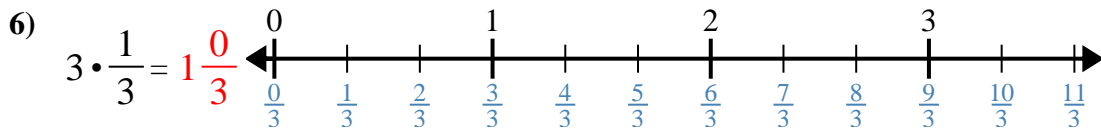
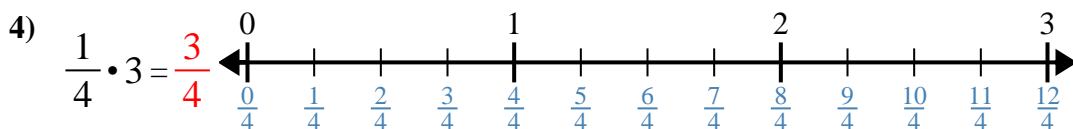
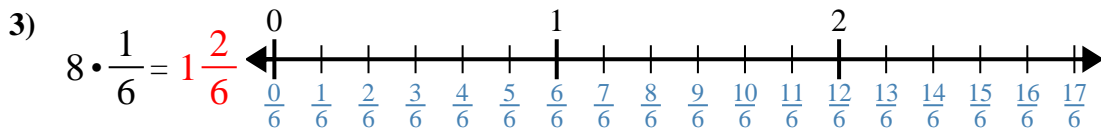
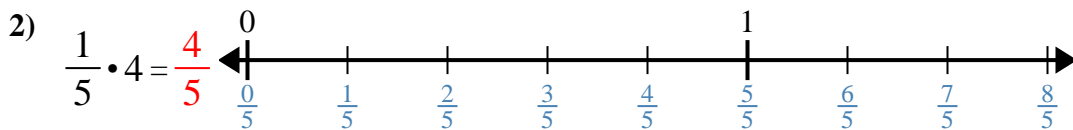
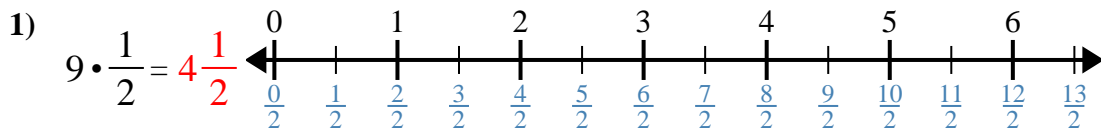
8. _____

9. _____

10. _____



Verwenden Sie den Zahlenstrahl, um zu lösen.

**Antworten**

1. $4\frac{1}{2}$

2. $\frac{4}{5}$

3. $1\frac{2}{6}$

4. $\frac{3}{4}$

5. $\frac{7}{8}$

6. $1\frac{0}{3}$

7. $2\frac{0}{3}$

8. $\frac{6}{10}$

9. $\frac{2}{5}$

10. $\frac{6}{8}$



Verwenden Sie den Zahlenstrahl, um zu lösen.

Antworten

$1\frac{2}{6}$

$4\frac{1}{2}$

$\frac{4}{5}$

$2\frac{0}{3}$

$\frac{3}{4}$

$1\frac{0}{3}$

$\frac{6}{8}$

$\frac{2}{5}$

$\frac{6}{10}$

$\frac{7}{8}$

1) $9 \cdot \frac{1}{2} =$

2) $\frac{1}{5} \cdot 4 =$

3) $8 \cdot \frac{1}{6} =$

4) $\frac{1}{4} \cdot 3 =$

5) $\frac{1}{8} \cdot 7 =$

6) $3 \cdot \frac{1}{3} =$

7) $6 \cdot \frac{1}{3} =$

8) $6 \cdot \frac{1}{10} =$

9) $\frac{1}{5} \cdot 2 =$

10) $6 \cdot \frac{1}{8} =$

1. _____

2. _____

3. _____

4. _____

5. _____

6. _____

7. _____

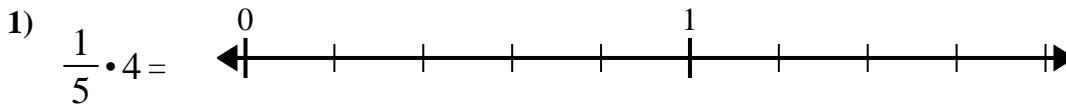
8. _____

9. _____

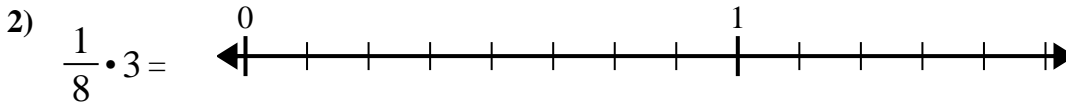
10. _____



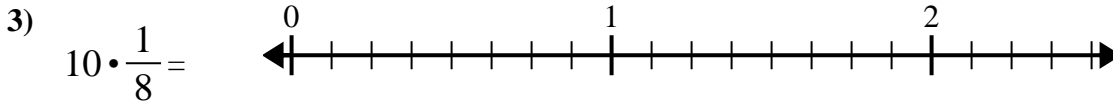
Verwenden Sie den Zahlenstrahl, um zu lösen.

Antworten

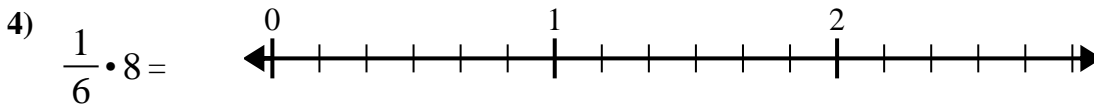
1. _____



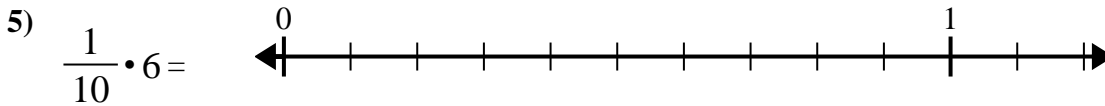
2. _____



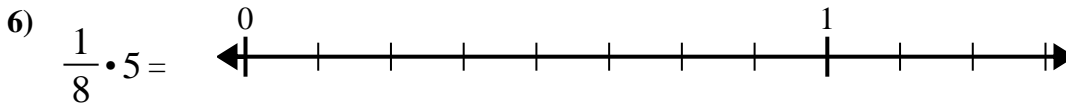
3. _____



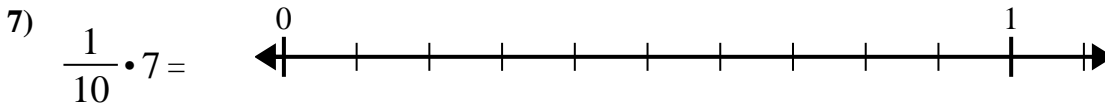
4. _____



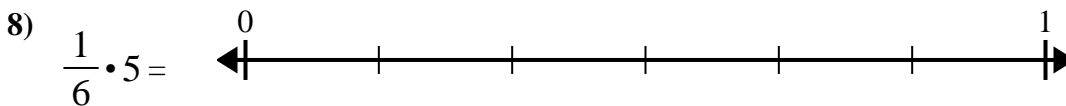
5. _____



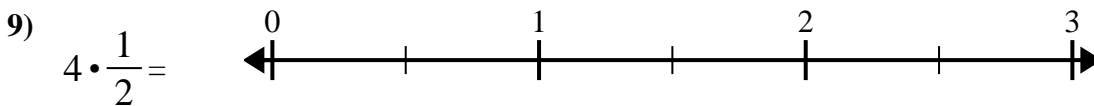
6. _____



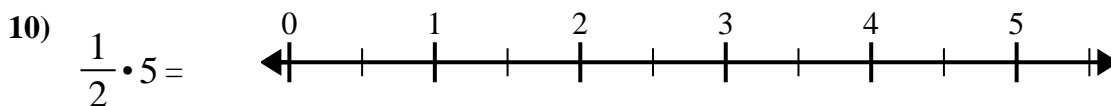
7. _____



8. _____



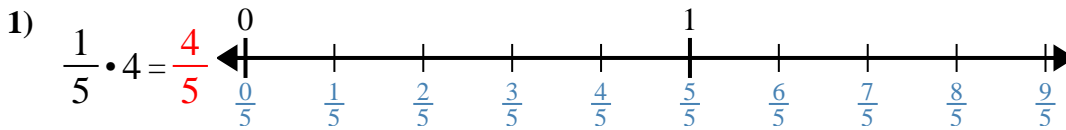
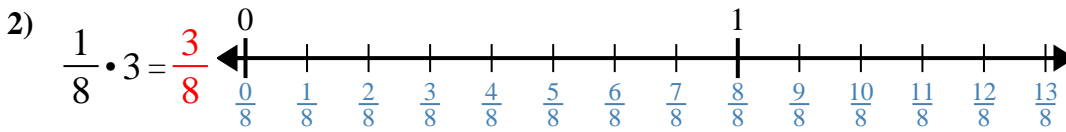
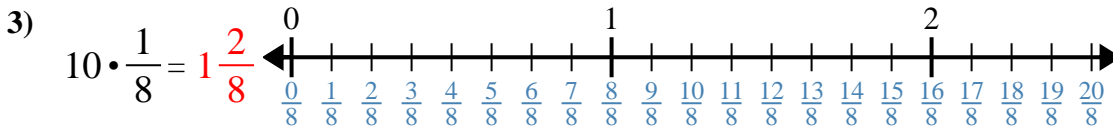
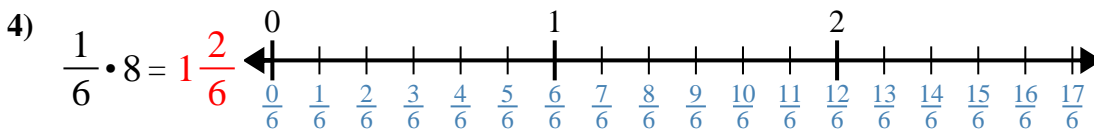
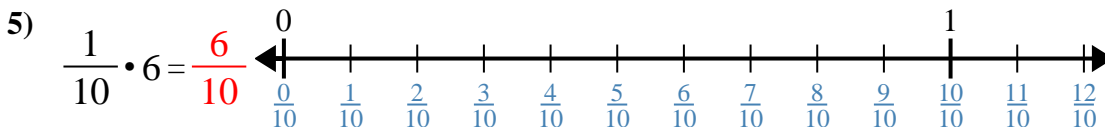
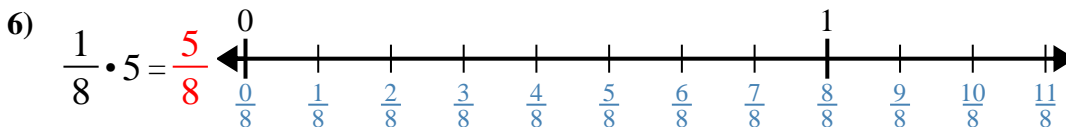
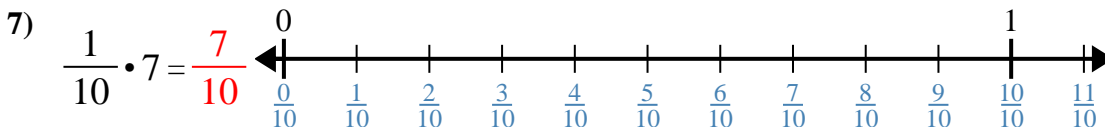
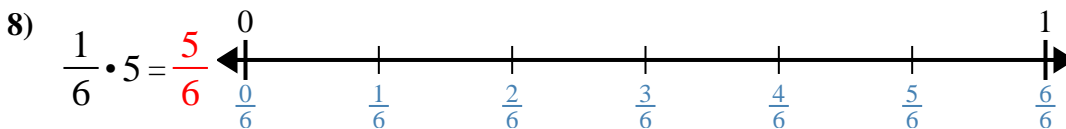
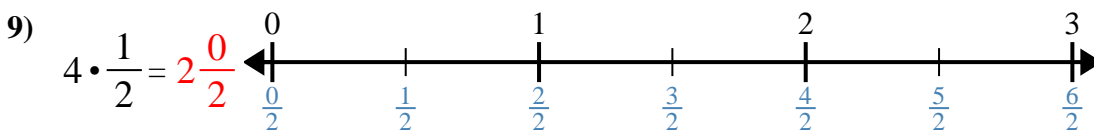
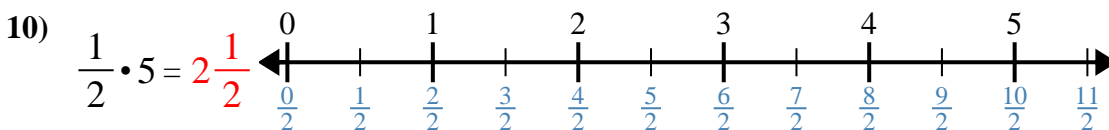
9. _____



10. _____



Verwenden Sie den Zahlenstrahl, um zu lösen.

Antworten1. $\frac{4}{5}$ 2. $\frac{3}{8}$ 3. $1\frac{2}{8}$ 4. $1\frac{2}{6}$ 5. $\frac{6}{10}$ 6. $\frac{5}{8}$ 7. $\frac{7}{10}$ 8. $\frac{5}{6}$ 9. $2\frac{0}{2}$ 10. $2\frac{1}{2}$



Verwenden Sie den Zahlenstrahl, um zu lösen.

Antworten

$2\frac{1}{2}$

$\frac{5}{6}$

$1\frac{2}{8}$

$\frac{5}{8}$

$\frac{4}{5}$

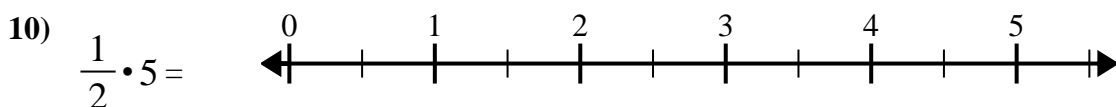
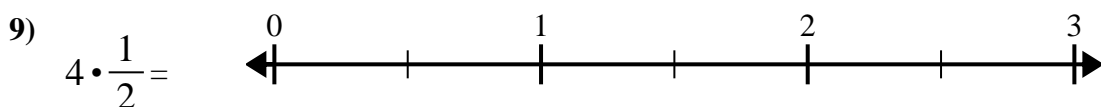
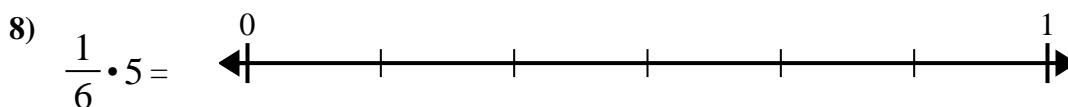
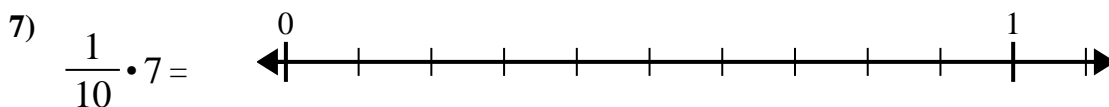
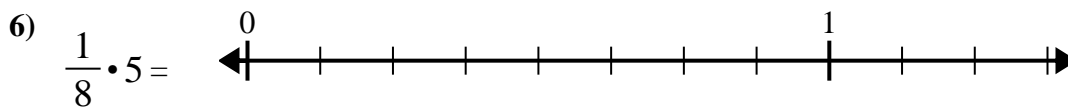
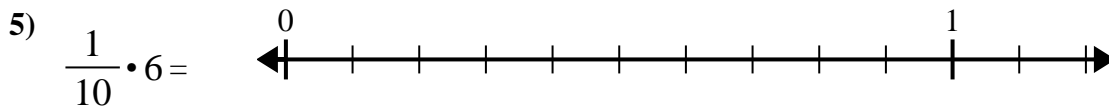
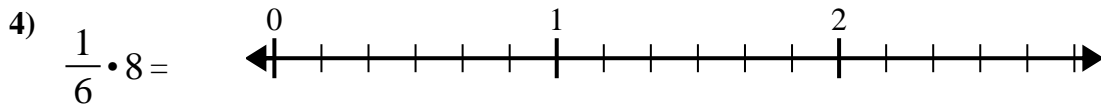
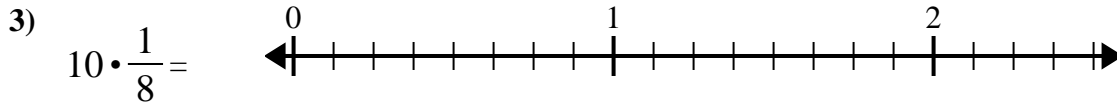
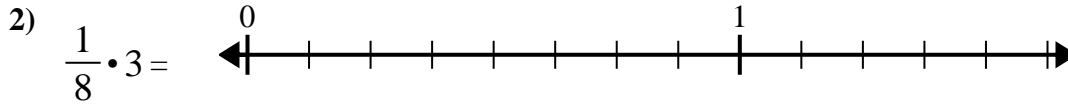
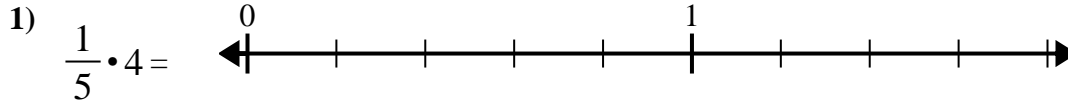
$2\frac{0}{2}$

$\frac{7}{10}$

$\frac{3}{8}$

$1\frac{2}{6}$

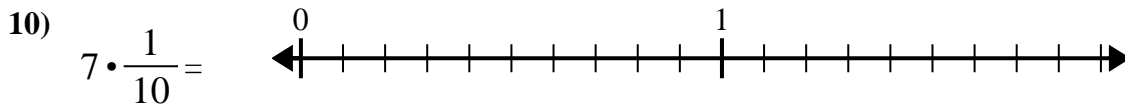
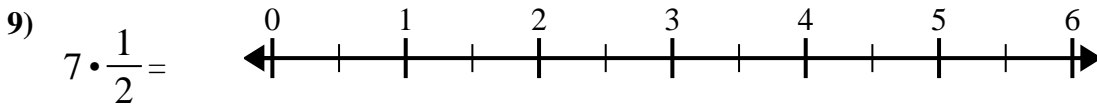
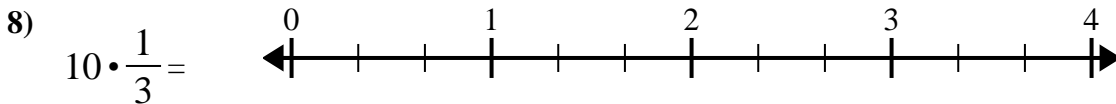
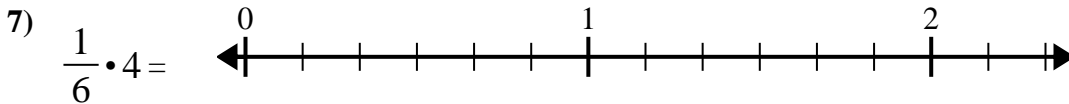
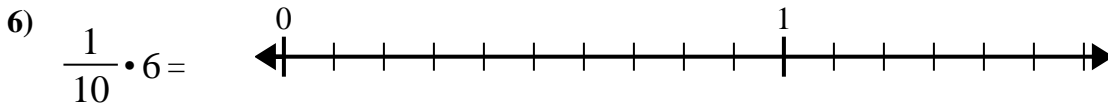
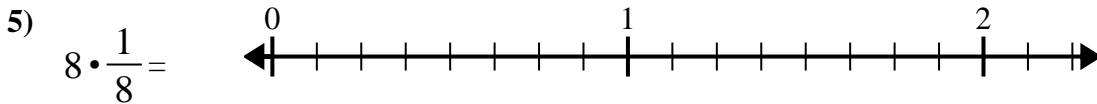
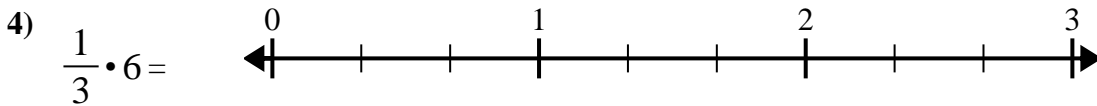

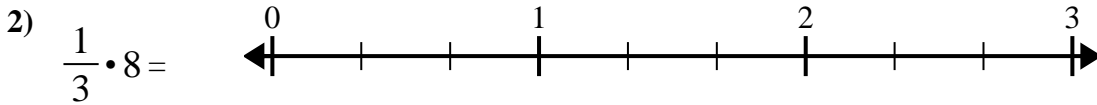
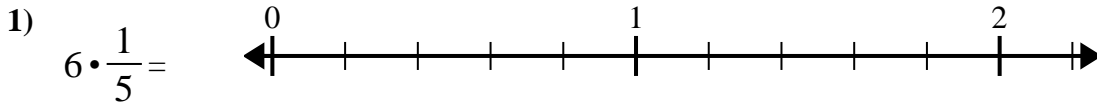
$\frac{6}{10}$



1. _____
2. _____
3. _____
4. _____
5. _____
6. _____
7. _____
8. _____
9. _____
10. _____



Verwenden Sie den Zahlenstrahl, um zu lösen.

Antworten

1. _____

2. _____

3. _____

4. _____

5. _____

6. _____

7. _____

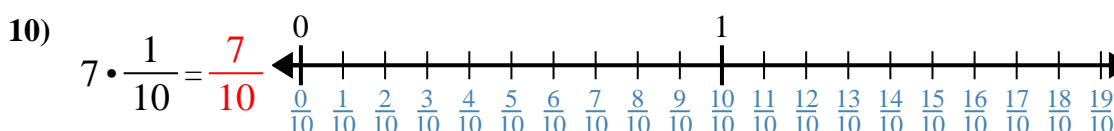
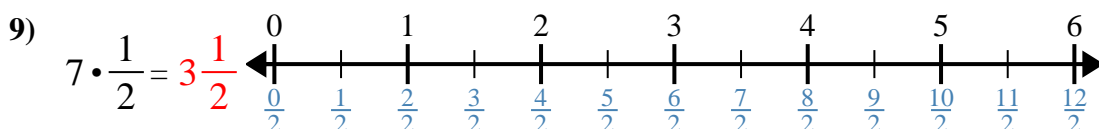
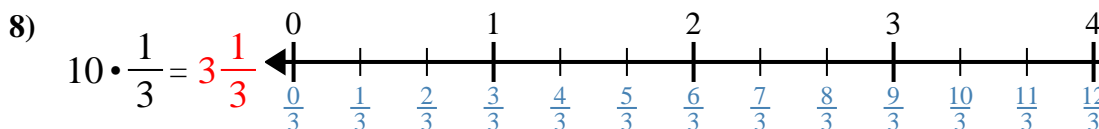
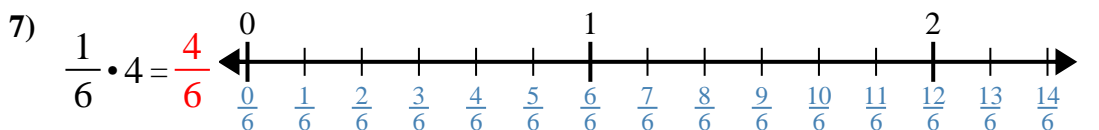
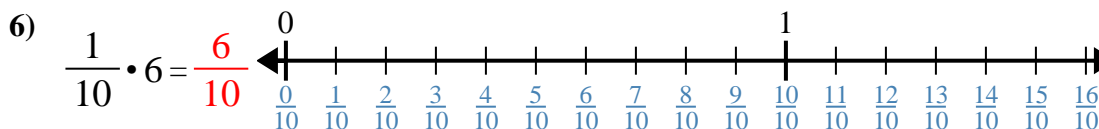
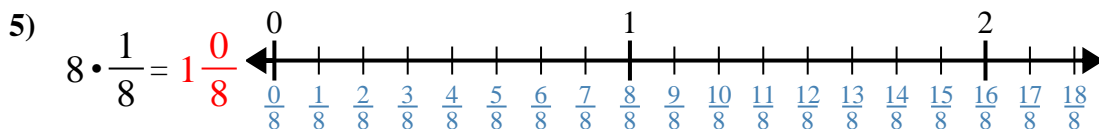
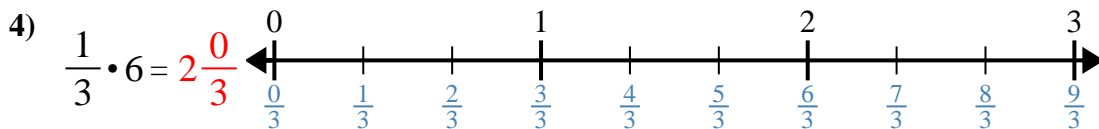
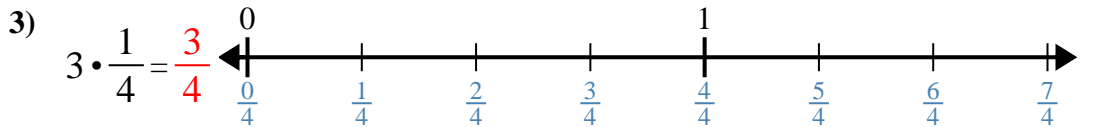
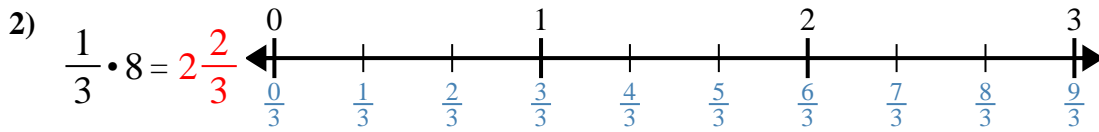
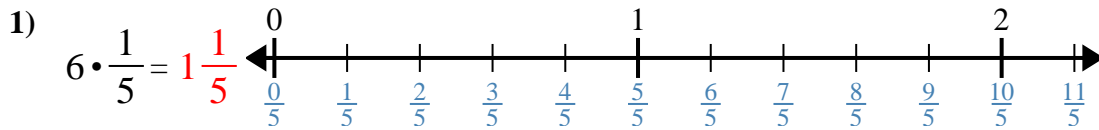
8. _____

9. _____

10. _____



Verwenden Sie den Zahlenstrahl, um zu lösen.

**Antworten**

1. $1 \frac{1}{5}$

2. $2 \frac{2}{3}$

3. $\frac{3}{4}$

4. $2 \frac{0}{3}$

5. $1 \frac{0}{8}$

6. $\frac{6}{10}$

7. $\frac{4}{6}$

8. $3 \frac{1}{3}$

9. $3 \frac{1}{2}$

10. $\frac{7}{10}$



Verwenden Sie den Zahlenstrahl, um zu lösen.

$1\frac{1}{5}$

$1\frac{0}{8}$

$2\frac{2}{3}$

$\frac{7}{10}$

$\frac{6}{10}$

$\frac{4}{6}$

$3\frac{1}{3}$

$\frac{3}{4}$

$3\frac{1}{2}$

$2\frac{0}{3}$

1) $6 \cdot \frac{1}{5} =$

2) $\frac{1}{3} \cdot 8 =$

3) $3 \cdot \frac{1}{4} =$

4) $\frac{1}{3} \cdot 6 =$

5) $8 \cdot \frac{1}{8} =$

6) $\frac{1}{10} \cdot 6 =$

7) $\frac{1}{6} \cdot 4 =$

8) $10 \cdot \frac{1}{3} =$

9) $7 \cdot \frac{1}{2} =$

10) $7 \cdot \frac{1}{10} =$

Antworten

1. _____

2. _____

3. _____

4. _____

5. _____

6. _____

7. _____

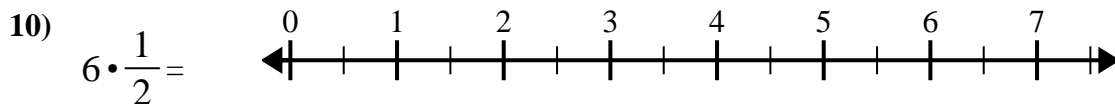
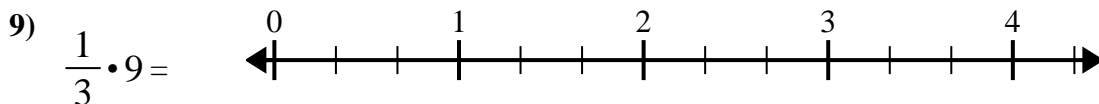
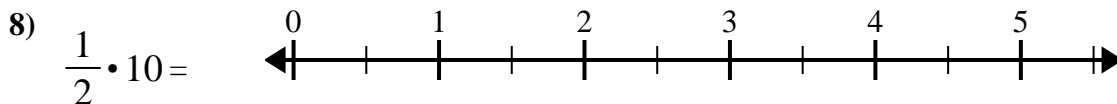
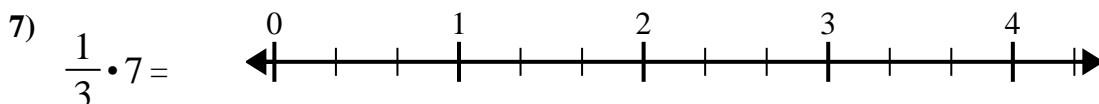
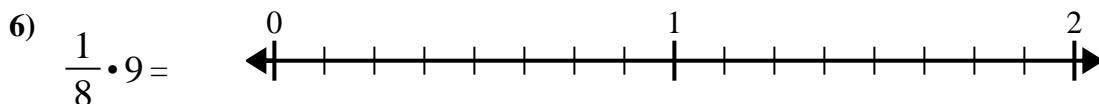
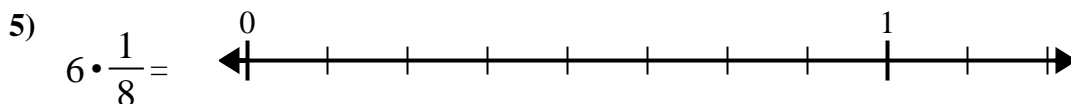
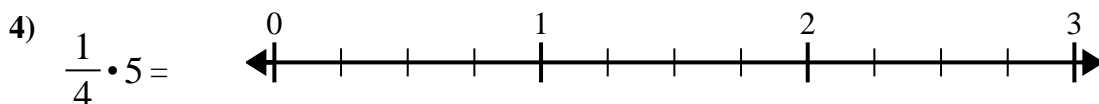
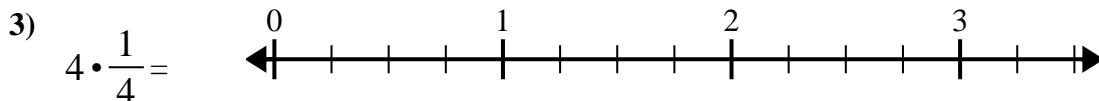
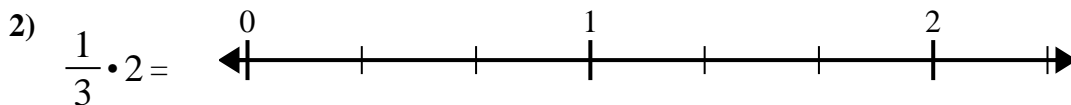
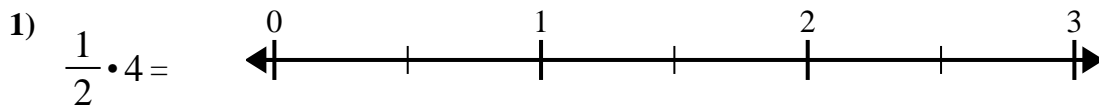
8. _____

9. _____

10. _____



Verwenden Sie den Zahlenstrahl, um zu lösen.

Antworten

1. _____

2. _____

3. _____

4. _____

5. _____

6. _____

7. _____

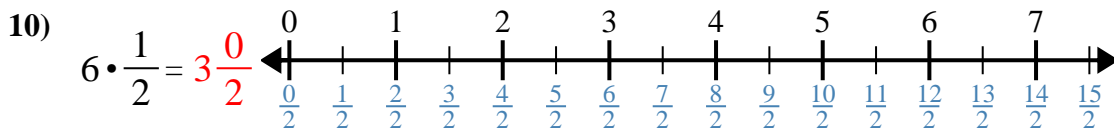
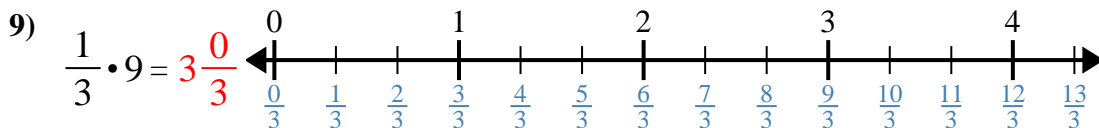
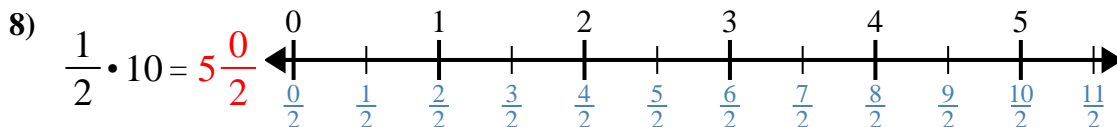
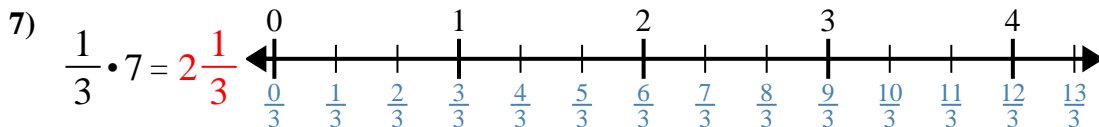
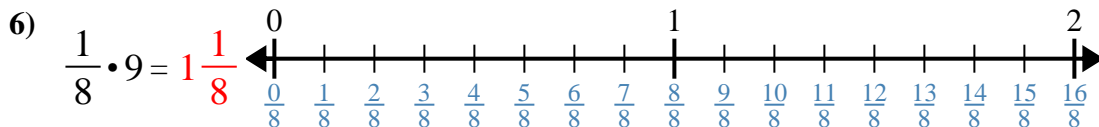
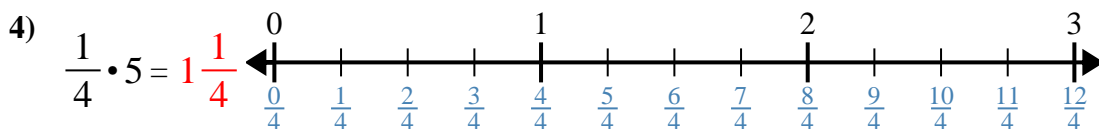
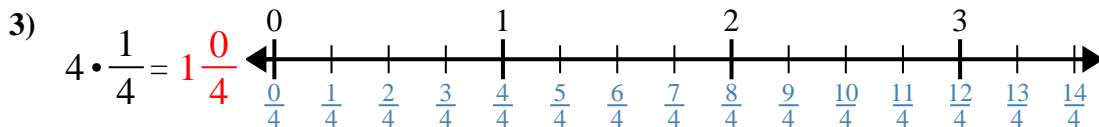
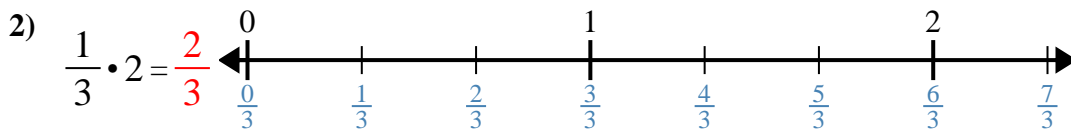
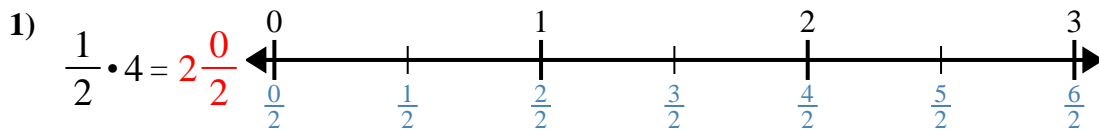
8. _____

9. _____

10. _____



Verwenden Sie den Zahlenstrahl, um zu lösen.

Antworten

1. $2\frac{0}{2}$

2. $\frac{2}{3}$

3. $1\frac{0}{4}$

4. $1\frac{1}{4}$

5. $\frac{6}{8}$

6. $1\frac{1}{8}$

7. $2\frac{1}{3}$

8. $5\frac{0}{2}$

9. $3\frac{0}{3}$

10. $3\frac{0}{2}$



Verwenden Sie den Zahlenstrahl, um zu lösen.

Antworten

$1\frac{1}{8}$

$\frac{2}{3}$

$5\frac{0}{2}$

$3\frac{0}{3}$

$2\frac{0}{2}$

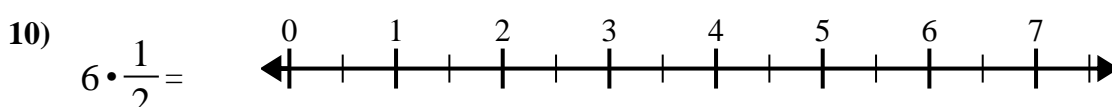
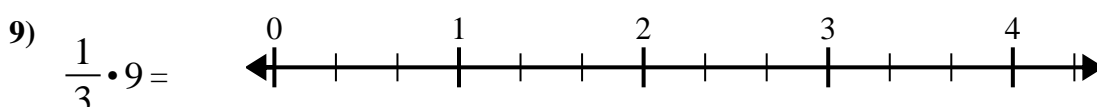
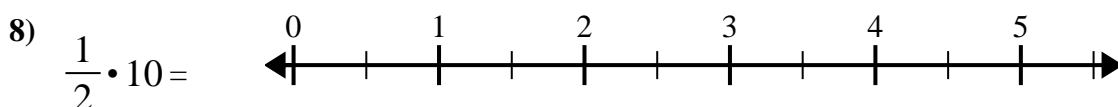
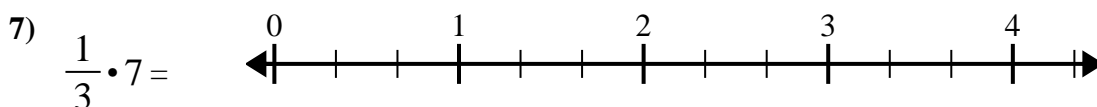
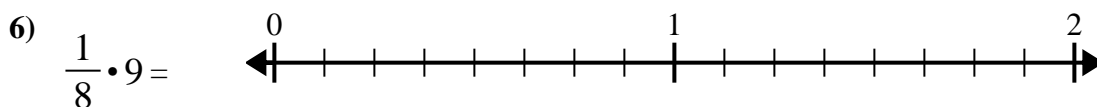
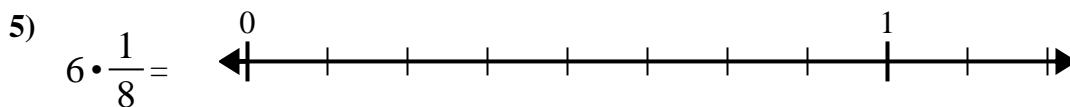
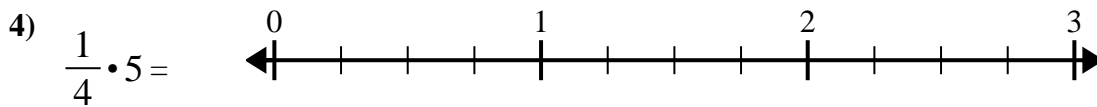
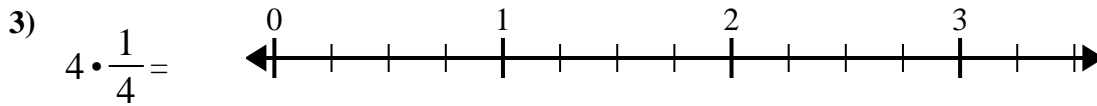
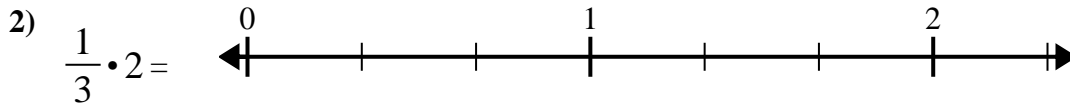
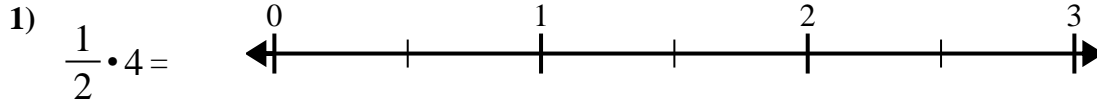
$2\frac{1}{3}$

$3\frac{0}{2}$

$\frac{6}{8}$

$1\frac{1}{4}$

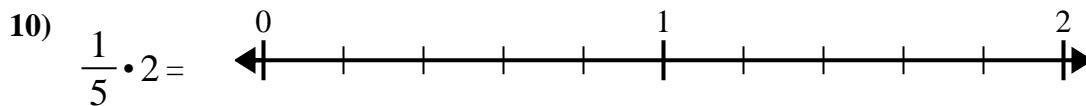
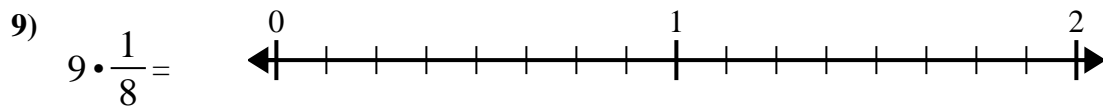
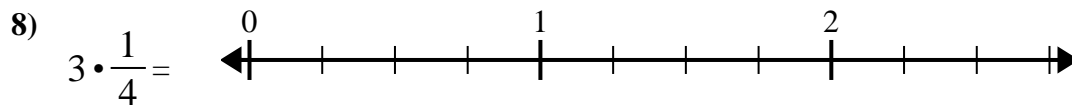
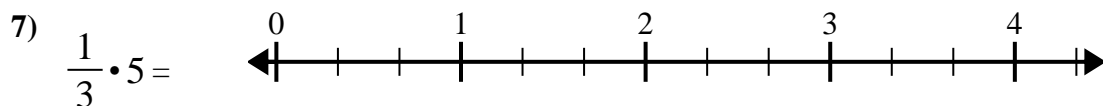
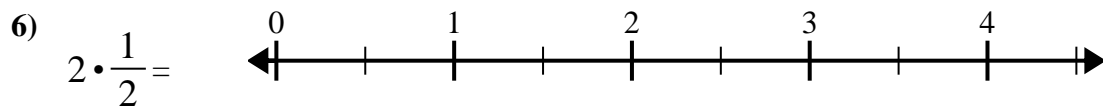
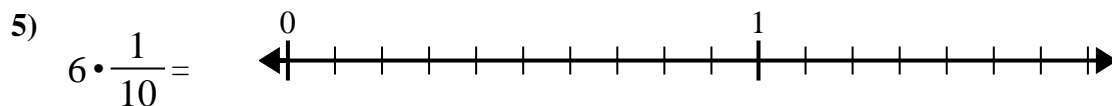
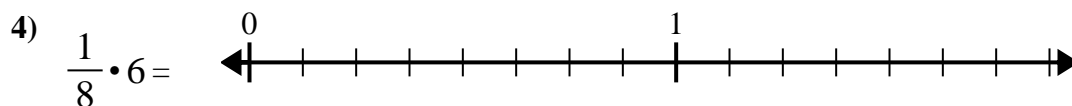
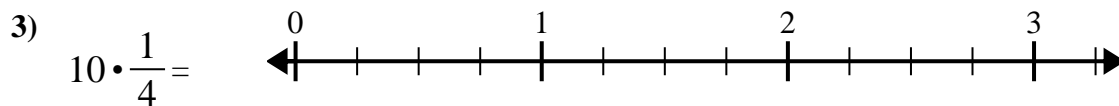
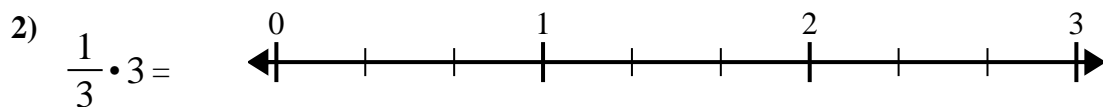
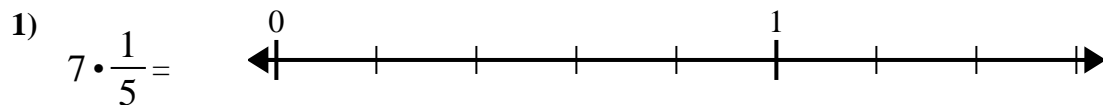
$1\frac{0}{4}$



1. _____
2. _____
3. _____
4. _____
5. _____
6. _____
7. _____
8. _____
9. _____
10. _____



Verwenden Sie den Zahlenstrahl, um zu lösen.

**Antworten**

1. _____

2. _____

3. _____

4. _____

5. _____

6. _____

7. _____

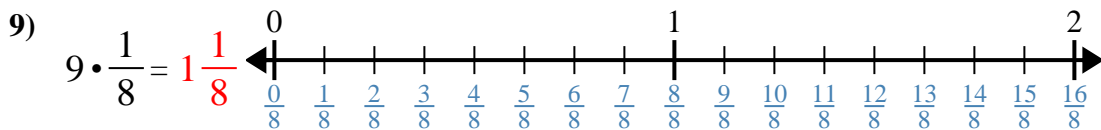
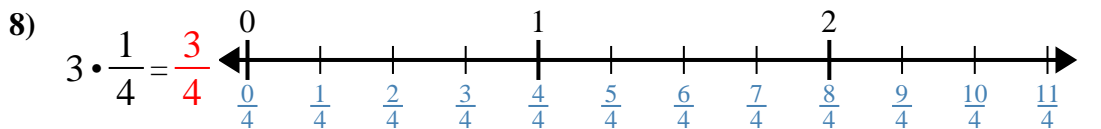
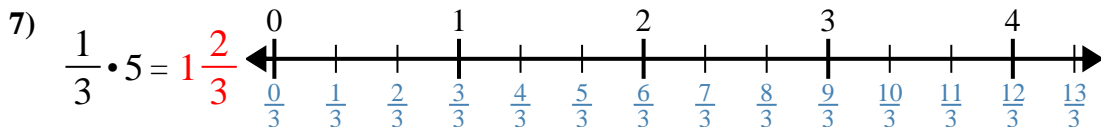
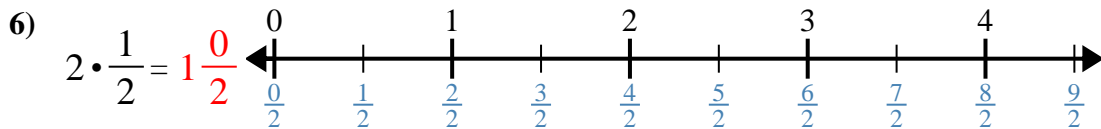
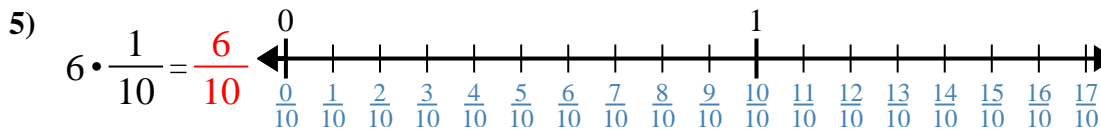
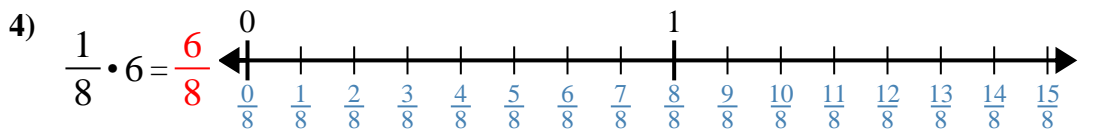
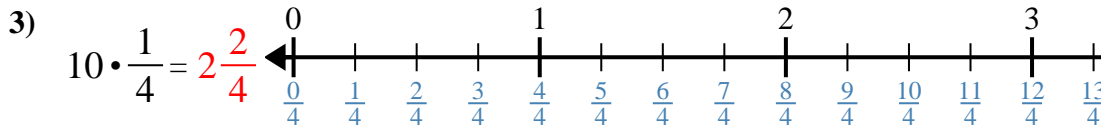
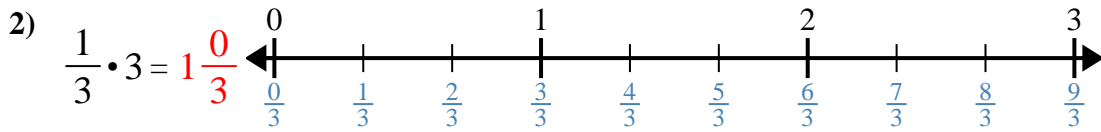
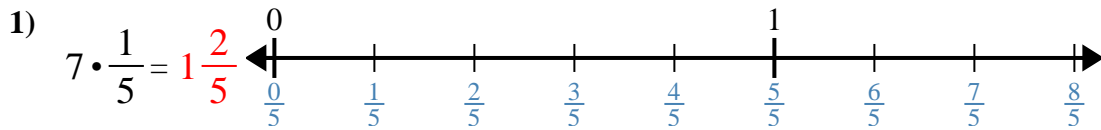
8. _____

9. _____

10. _____



Verwenden Sie den Zahlenstrahl, um zu lösen.

Antworten

1. $1 \frac{2}{5}$
2. $1 \frac{0}{3}$
3. $2 \frac{2}{4}$
4. $\frac{6}{8}$
5. $\frac{6}{10}$
6. $1 \frac{0}{2}$
7. $1 \frac{2}{3}$
8. $\frac{3}{4}$
9. $1 \frac{1}{8}$
10. $\frac{2}{5}$



Verwenden Sie den Zahlenstrahl, um zu lösen.

Antworten

$1\frac{0}{3}$

$1\frac{0}{2}$

$\frac{6}{10}$

$\frac{2}{5}$

$1\frac{2}{5}$

$\frac{6}{8}$

$\frac{3}{4}$

$1\frac{1}{8}$

$1\frac{2}{3}$

$2\frac{2}{4}$

1) $7 \cdot \frac{1}{5} =$

2) $\frac{1}{3} \cdot 3 =$

3) $10 \cdot \frac{1}{4} =$

4) $\frac{1}{8} \cdot 6 =$

5) $6 \cdot \frac{1}{10} =$

6) $2 \cdot \frac{1}{2} =$

7) $\frac{1}{3} \cdot 5 =$

8) $3 \cdot \frac{1}{4} =$

9) $9 \cdot \frac{1}{8} =$

10) $\frac{1}{5} \cdot 2 =$

1. _____

2. _____

3. _____

4. _____

5. _____

6. _____

7. _____

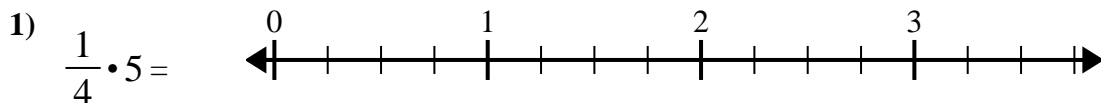
8. _____

9. _____

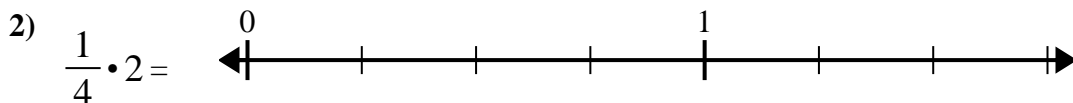
10. _____



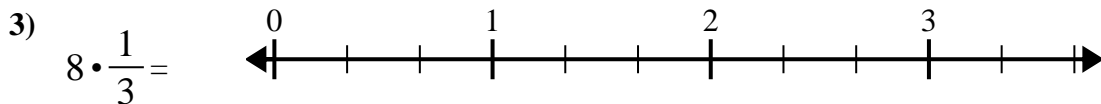
Verwenden Sie den Zahlenstrahl, um zu lösen.

Antworten

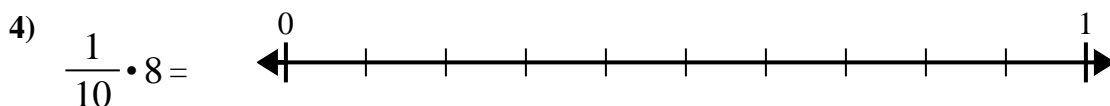
1. _____



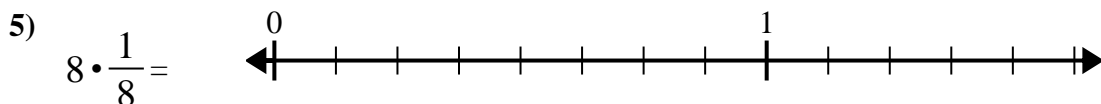
2. _____



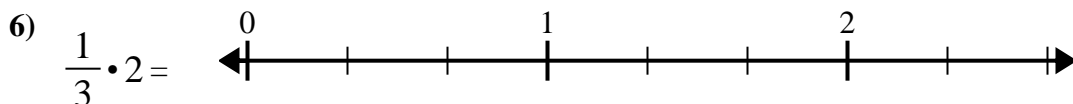
3. _____



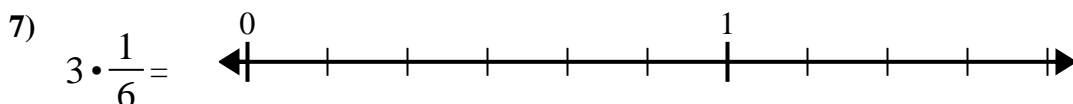
4. _____



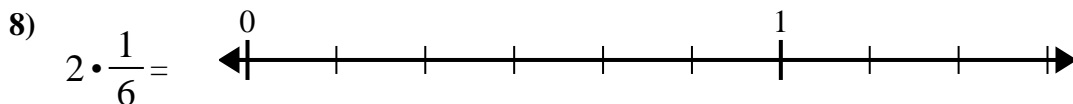
5. _____



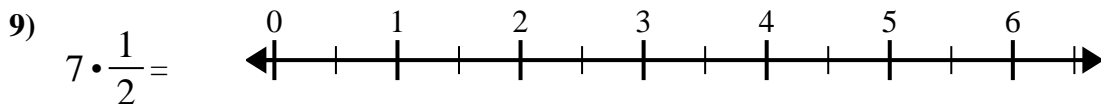
6. _____



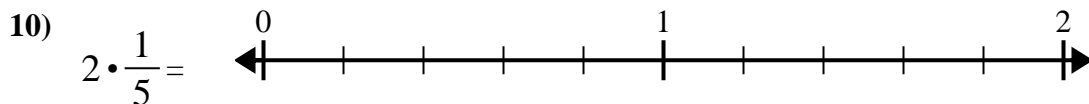
7. _____



8. _____



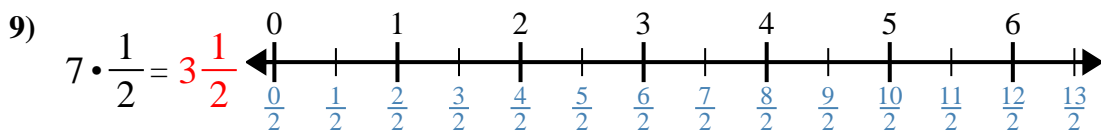
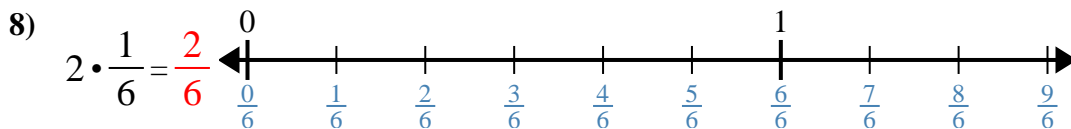
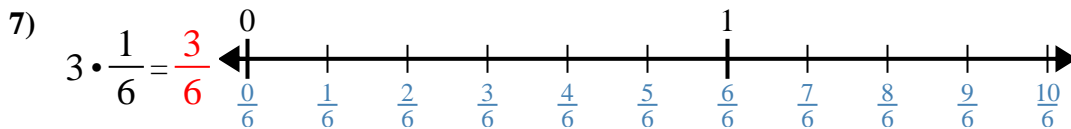
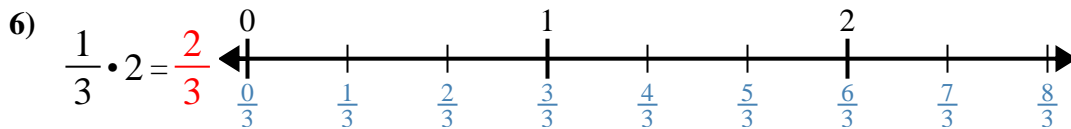
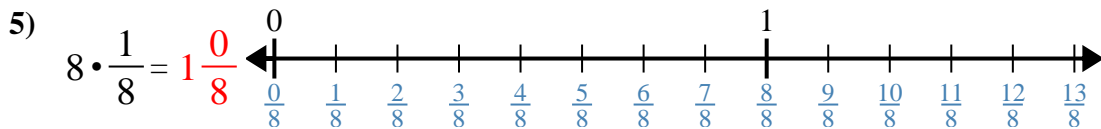
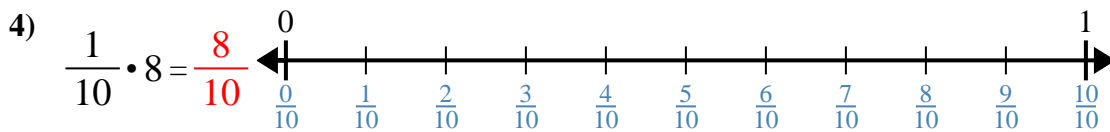
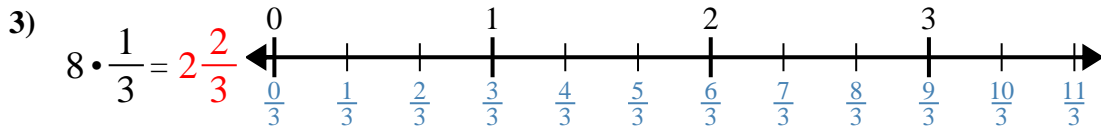
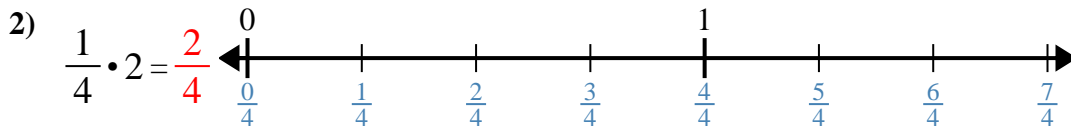
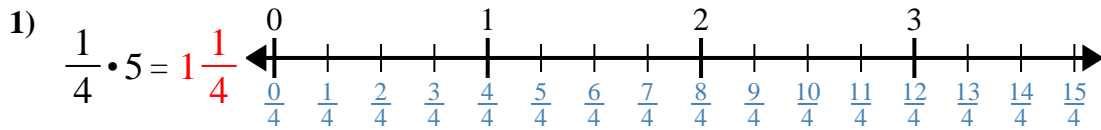
9. _____



10. _____



Verwenden Sie den Zahlenstrahl, um zu lösen.

**Antworten**

1. $1\frac{1}{4}$

2. $\frac{2}{4}$

3. $2\frac{2}{3}$

4. $\frac{8}{10}$

5. $1\frac{0}{8}$

6. $\frac{2}{3}$

7. $\frac{3}{6}$

8. $\frac{2}{6}$

9. $3\frac{1}{2}$

10. $\frac{2}{5}$



Verwenden Sie den Zahlenstrahl, um zu lösen.

Antworten

$\frac{2}{3}$

$2\frac{2}{3}$

$3\frac{1}{2}$

$\frac{2}{6}$

$\frac{2}{4}$

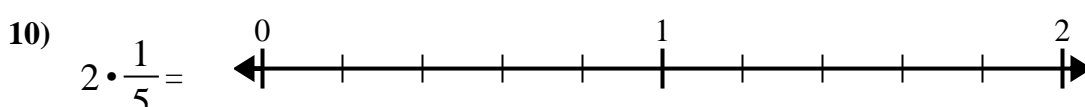
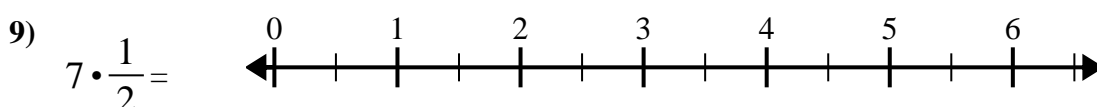
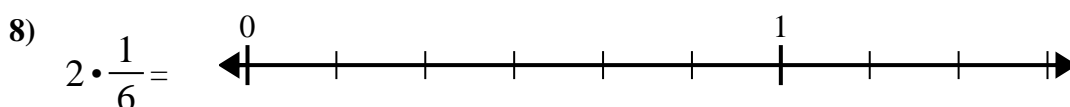
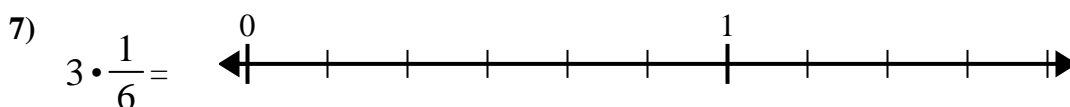
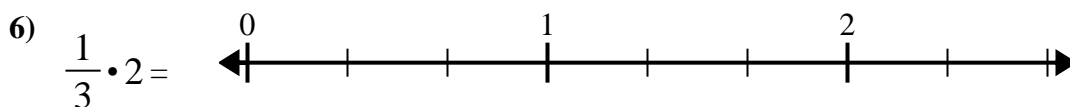
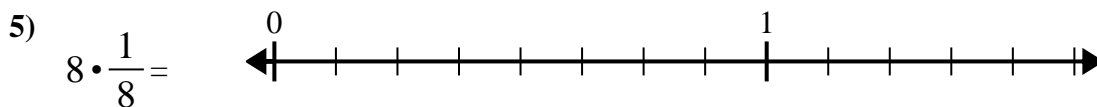
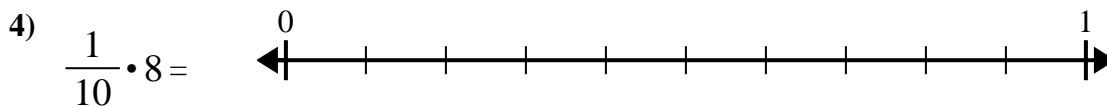
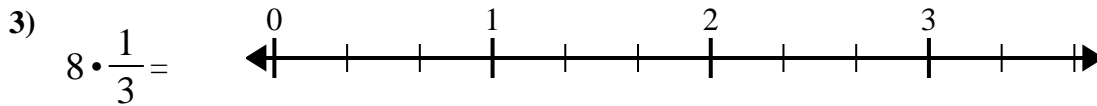

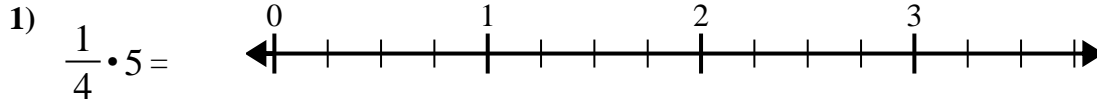
$\frac{2}{5}$

$\frac{8}{10}$

$1\frac{0}{8}$

$\frac{3}{6}$

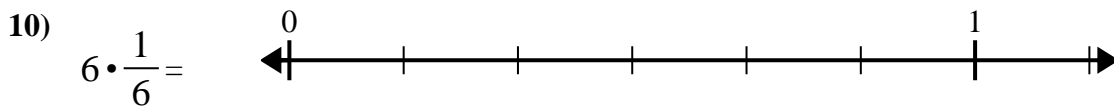
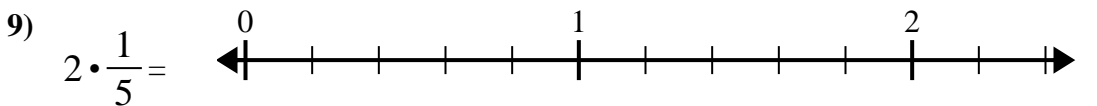
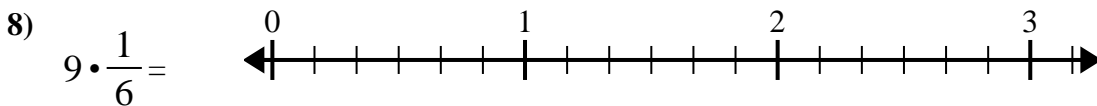
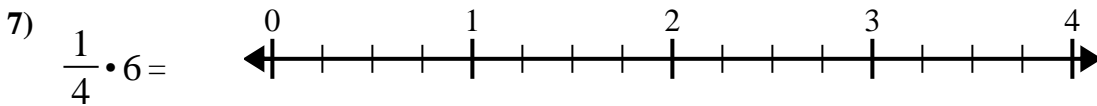
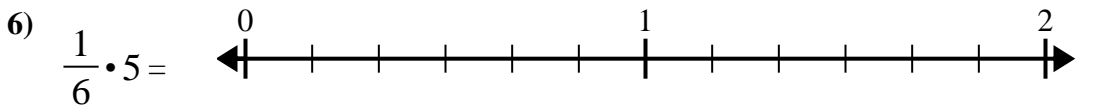
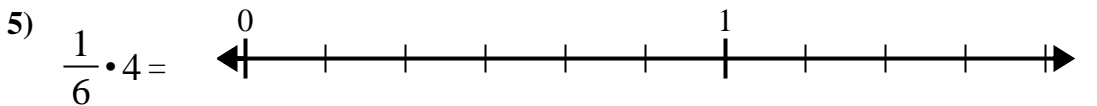
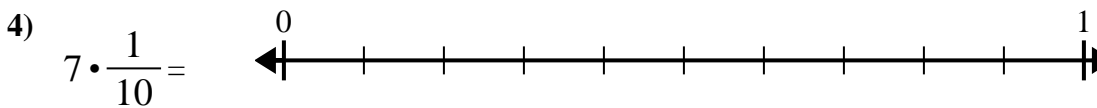
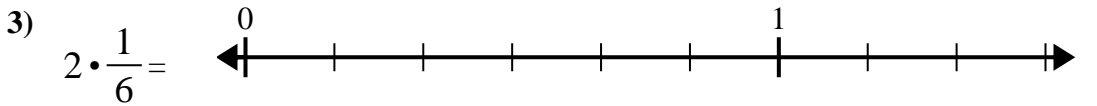
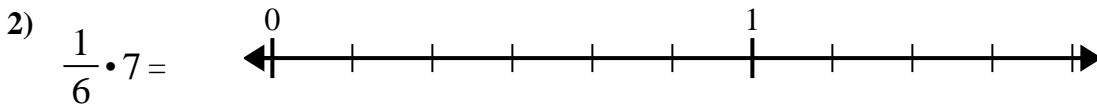
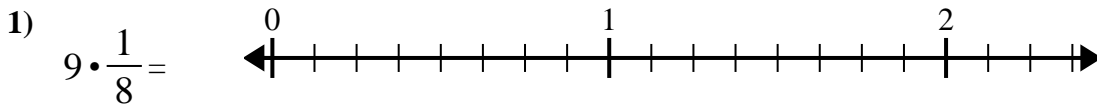
$1\frac{1}{4}$



1. _____
2. _____
3. _____
4. _____
5. _____
6. _____
7. _____
8. _____
9. _____
10. _____



Verwenden Sie den Zahlenstrahl, um zu lösen.

Antworten

1. _____

2. _____

3. _____

4. _____

5. _____

6. _____

7. _____

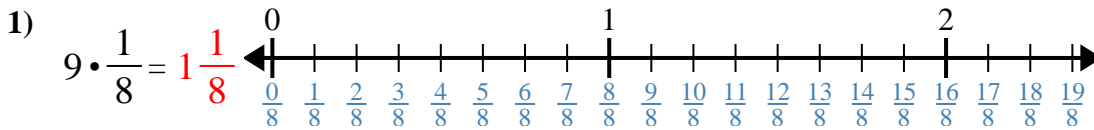
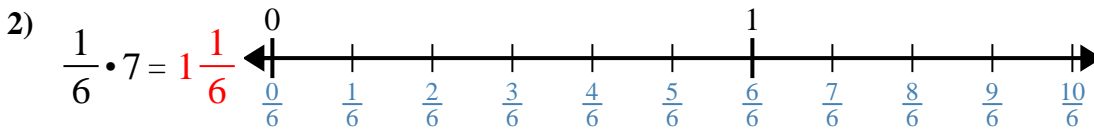
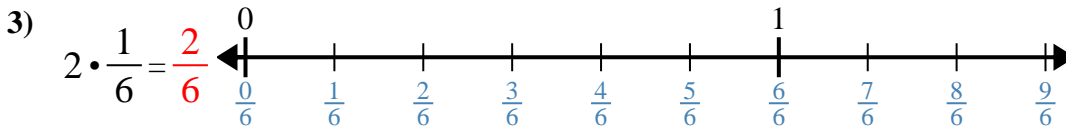
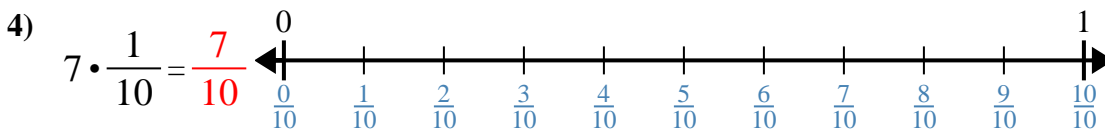
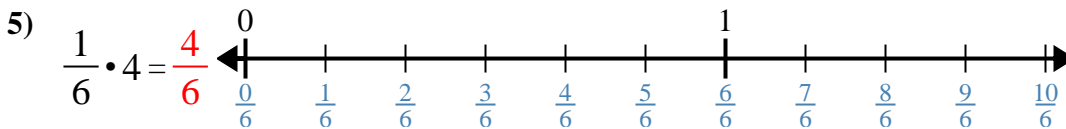
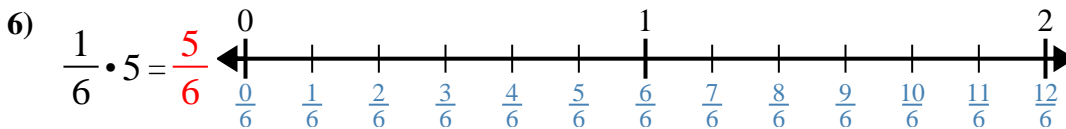
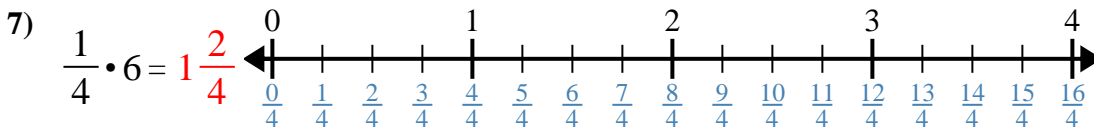
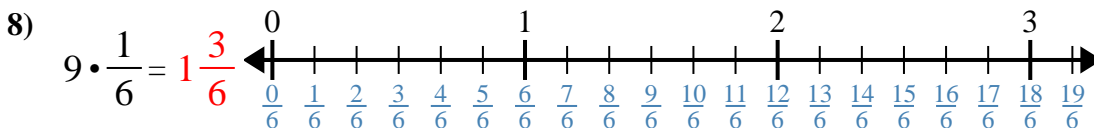
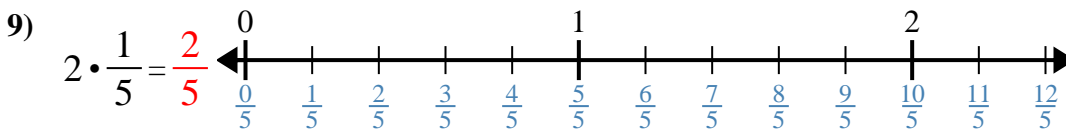
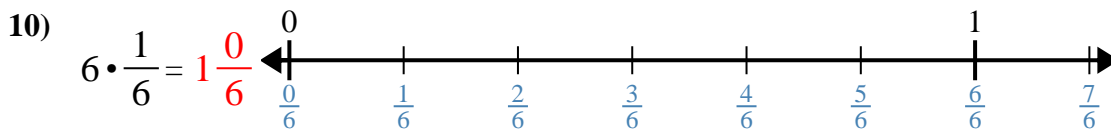
8. _____

9. _____

10. _____



Verwenden Sie den Zahlenstrahl, um zu lösen.

Antworten1. 1 $\frac{1}{8}$ 2. 1 $\frac{1}{6}$ 3. $\frac{2}{6}$ 4. $\frac{7}{10}$ 5. $\frac{4}{6}$ 6. $\frac{5}{6}$ 7. 1 $\frac{2}{4}$ 8. 1 $\frac{3}{6}$ 9. $\frac{2}{5}$ 10. 1 $\frac{0}{6}$



Verwenden Sie den Zahlenstrahl, um zu lösen.

$1\frac{2}{4}$

$1\frac{3}{6}$

$\frac{4}{6}$

$1\frac{1}{8}$

$\frac{7}{10}$

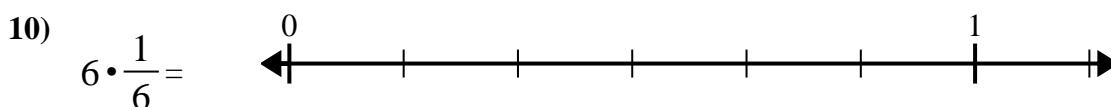
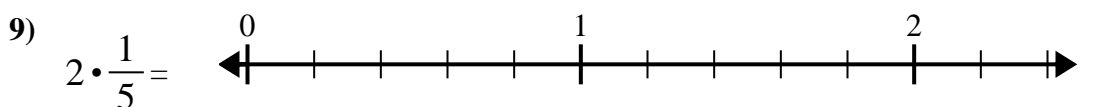
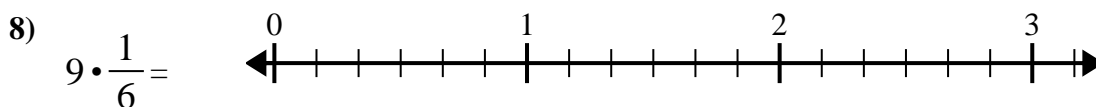
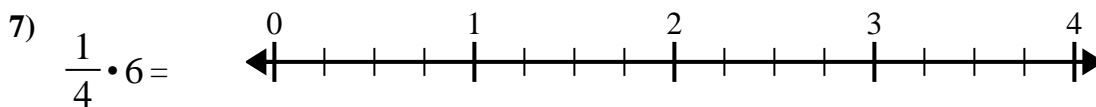
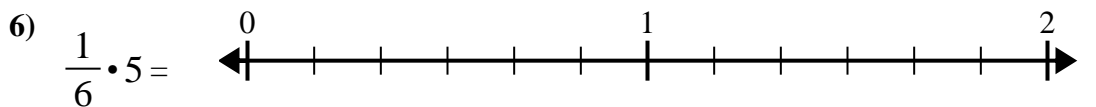
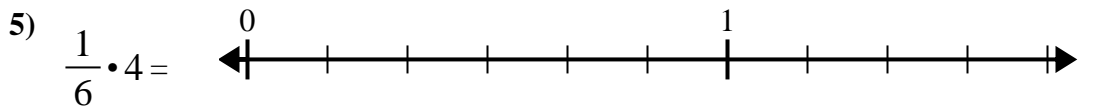
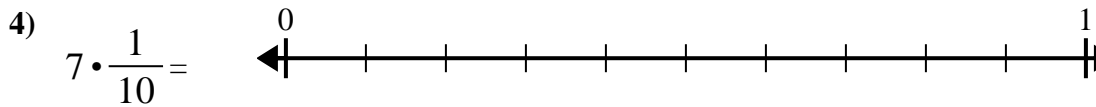
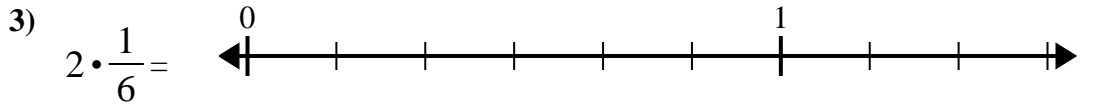
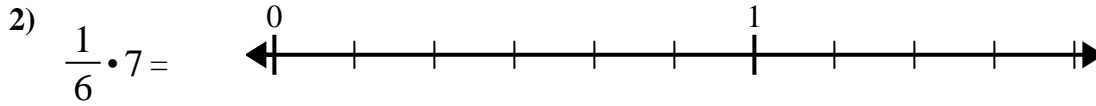
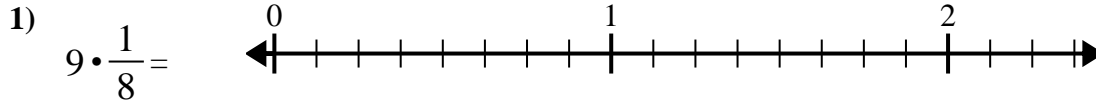
$\frac{2}{5}$

$\frac{5}{6}$

$1\frac{1}{6}$

$1\frac{0}{6}$

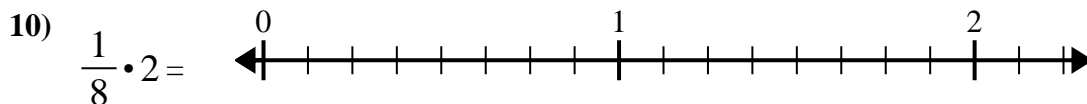
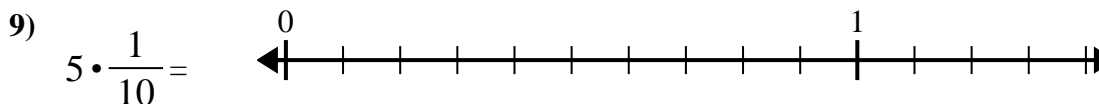
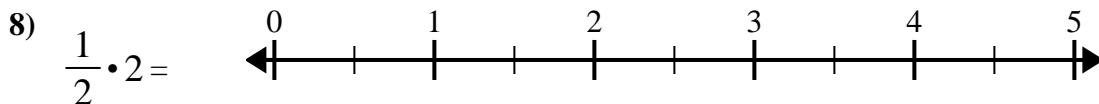
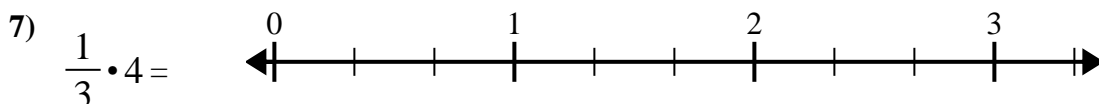
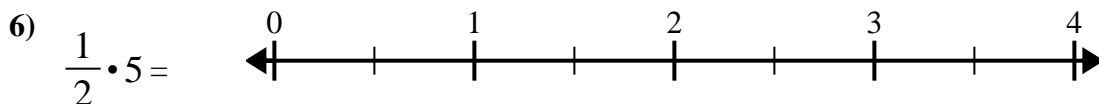
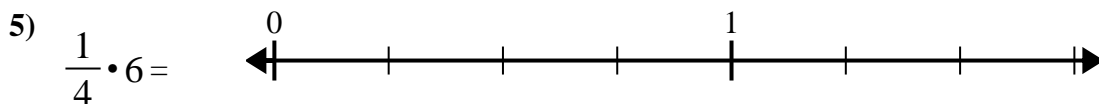
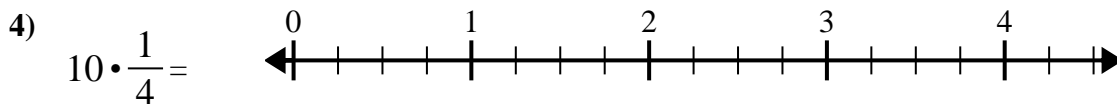
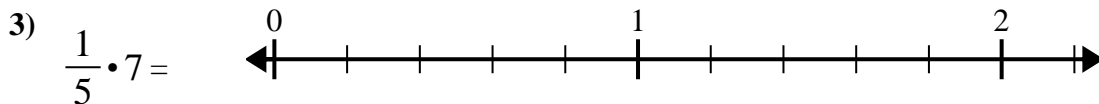
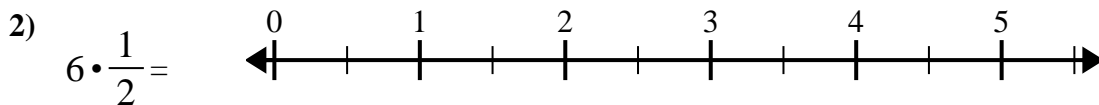
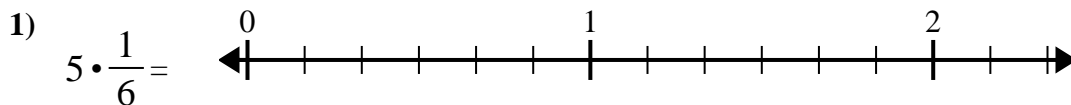
$\frac{2}{6}$

Antworten

1. _____
2. _____
3. _____
4. _____
5. _____
6. _____
7. _____
8. _____
9. _____
10. _____



Verwenden Sie den Zahlenstrahl, um zu lösen.

Antworten

1. _____

2. _____

3. _____

4. _____

5. _____

6. _____

7. _____

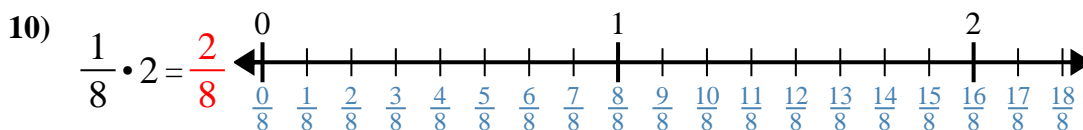
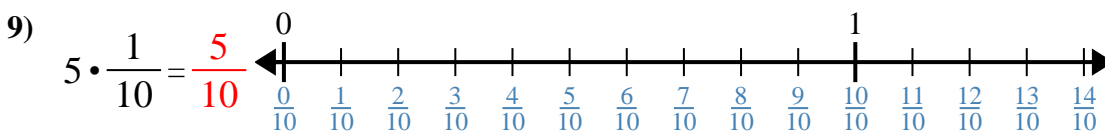
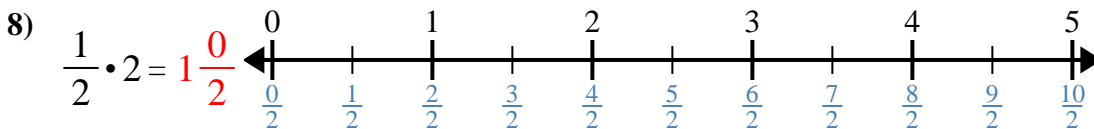
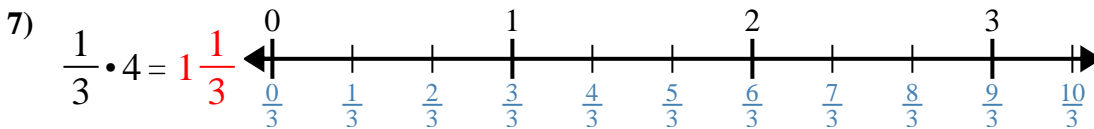
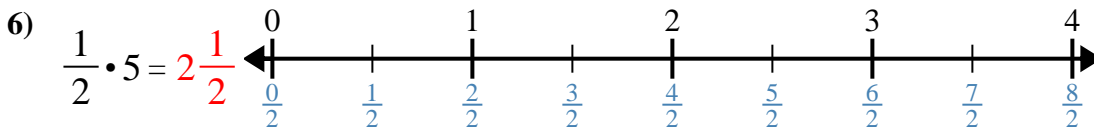
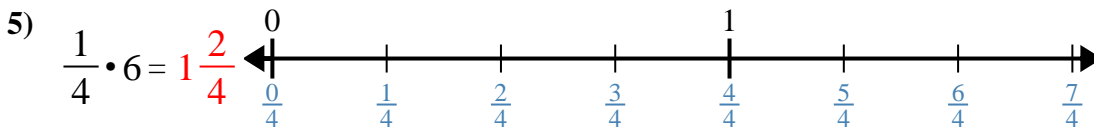
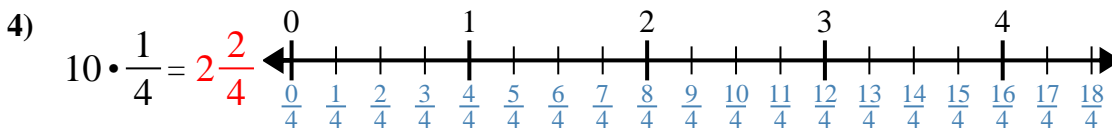
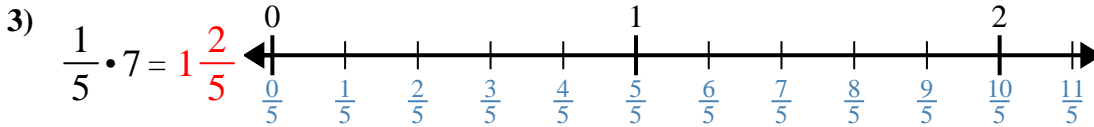
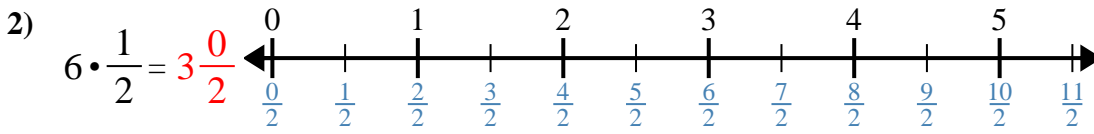
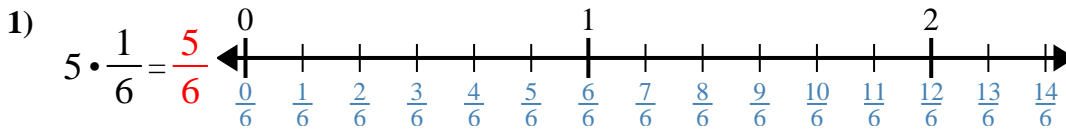
8. _____

9. _____

10. _____



Verwenden Sie den Zahlenstrahl, um zu lösen.

Antworten

1. $\frac{5}{6}$

2. $3 \frac{0}{2}$

3. $1 \frac{2}{5}$

4. $2 \frac{2}{4}$

5. $1 \frac{2}{4}$

6. $2 \frac{1}{2}$

7. $1 \frac{1}{3}$

8. $1 \frac{0}{2}$

9. $\frac{5}{10}$

10. $\frac{2}{8}$



Verwenden Sie den Zahlenstrahl, um zu lösen.

$1\frac{1}{3}$

$\frac{5}{10}$

$1\frac{2}{5}$

$1\frac{2}{4}$

$\frac{2}{8}$

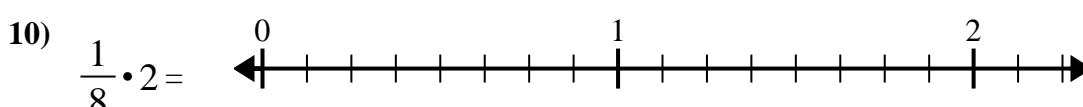
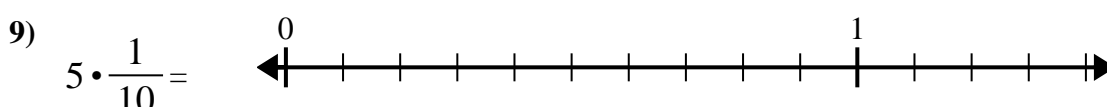
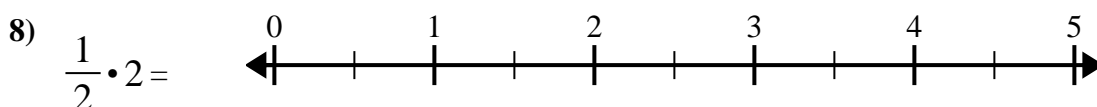
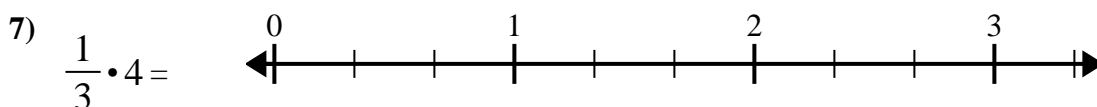
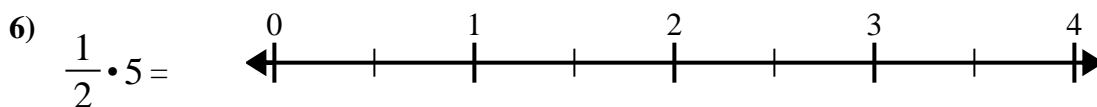
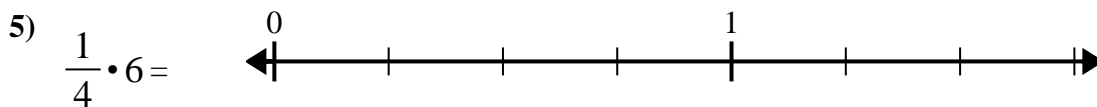
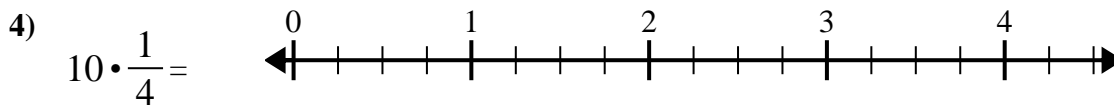
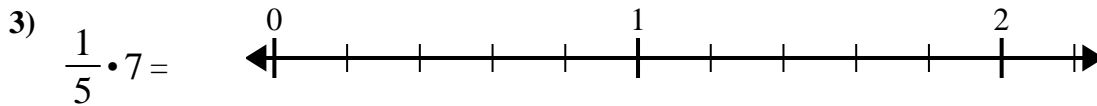
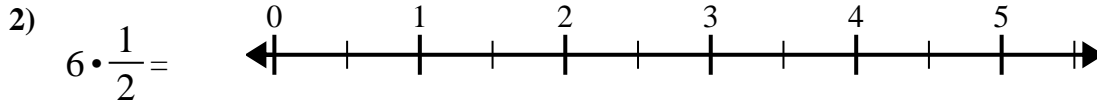
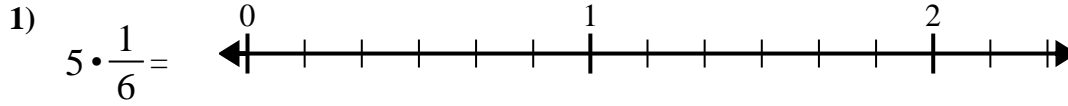
$\frac{5}{6}$

$1\frac{0}{2}$

$3\frac{0}{2}$

$2\frac{2}{4}$

$2\frac{1}{2}$

**Antworten**

1. _____

2. _____

3. _____

4. _____

5. _____

6. _____

7. _____

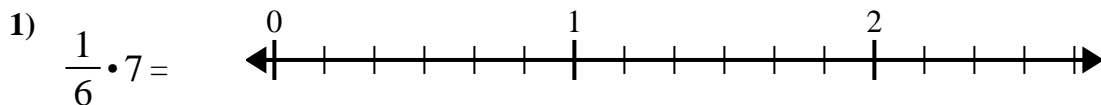
8. _____

9. _____

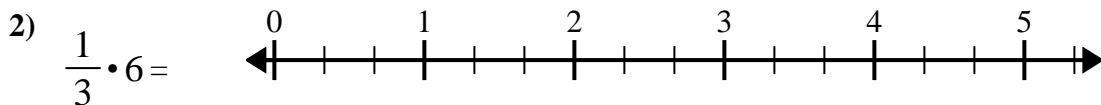
10. _____



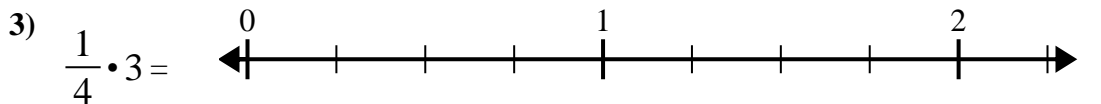
Verwenden Sie den Zahlenstrahl, um zu lösen.

Antworten

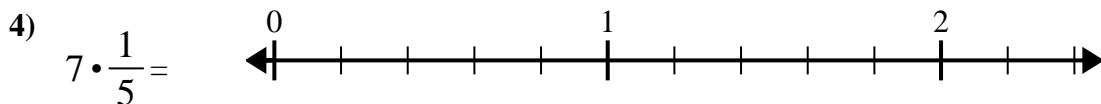
1. _____



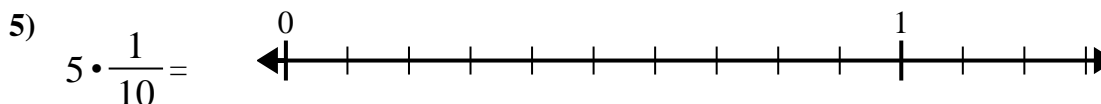
2. _____



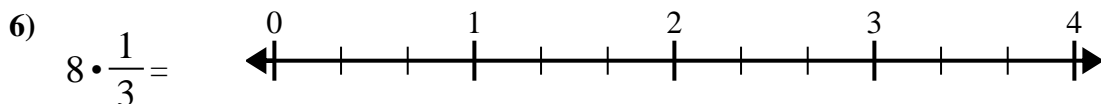
3. _____



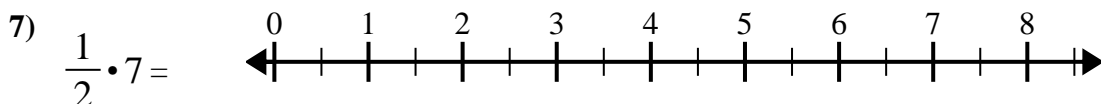
4. _____



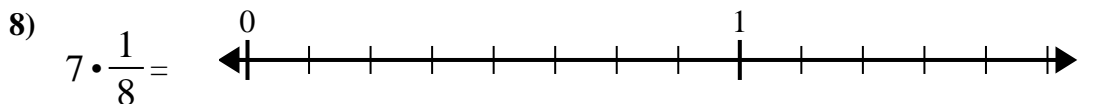
5. _____



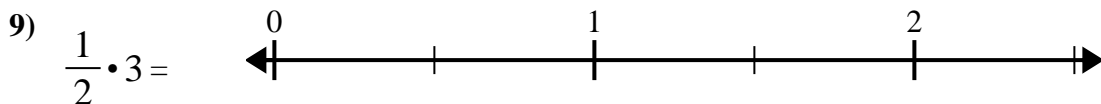
6. _____



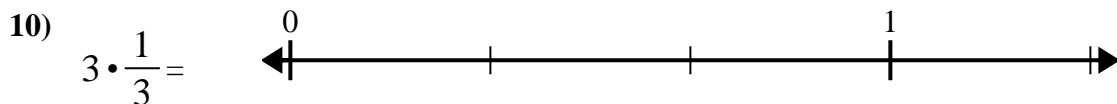
7. _____



8. _____



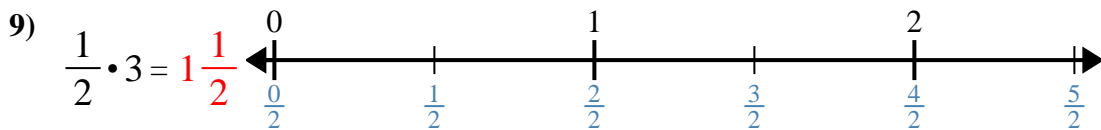
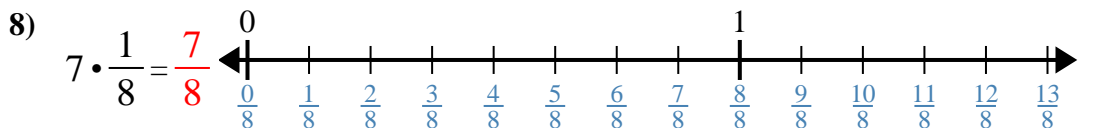
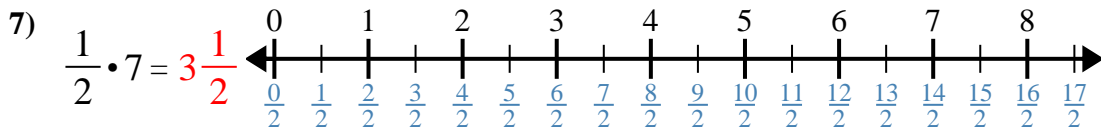
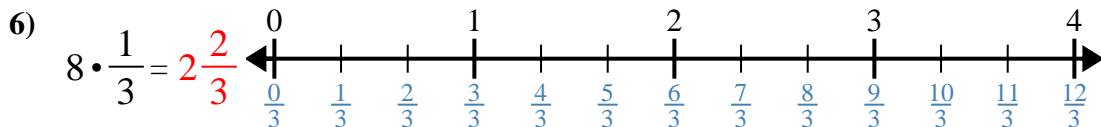
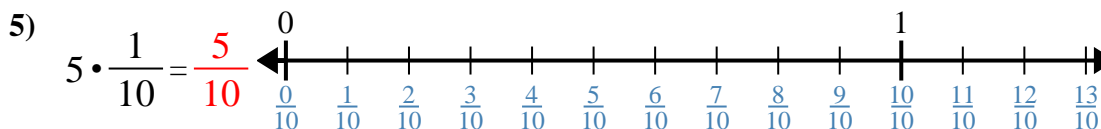
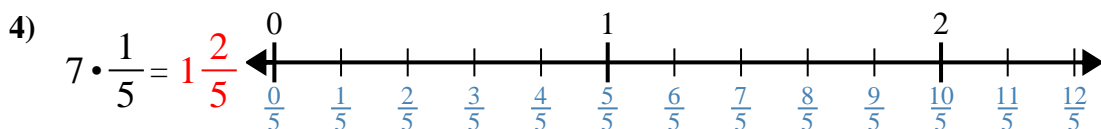
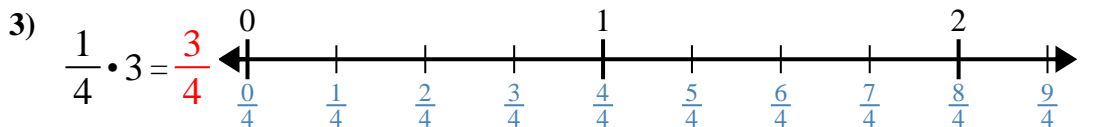
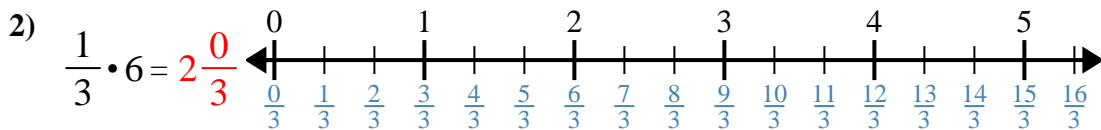
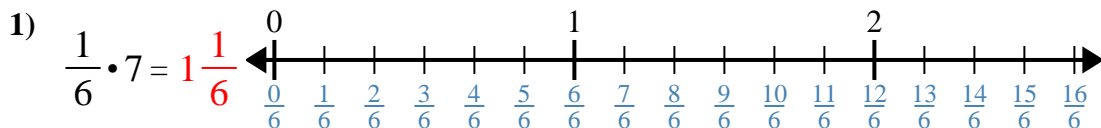
9. _____



10. _____



Verwenden Sie den Zahlenstrahl, um zu lösen.

Antworten1. $1\frac{1}{6}$ 2. $2\frac{0}{3}$ 3. $\frac{3}{4}$ 4. $1\frac{2}{5}$ 5. $\frac{5}{10}$ 6. $2\frac{2}{3}$ 7. $3\frac{1}{2}$ 8. $\frac{7}{8}$ 9. $1\frac{1}{2}$ 10. $1\frac{0}{3}$



Verwenden Sie den Zahlenstrahl, um zu lösen.

Antworten

$\frac{5}{10}$

$1\frac{1}{6}$

$1\frac{2}{5}$

$2\frac{0}{3}$

$1\frac{0}{3}$


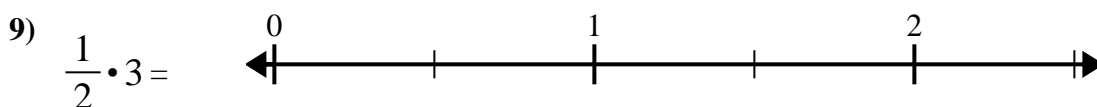
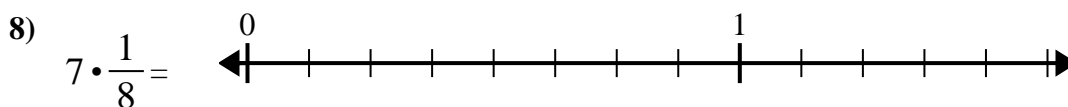
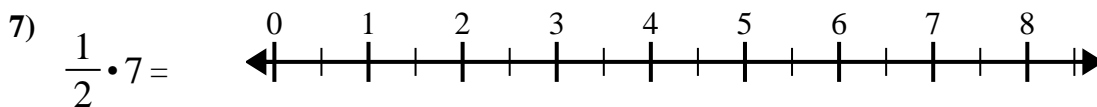
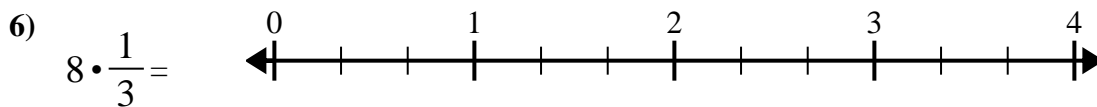
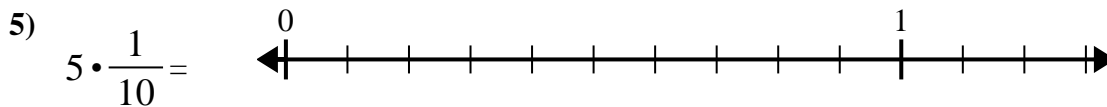
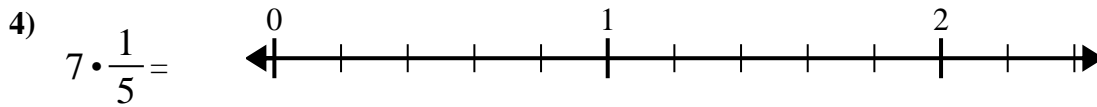
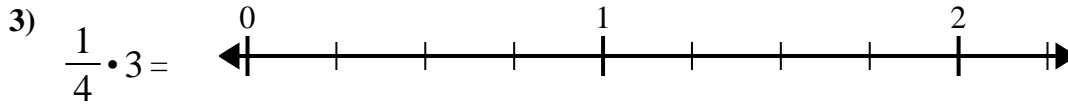
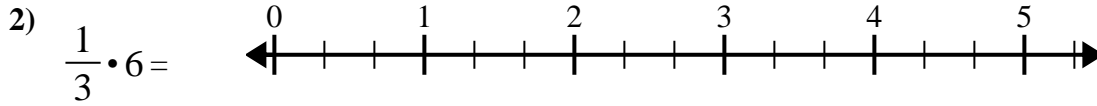
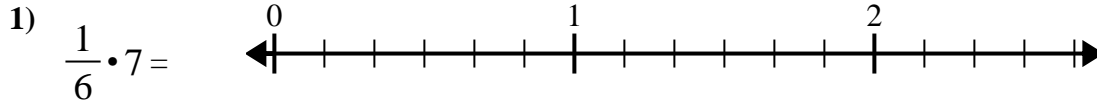
$1\frac{1}{2}$

$3\frac{1}{2}$

$\frac{3}{4}$

$\frac{7}{8}$

$2\frac{2}{3}$



1. _____

2. _____

3. _____

4. _____

5. _____

6. _____

7. _____

8. _____

9. _____

10. _____