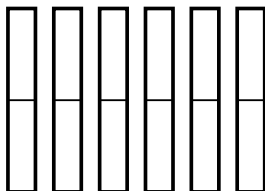




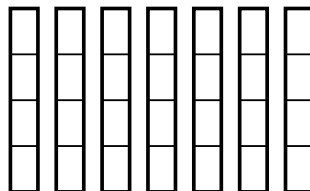
Verwenden Sie die visuellen Modelle, um zu lösen.

Antworten

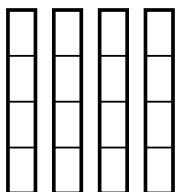
1) $\frac{1}{2} \cdot 6 =$



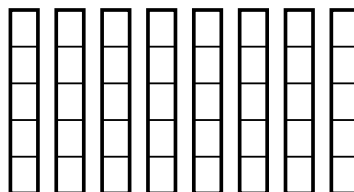
2) $\frac{2}{4} \cdot 7 =$



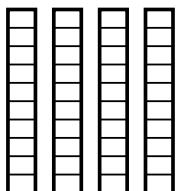
3) $\frac{2}{4} \cdot 4 =$



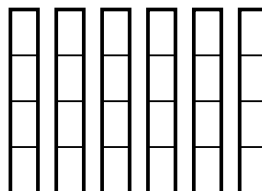
4) $\frac{1}{5} \cdot 8 =$



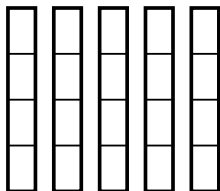
5) $\frac{5}{10} \cdot 4 =$



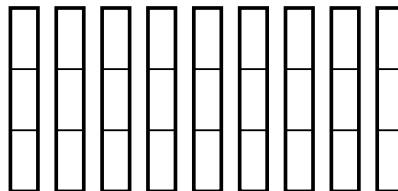
6) $\frac{1}{4} \cdot 6 =$



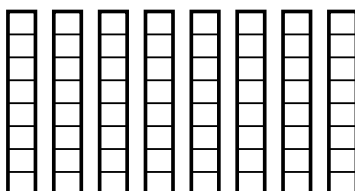
7) $\frac{1}{4} \cdot 5 =$



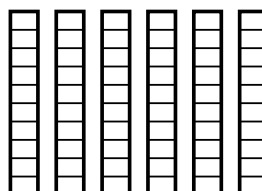
8) $\frac{2}{3} \cdot 9 =$



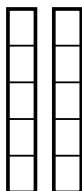
9) $\frac{1}{8} \cdot 8 =$



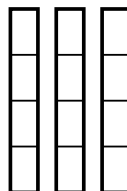
10) $\frac{4}{10} \cdot 6 =$



11) $\frac{4}{5} \cdot 2 =$



12) $\frac{1}{4} \cdot 3 =$



1. _____

2. _____

3. _____

4. _____

5. _____

6. _____

7. _____

8. _____

9. _____

10. _____


11. _____

12. _____

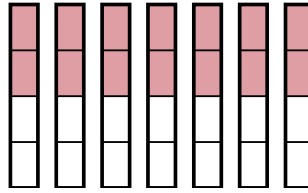


Verwenden Sie die visuellen Modelle, um zu lösen.

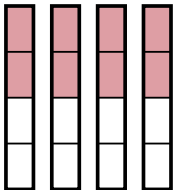
1) $\frac{1}{2} \cdot 6 =$



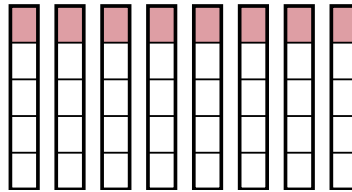
2) $\frac{2}{4} \cdot 7 =$



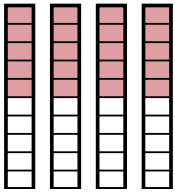
3) $\frac{2}{4} \cdot 4 =$



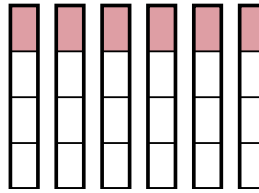
4) $\frac{1}{5} \cdot 8 =$



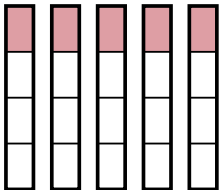
5) $\frac{5}{10} \cdot 4 =$



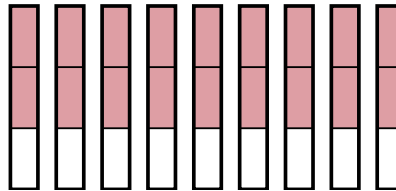
6) $\frac{1}{4} \cdot 6 =$



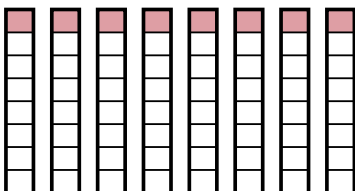
7) $\frac{1}{4} \cdot 5 =$



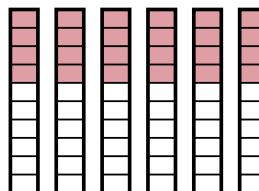
8) $\frac{2}{3} \cdot 9 =$



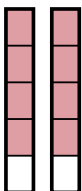
9) $\frac{1}{8} \cdot 8 =$



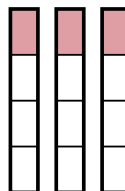
10) $\frac{4}{10} \cdot 6 =$



11) $\frac{4}{5} \cdot 2 =$



12) $\frac{1}{4} \cdot 3 =$

**Antworten**

1. $\frac{6}{2}$

2. $\frac{14}{4}$

3. $\frac{8}{4}$

4. $\frac{8}{5}$

5. $\frac{20}{10}$

6. $\frac{6}{4}$

7. $\frac{5}{4}$

8. $\frac{18}{3}$

9. $\frac{8}{8}$

10. $\frac{24}{10}$

11. $\frac{8}{5}$

12. $\frac{3}{4}$