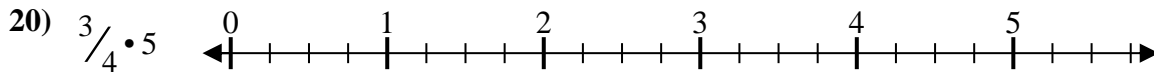
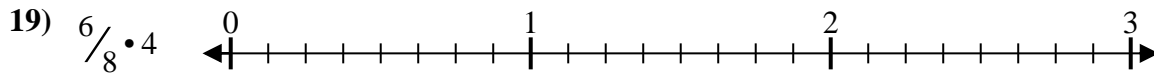
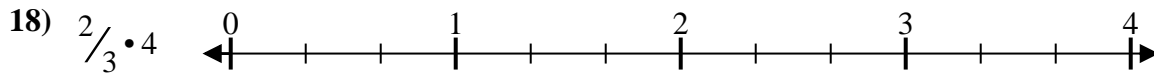

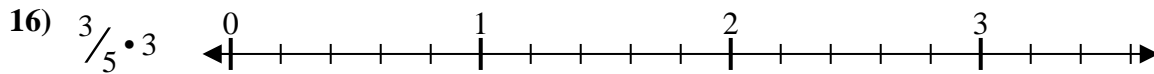
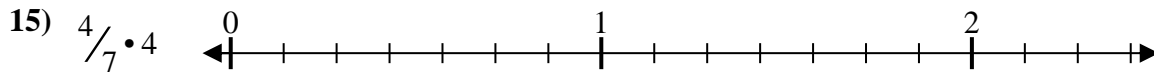
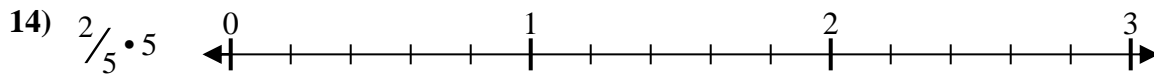
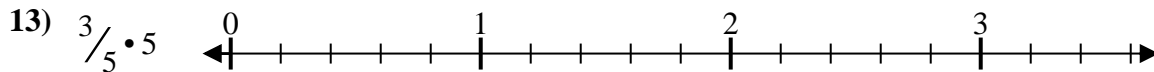
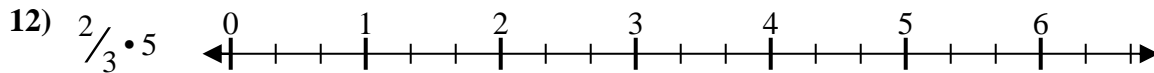
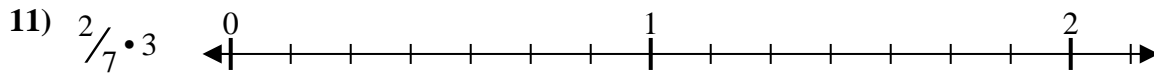
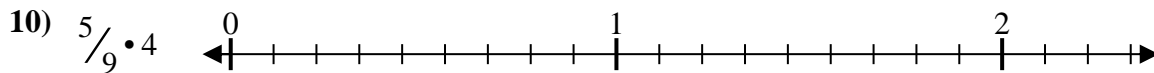
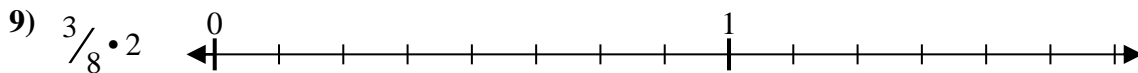
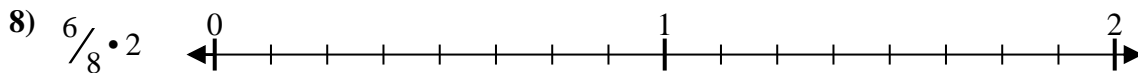
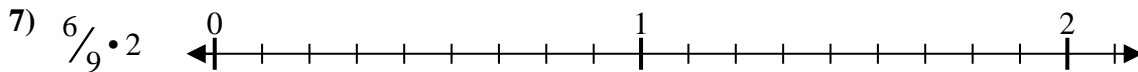
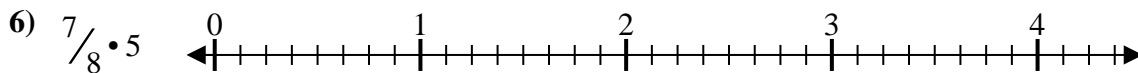

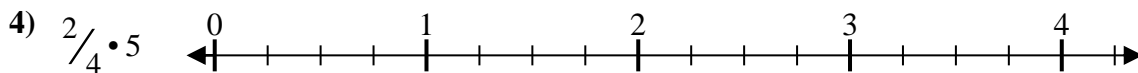
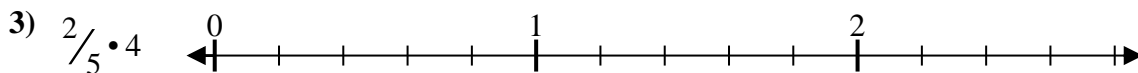
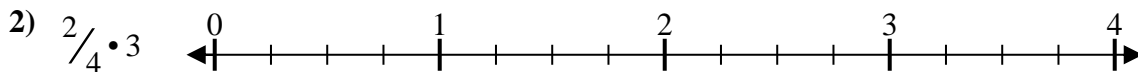
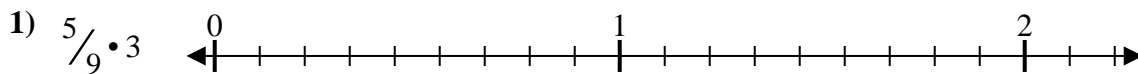




Löse jede Aufgabe.

Antworten

1. _____

2. _____

3. _____

4. _____

5. _____

6. _____

7. _____

8. _____

9. _____

10. _____

11. _____

12. _____

13. _____

14. _____

15. _____

16. _____

17. _____

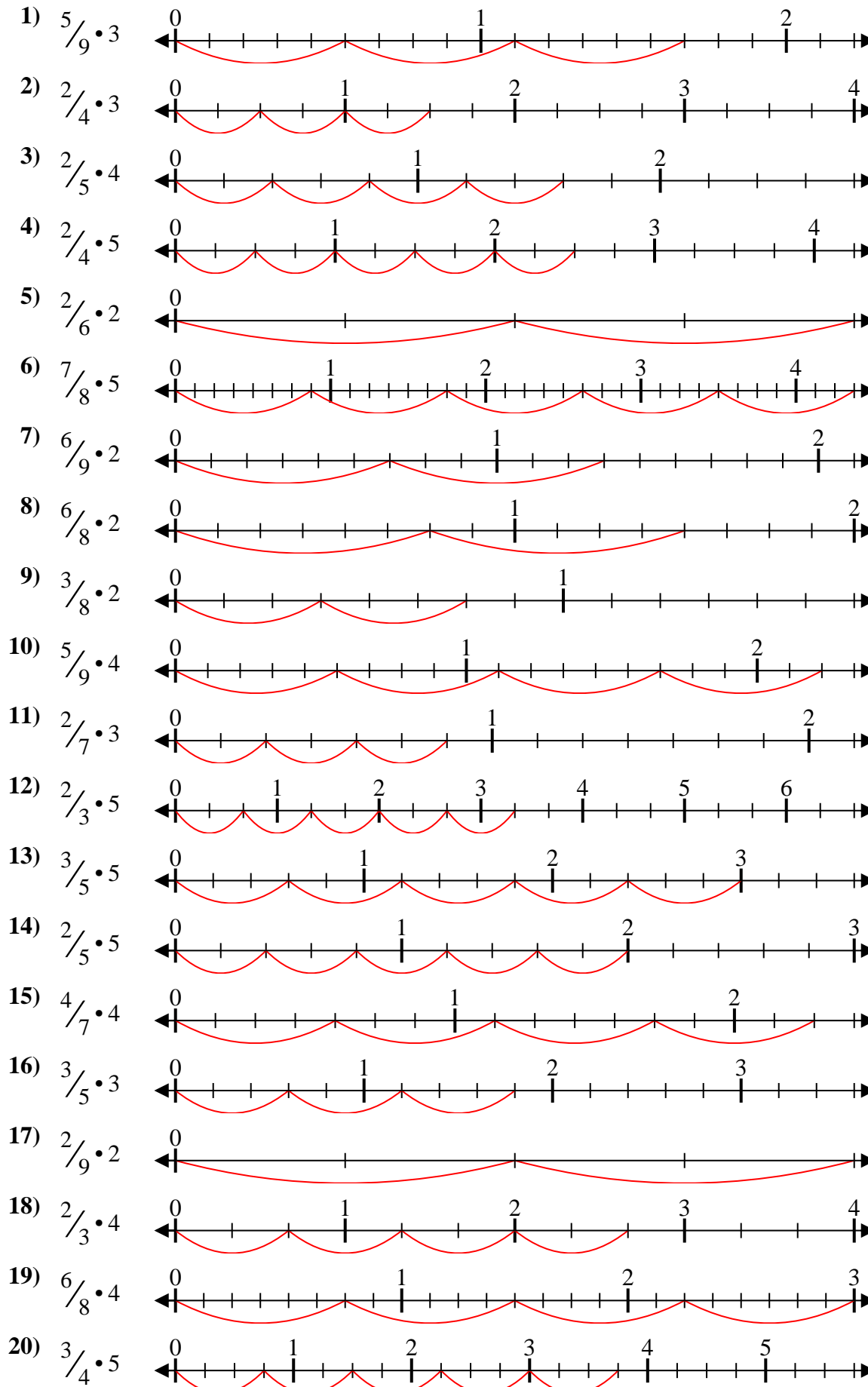
18. _____

19. _____

20. _____



Löse jede Aufgabe.

**Antworten**

1. $\frac{15}{9} = 1\frac{2}{3}$
2. $\frac{6}{4} = 1\frac{1}{2}$
3. $\frac{8}{5} = 1\frac{3}{5}$
4. $\frac{10}{4} = 2\frac{1}{2}$
5. $\frac{4}{6} = \frac{2}{3}$
6. $\frac{35}{8} = 4\frac{3}{8}$
7. $\frac{12}{9} = 1\frac{1}{3}$
8. $\frac{12}{8} = 1\frac{1}{2}$
9. $\frac{6}{8} = \frac{3}{4}$
10. $\frac{20}{9} = 2\frac{2}{9}$
11. $\frac{6}{7} = \frac{6}{7}$
12. $\frac{10}{3} = 3\frac{1}{3}$
13. $\frac{15}{5} = 3$
14. $\frac{10}{5} = 2$
15. $\frac{16}{7} = 2\frac{2}{7}$
16. $\frac{9}{5} = 1\frac{4}{5}$
17. $\frac{4}{9} = \frac{4}{9}$
18. $\frac{8}{3} = 2\frac{2}{3}$
19. $\frac{24}{8} = 3$
20. $\frac{15}{4} = 3\frac{3}{4}$