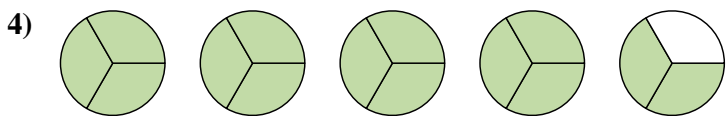
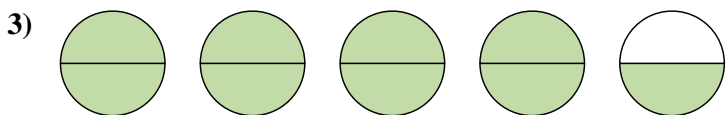
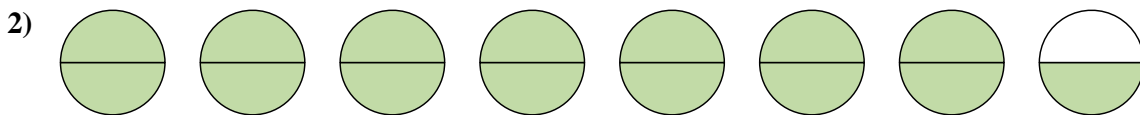
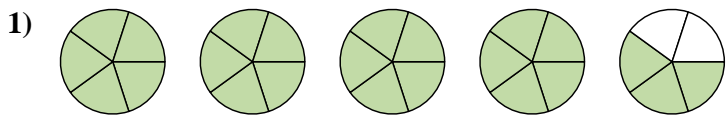
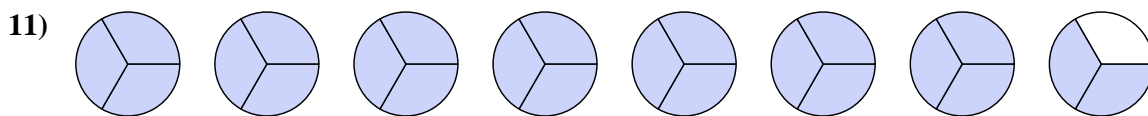
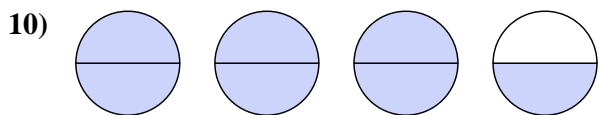
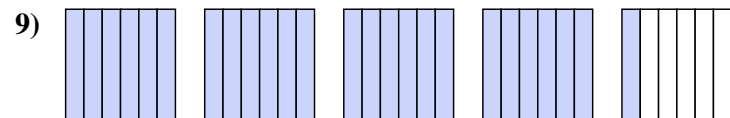
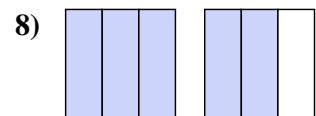
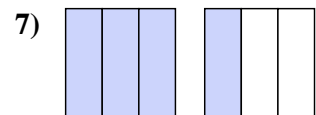
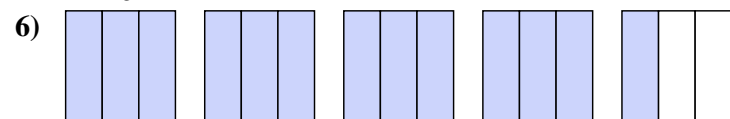




Schreibe jede Anzahl als eine gemischte Zahl.



Schreibe jede Anzahl als unechten Bruch.



Antworten

1. $4\frac{3}{5}$

2. $7\frac{1}{2}$

3. $4\frac{1}{2}$

4. $4\frac{2}{3}$

5. $2\frac{1}{3}$

6. $\frac{13}{3}$

7. $\frac{4}{3}$

8. $\frac{5}{3}$

9. $\frac{25}{6}$

10. $\frac{7}{2}$

11. $\frac{23}{3}$