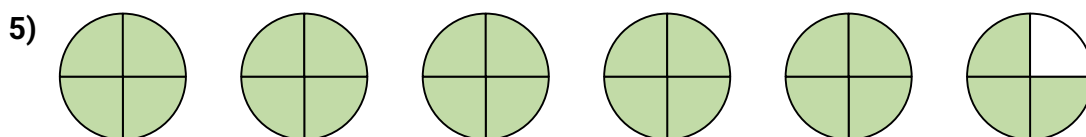
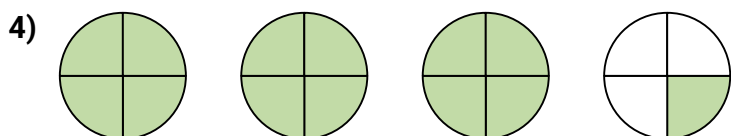
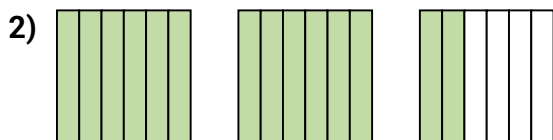
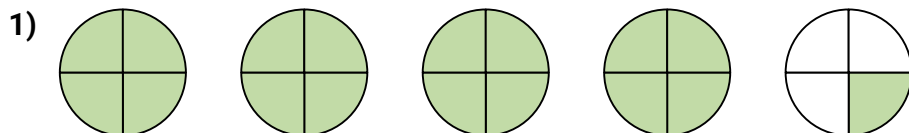
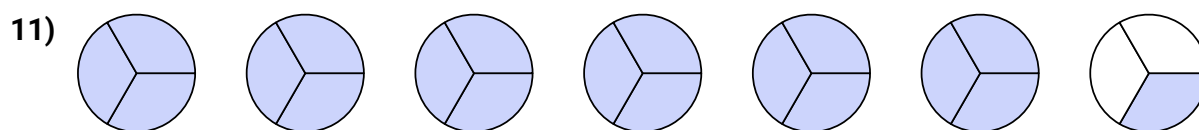
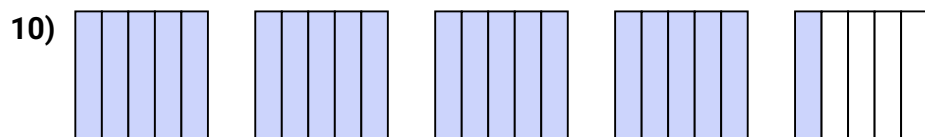
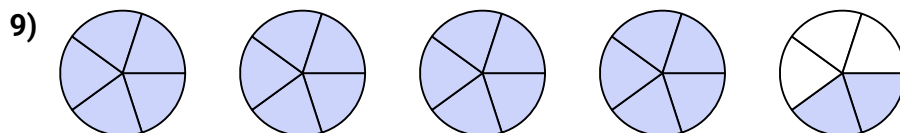
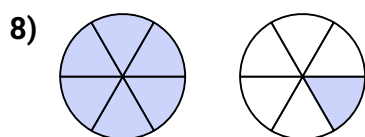
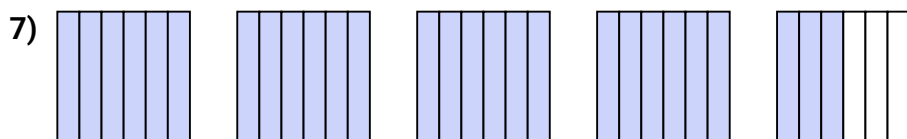
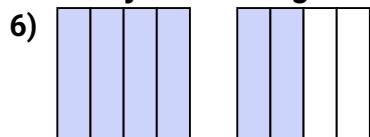




Schreibe jede Anzahl als eine gemischte Zahl.

**Antworten**

Schreibe jeden Betrag als unechter Bruch.



1. \_\_\_\_\_

2. \_\_\_\_\_

3. \_\_\_\_\_

4. \_\_\_\_\_

5. \_\_\_\_\_

6. \_\_\_\_\_

7. \_\_\_\_\_

8. \_\_\_\_\_

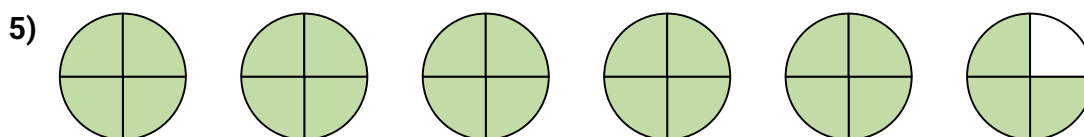
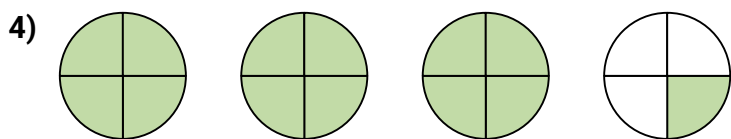
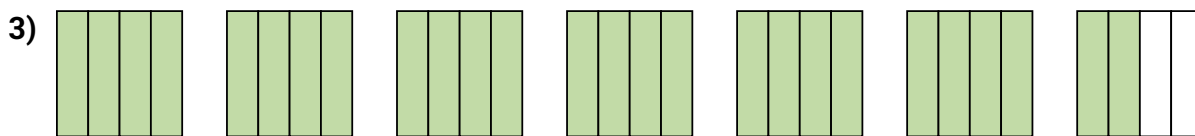
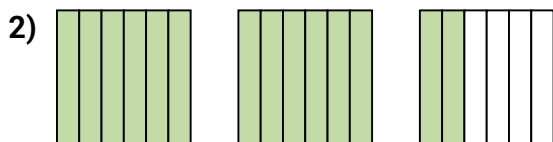
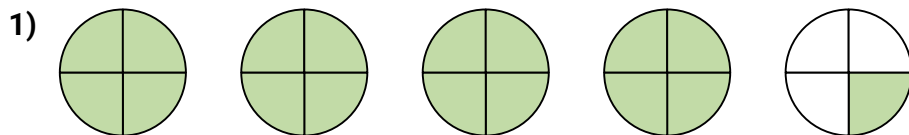
9. \_\_\_\_\_

10. \_\_\_\_\_

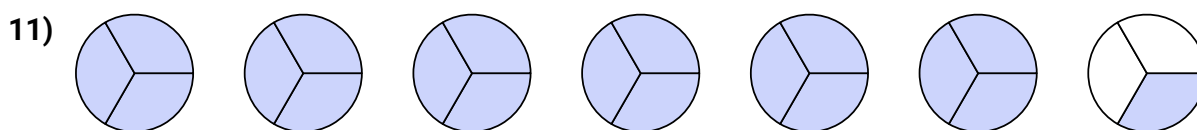
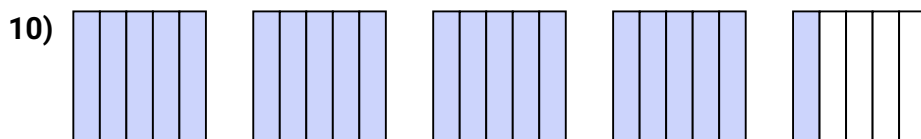
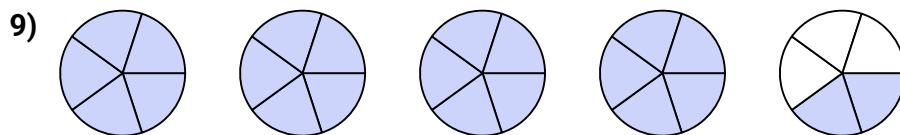
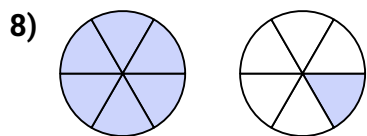
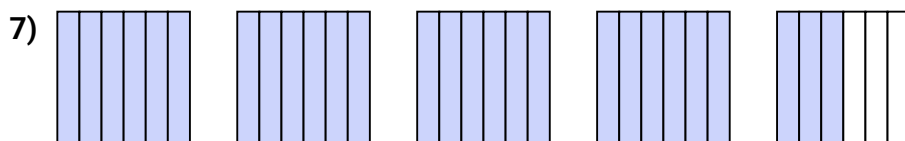
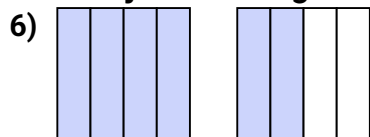
11. \_\_\_\_\_



Schreibe jede Anzahl als eine gemischte Zahl.



Schreibe jeden Betrag als unechter Bruch.

**Antworten**

1.  $4 \frac{1}{4}$

2.  $2 \frac{2}{6}$

3.  $6 \frac{2}{4}$

4.  $3 \frac{1}{4}$

5.  $5 \frac{3}{4}$

6.  $\frac{6}{4}$

7.  $\frac{27}{6}$

8.  $\frac{7}{6}$

9.  $\frac{22}{5}$

10.  $\frac{21}{5}$

11.  $\frac{19}{3}$