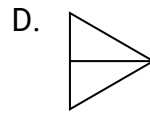

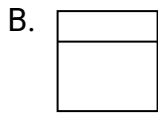
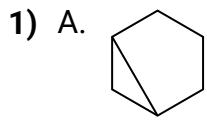
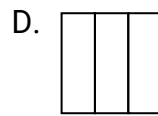
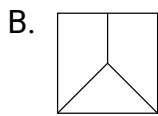
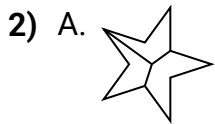




Stelle fest, welche Auswahlen die gleichen sind, damit die gezeigten geteilten Formen den gleichen Anteil haben. Wenn es keine gibt, schreibe 'keine'.

**Antworten**

1. \_\_\_\_\_

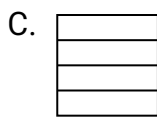
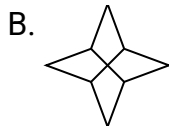
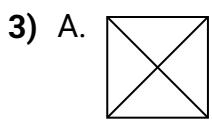


2. \_\_\_\_\_

3. \_\_\_\_\_

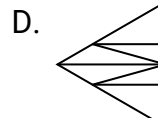
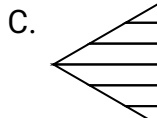
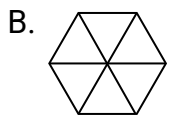
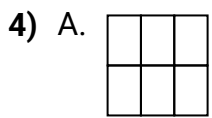
4. \_\_\_\_\_

5. \_\_\_\_\_

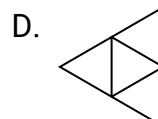
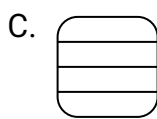

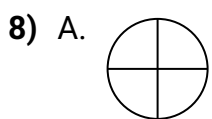
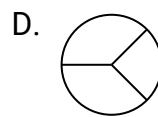
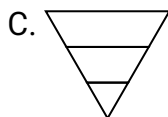
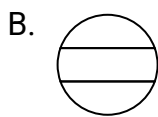
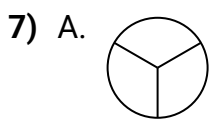
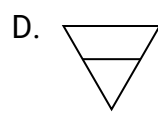
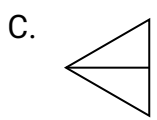

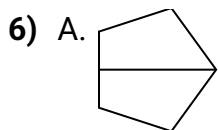
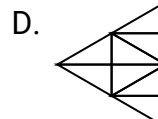
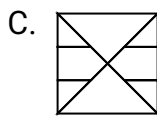
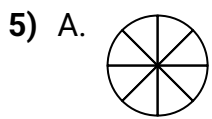


6. \_\_\_\_\_

7. \_\_\_\_\_

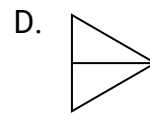
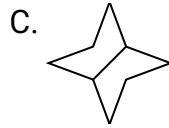
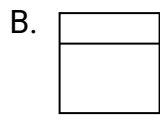
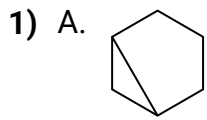


8. \_\_\_\_\_

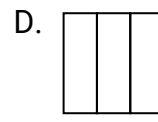
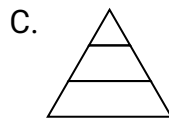
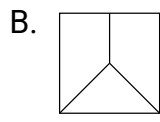
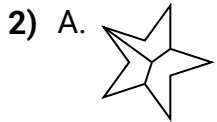




Stelle fest, welche Auswahlen die gleichen sind, damit die gezeigten geteilten Formen den gleichen Anteil haben. Wenn es keine gibt, schreibe 'keine'.

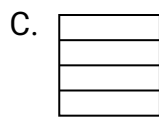
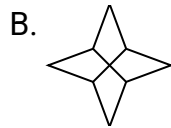
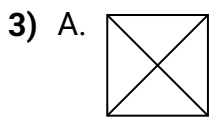
**Antworten**

1. **C,D**



2. **D**

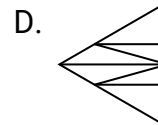
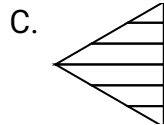
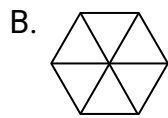
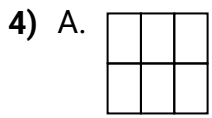
3. **A,B,C,D**



4. **A,B**

5. **A,D**

6. **A,B,C**



7. **A**

8. **A,D**

