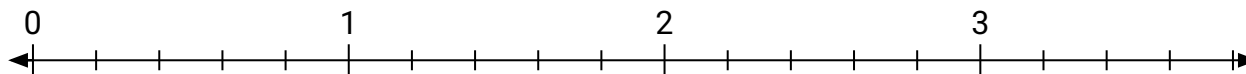
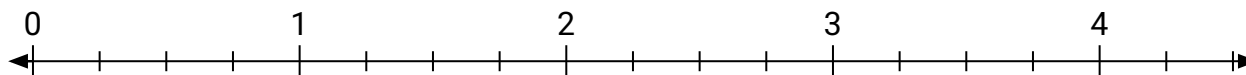


**Löse jede Aufgabe.**

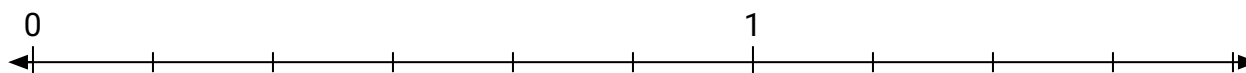
- 1) Markiere die Stelle von
- $\frac{6}{5}$



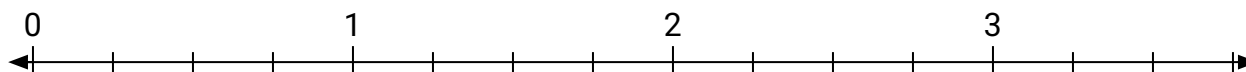
- 2) Markiere die Stelle von
- $\frac{10}{4}$



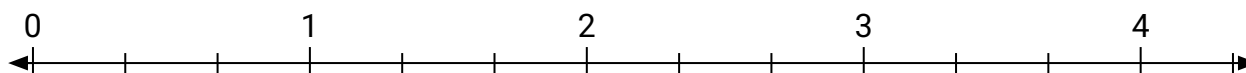
- 3) Markiere die Stelle von
- $\frac{7}{6}$




- 4) Markiere die Stelle von
- $\frac{7}{4}$



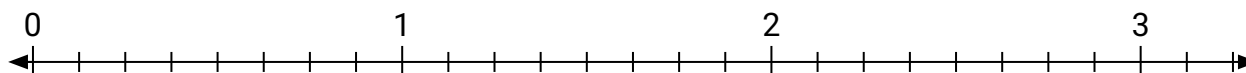
- 5) Markiere die Stelle von
- $\frac{8}{3}$



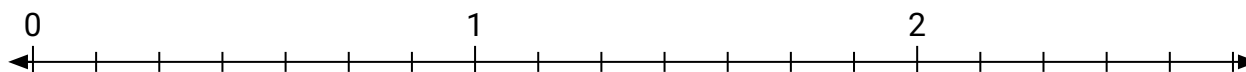
- 6) Markiere die Stelle von
- $\frac{3}{2}$



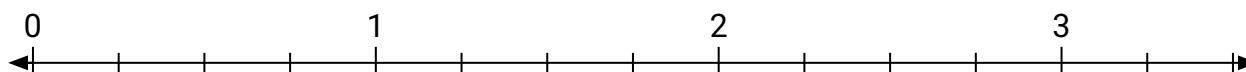
- 7) Markiere die Stelle von
- $\frac{24}{8}$




- 8) Markiere die Stelle von
- $\frac{18}{7}$



- 9) Markiere die Stelle von
- $\frac{6}{4}$

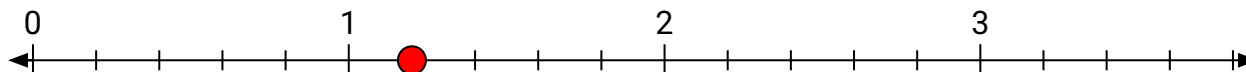


- 10) Markiere die Stelle von
- $\frac{4}{3}$

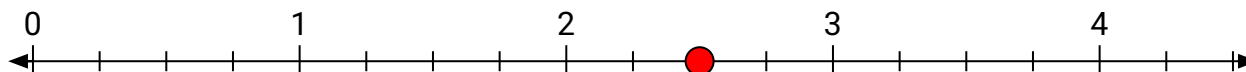


**Löse jede Aufgabe.**

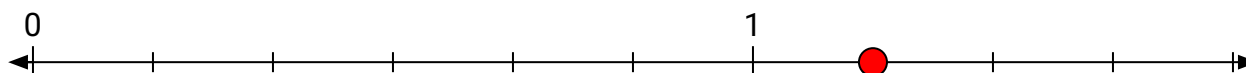
- 1) Markiere die Stelle von
- $\frac{6}{5}$



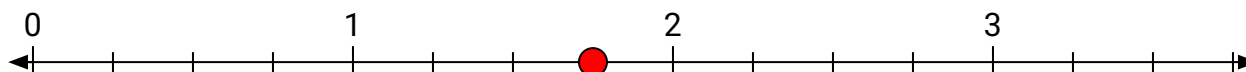
- 2) Markiere die Stelle von
- $\frac{10}{4}$



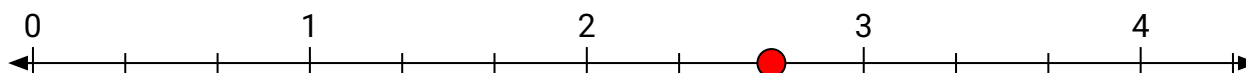
- 3) Markiere die Stelle von
- $\frac{7}{6}$




- 4) Markiere die Stelle von
- $\frac{7}{4}$



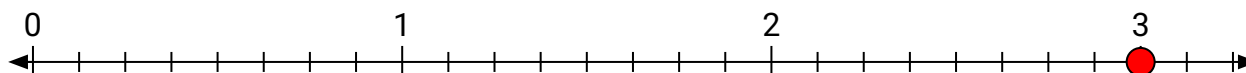
- 5) Markiere die Stelle von
- $\frac{8}{3}$



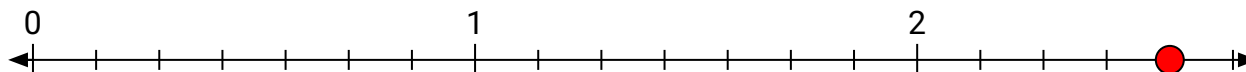
- 6) Markiere die Stelle von
- $\frac{3}{2}$



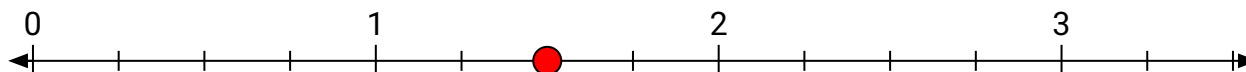
- 7) Markiere die Stelle von
- $\frac{24}{8}$



- 8) Markiere die Stelle von
- $\frac{18}{7}$



- 9) Markiere die Stelle von
- $\frac{6}{4}$



- 10) Markiere die Stelle von
- $\frac{4}{3}$

