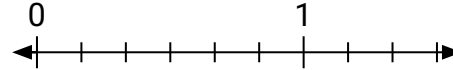


**Löse jede Aufgabe.**

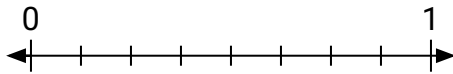
- 1) Markiere die Stelle von
- $\frac{0}{2}$



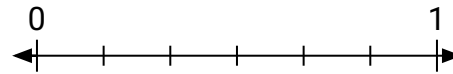
- 2) Markiere die Stelle von
- $\frac{0}{6}$



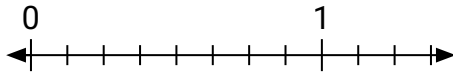
- 3) Markiere die Stelle von
- $\frac{5}{8}$



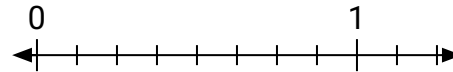
- 4) Markiere die Stelle von
- $\frac{6}{6}$



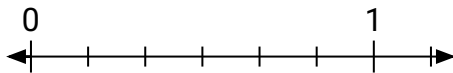
- 5) Markiere die Stelle von
- $\frac{4}{8}$



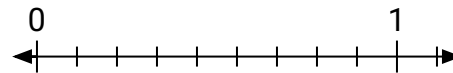
- 6) Markiere die Stelle von
- $\frac{7}{8}$



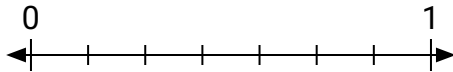
- 7) Markiere die Stelle von
- $\frac{2}{6}$



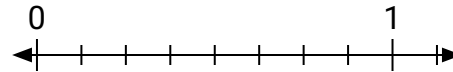
- 8) Markiere die Stelle von
- $\frac{7}{9}$



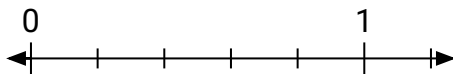
- 9) Markiere die Stelle von
- $\frac{6}{7}$



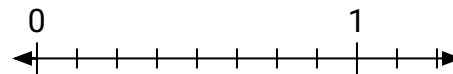
- 10) Markiere die Stelle von
- $\frac{8}{8}$



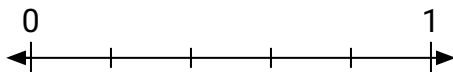
- 11) Markiere die Stelle von
- $\frac{2}{5}$



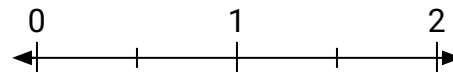
- 12) Markiere die Stelle von
- $\frac{6}{8}$



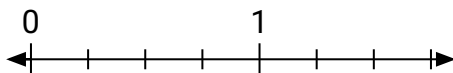
- 13) Markiere die Stelle von
- $\frac{0}{5}$



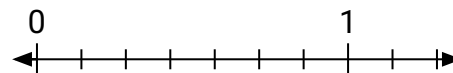
- 14) Markiere die Stelle von
- $\frac{1}{2}$



- 15) Markiere die Stelle von
- $\frac{4}{4}$



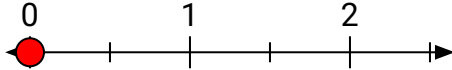
- 16) Markiere die Stelle von
- $\frac{1}{7}$



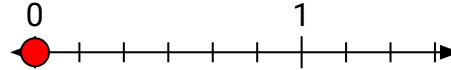


Löse jede Aufgabe.

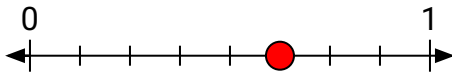
- 1) Markiere die Stelle von
- $\frac{0}{2}$



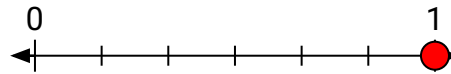
- 2) Markiere die Stelle von
- $\frac{0}{6}$



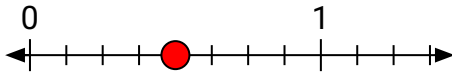
- 3) Markiere die Stelle von
- $\frac{5}{8}$



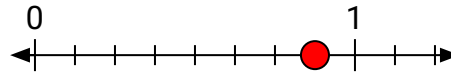
- 4) Markiere die Stelle von
- $\frac{6}{6}$



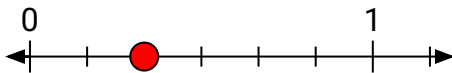
- 5) Markiere die Stelle von
- $\frac{4}{8}$



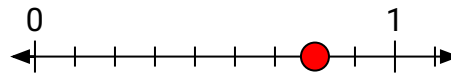
- 6) Markiere die Stelle von
- $\frac{7}{8}$



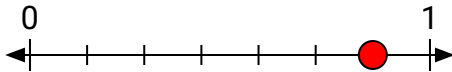
- 7) Markiere die Stelle von
- $\frac{2}{6}$



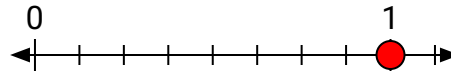
- 8) Markiere die Stelle von
- $\frac{7}{9}$



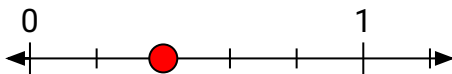
- 9) Markiere die Stelle von
- $\frac{6}{7}$



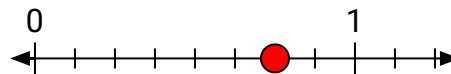
- 10) Markiere die Stelle von
- $\frac{8}{8}$



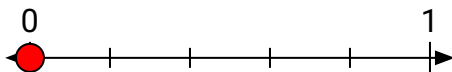
- 11) Markiere die Stelle von
- $\frac{2}{5}$



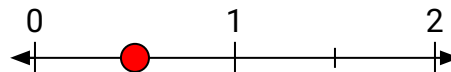
- 12) Markiere die Stelle von
- $\frac{6}{8}$



- 13) Markiere die Stelle von
- $\frac{0}{5}$



- 14) Markiere die Stelle von
- $\frac{1}{2}$



- 15) Markiere die Stelle von
- $\frac{4}{4}$



- 16) Markiere die Stelle von
- $\frac{1}{7}$

