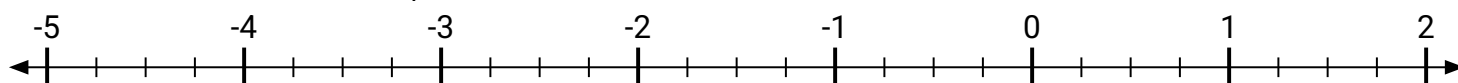
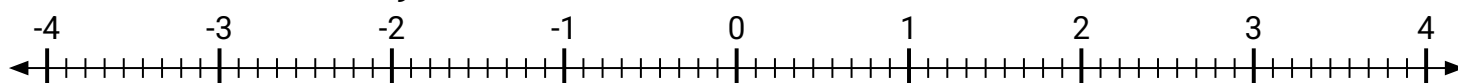


**Markiere jede beschriebene Lage, positiv oder negativ.**

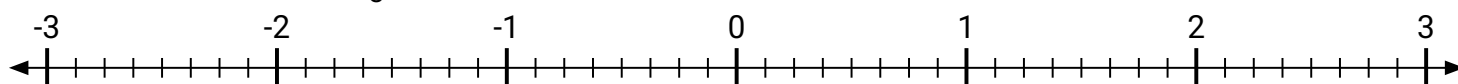
- 1) Markiere die Stelle von
- $-4\frac{3}{4}$



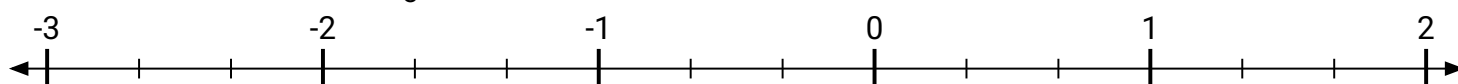
- 2) Markiere die Stelle von
- $3\frac{1}{9}$



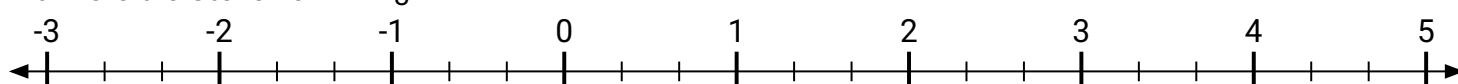
- 3) Markiere die Stelle von
- $\frac{7}{8}$



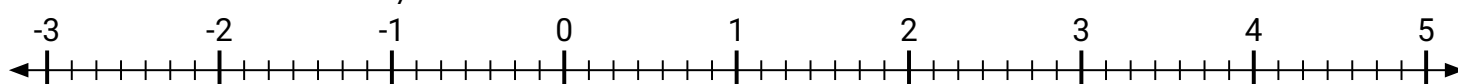
- 4) Markiere die Stelle von
- $-2\frac{2}{3}$



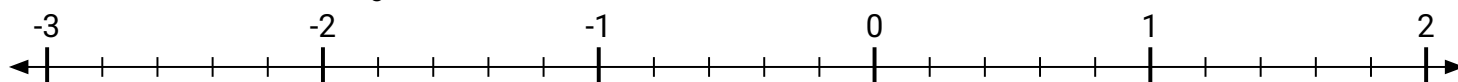
- 5) Markiere die Stelle von
- $1\frac{1}{3}$



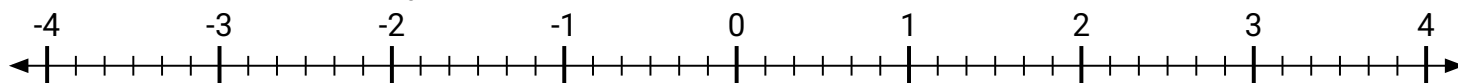
- 6) Markiere die Stelle von
- $3\frac{3}{7}$



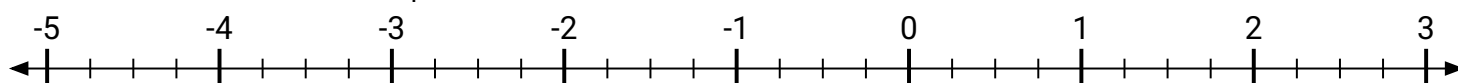
- 7) Markiere die Stelle von
- $\frac{3}{5}$



- 8) Markiere die Stelle von
- $-1\frac{2}{6}$

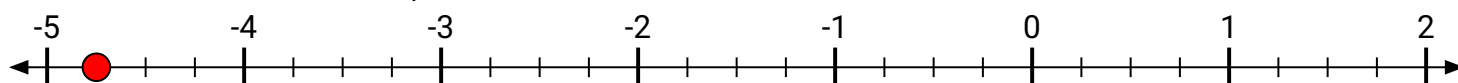


- 9) Markiere die Stelle von
- $-3\frac{1}{4}$

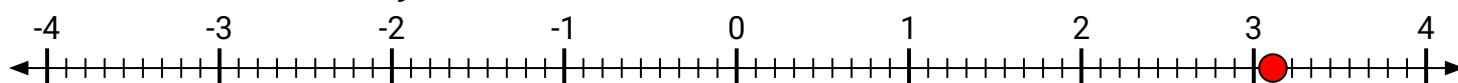


**Markiere jede beschriebene Lage, positiv oder negativ.**

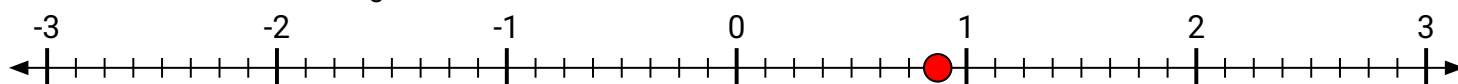
- 1) Markiere die Stelle von
- $-4\frac{3}{4}$



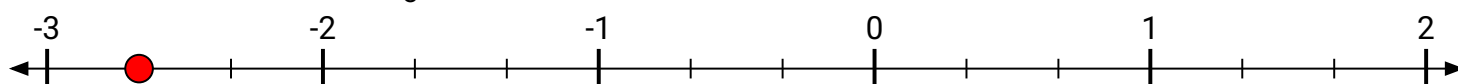
- 2) Markiere die Stelle von
- $3\frac{1}{9}$



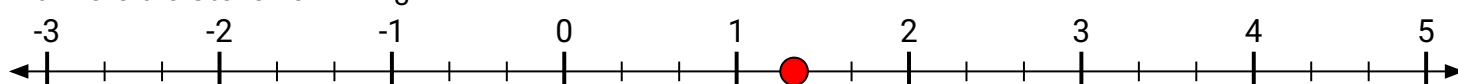
- 3) Markiere die Stelle von
- $\frac{7}{8}$



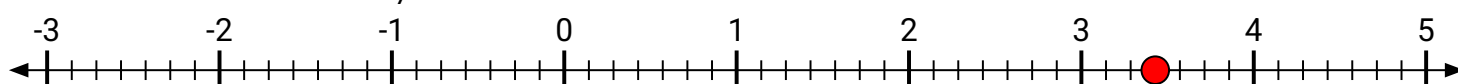
- 4) Markiere die Stelle von
- $-2\frac{2}{3}$



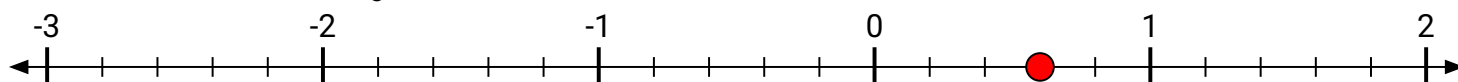
- 5) Markiere die Stelle von
- $1\frac{1}{3}$



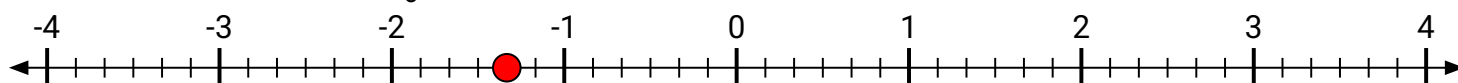
- 6) Markiere die Stelle von
- $3\frac{3}{7}$



- 7) Markiere die Stelle von
- $\frac{3}{5}$



- 8) Markiere die Stelle von
- $-1\frac{2}{6}$



- 9) Markiere die Stelle von
- $-3\frac{1}{4}$

