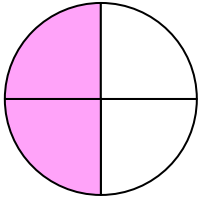


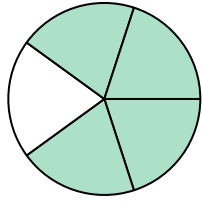


Schreiben Sie den schattierten Betrag in Wortform.

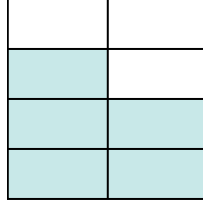
Bsp)



1)



2)



**Antworten**

Bsp. zwei Viertel

1. \_\_\_\_\_

2. \_\_\_\_\_

3. \_\_\_\_\_

4. \_\_\_\_\_

5. \_\_\_\_\_

6. \_\_\_\_\_

7. \_\_\_\_\_

8. \_\_\_\_\_

9. \_\_\_\_\_

10. \_\_\_\_\_

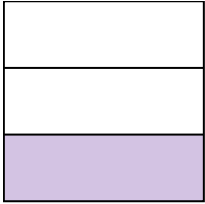
11. \_\_\_\_\_

12. \_\_\_\_\_


13. \_\_\_\_\_

14. \_\_\_\_\_

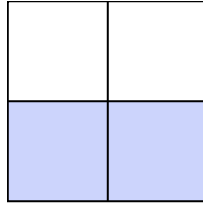
3)



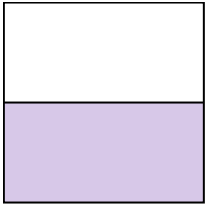
4)



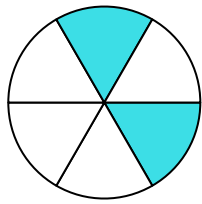
5)



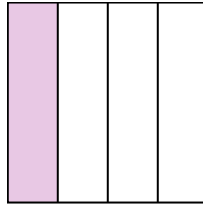
6)




7)



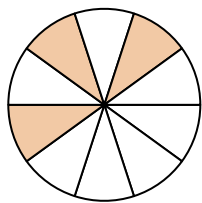
8)



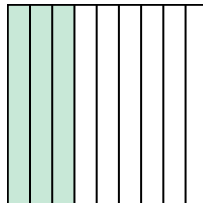
9)



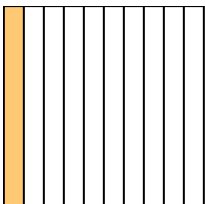
10)



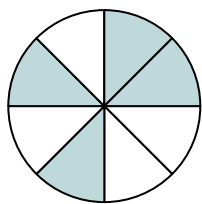
11)




12)



13)



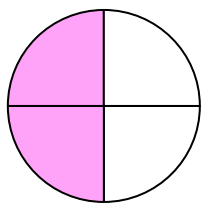
14)



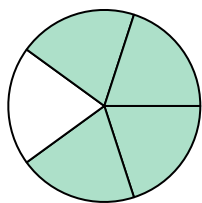


Schreiben Sie den schattierten Betrag in Wortform.

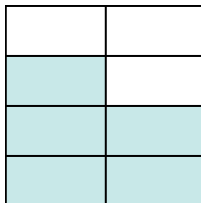
Bsp)



1)



2)



Bsp.

**zwei Viertel**

1.

**vier Fünftel**

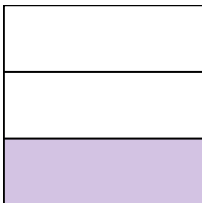
2.

**Fünf-Siebtel**

3.

**ein Drittel**

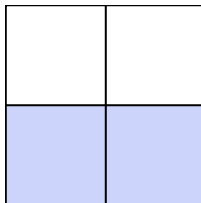
3)



4)



5)



4.

**drei Neuntel**

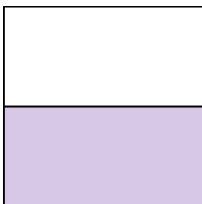
5.

**zwei Drittel**

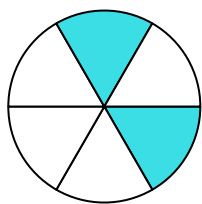
6.

**eine Hälfte**

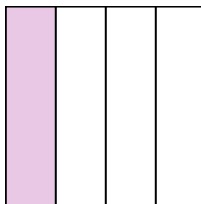
6)



7)



8)



7.

**zwei Sechstel**

8.

**ein Viertel**


9.

**eine Hälfte**

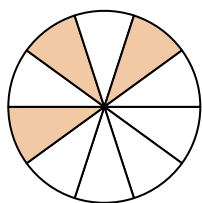
10.

**drei Zehntel**

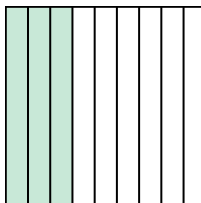
9)



10)



11)



11.

**drei Neuntel**

12.

**ein Zehntel**

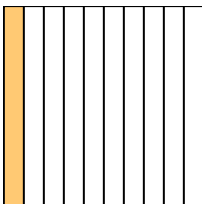
13.

**vier Achtel**

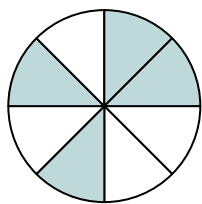
14.

**fünf Achtel**

12)



13)



14)

