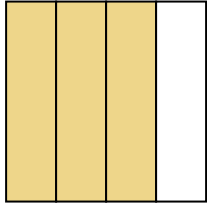


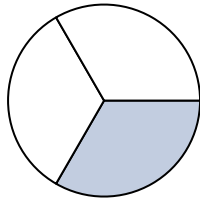


Schreiben Sie den schattierten Betrag in Wortform.

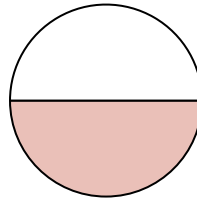
Bsp)



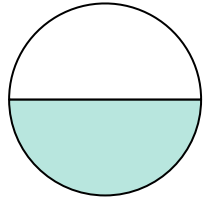
1)



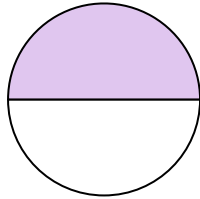
2)



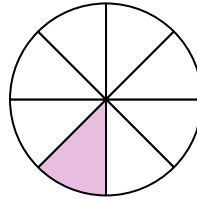
3)



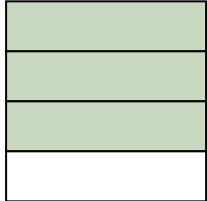
4)



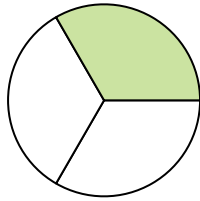
5)



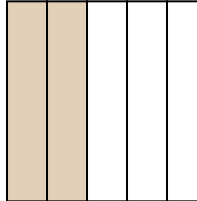
6)



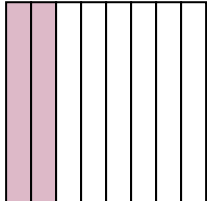
7)



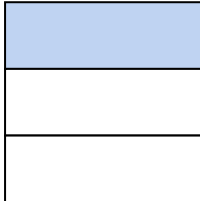
8)



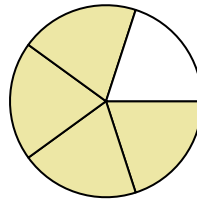
9)



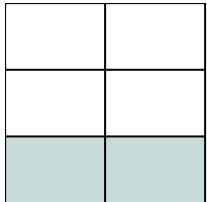
10)



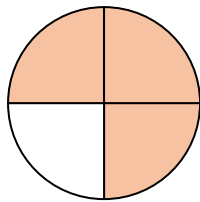
11)




12)



13)



14)

**Antworten**Bsp. drei Viertel

1. _____

2. _____

3. _____

4. _____

5. _____

6. _____

7. _____

8. _____

9. _____

10. _____

11. _____

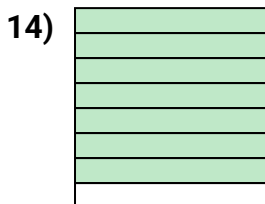
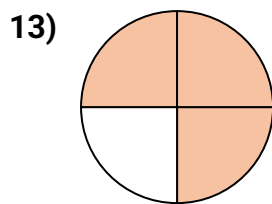
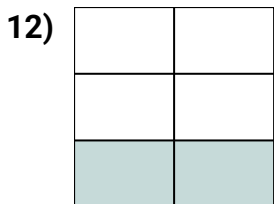
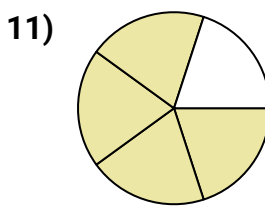

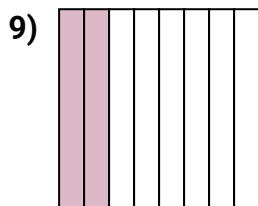
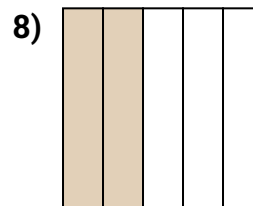
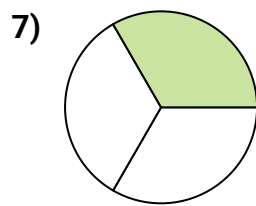
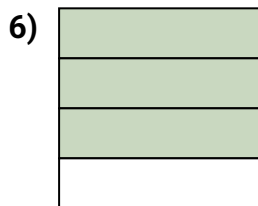
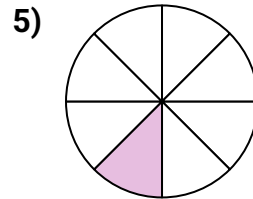
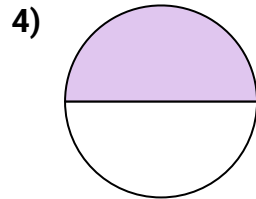
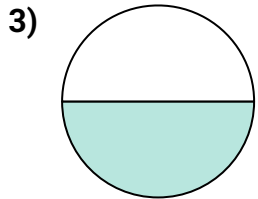
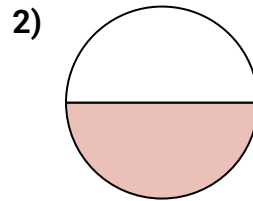
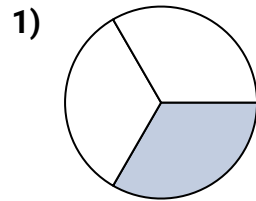
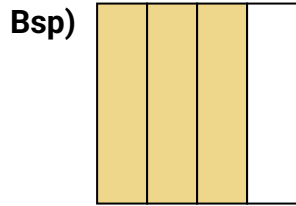
12. _____

13. _____

14. _____



Schreiben Sie den schattierten Betrag in Wortform.

**Antworten**Bsp. drei Viertel1. ein Drittel2. ein Halb3. ein Halb4. ein Halb5. ein Achtel6. drei Viertel7. ein Drittel8. zwei Fünftel9. zwei Achtel10. ein Drittel11. vier Fünftel12. zwei Fünftel13. drei Viertel14. sieben Achtel