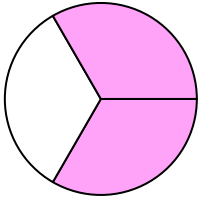


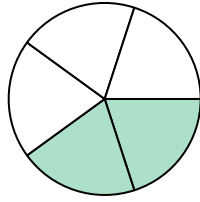


Schreiben Sie den schattierten Betrag als Bruch.

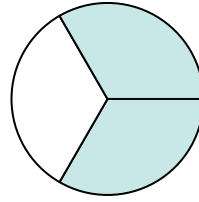
Bsp)



1)



2)



**Antworten**

Bsp.  $\frac{2}{3}$

1. \_\_\_\_\_

2. \_\_\_\_\_

3. \_\_\_\_\_

4. \_\_\_\_\_

5. \_\_\_\_\_

6. \_\_\_\_\_

7. \_\_\_\_\_

8. \_\_\_\_\_

9. \_\_\_\_\_

10. \_\_\_\_\_

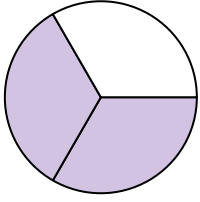
11. \_\_\_\_\_

12. \_\_\_\_\_

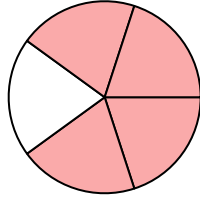
13. \_\_\_\_\_

14. \_\_\_\_\_


3)




4)



5)



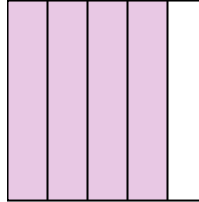
6)



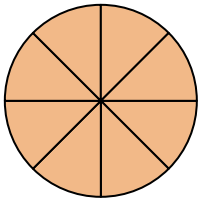
7)



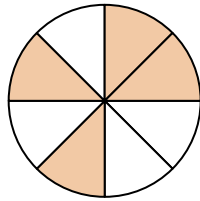
8)




9)



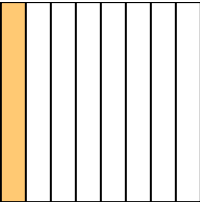
10)



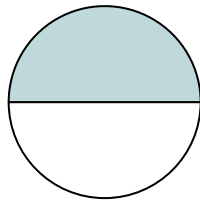
11)



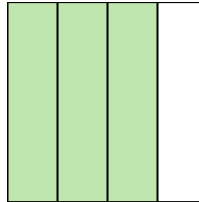
12)



13)



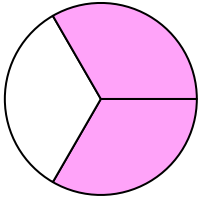
14)



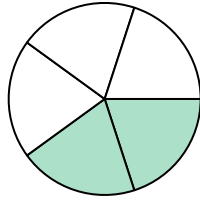


Schreiben Sie den schattierten Betrag als Bruch.

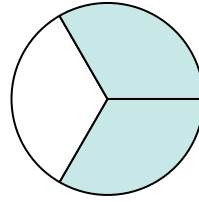
Bsp)



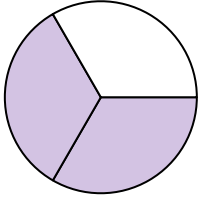
1)



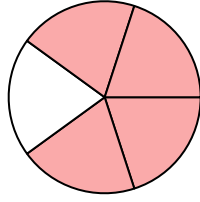
2)

**Antworten**Bsp.  $\frac{2}{3}$ 1.  $\frac{2}{5}$ 2.  $\frac{2}{3}$ 3.  $\frac{2}{3}$ 4.  $\frac{4}{5}$ 5.  $\frac{2}{2}$ 6.  $\frac{4}{4}$ 7.  $\frac{1}{4}$ 8.  $\frac{4}{5}$ 9.  $\frac{8}{8}$ 10.  $\frac{4}{8}$ 11.  $\frac{1}{2}$ 12.  $\frac{1}{8}$ 13.  $\frac{1}{2}$ 14.  $\frac{3}{4}$ 


3)




4)




5)



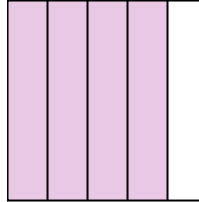
6)



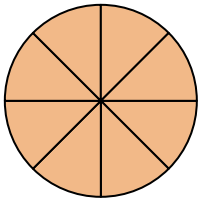
7)



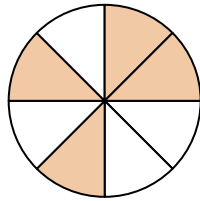
8)




9)



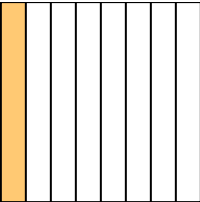
10)



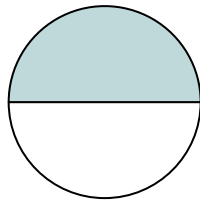
11)



12)



13)



14)

