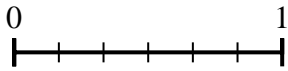
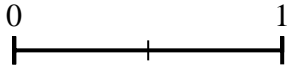




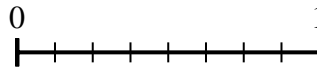
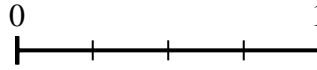
Benutze den Zahlenstrahl um die Fragen zu beantworten.

Antworten


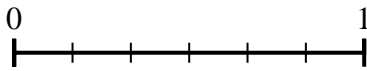
1) Benutze die Zahlenstrahlen und ermittle den äquivalenten Bruch zu {VAR}



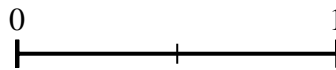
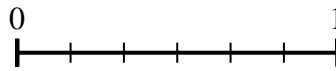
2) Benutze die Zahlenstrahlen und ermittle den äquivalenten Bruch zu {VAR}



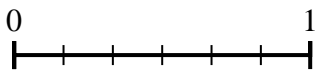
3) Benutze die Zahlenstrahlen und ermittle den äquivalenten Bruch zu {VAR}



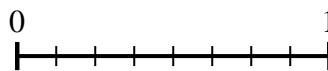
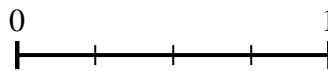
4) Benutze die Zahlenstrahlen und ermittle den äquivalenten Bruch zu {VAR}



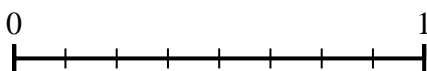
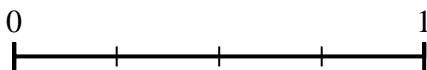
5) Benutze die Zahlenstrahlen und ermittle den äquivalenten Bruch zu {VAR}



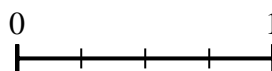
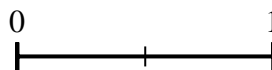
6) Benutze die Zahlenstrahlen und ermittle den äquivalenten Bruch zu {VAR}



7) Benutze die Zahlenstrahlen und ermittle den äquivalenten Bruch zu {VAR}



8) Benutze die Zahlenstrahlen und ermittle den äquivalenten Bruch zu {VAR}

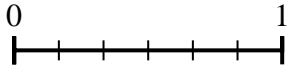
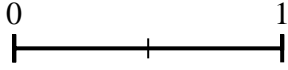


1. _____
2. _____
3. _____
4. _____
5. _____
6. _____
7. _____
8. _____

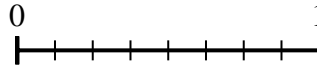
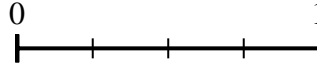


Benutze den Zahlenstrahl um die Fragen zu beantworten.


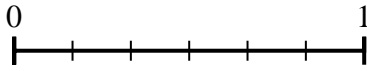
1) Benutze die Zahlenstrahlen und ermittle den äquivalenten Bruch zu {VAR}



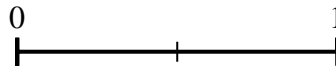
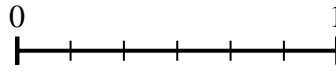
2) Benutze die Zahlenstrahlen und ermittle den äquivalenten Bruch zu {VAR}




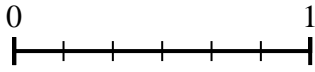
3) Benutze die Zahlenstrahlen und ermittle den äquivalenten Bruch zu {VAR}



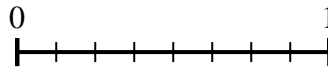
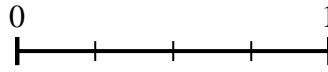
4) Benutze die Zahlenstrahlen und ermittle den äquivalenten Bruch zu {VAR}



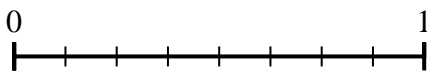
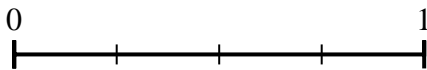
5) Benutze die Zahlenstrahlen und ermittle den äquivalenten Bruch zu {VAR}



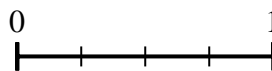
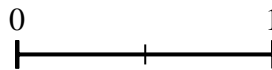
6) Benutze die Zahlenstrahlen und ermittle den äquivalenten Bruch zu {VAR}



7) Benutze die Zahlenstrahlen und ermittle den äquivalenten Bruch zu {VAR}



8) Benutze die Zahlenstrahlen und ermittle den äquivalenten Bruch zu {VAR}



Antworten

1. $\frac{6}{6}$

2. $\frac{6}{8}$

3. $\frac{3}{3}$

4. $\frac{0}{2}$

5. $\frac{1}{3}$

6. $\frac{2}{8}$

7. $\frac{4}{8}$

8. $\frac{4}{4}$