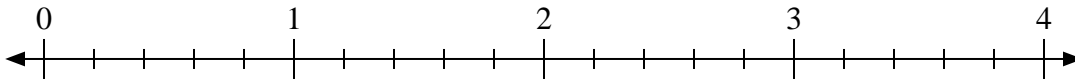




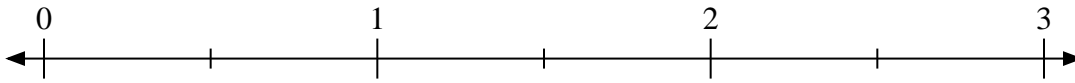
Benutze den Zahlenstrahl um die Aufgabe zu lösen.

Antworten

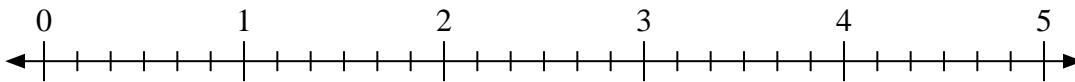
1) $2:\frac{1}{5}$



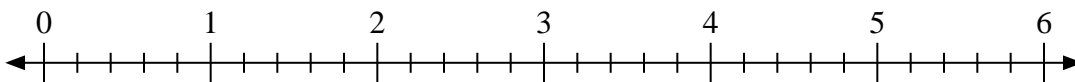
2) $3:\frac{1}{2}$



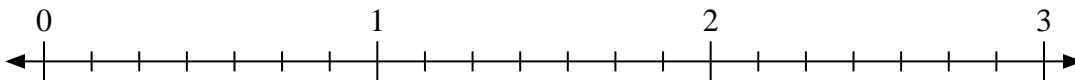
3) $3:\frac{1}{6}$



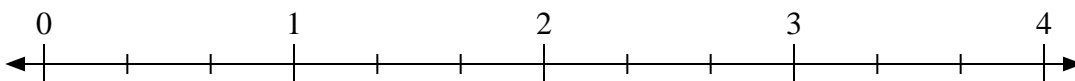
4) $6:\frac{4}{5}$



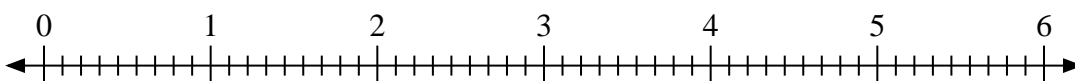
5) $3:\frac{5}{7}$



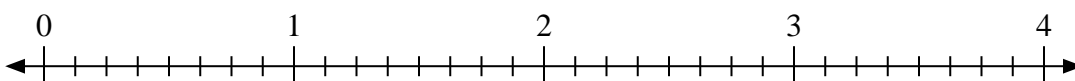
6) $4:\frac{2}{3}$



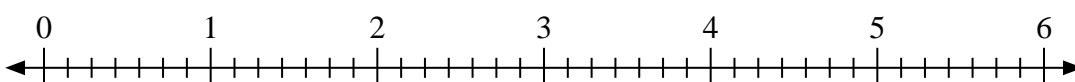
7) $4:\frac{5}{9}$



8) $4:\frac{7}{8}$



9) $5:\frac{3}{7}$



1. _____

2. _____

3. _____

4. _____

5. _____

6. _____

7. _____

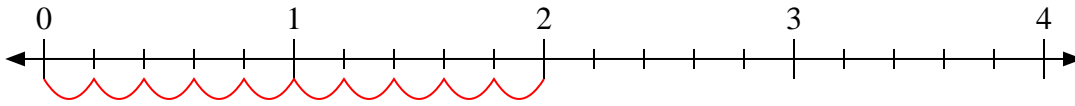
8. _____

9. _____

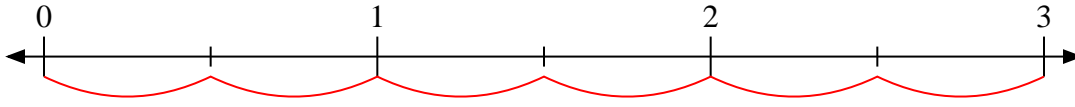


Benutze den Zahlenstrahl um die Aufgabe zu lösen.

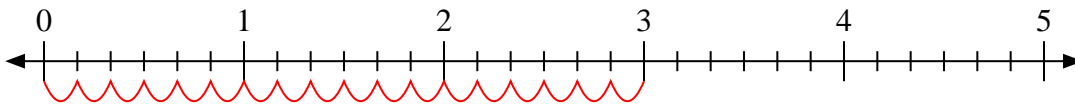
1) $2 : \frac{1}{5}$



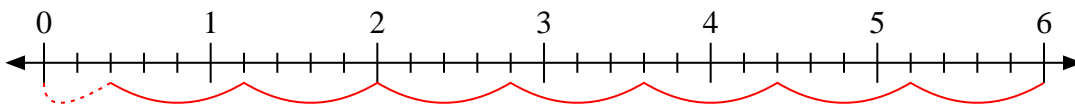
2) $3 : \frac{1}{2}$



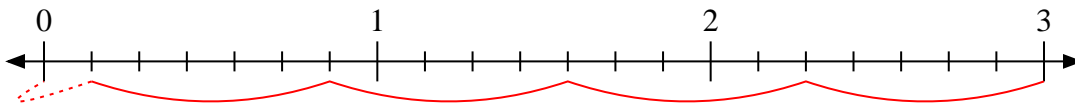
3) $3 : \frac{1}{6}$



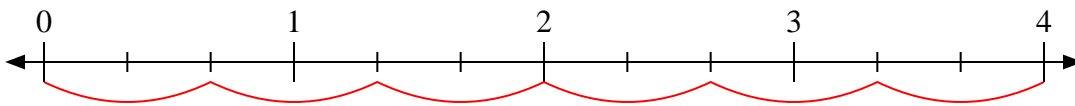
4) $6 : \frac{4}{5}$



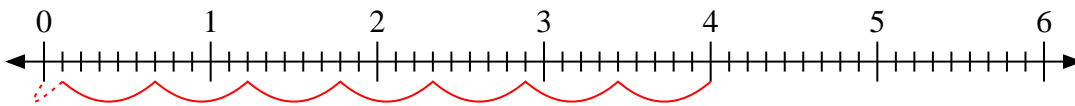
5) $3 : \frac{5}{7}$



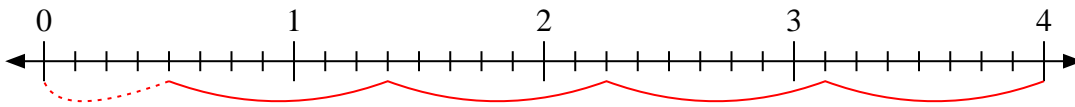
6) $4 : \frac{2}{3}$



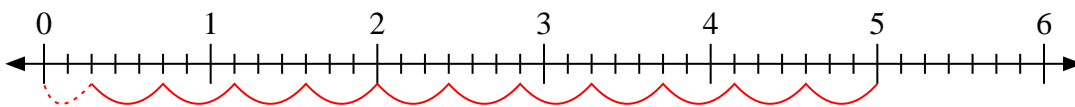
7) $4 : \frac{5}{9}$



8) $4 : \frac{7}{8}$



9) $5 : \frac{3}{7}$

**Antworten**1. **10**2. **6**3. **18**4. **$7 \frac{2}{4}$** 5. **$4 \frac{1}{5}$** 6. **6**7. **$7 \frac{1}{5}$** 8. **$4 \frac{4}{7}$** 9. **$11 \frac{2}{3}$**