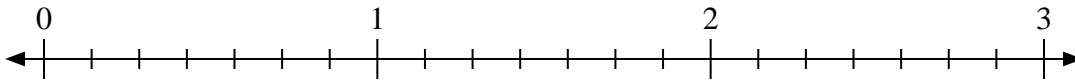




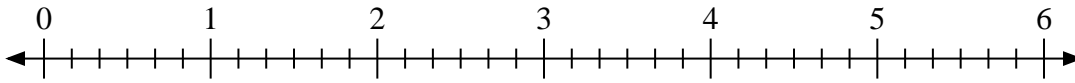
Benutze den Zahlenstrahl um die Aufgabe zu lösen.

**Antworten**

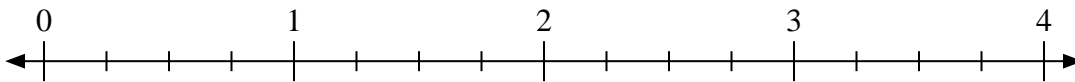
1)  $2:\frac{3}{7}$



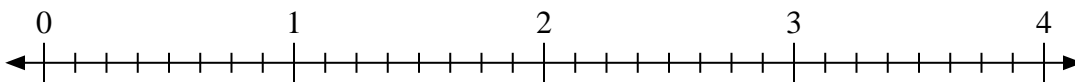
2)  $6:\frac{3}{6}$



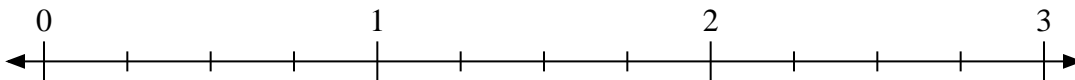
3)  $2:\frac{1}{4}$



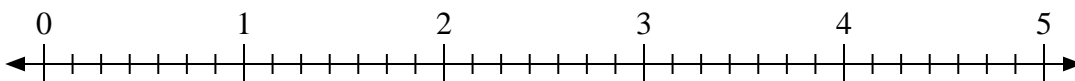
4)  $2:\frac{2}{8}$



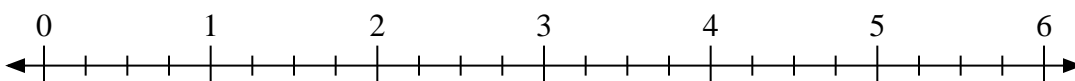
5)  $3:\frac{2}{4}$



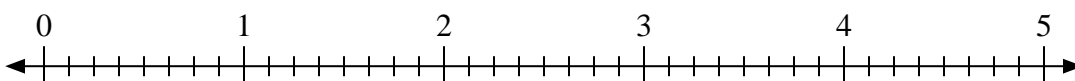
6)  $5:\frac{4}{7}$



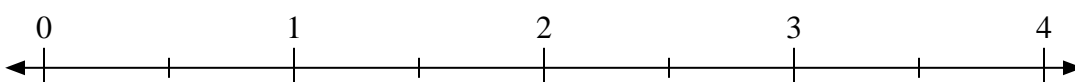
7)  $6:\frac{1}{4}$



8)  $5:\frac{5}{8}$



9)  $3:\frac{1}{2}$



1. \_\_\_\_\_

2. \_\_\_\_\_

3. \_\_\_\_\_

4. \_\_\_\_\_

5. \_\_\_\_\_

6. \_\_\_\_\_

7. \_\_\_\_\_

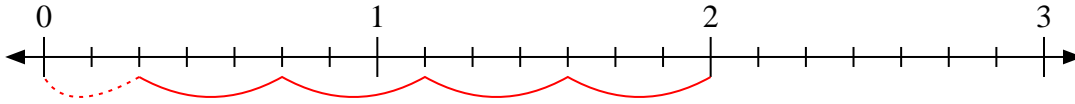
8. \_\_\_\_\_

9. \_\_\_\_\_

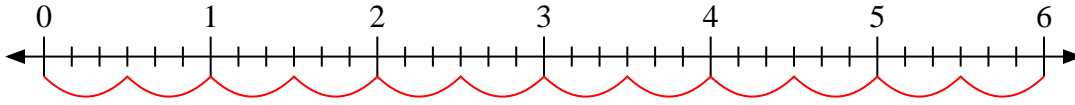


Benutze den Zahlenstrahl um die Aufgabe zu lösen.

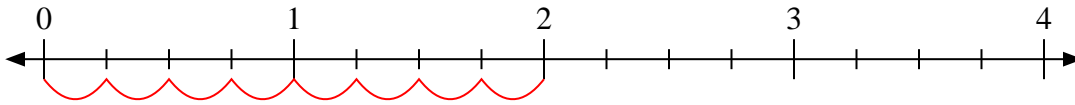
1)  $2 : \frac{3}{7}$



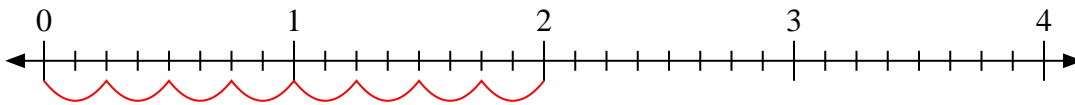
2)  $6 : \frac{3}{6}$



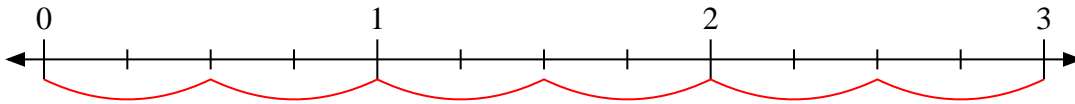
3)  $2 : \frac{1}{4}$



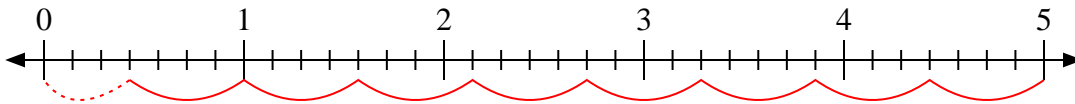
4)  $2 : \frac{2}{8}$



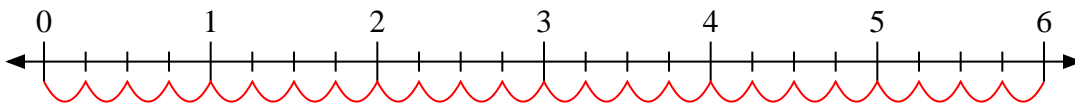
5)  $3 : \frac{2}{4}$



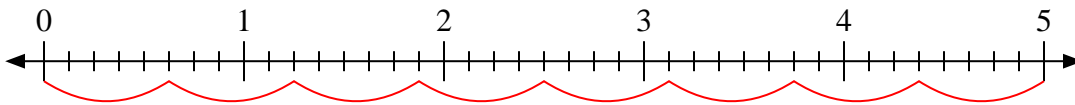
6)  $5 : \frac{4}{7}$



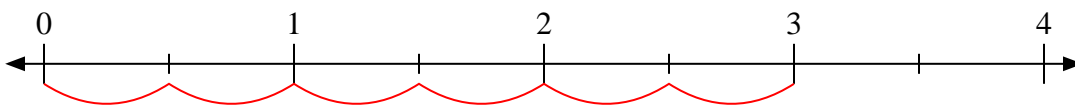
7)  $6 : \frac{1}{4}$



8)  $5 : \frac{5}{8}$



9)  $3 : \frac{1}{2}$

**Antworten**

1.  $4 \frac{2}{3}$

2.  $12$

3.  $8$

4.  $8$

5.  $6$

6.  $8 \frac{3}{4}$

7.  $24$

8.  $8$

9.  $6$