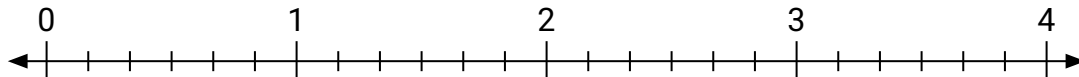




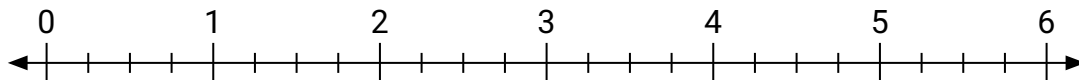
Benutze den Zahlenstrahl um die Aufgabe zu lösen.

**Antworten**

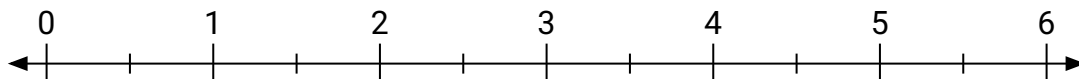
1)  $3 : \frac{1}{6} =$



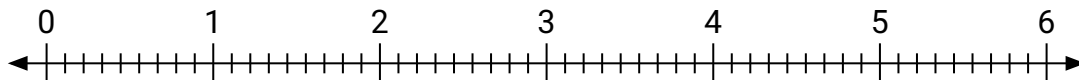
2)  $4 : \frac{1}{4} =$



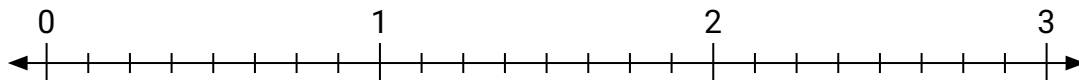
3)  $4 : \frac{1}{2} =$



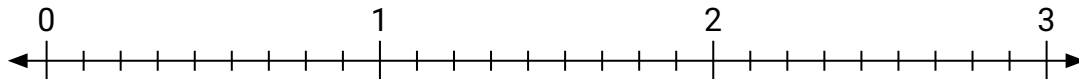
4)  $5 : \frac{6}{9} =$



5)  $2 : \frac{6}{8} =$



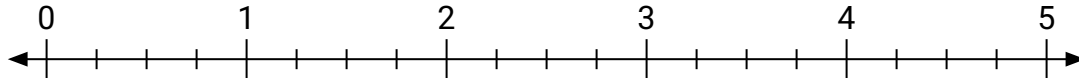
6)  $2 : \frac{8}{9} =$



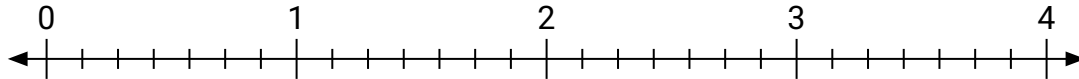
7)  $4 : \frac{1}{2} =$



8)  $2 : \frac{2}{4} =$



9)  $3 : \frac{5}{7} =$



1. \_\_\_\_\_

2. \_\_\_\_\_

3. \_\_\_\_\_

4. \_\_\_\_\_

5. \_\_\_\_\_

6. \_\_\_\_\_

7. \_\_\_\_\_

8. \_\_\_\_\_

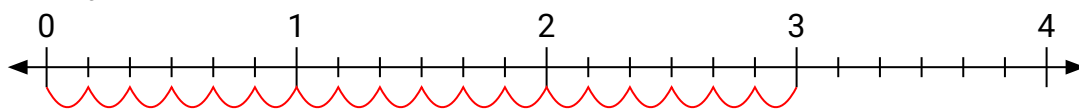
9. \_\_\_\_\_



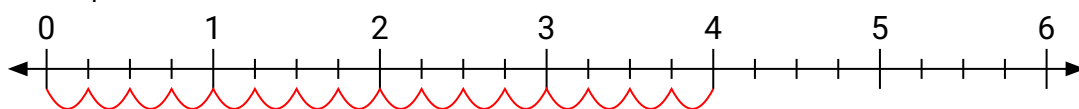
Benutze den Zahlenstrahl um die Aufgabe zu lösen.

**Antworten**

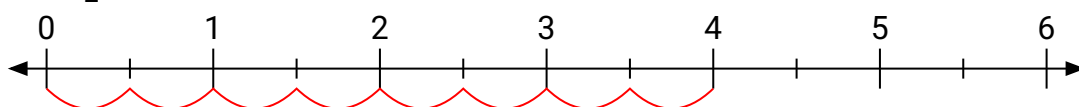
1)  $3 : \frac{1}{6} =$

1. **18**

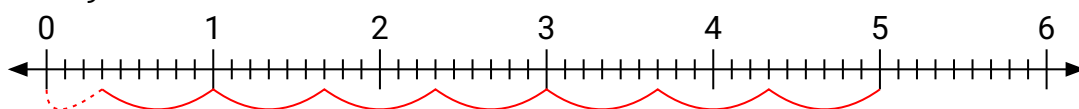
2)  $4 : \frac{1}{4} =$

2. **16**

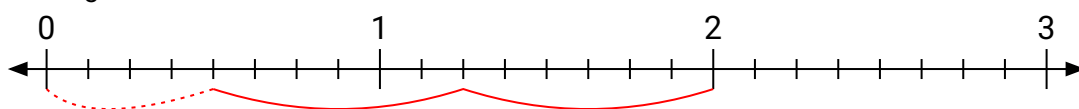
3)  $4 : \frac{1}{2} =$

3. **8**

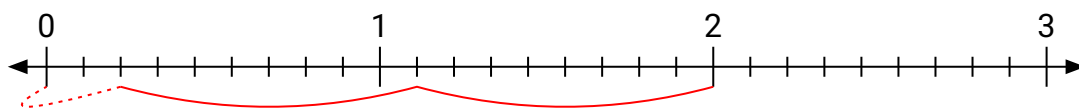
4)  $5 : \frac{6}{9} =$

4.  **$7 \frac{3}{6}$** 

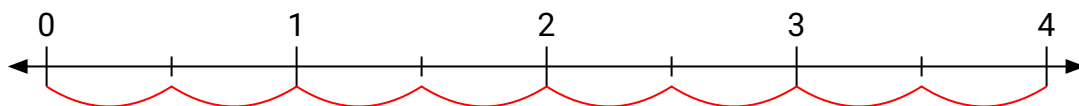
5)  $2 : \frac{6}{8} =$

5.  **$2 \frac{4}{6}$** 

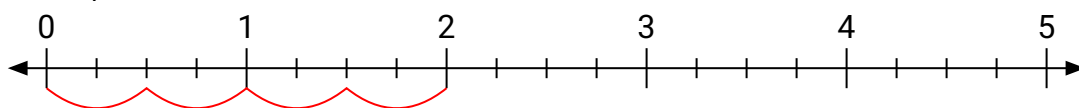
6)  $2 : \frac{8}{9} =$

6.  **$2 \frac{2}{8}$** 

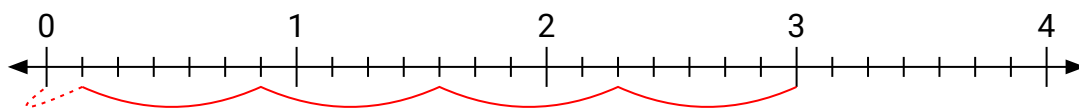
7)  $4 : \frac{1}{2} =$

7. **8**

8)  $2 : \frac{2}{4} =$

8. **4**

9)  $3 : \frac{5}{7} =$

9.  **$4 \frac{1}{5}$**