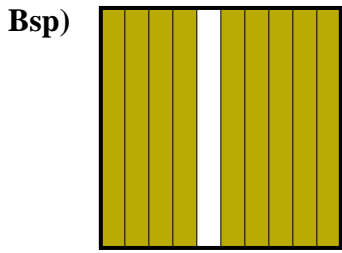
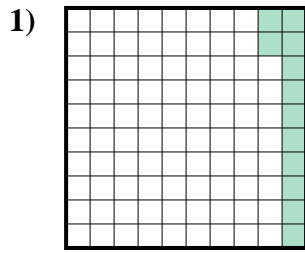




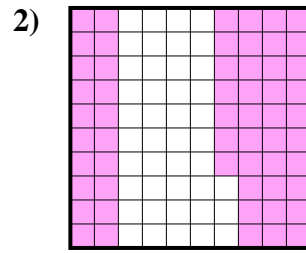
Stelle die schraffierte Fläche als Bruch, Dezimale und als Prozentangabe dar.



Bruch $\frac{9}{10}$
 Dezimale 0,9
 Prozentangabe 90



Bruch _____
 Dezimale _____
 Prozentangabe _____

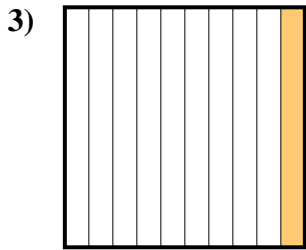


Bruch _____
 Dezimale _____
 Prozentangabe _____

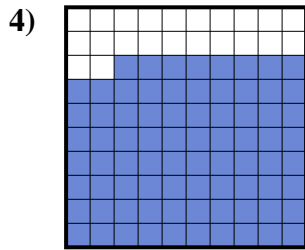
Antworten

Bsp. $\frac{9}{10}$ 0,9 90%

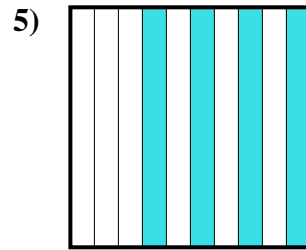
1.	_____	_____	_____
2.	_____	_____	_____
3.	_____	_____	_____
4.	_____	_____	_____
5.	_____	_____	_____
6.	_____	_____	_____
7.	_____	_____	_____
8.	_____	_____	_____
9.	_____	_____	_____
10.	_____	_____	_____
11.	_____	_____	_____



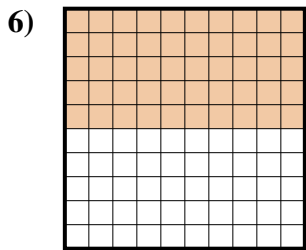
Bruch _____
 Dezimale _____
 Prozentangabe _____



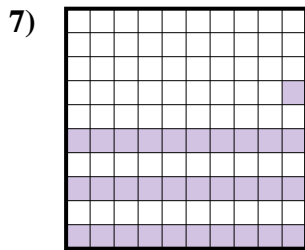
Bruch _____
 Dezimale _____
 Prozentangabe _____



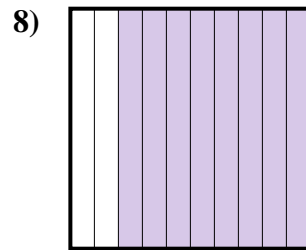
Bruch _____
 Dezimale _____
 Prozentangabe _____



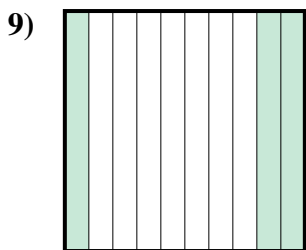
Bruch _____
 Dezimale _____
 Prozentangabe _____



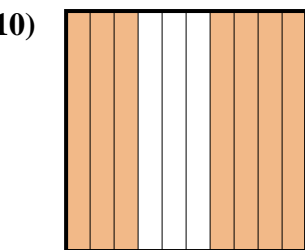
Bruch _____
 Dezimale _____
 Prozentangabe _____



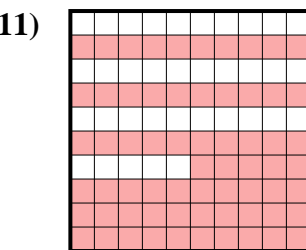
Bruch _____
 Dezimale _____
 Prozentangabe _____



Bruch _____
 Dezimale _____
 Prozentangabe _____



Bruch _____
 Dezimale _____
 Prozentangabe _____



Bruch _____
 Dezimale _____
 Prozentangabe _____

