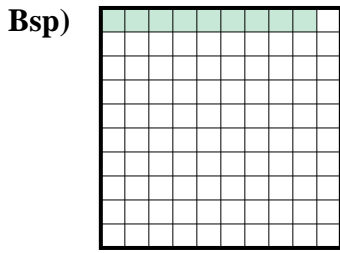
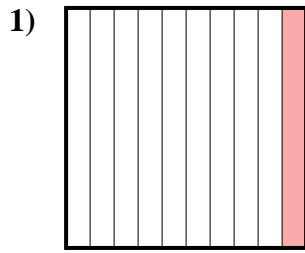




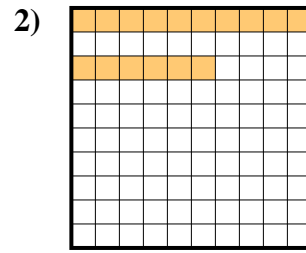
Stelle die schraffierte Fläche als Bruch, Dezimale und als Prozentangabe dar.



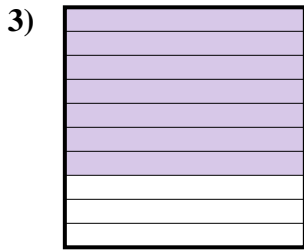
Bruch $\frac{9}{100}$
 Dezimale $0,09$
 Prozentangabe 9



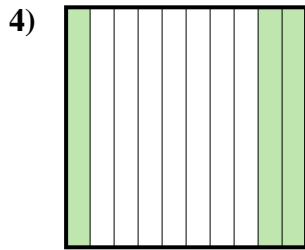
Bruch _____
 Dezimale _____
 Prozentangabe _____



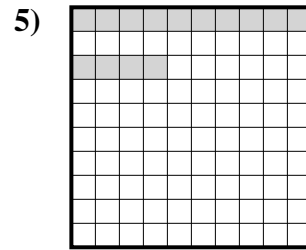
Bruch _____
 Dezimale _____
 Prozentangabe _____



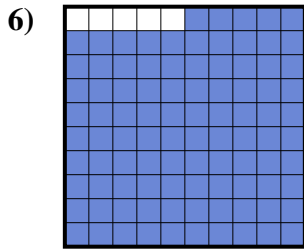
Bruch _____
 Dezimale _____
 Prozentangabe _____



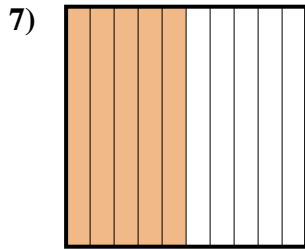
Bruch _____
 Dezimale _____
 Prozentangabe _____



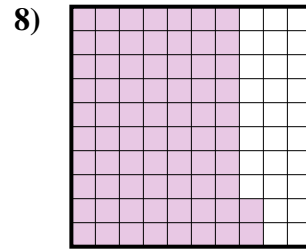
Bruch _____
 Dezimale _____
 Prozentangabe _____



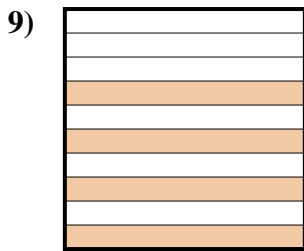
Bruch _____
 Dezimale _____
 Prozentangabe _____



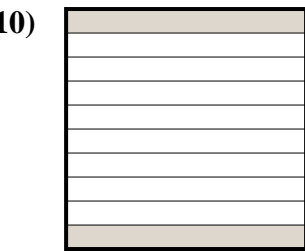
Bruch _____
 Dezimale _____
 Prozentangabe _____



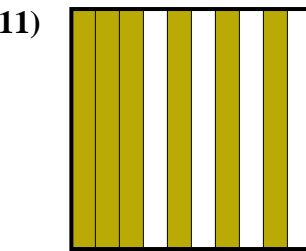
Bruch _____
 Dezimale _____
 Prozentangabe _____



Bruch _____
 Dezimale _____
 Prozentangabe _____



Bruch _____
 Dezimale _____
 Prozentangabe _____



Bruch _____
 Dezimale _____
 Prozentangabe _____

Antworten

Bsp. $\frac{9}{100}$ $0,09$ 9%

1. _____
2. _____
3. _____
4. _____
5. _____
6. _____
7. _____
8. _____
9. _____
10. _____
11. _____

