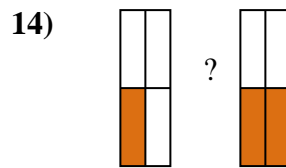
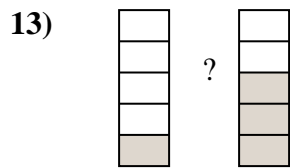
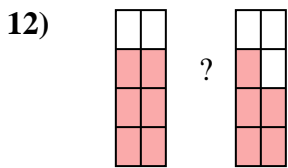
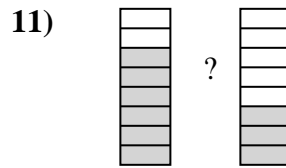
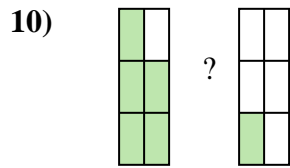
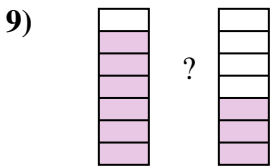
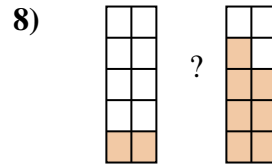
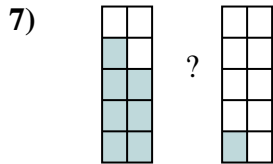
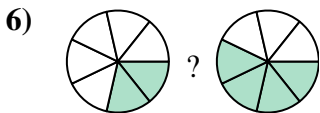
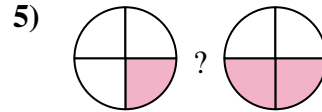
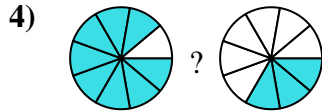
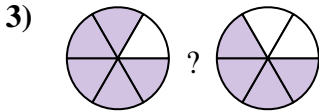
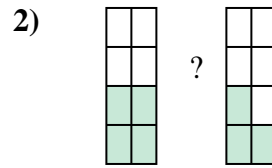

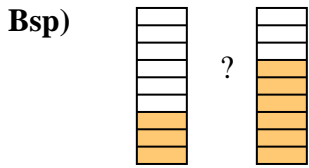




Benutze '<', '>' oder '=' um die Brüche miteinander zu vergleichen.



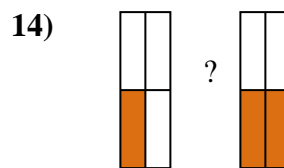
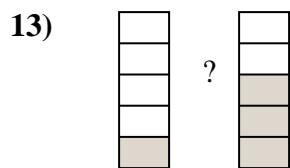
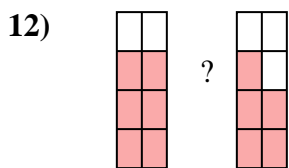
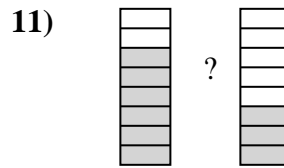
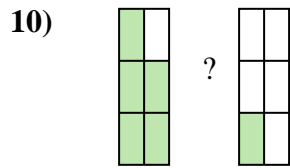
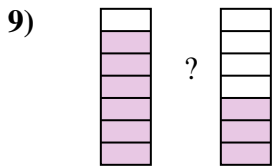
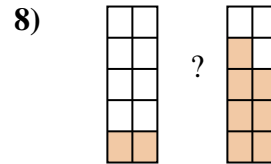
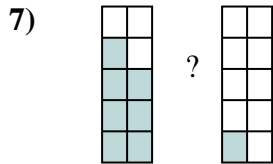
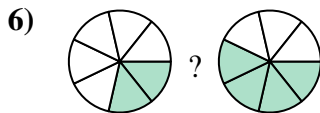
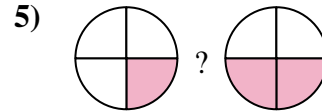
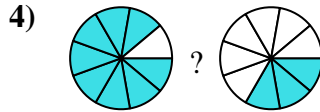
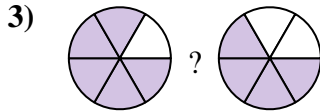
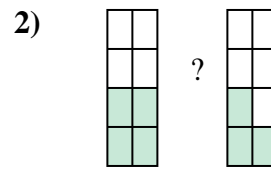
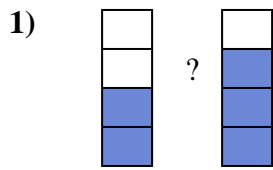
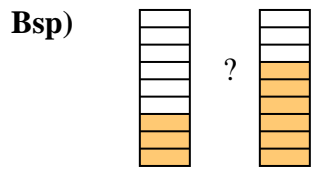
Antworten

Bsp. $\frac{3}{6}$ < $\frac{5}{6}$

1. _____
2. _____
3. _____
4. _____
5. _____
6. _____
7. _____
8. _____
9. _____
10. _____
11. _____
12. _____
13. _____
14. _____



Benutze '<', '>' oder '=' um die Brüche miteinander zu vergleichen.



Antworten

Bsp.	$\frac{3}{9}$	<	$\frac{6}{9}$
1.	$\frac{2}{4}$	<	$\frac{3}{4}$
2.	$\frac{4}{8}$	>	$\frac{3}{8}$
3.	$\frac{5}{6}$	>	$\frac{4}{6}$
4.	$\frac{8}{9}$	>	$\frac{3}{9}$
5.	$\frac{1}{4}$	<	$\frac{2}{4}$
6.	$\frac{2}{7}$	<	$\frac{4}{7}$
7.	$\frac{7}{10}$	>	$\frac{1}{10}$
8.	$\frac{2}{10}$	<	$\frac{7}{10}$
9.	$\frac{6}{7}$	>	$\frac{3}{7}$
10.	$\frac{5}{6}$	>	$\frac{1}{6}$
11.	$\frac{6}{8}$	>	$\frac{3}{8}$
12.	$\frac{6}{8}$	>	$\frac{5}{8}$
13.	$\frac{1}{5}$	<	$\frac{3}{5}$
14.	$\frac{1}{4}$	<	$\frac{2}{4}$