



Suche zu jeder Gleichung den visuellen Gegenpart und finde die numerische Antwort.

Antworten

Bsp) $\frac{1}{8} + \frac{1}{8} + \frac{1}{8} + \frac{1}{8} + \frac{1}{8}$


Bsp. **J**

1) $\frac{1}{5} + \frac{1}{5} + \frac{1}{5}$



1. _____

2) $\frac{1}{4} + \frac{1}{4}$




2. _____

3) $\frac{1}{5} + \frac{1}{5} + \frac{1}{5} + \frac{1}{5}$




3. _____

4) $\frac{1}{8} + \frac{1}{8}$



4. _____

5) $\frac{1}{4} + \frac{1}{4} + \frac{1}{4}$




5. _____

6) $\frac{1}{5} + \frac{1}{5}$




6. _____

7) $\frac{1}{8} + \frac{1}{8} + \frac{1}{8} + \frac{1}{8} + \frac{1}{8} + \frac{1}{8}$




7. _____

8) $\frac{1}{6} + \frac{1}{6} + \frac{1}{6} + \frac{1}{6} + \frac{1}{6}$



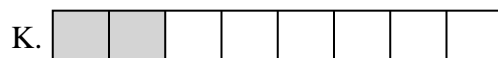
8. _____

9) $\frac{1}{6} + \frac{1}{6} + \frac{1}{6} + \frac{1}{6}$




9. _____

10) $\frac{1}{12} + \frac{1}{12} + \frac{1}{12} + \frac{1}{12} + \frac{1}{12} + \frac{1}{12}$



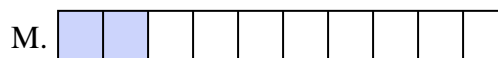
10. _____

11) $\frac{1}{10} + \frac{1}{10} + \frac{1}{10}$



11. _____

12) $\frac{1}{10} + \frac{1}{10} + \frac{1}{10} + \frac{1}{10} + \frac{1}{10}$




12. _____

13) $\frac{1}{3} + \frac{1}{3}$



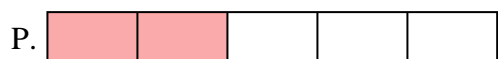
13. _____

14) $\frac{1}{8} + \frac{1}{8} + \frac{1}{8} + \frac{1}{8}$



14. _____

15) $\frac{1}{10} + \frac{1}{10}$



15. _____



Suche zu jeder Gleichung den visuellen Gegenpart und finde die numerische Antwort.

Antworten

Bsp) $\frac{1}{8} + \frac{1}{8} + \frac{1}{8} + \frac{1}{8} + \frac{1}{8}$

Bsp. **J**


1) $\frac{1}{5} + \frac{1}{5} + \frac{1}{5}$

1. **L**

2) $\frac{1}{4} + \frac{1}{4}$

2. **D**


3) $\frac{1}{5} + \frac{1}{5} + \frac{1}{5} + \frac{1}{5}$

3. **H**

4) $\frac{1}{8} + \frac{1}{8}$

4. **K**


5) $\frac{1}{4} + \frac{1}{4} + \frac{1}{4}$

5. **E**


6) $\frac{1}{5} + \frac{1}{5}$

6. **P**


7) $\frac{1}{8} + \frac{1}{8} + \frac{1}{8} + \frac{1}{8} + \frac{1}{8} + \frac{1}{8}$

7. **I**

8) $\frac{1}{6} + \frac{1}{6} + \frac{1}{6} + \frac{1}{6} + \frac{1}{6}$

8. **G**


9) $\frac{1}{6} + \frac{1}{6} + \frac{1}{6} + \frac{1}{6}$

9. **A**

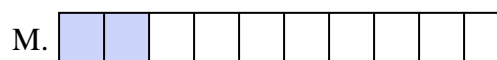
10) $\frac{1}{12} + \frac{1}{12} + \frac{1}{12} + \frac{1}{12} + \frac{1}{12} + \frac{1}{12}$

10. **O**

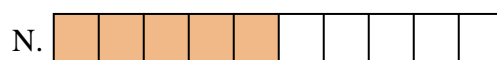
11) $\frac{1}{10} + \frac{1}{10} + \frac{1}{10}$

11. **B**

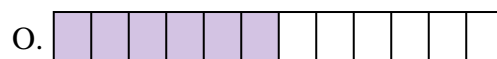
12) $\frac{1}{10} + \frac{1}{10} + \frac{1}{10} + \frac{1}{10} + \frac{1}{10}$

12. **N**

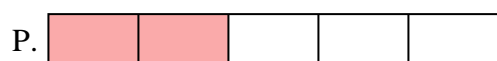
13) $\frac{1}{3} + \frac{1}{3}$

13. **F**

14) $\frac{1}{8} + \frac{1}{8} + \frac{1}{8} + \frac{1}{8}$

14. **C**

15) $\frac{1}{10} + \frac{1}{10}$

15. **M**